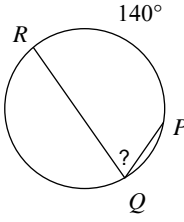
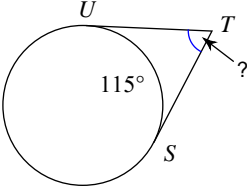
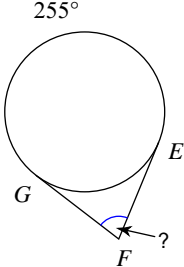


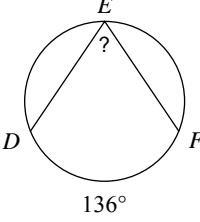
Assignment

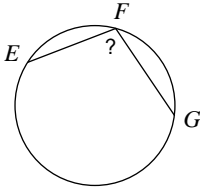
Find the measure of the arc or angle indicated. Assume that lines which appear tangent are tangent.

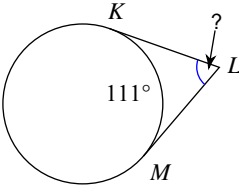
- 1) 

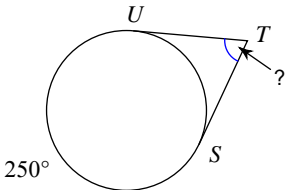
A) 70° B) 55°
C) 80° D) 90°
- 2) 

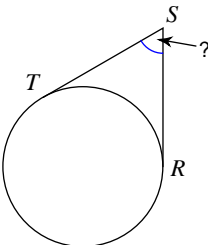
A) 65° B) 68°
C) 85° D) 76°
- 3) 

A) 60° B) 40°
C) 45° D) 75°
- 4) 

A) 68° B) 40°
C) 42° D) 49°
- 5) 

A) 133° B) 110°
C) 103° D) 108°
- 6) 

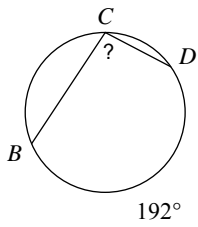
A) 38° B) 82°
C) 75° D) 69°
- 7) 

A) 80° B) 70°
C) 40° D) 66°
- 8) 

A) 45° B) 60°
C) 75° D) 54°

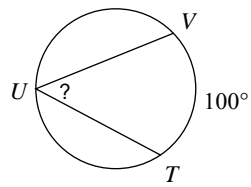


9)



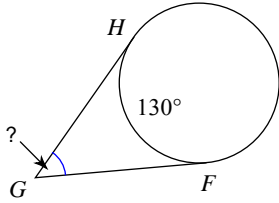
- A) 96° B) 141°
 C) 104° D) 136°

10)



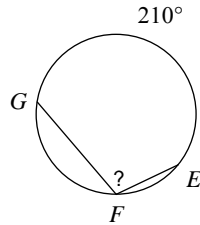
- A) 65° B) 45°
 C) 59° D) 50°

11)



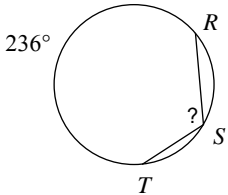
- A) 60° B) 50°
 C) 65° D) 70°

12)



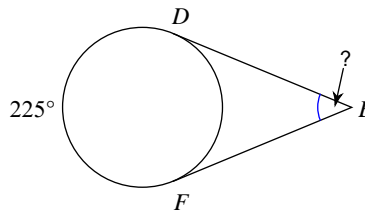
- A) 100° B) 110°
 C) 105° D) 150°

13)



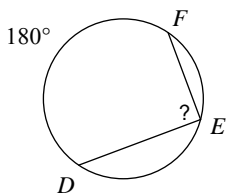
- A) 118° B) 128°
 C) 125° D) 120°

14)



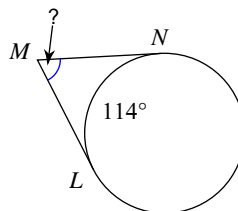
- A) 46° B) 60°
 C) 55° D) 45°

15)



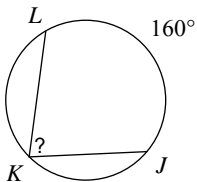
- A) 120° B) 89°
 C) 70° D) 90°

16)



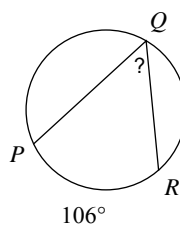
- A) 65° B) 70°
 C) 66° D) 37°

17)



- A) 80° B) 42°
 C) 65° D) 55°

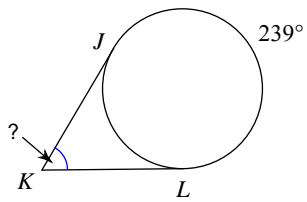
18)



- A) 73° B) 32°
 C) 53° D) 71°

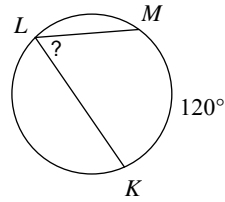


19)



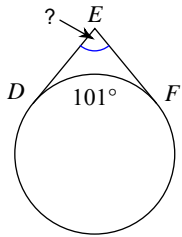
- A) 39° B) 67°
 C) 87° D) 59°

20)



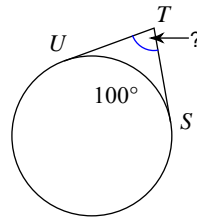
- A) 75° B) 80°
 C) 42° D) 60°

21)



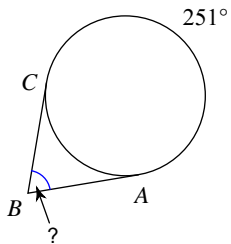
- A) 89° B) 43°
 C) 41° D) 79°

22)



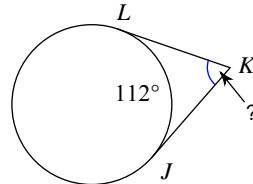
- A) 60° B) 82°
 C) 70° D) 80°

23)



- A) 45° B) 71°
 C) 78° D) 90°

24)



- A) 68° B) 86°
 C) 42° D) 77°



Answers to Assignment (ID: 1)

- 1) A
- 5) C
- 9) A
- 13) A
- 17) A
- 21) D

- 2) A
- 6) D
- 10) D
- 14) D
- 18) C
- 22) D

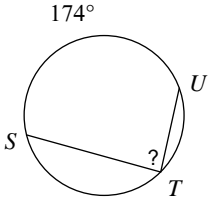
- 3) D
- 7) B
- 11) B
- 15) D
- 19) D
- 23) B

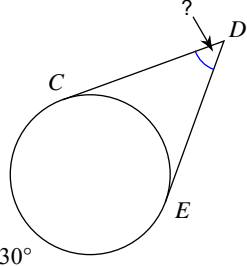
- 4) A
- 8) B
- 12) C
- 16) C
- 20) D
- 24) A

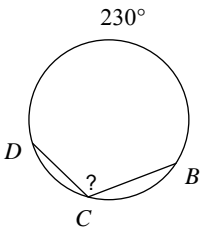


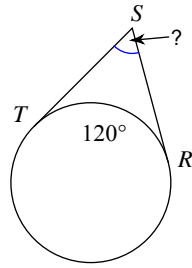
Assignment

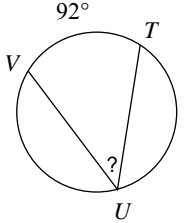
Find the measure of the arc or angle indicated. Assume that lines which appear tangent are tangent.

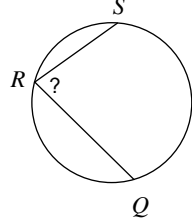
1) 
 A) 86° B) 68°
 C) 87° D) 64°

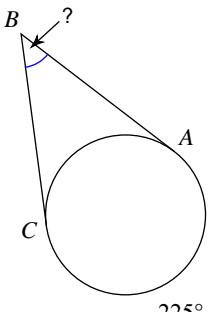
2) 
 A) 58° B) 35°
 C) 50° D) 39°

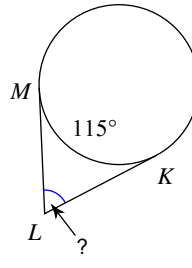
3) 
 A) 115° B) 140°
 C) 95° D) 150°

4) 
 A) 60° B) 50°
 C) 85° D) 38°

5) 
 A) 40° B) 56°
 C) 46° D) 61°

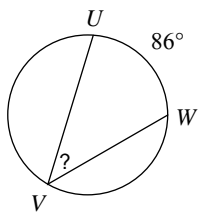
6) 
 A) 67° B) 65°
 C) 50° D) 80°

7) 
 A) 55° B) 30°
 C) 40° D) 45°

8) 
 A) 90° B) 65°
 C) 85° D) 45°

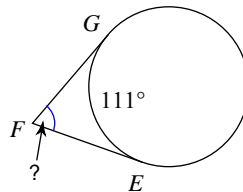


9)



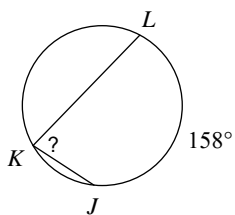
- A) 33° B) 43°
 C) 50° D) 57°

10)



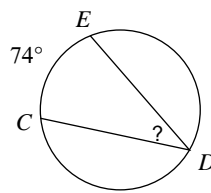
- A) 47° B) 69°
 C) 44° D) 79°

11)



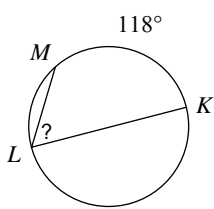
- A) 73° B) 79°
 C) 64° D) 80°

12)



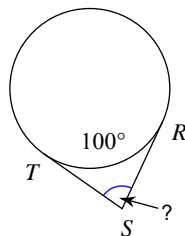
- A) 38° B) 33°
 C) 48° D) 37°

13)



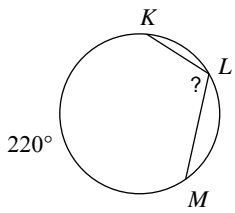
- A) 74° B) 49°
 C) 59° D) 87°

14)



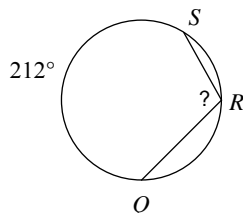
- A) 61° B) 60°
 C) 45° D) 80°

15)



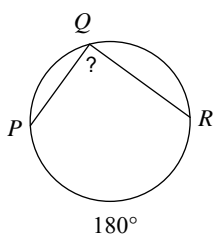
- A) 110° B) 155°
 C) 120° D) 119°

16)



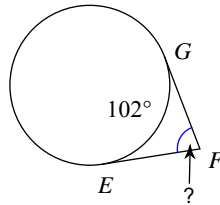
- A) 142° B) 127°
 C) 106° D) 115°

17)



- A) 85° B) 95°
 C) 90° D) 80°

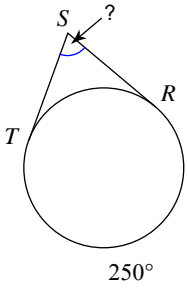
18)



- A) 59° B) 51°
 C) 78° D) 39°

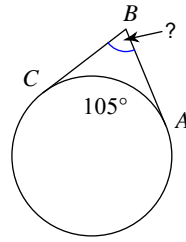


19)



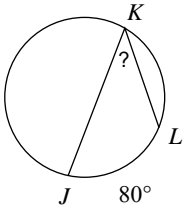
- A) 45° B) 53°
 C) 70° D) 40°

20)



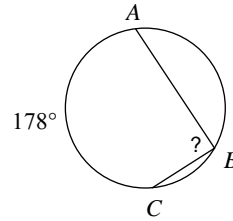
- A) 88° B) 60°
 C) 70° D) 75°

21)



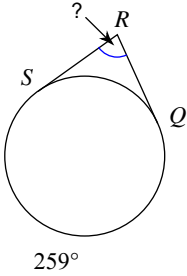
- A) 35° B) 36°
 C) 40° D) 45°

22)



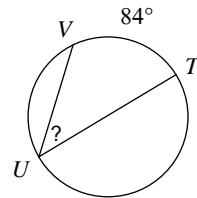
- A) 69° B) 65°
 C) 89° D) 72°

23)



- A) 57° B) 79°
 C) 64° D) 59°

24)



- A) 37° B) 42°
 C) 31° D) 39°



Answers to Assignment (ID: 2)

- 1) C
- 5) C
- 9) B
- 13) C
- 17) C
- 21) C

- 2) C
- 6) D
- 10) B
- 14) D
- 18) C
- 22) C

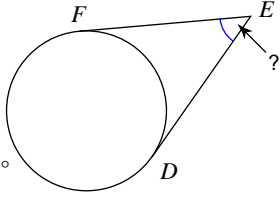
- 3) A
- 7) D
- 11) B
- 15) A
- 19) C
- 23) B

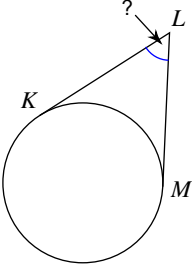
- 4) A
- 8) B
- 12) D
- 16) C
- 20) D
- 24) B

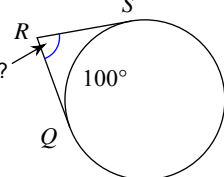


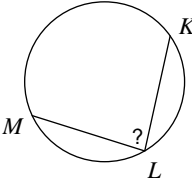
Assignment

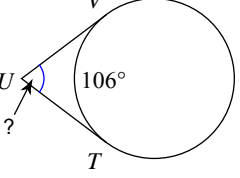
Find the measure of the arc or angle indicated. Assume that lines which appear tangent are tangent.

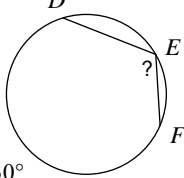
1) 
 A) 40° B) 65°
 C) 70° D) 50°

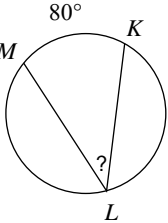
2) 
 A) 40° B) 55°
 C) 82° D) 37°

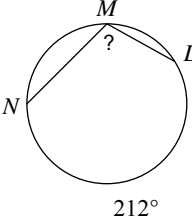
3) 
 A) 44° B) 51°
 C) 90° D) 80°

4) 
 A) 80° B) 45°
 C) 85° D) 60°

5) 
 A) 51° B) 86°
 C) 74° D) 42°

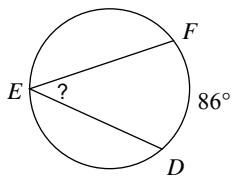
6) 
 A) 118° B) 170°
 C) 115° D) 130°

7) 
 A) 39° B) 45°
 C) 40° D) 60°

8) 
 A) 153° B) 138°
 C) 106° D) 132°

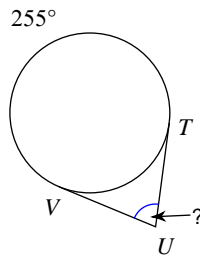


9)



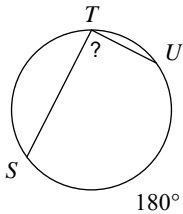
- A) 46° B) 43°
 C) 36° D) 32°

10)



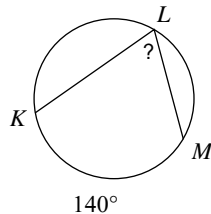
- A) 75° B) 90°
 C) 46° D) 62°

11)



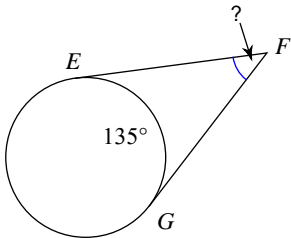
- A) 115° B) 50°
 C) 130° D) 90°

12)



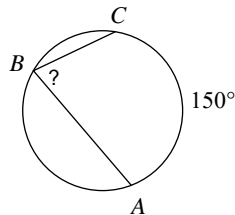
- A) 70° B) 45°
 C) 75° D) 90°

13)



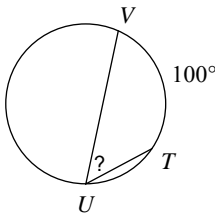
- A) 37° B) 45°
 C) 35° D) 65°

14)



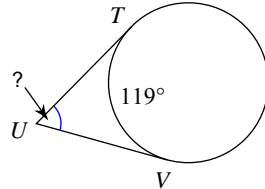
- A) 65° B) 75°
 C) 88° D) 70°

15)



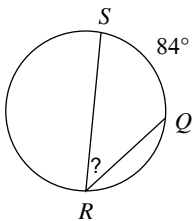
- A) 50° B) 35°
 C) 60° D) 70°

16)



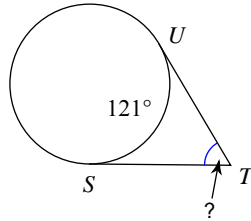
- A) 40° B) 61°
 C) 44° D) 56°

17)



- A) 42° B) 39°
 C) 45° D) 54°

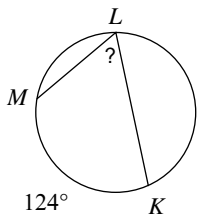
18)



- A) 34° B) 59°
 C) 72° D) 53°

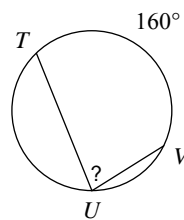


19)



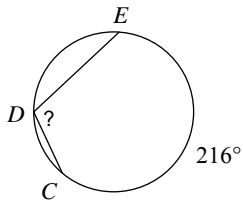
- A) 75° B) 70°
 C) 82° D) 62°

20)



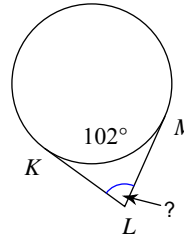
- A) 90° B) 45°
 C) 55° D) 80°

21)



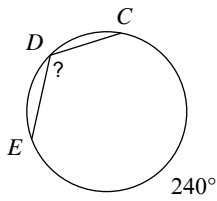
- A) 154° B) 147°
 C) 142° D) 108°

22)



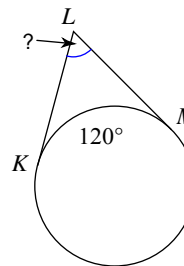
- A) 81° B) 78°
 C) 90° D) 49°

23)



- A) 120° B) 95°
 C) 125° D) 105°

24)



- A) 90° B) 75°
 C) 55° D) 60°



Answers to Assignment (ID: 3)

1) D
5) C
9) B
13) B
17) A
21) D

2) B
6) C
10) A
14) B
18) B
22) B

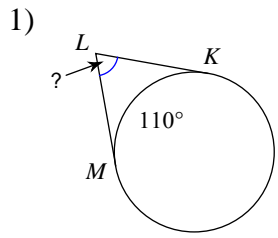
3) D
7) C
11) D
15) A
19) D
23) A

4) C
8) C
12) A
16) B
20) D
24) D

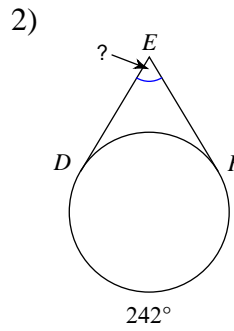


Assignment

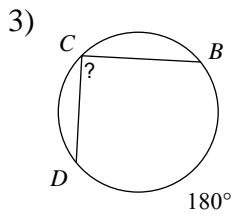
Find the measure of the arc or angle indicated. Assume that lines which appear tangent are tangent.



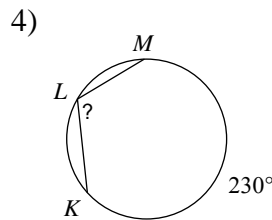
- A) 80°
- B) 55°
- C) 70°
- D) 58°



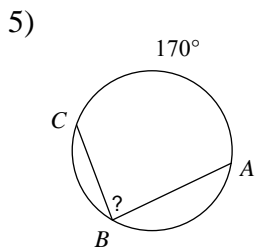
- A) 62°
- B) 81°
- C) 58°
- D) 69°



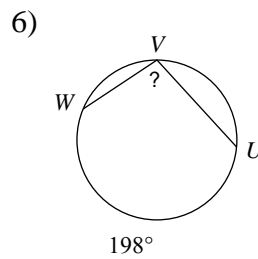
- A) 105°
- B) 95°
- C) 80°
- D) 90°



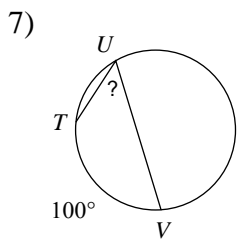
- A) 125°
- B) 130°
- C) 123°
- D) 115°



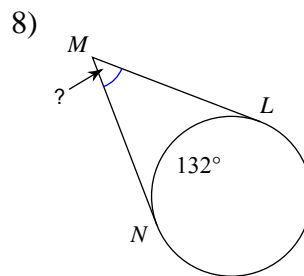
- A) 65°
- B) 85°
- C) 70°
- D) 45°



- A) 142°
- B) 147°
- C) 124°
- D) 99°



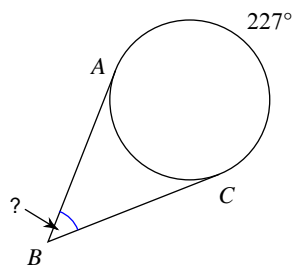
- A) 55°
- B) 50°
- C) 65°
- D) 75°



- A) 33°
- B) 48°
- C) 42°
- D) 70°

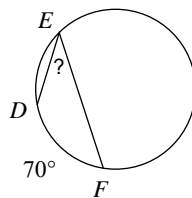


9)



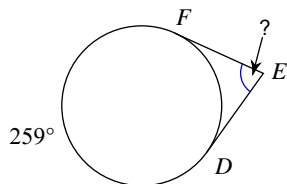
- A) 47° B) 33°
 C) 45° D) 57°

10)



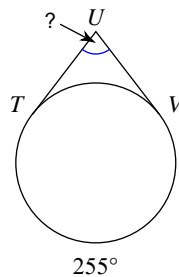
- A) 31° B) 45°
 C) 35° D) 50°

11)



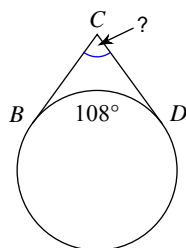
- A) 61° B) 89°
 C) 70° D) 79°

12)



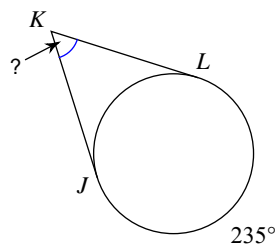
- A) 60° B) 85°
 C) 69° D) 75°

13)



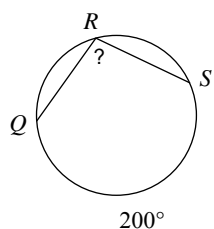
- A) 82° B) 72°
 C) 86° D) 88°

14)



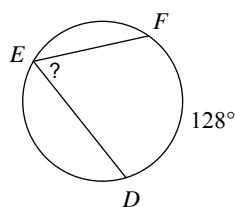
- A) 45° B) 80°
 C) 60° D) 55°

15)



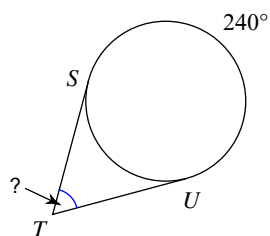
- A) 105° B) 104°
 C) 115° D) 100°

16)



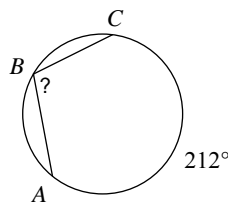
- A) 71° B) 84°
 C) 64° D) 85°

17)



- A) 70° B) 60°
 C) 86° D) 75°

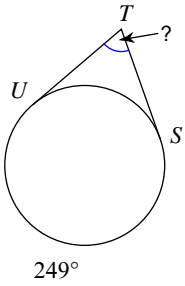
18)



- A) 106° B) 158°
 C) 134° D) 144°

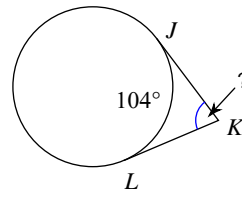


19)



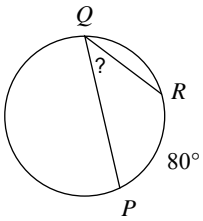
- A) 69°
- B) 65°
- C) 63°
- D) 59°

20)



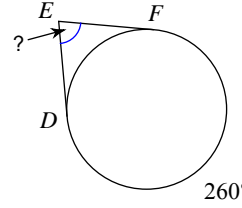
- A) 39°
- B) 48°
- C) 69°
- D) 76°

21)



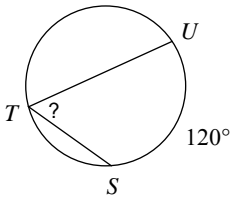
- A) 40°
- B) 55°
- C) 30°
- D) 60°

22)



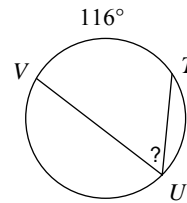
- A) 62°
- B) 70°
- C) 65°
- D) 80°

23)



- A) 75°
- B) 35°
- C) 71°
- D) 60°

24)



- A) 58°
- B) 65°
- C) 54°
- D) 73°



Answers to Assignment (ID: 4)

1) C
5) B
9) A
13) B
17) B
21) A

2) A
6) D
10) C
14) D
18) A
22) D

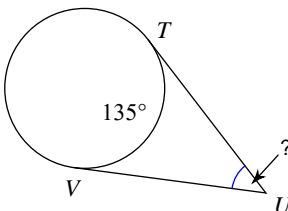
3) D
7) B
11) D
15) D
19) A
23) D

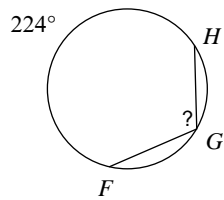
4) D
8) B
12) D
16) C
20) D
24) A

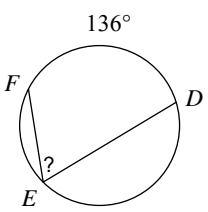


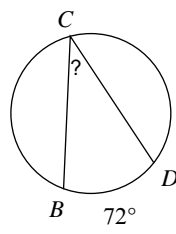
Assignment

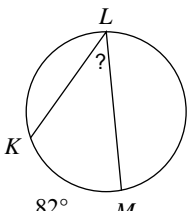
Find the measure of the arc or angle indicated. Assume that lines which appear tangent are tangent.

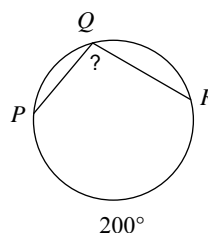
1) 
 A) 45° B) 35°
 C) 60° D) 31°

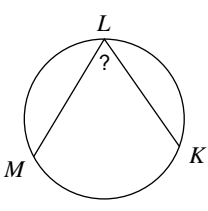
2) 
 A) 116° B) 112°
 C) 144° D) 164°

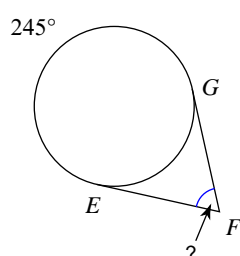
3) 
 A) 40° B) 55°
 C) 68° D) 69°

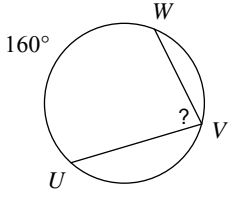
4) 
 A) 37° B) 44°
 C) 54° D) 36°

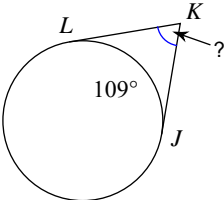
5) 
 A) 42° B) 46°
 C) 41° D) 39°

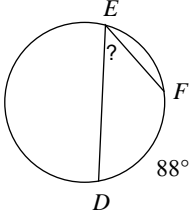
6) 
 A) 95° B) 125°
 C) 100° D) 109°

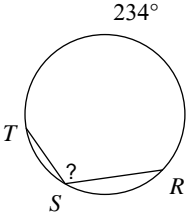
7) 
 A) 52° B) 35°
 C) 61° D) 66°

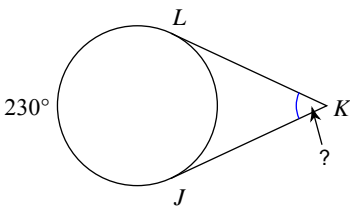
8) 
 A) 40° B) 70°
 C) 35° D) 65°

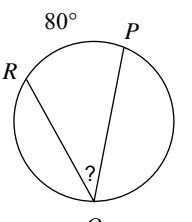
- 9) 
 A) 82° B) 80°
 C) 70° D) 75°

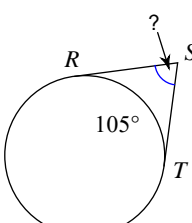
- 10) 
 A) 81° B) 70°
 C) 71° D) 60°

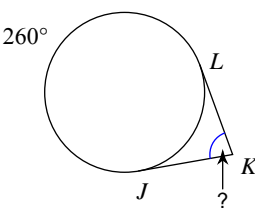
- 11) 
 A) 50° B) 44°
 C) 36° D) 56°

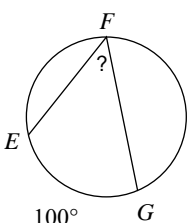
- 12) 
 A) 117° B) 161°
 C) 91° D) 118°

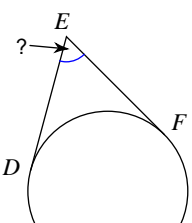
- 13) 
 A) 50° B) 55°
 C) 62° D) 70°

- 14) 
 A) 50° B) 54°
 C) 40° D) 35°

- 15) 
 A) 90° B) 70°
 C) 55° D) 75°

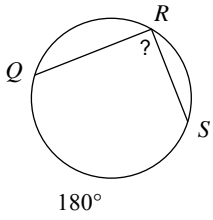
- 16) 
 A) 45° B) 75°
 C) 80° D) 65°

- 17) 
 A) 55° B) 40°
 C) 32° D) 50°

- 18) 
 A) 50° B) 70°
 C) 60° D) 63°

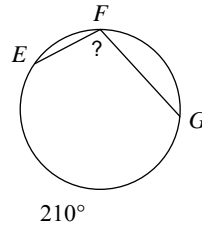


19)



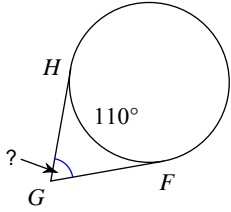
- A) 125° B) 85°
 C) 90° D) 65°

20)



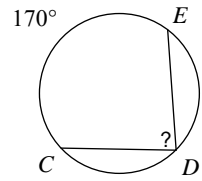
- A) 130° B) 105°
 C) 140° D) 100°

21)



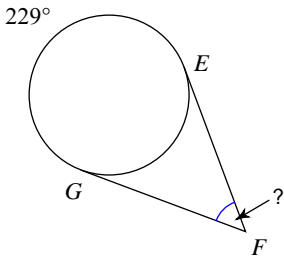
- A) 70° B) 89°
 C) 65° D) 50°

22)



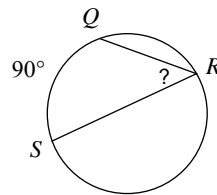
- A) 85° B) 68°
 C) 50° D) 55°

23)



- A) 48° B) 69°
 C) 74° D) 49°

24)



- A) 40° B) 45°
 C) 53° D) 55°



Answers to Assignment (ID: 5)

1) A
5) C
9) B
13) A
17) D
21) A

2) B
6) C
10) C
14) C
18) C
22) A

3) C
7) D
11) B
15) D
19) C
23) D

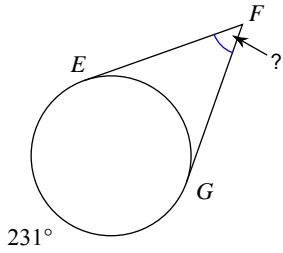
4) D
8) D
12) A
16) C
20) B
24) B



Assignment

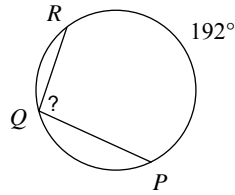
Find the measure of the arc or angle indicated. Assume that lines which appear tangent are tangent.

1)



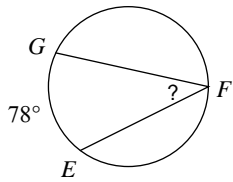
- A) 76°
- B) 45°
- C) 71°
- D) 51°

2)



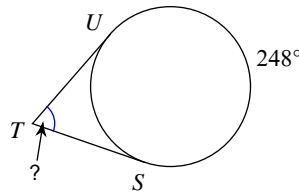
- A) 96°
- B) 141°
- C) 107°
- D) 138°

3)



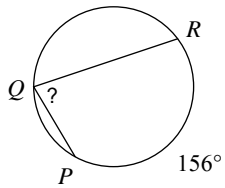
- A) 54°
- B) 55°
- C) 39°
- D) 44°

4)



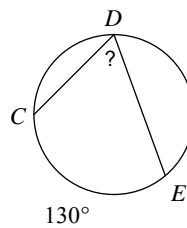
- A) 44°
- B) 35°
- C) 55°
- D) 68°

5)



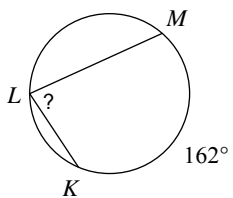
- A) 89°
- B) 63°
- C) 78°
- D) 43°

6)



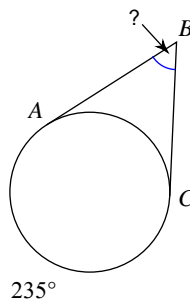
- A) 65°
- B) 60°
- C) 45°
- D) 50°

7)



- A) 60°
- B) 69°
- C) 81°
- D) 75°

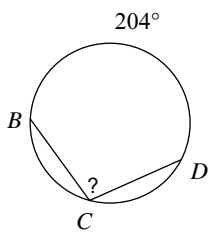
8)



- A) 65°
- B) 63°
- C) 55°
- D) 75°

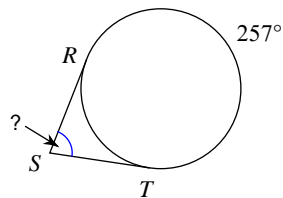


9)



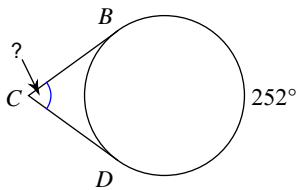
- A) 103° B) 93°
 C) 123° D) 102°

10)



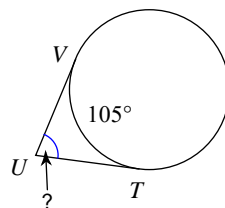
- A) 57° B) 66°
 C) 77° D) 42°

11)



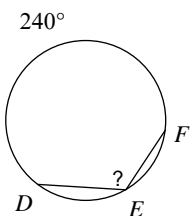
- A) 41° B) 72°
 C) 39° D) 78°

12)



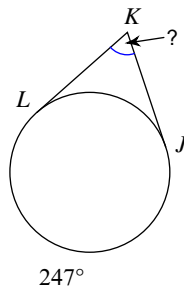
- A) 90° B) 50°
 C) 75° D) 70°

13)



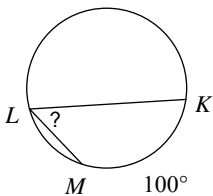
- A) 173° B) 120°
 C) 150° D) 155°

14)



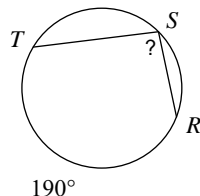
- A) 42° B) 67°
 C) 56° D) 45°

15)



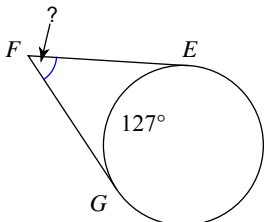
- A) 55° B) 72°
 C) 50° D) 45°

16)



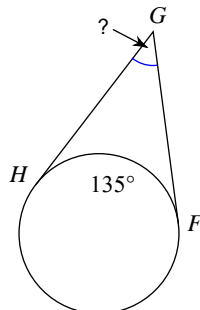
- A) 120° B) 95°
 C) 137° D) 115°

17)



- A) 53° B) 72°
 C) 78° D) 51°

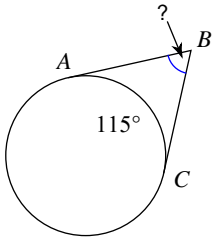
18)



- A) 40° B) 45°
 C) 35° D) 30°

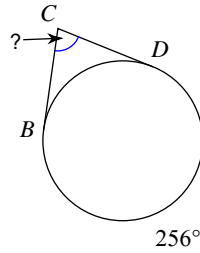


19)



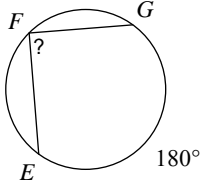
- A) 45° B) 65°
 C) 55° D) 70°

20)



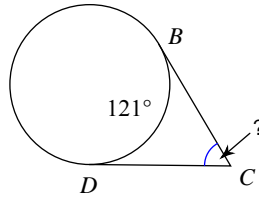
- A) 70° B) 71°
 C) 82° D) 76°

21)



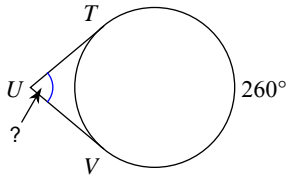
- A) 55° B) 90°
 C) 70° D) 131°

22)



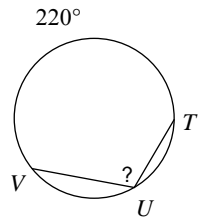
- A) 54° B) 34°
 C) 59° D) 74°

23)



- A) 50° B) 80°
 C) 70° D) 83°

24)



- A) 95° B) 110°
 C) 115° D) 165°



Answers to Assignment (ID: 6)

1) D
5) C
9) D
13) B
17) A
21) B

2) A
6) A
10) C
14) B
18) B
22) C

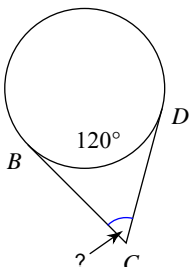
3) C
7) C
11) B
15) C
19) B
23) B

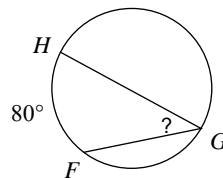
4) D
8) C
12) C
16) B
20) D
24) B

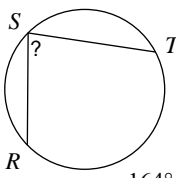


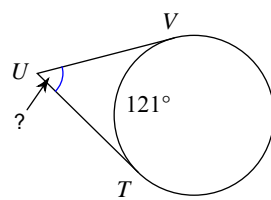
Assignment

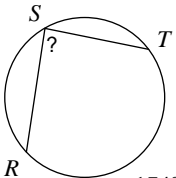
Find the measure of the arc or angle indicated. Assume that lines which appear tangent are tangent.

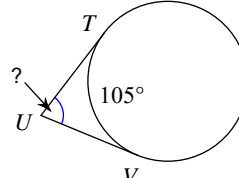
- 1) 

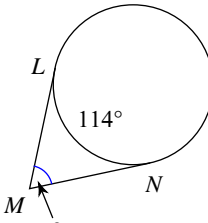
A) 50° B) 45°
C) 60° D) 55°
- 2) 

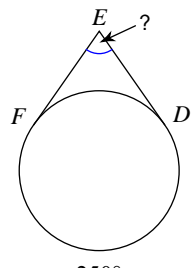
A) 50° B) 49°
C) 40° D) 32°
- 3) 

A) 90° B) 66°
C) 82° D) 77°
- 4) 

A) 32° B) 45°
C) 67° D) 59°
- 5) 

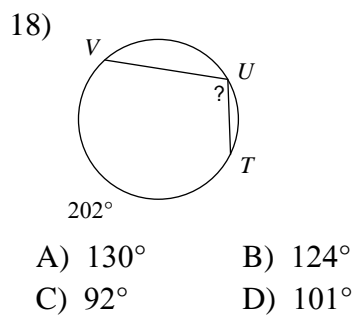
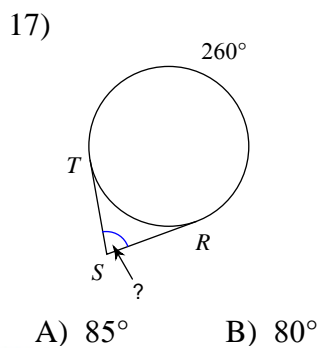
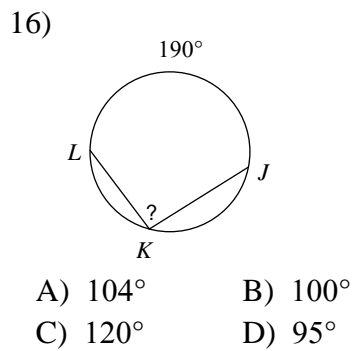
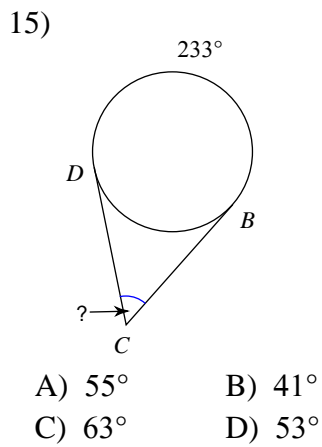
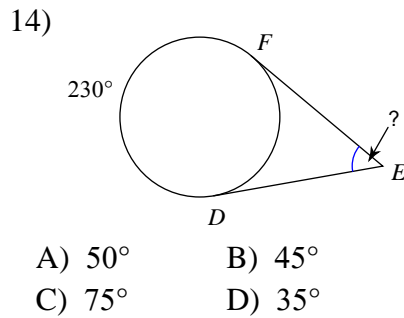
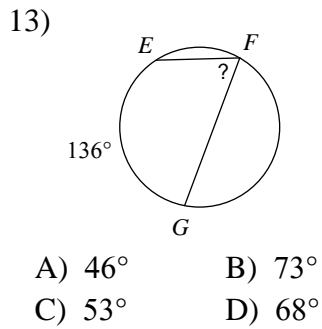
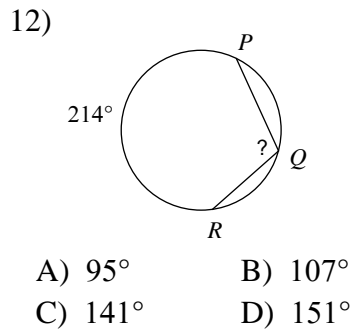
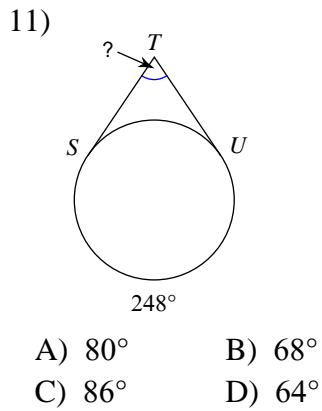
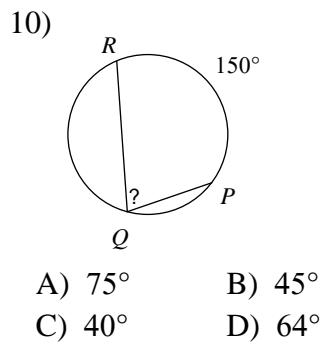
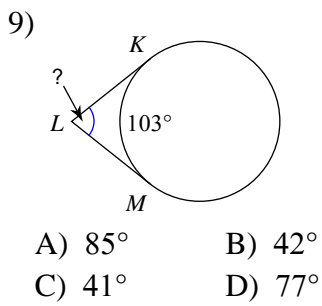
A) 87° B) 73°
C) 90° D) 86°
- 6) 

A) 68° B) 80°
C) 75° D) 55°
- 7) 

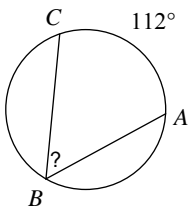
A) 66° B) 64°
C) 80° D) 45°
- 8) 

A) 70° B) 44°
C) 43° D) 50°



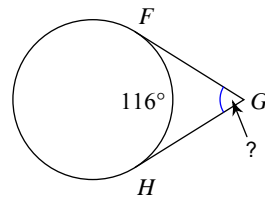


19)



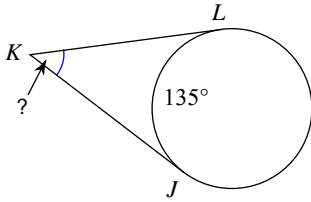
- A) 56° B) 40°
 C) 79° D) 59°

20)



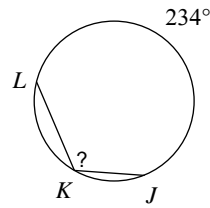
- A) 32° B) 64°
 C) 67° D) 75°

21)



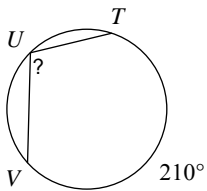
- A) 50° B) 46°
 C) 55° D) 45°

22)



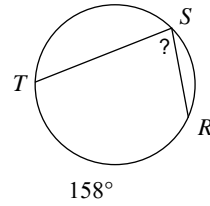
- A) 97° B) 117°
 C) 95° D) 161°

23)



- A) 108° B) 105°
 C) 130° D) 140°

24)



- A) 42° B) 79°
 C) 76° D) 57°



Answers to Assignment (ID: 7)

- 1) C
- 5) A
- 9) D
- 13) D
- 17) B
- 21) D

- 2) C
- 6) C
- 10) A
- 14) A
- 18) D
- 22) B

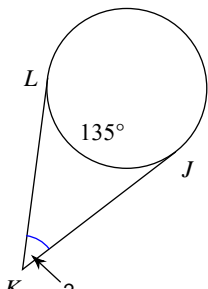
- 3) C
- 7) A
- 11) B
- 15) D
- 19) A
- 23) B

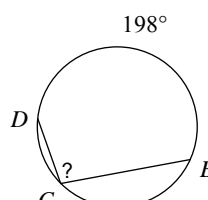
- 4) D
- 8) A
- 12) B
- 16) D
- 20) B
- 24) B

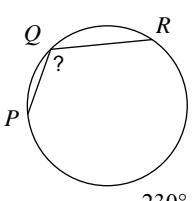


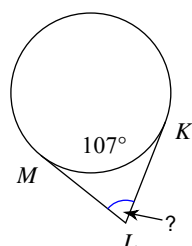
Assignment

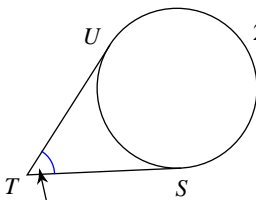
Find the measure of the arc or angle indicated. Assume that lines which appear tangent are tangent.

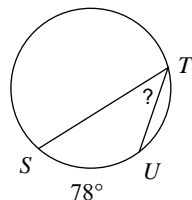
1) 
 A) 65° B) 31°
 C) 45° D) 50°

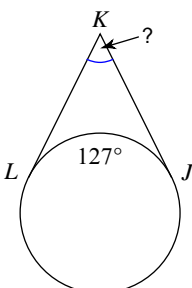
2) 
 A) 144° B) 106°
 C) 99° D) 145°

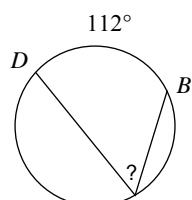
3) 
 A) 115° B) 105°
 C) 90° D) 116°

4) 
 A) 70° B) 62°
 C) 83° D) 73°

5) 
 A) 77° B) 55°
 C) 65° D) 31°

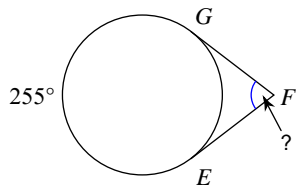
6) 
 A) 33° B) 46°
 C) 39° D) 56°

7) 
 A) 32° B) 50°
 C) 78° D) 53°

8) 
 A) 34° B) 37°
 C) 57° D) 56°

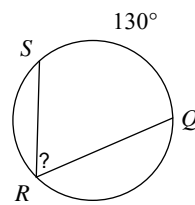


9)



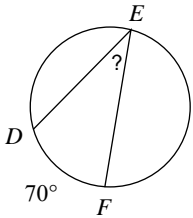
- A) 70° B) 65°
 C) 75° D) 58°

10)



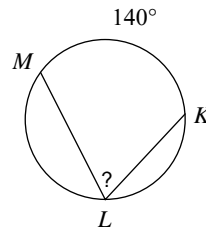
- A) 35° B) 65°
 C) 49° D) 58°

11)



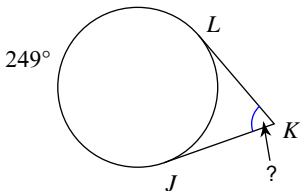
- A) 30° B) 44°
 C) 40° D) 35°

12)



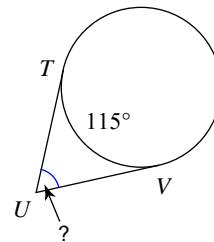
- A) 60° B) 70°
 C) 35° D) 79°

13)



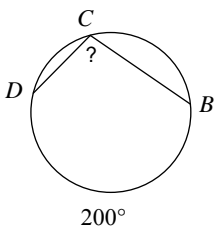
- A) 65° B) 57°
 C) 44° D) 69°

14)



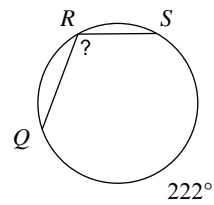
- A) 65° B) 70°
 C) 40° D) 62°

15)



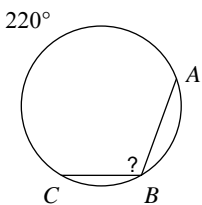
- A) 129° B) 100°
 C) 140° D) 135°

16)



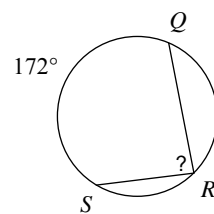
- A) 140° B) 111°
 C) 102° D) 131°

17)



- A) 105° B) 130°
 C) 110° D) 100°

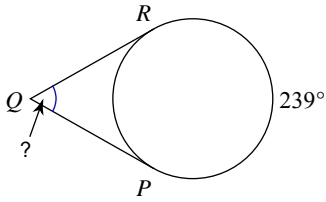
18)



- A) 54° B) 86°
 C) 90° D) 57°

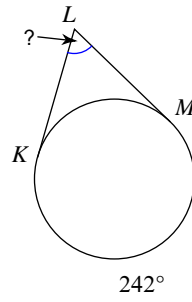


19)



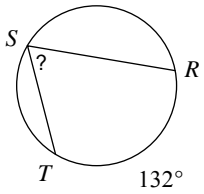
- A) 31° B) 54°
 C) 59° D) 80°

20)



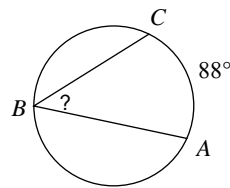
- A) 62° B) 42°
 C) 32° D) 57°

21)



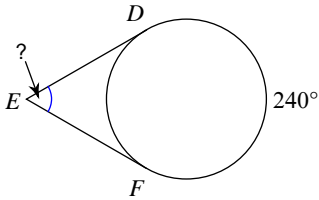
- A) 47° B) 68°
 C) 72° D) 66°

22)



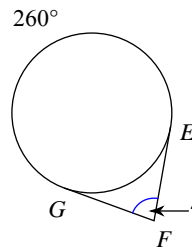
- A) 48° B) 44°
 C) 38° D) 47°

23)



- A) 60° B) 62°
 C) 30° D) 75°

24)



- A) 80° B) 87°
 C) 60° D) 63°



Answers to Assignment (ID: 8)

- 1) C
- 5) B
- 9) C
- 13) D
- 17) C
- 21) D

- 2) C
- 6) C
- 10) B
- 14) A
- 18) B
- 22) B

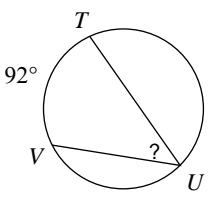
- 3) A
- 7) D
- 11) D
- 15) B
- 19) C
- 23) A

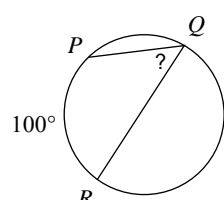
- 4) D
- 8) D
- 12) B
- 16) B
- 20) A
- 24) A

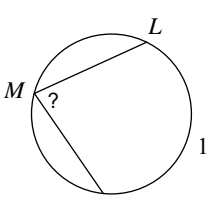


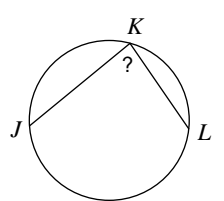
Assignment

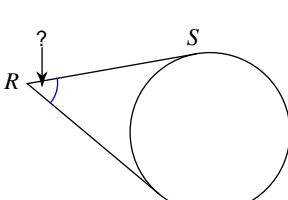
Find the measure of the arc or angle indicated. Assume that lines which appear tangent are tangent.

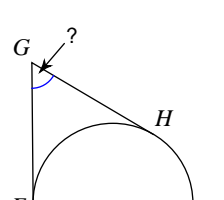
1) 
 A) 46° B) 42°
 C) 49° D) 65°

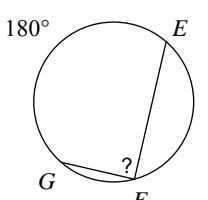
2) 
 A) 70° B) 40°
 C) 65° D) 50°

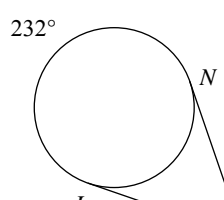
3) 
 A) 80° B) 65°
 C) 50° D) 75°

4) 
 A) 80° B) 45°
 C) 85° D) 49°

5) 
 A) 50° B) 45°
 C) 47° D) 70°

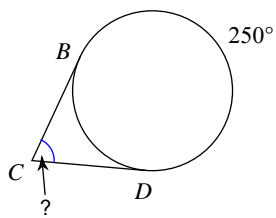
6) 
 A) 55° B) 79°
 C) 59° D) 40°

7) 
 A) 90° B) 92°
 C) 135° D) 100°

8) 
 A) 52° B) 51°
 C) 76° D) 67°

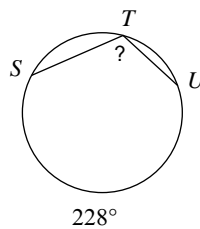


9)



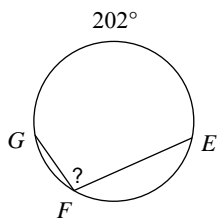
- A) 35° B) 70°
 C) 63° D) 60°

10)



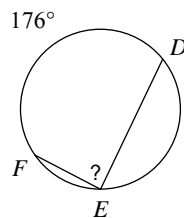
- A) 108° B) 145°
 C) 114° D) 127°

11)



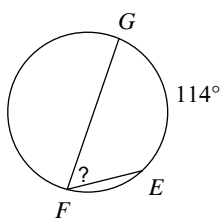
- A) 101° B) 117°
 C) 97° D) 110°

12)



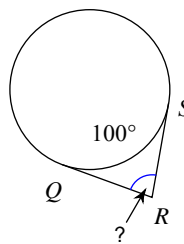
- A) 88° B) 60°
 C) 83° D) 49°

13)



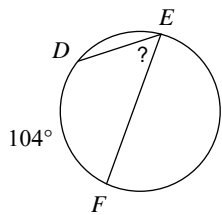
- A) 57° B) 31°
 C) 50° D) 48°

14)



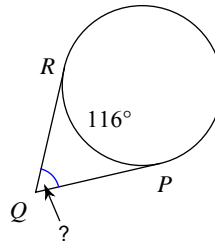
- A) 65° B) 79°
 C) 90° D) 80°

15)



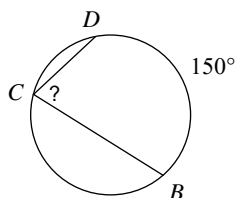
- A) 67° B) 66°
 C) 63° D) 52°

16)



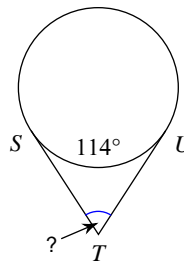
- A) 64° B) 68°
 C) 37° D) 49°

17)



- A) 75° B) 65°
 C) 55° D) 40°

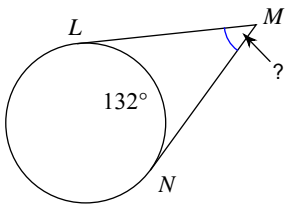
18)



- A) 73° B) 45°
 C) 66° D) 39°

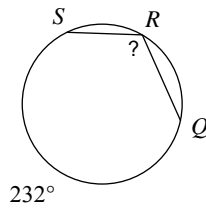


19)



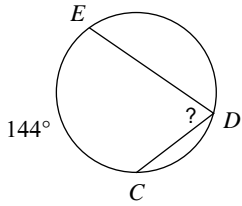
- A) 50° B) 44°
 C) 48° D) 41°

20)



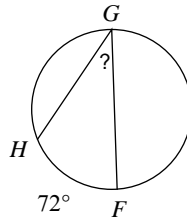
- A) 123° B) 110°
 C) 157° D) 116°

21)



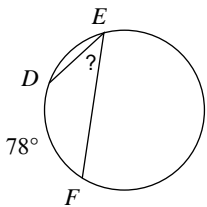
- A) 56° B) 49°
 C) 72° D) 62°

22)



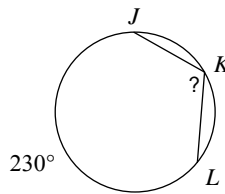
- A) 53° B) 32°
 C) 36° D) 51°

23)



- A) 39° B) 35°
 C) 55° D) 52°

24)



- A) 160° B) 110°
 C) 135° D) 115°



Answers to Assignment (ID: 9)

1) A
5) A
9) B
13) A
17) A
21) C

2) D
6) C
10) C
14) D
18) C
22) C

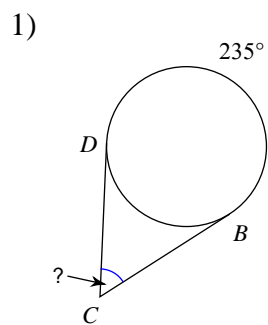
3) A
7) A
11) A
15) D
19) C
23) A

4) C
8) A
12) A
16) A
20) D
24) D

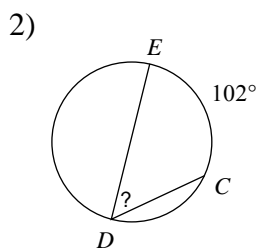


Assignment

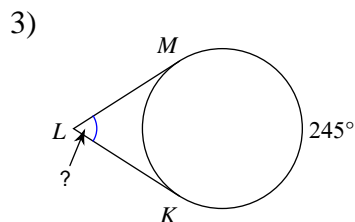
Find the measure of the arc or angle indicated. Assume that lines which appear tangent are tangent.



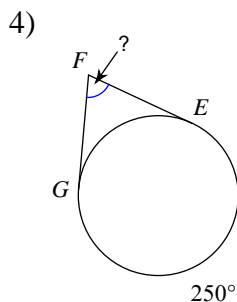
- A) 83°
- B) 81°
- C) 80°
- D) 55°



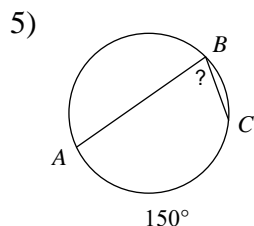
- A) 51°
- B) 71°
- C) 56°
- D) 76°



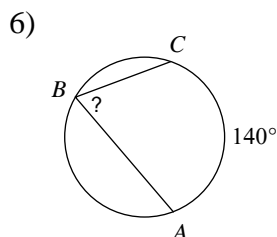
- A) 70°
- B) 90°
- C) 65°
- D) 40°



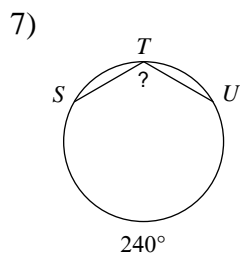
- A) 79°
- B) 70°
- C) 39°
- D) 80°



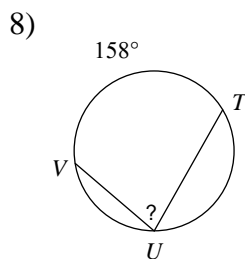
- A) 65°
- B) 63°
- C) 50°
- D) 75°



- A) 70°
- B) 50°
- C) 81°
- D) 44°



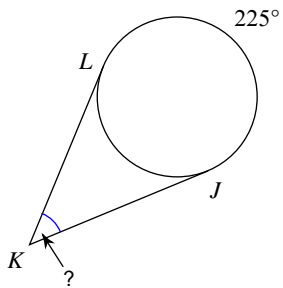
- A) 115°
- B) 150°
- C) 120°
- D) 100°



- A) 57°
- B) 86°
- C) 73°
- D) 79°

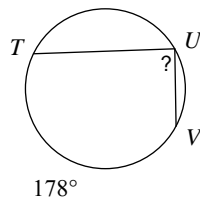


9)



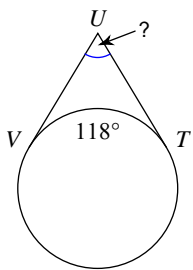
- A) 40° B) 50°
 C) 45° D) 60°

10)



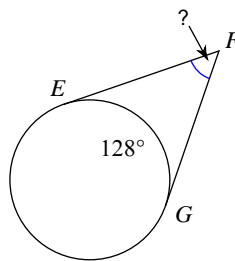
- A) 55° B) 46°
 C) 69° D) 89°

11)



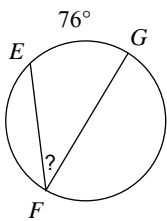
- A) 64° B) 43°
 C) 89° D) 62°

12)



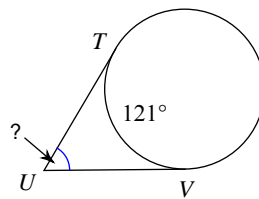
- A) 52° B) 76°
 C) 71° D) 40°

13)



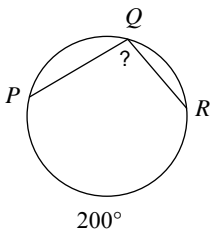
- A) 51° B) 52°
 C) 57° D) 38°

14)



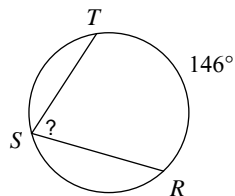
- A) 51° B) 77°
 C) 59° D) 71°

15)



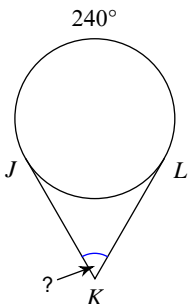
- A) 150° B) 100°
 C) 96° D) 115°

16)



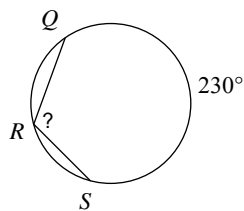
- A) 49° B) 77°
 C) 80° D) 73°

17)



- A) 55° B) 70°

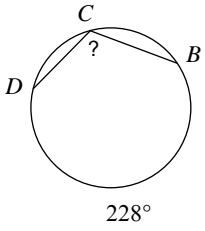
18)



- A) 115° B) 133°
 C) 110° D) 125°

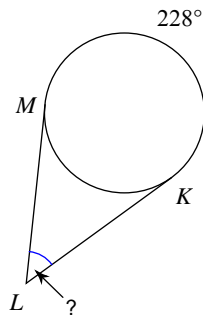


19)



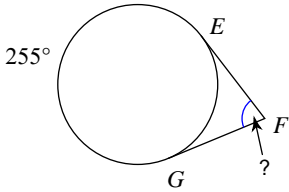
- A) 125° B) 114°
 C) 118° D) 160°

20)



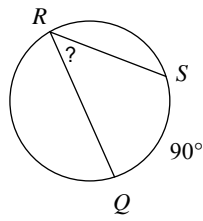
- A) 49° B) 48°
 C) 31° D) 37°

21)



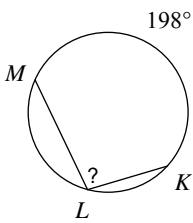
- A) 75° B) 60°
 C) 40° D) 90°

22)



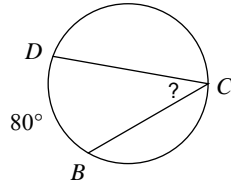
- A) 45° B) 35°
 C) 40° D) 61°

23)



- A) 99° B) 142°
 C) 115° D) 149°

24)



- A) 37° B) 60°
 C) 40° D) 50°



Answers to Assignment (ID: 10)

1) D
5) D
9) C
13) D
17) D
21) A

2) A
6) A
10) D
14) C
18) A
22) A

3) C
7) C
11) D
15) B
19) B
23) A

4) B
8) D
12) A
16) D
20) B
24) C

