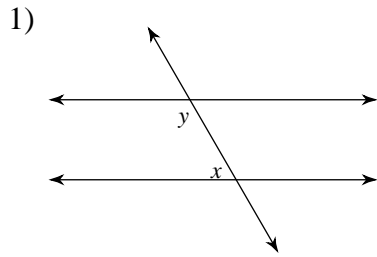


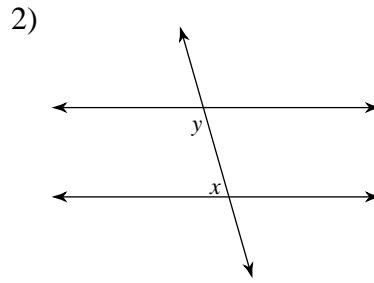
Assignment

Date _____ Period _____

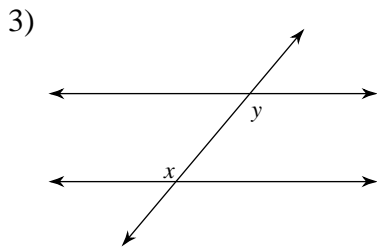
Identify each pair of angles as corresponding, alternate interior, alternate exterior, or consecutive interior.



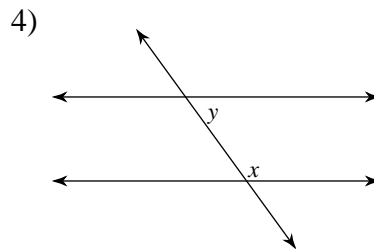
- A) alternate exterior
- B) alternate interior
- C) consecutive interior
- D) corresponding



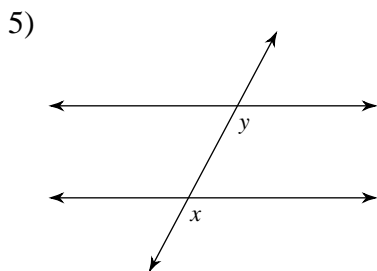
- A) alternate exterior
- B) alternate interior
- C) consecutive interior
- D) corresponding



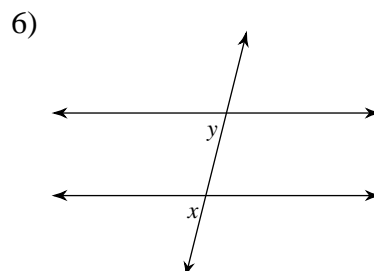
- A) consecutive interior
- B) alternate interior
- C) corresponding
- D) alternate exterior



- A) consecutive interior
- B) alternate interior
- C) alternate exterior
- D) corresponding



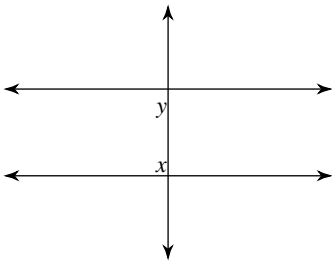
- A) alternate interior
- B) consecutive interior
- C) alternate exterior
- D) corresponding



- A) alternate interior
- B) consecutive interior
- C) alternate exterior
- D) corresponding

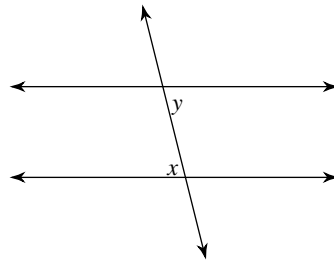


7)



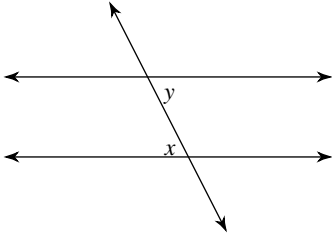
- A) corresponding
- B) alternate interior
- C) consecutive interior
- D) alternate exterior

8)



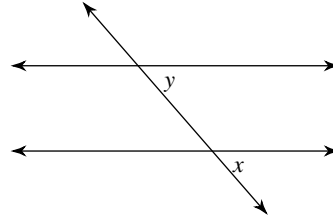
- A) alternate exterior
- B) corresponding
- C) alternate interior
- D) consecutive interior

9)



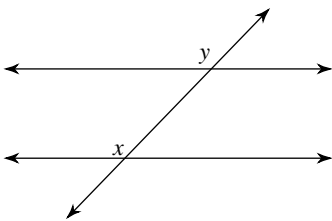
- A) alternate interior
- B) corresponding
- C) alternate exterior
- D) consecutive interior

10)



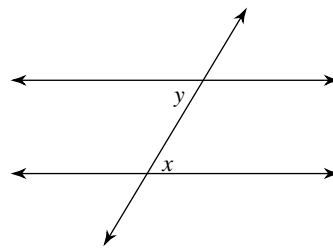
- A) corresponding
- B) consecutive interior
- C) alternate interior
- D) alternate exterior

11)



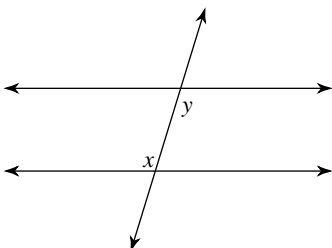
- A) alternate interior
- B) consecutive interior
- C) alternate exterior
- D) corresponding

12)



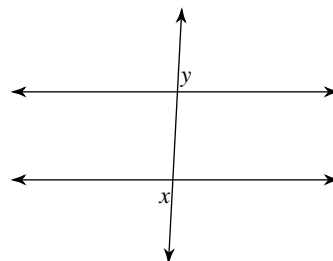
- A) corresponding
- B) alternate interior
- C) alternate exterior
- D) consecutive interior

13)



- A) corresponding
- B) alternate interior
- C) consecutive interior
- D) alternate exterior

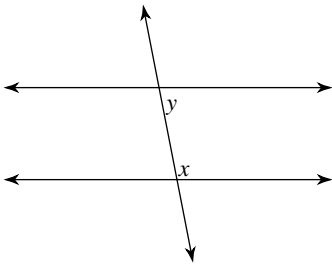
14)



- A) corresponding
- B) consecutive interior
- C) alternate exterior
- D) alternate interior

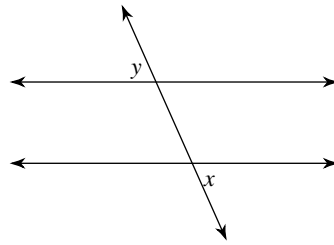


15)



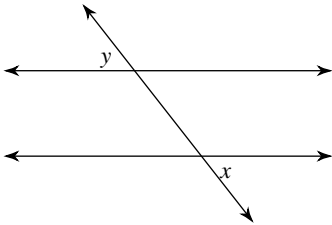
- A) corresponding
- B) alternate interior
- C) alternate exterior
- D) consecutive interior

16)



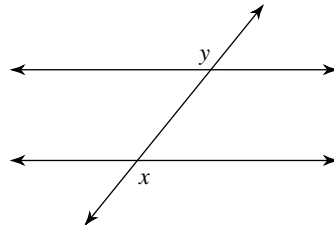
- A) alternate exterior
- B) alternate interior
- C) consecutive interior
- D) corresponding

17)



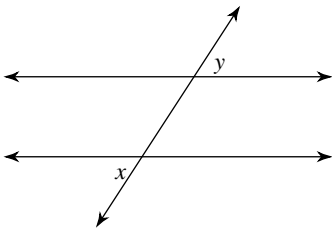
- A) corresponding
- B) alternate exterior
- C) consecutive interior
- D) alternate interior

18)



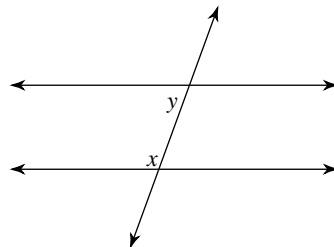
- A) alternate interior
- B) alternate exterior
- C) corresponding
- D) consecutive interior

19)



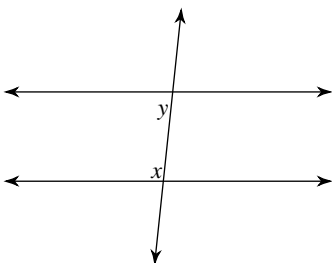
- A) corresponding
- B) alternate exterior
- C) consecutive interior
- D) alternate interior

20)



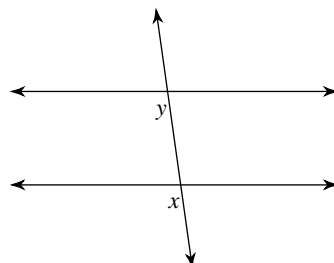
- A) corresponding
- B) alternate exterior
- C) consecutive interior
- D) alternate interior

21)



- A) corresponding
- B) alternate exterior
- C) consecutive interior
- D) alternate interior

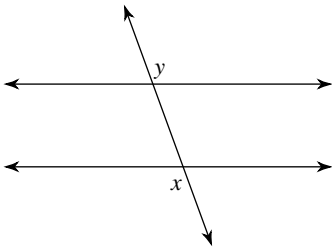
22)



- A) consecutive interior
- B) corresponding
- C) alternate exterior
- D) alternate interior

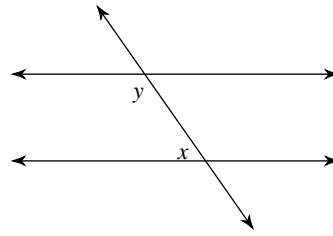


23)



- A) alternate interior
- B) consecutive interior
- C) corresponding
- D) alternate exterior

24)



- A) corresponding
- B) consecutive interior
- C) alternate interior
- D) alternate exterior



Answers to Assignment (ID: 1)

- 1) C
- 5) D
- 9) A
- 13) B
- 17) B
- 21) C

- 2) C
- 6) D
- 10) A
- 14) C
- 18) B
- 22) B

- 3) B
- 7) C
- 11) D
- 15) D
- 19) B
- 23) D

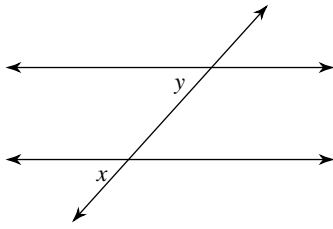
- 4) A
- 8) C
- 12) B
- 16) A
- 20) C
- 24) B



Assignment

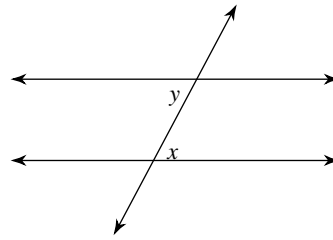
Identify each pair of angles as corresponding, alternate interior, alternate exterior, or consecutive interior.

1)



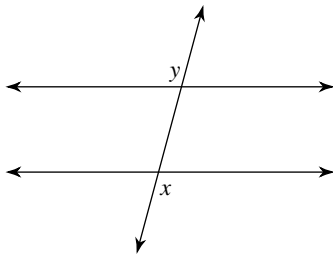
- A) corresponding
- B) alternate interior
- C) consecutive interior
- D) alternate exterior

2)



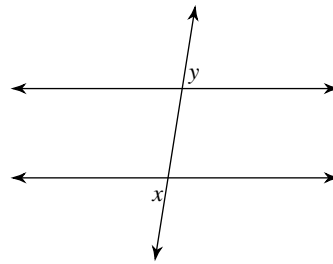
- A) alternate exterior
- B) consecutive interior
- C) alternate interior
- D) corresponding

3)



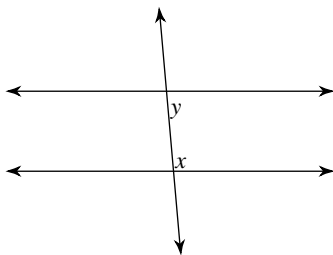
- A) alternate interior
- B) consecutive interior
- C) alternate exterior
- D) corresponding

4)



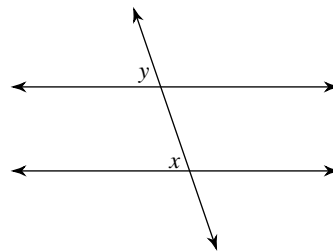
- A) alternate interior
- B) consecutive interior
- C) corresponding
- D) alternate exterior

5)



- A) alternate interior
- B) corresponding
- C) consecutive interior
- D) alternate exterior

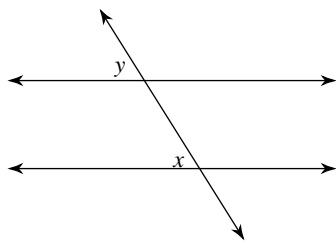
6)



- A) alternate exterior
- B) alternate interior
- C) corresponding
- D) consecutive interior

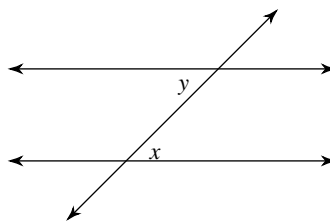


7)



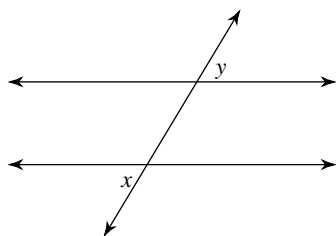
- A) alternate exterior
- B) corresponding
- C) consecutive interior
- D) alternate interior

8)



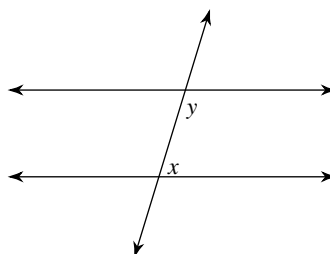
- A) alternate exterior
- B) consecutive interior
- C) alternate interior
- D) corresponding

9)



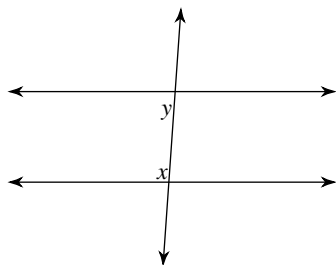
- A) alternate exterior
- B) consecutive interior
- C) corresponding
- D) alternate interior

10)



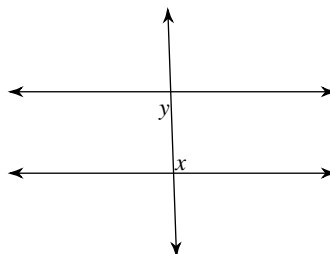
- A) consecutive interior
- B) alternate exterior
- C) alternate interior
- D) corresponding

11)



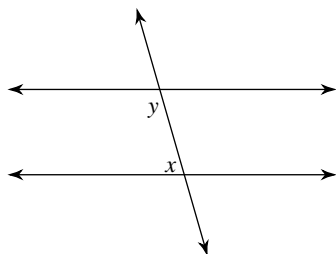
- A) consecutive interior
- B) alternate interior
- C) corresponding
- D) alternate exterior

12)



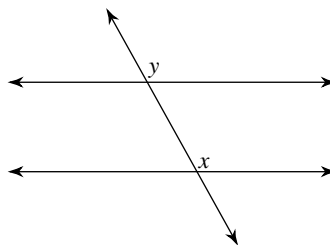
- A) consecutive interior
- B) alternate interior
- C) corresponding
- D) alternate exterior

13)



- A) alternate exterior
- B) alternate interior
- C) corresponding
- D) consecutive interior

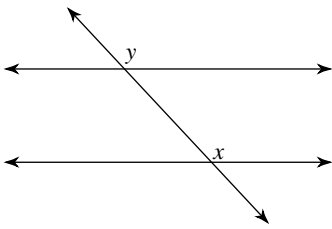
14)



- A) corresponding
- B) alternate interior
- C) consecutive interior
- D) alternate exterior

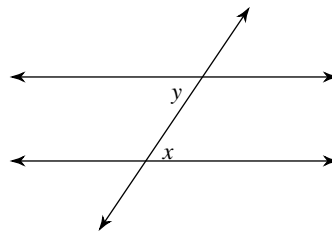


15)



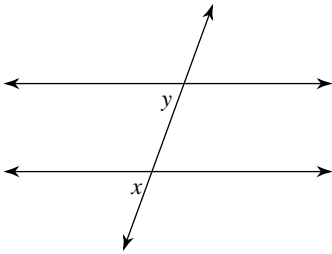
- A) corresponding
- B) consecutive interior
- C) alternate interior
- D) alternate exterior

16)



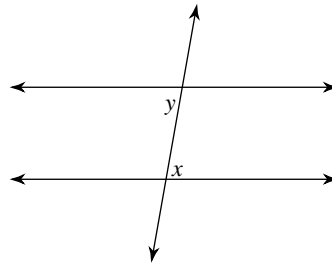
- A) alternate interior
- B) consecutive interior
- C) alternate exterior
- D) corresponding

17)



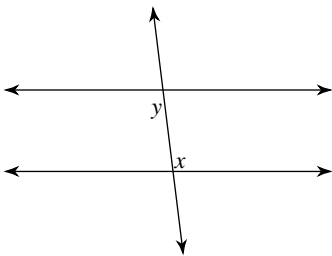
- A) alternate interior
- B) consecutive interior
- C) alternate exterior
- D) corresponding

18)



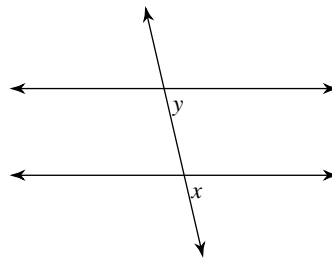
- A) alternate exterior
- B) corresponding
- C) consecutive interior
- D) alternate interior

19)



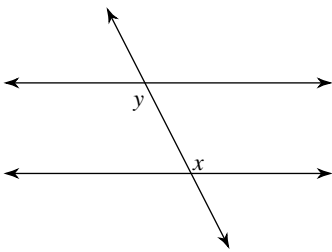
- A) consecutive interior
- B) alternate exterior
- C) alternate interior
- D) corresponding

20)



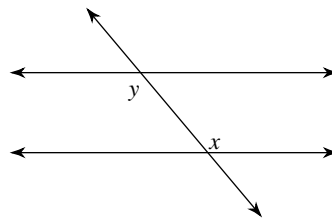
- A) alternate exterior
- B) alternate interior
- C) corresponding
- D) consecutive interior

21)



- A) alternate exterior
- B) corresponding
- C) alternate interior
- D) consecutive interior

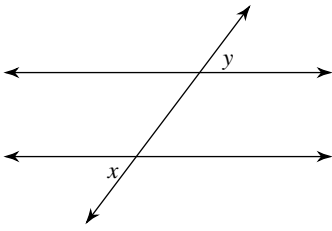
22)



- A) alternate exterior
- B) corresponding
- C) alternate interior
- D) consecutive interior

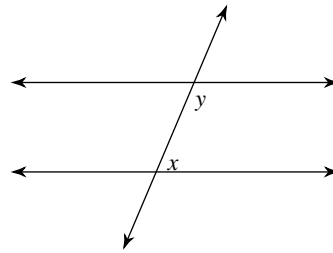


23)



- A) alternate exterior
- B) consecutive interior
- C) alternate interior
- D) corresponding

24)



- A) consecutive interior
- B) alternate interior
- C) corresponding
- D) alternate exterior



Answers to Assignment (ID: 2)

1) A
5) C
9) A
13) D
17) D
21) C

2) C
6) C
10) A
14) A
18) D
22) C

3) C
7) B
11) A
15) A
19) C
23) A

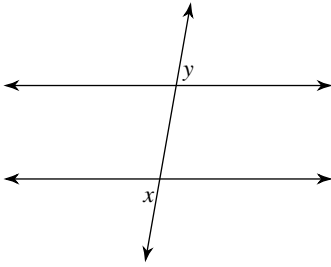
4) D
8) C
12) B
16) A
20) C
24) A



Assignment

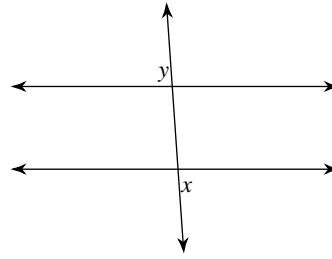
Identify each pair of angles as corresponding, alternate interior, alternate exterior, or consecutive interior.

1)



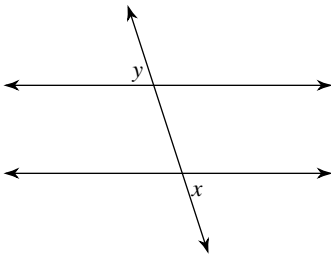
- A) alternate interior
- B) corresponding
- C) alternate exterior
- D) consecutive interior

2)



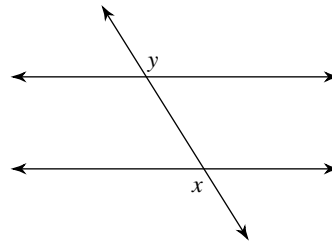
- A) alternate exterior
- B) corresponding
- C) consecutive interior
- D) alternate interior

3)



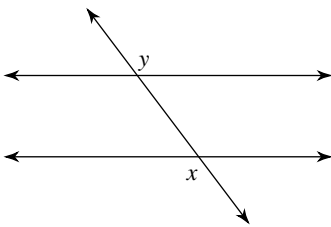
- A) alternate interior
- B) alternate exterior
- C) corresponding
- D) consecutive interior

4)



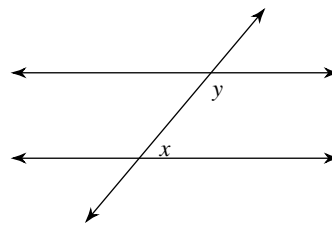
- A) alternate exterior
- B) corresponding
- C) consecutive interior
- D) alternate interior

5)



- A) alternate exterior
- B) corresponding
- C) alternate interior
- D) consecutive interior

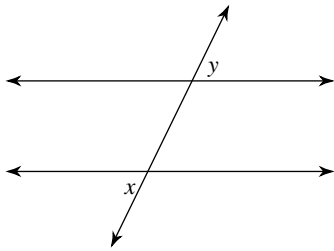
6)



- A) alternate exterior
- B) consecutive interior
- C) alternate interior
- D) corresponding

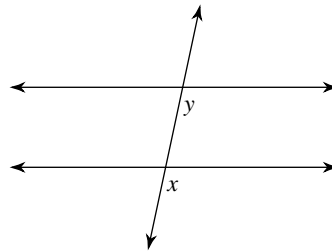


7)



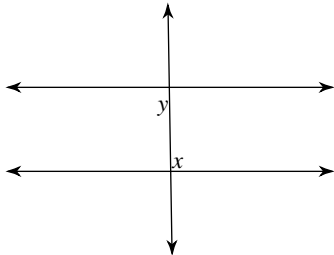
- A) corresponding
- B) consecutive interior
- C) alternate exterior
- D) alternate interior

8)



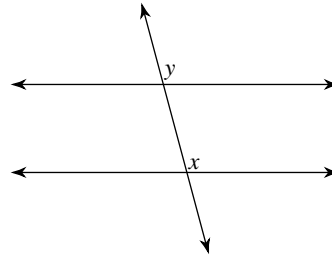
- A) consecutive interior
- B) alternate interior
- C) alternate exterior
- D) corresponding

9)



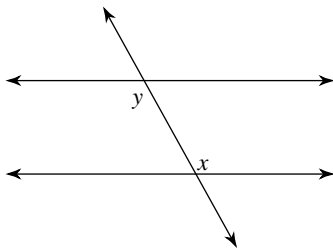
- A) corresponding
- B) alternate interior
- C) consecutive interior
- D) alternate exterior

10)



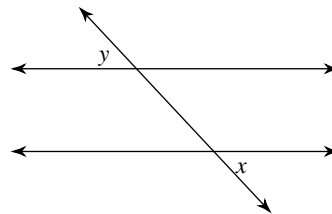
- A) consecutive interior
- B) alternate interior
- C) corresponding
- D) alternate exterior

11)



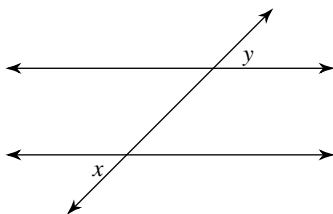
- A) consecutive interior
- B) corresponding
- C) alternate exterior
- D) alternate interior

12)



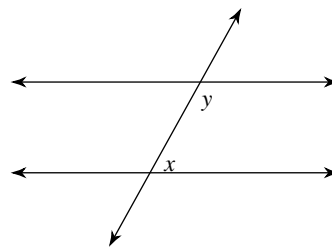
- A) consecutive interior
- B) alternate exterior
- C) alternate interior
- D) corresponding

13)



- A) alternate interior
- B) corresponding
- C) consecutive interior
- D) alternate exterior

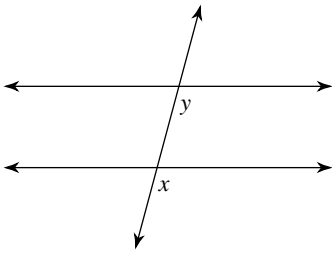
14)



- A) alternate exterior
- B) consecutive interior
- C) corresponding
- D) alternate interior

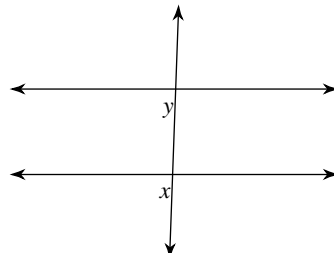


15)



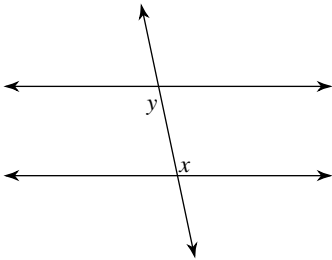
- A) consecutive interior
- B) alternate interior
- C) corresponding
- D) alternate exterior

16)



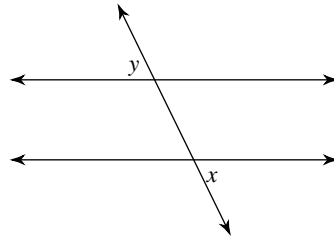
- A) consecutive interior
- B) alternate interior
- C) corresponding
- D) alternate exterior

17)



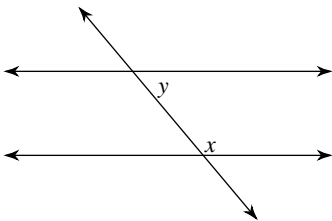
- A) consecutive interior
- B) alternate interior
- C) alternate exterior
- D) corresponding

18)



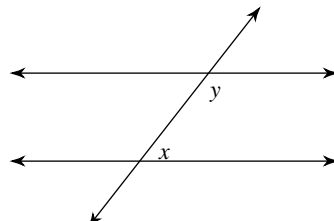
- A) consecutive interior
- B) corresponding
- C) alternate interior
- D) alternate exterior

19)



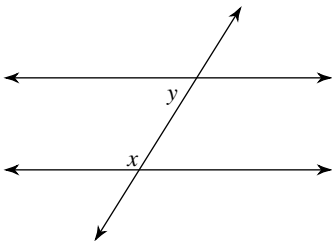
- A) alternate exterior
- B) corresponding
- C) alternate interior
- D) consecutive interior

20)



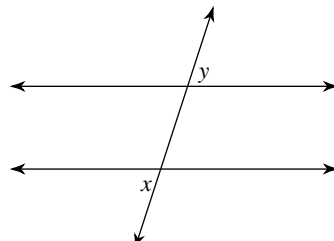
- A) alternate exterior
- B) corresponding
- C) consecutive interior
- D) alternate interior

21)



- A) alternate interior
- B) corresponding
- C) alternate exterior
- D) consecutive interior

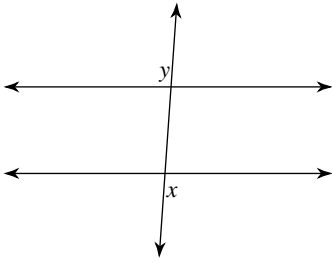
22)



- A) consecutive interior
- B) corresponding
- C) alternate interior
- D) alternate exterior

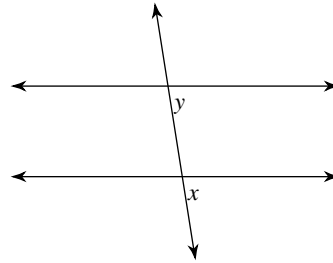


23)



- A) alternate exterior
- B) corresponding
- C) alternate interior
- D) consecutive interior

24)



- A) alternate interior
- B) consecutive interior
- C) alternate exterior
- D) corresponding



Answers to Assignment (ID: 3)

- 1) C
- 5) A
- 9) B
- 13) D
- 17) B
- 21) D

- 2) A
- 6) B
- 10) C
- 14) B
- 18) D
- 22) D

- 3) B
- 7) C
- 11) D
- 15) C
- 19) D
- 23) A

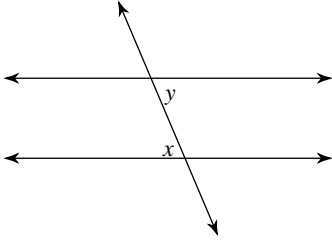
- 4) A
- 8) D
- 12) B
- 16) C
- 20) C
- 24) D



Assignment

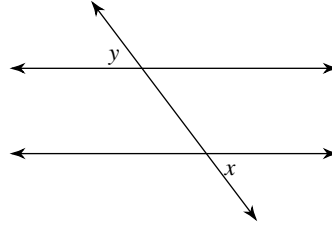
Identify each pair of angles as corresponding, alternate interior, alternate exterior, or consecutive interior.

1)



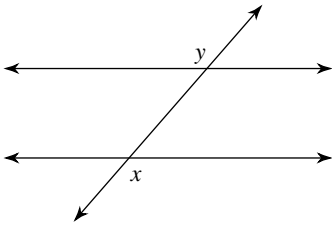
- A) corresponding
- B) consecutive interior
- C) alternate exterior
- D) alternate interior

2)



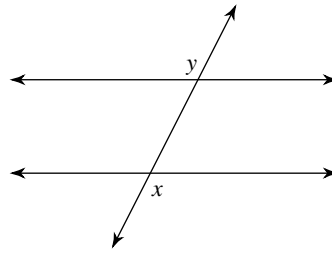
- A) corresponding
- B) consecutive interior
- C) alternate exterior
- D) alternate interior

3)



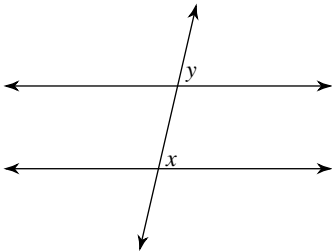
- A) consecutive interior
- B) alternate interior
- C) alternate exterior
- D) corresponding

4)



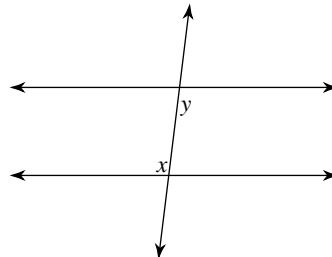
- A) alternate interior
- B) corresponding
- C) consecutive interior
- D) alternate exterior

5)



- A) alternate exterior
- B) corresponding
- C) alternate interior
- D) consecutive interior

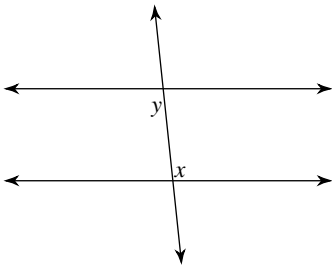
6)



- A) alternate exterior
- B) corresponding
- C) alternate interior
- D) consecutive interior

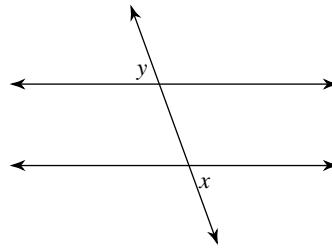


7)



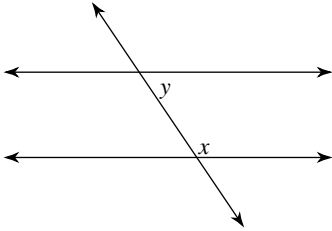
- A) alternate exterior
- B) corresponding
- C) alternate interior
- D) consecutive interior

8)



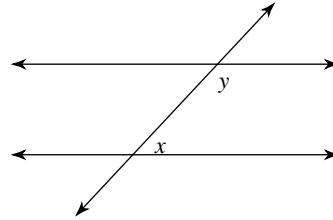
- A) corresponding
- B) consecutive interior
- C) alternate interior
- D) alternate exterior

9)



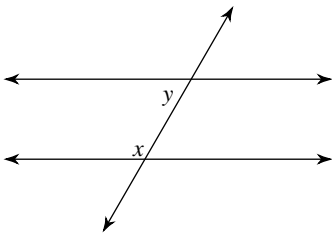
- A) alternate interior
- B) consecutive interior
- C) alternate exterior
- D) corresponding

10)



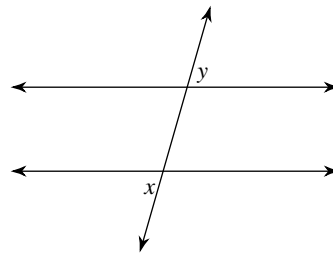
- A) alternate interior
- B) consecutive interior
- C) alternate exterior
- D) corresponding

11)



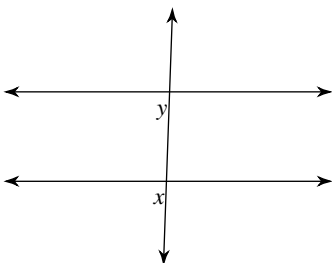
- A) alternate interior
- B) consecutive interior
- C) corresponding
- D) alternate exterior

12)



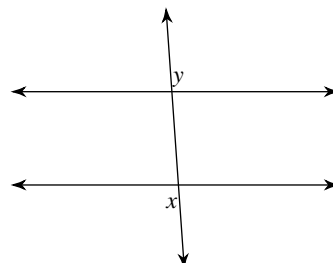
- A) corresponding
- B) alternate exterior
- C) alternate interior
- D) consecutive interior

13)



- A) alternate exterior
- B) alternate interior
- C) corresponding
- D) consecutive interior

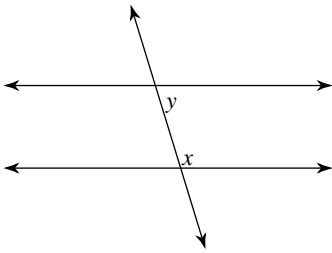
14)



- A) consecutive interior
- B) corresponding
- C) alternate exterior
- D) alternate interior

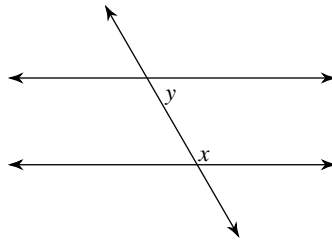


15)



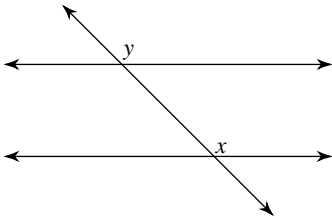
- A) alternate exterior
- B) corresponding
- C) consecutive interior
- D) alternate interior

16)



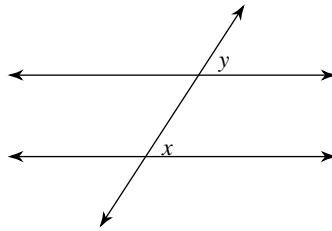
- A) consecutive interior
- B) alternate interior
- C) alternate exterior
- D) corresponding

17)



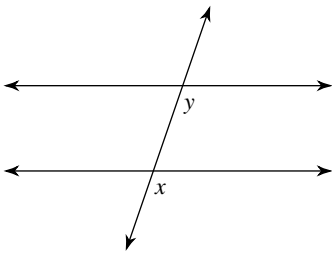
- A) consecutive interior
- B) corresponding
- C) alternate interior
- D) alternate exterior

18)



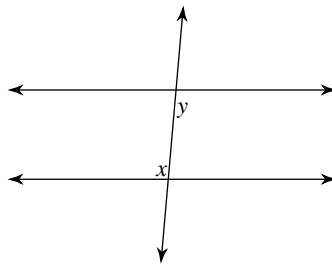
- A) alternate exterior
- B) consecutive interior
- C) corresponding
- D) alternate interior

19)



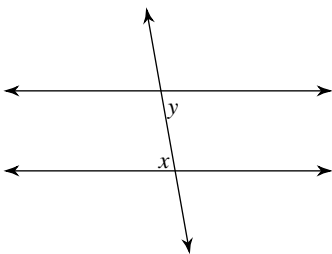
- A) alternate interior
- B) consecutive interior
- C) alternate exterior
- D) corresponding

20)



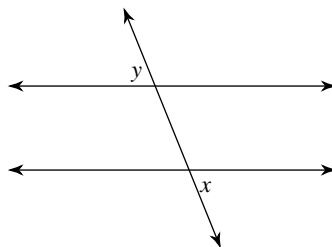
- A) corresponding
- B) consecutive interior
- C) alternate exterior
- D) alternate interior

21)



- A) consecutive interior
- B) alternate exterior
- C) alternate interior
- D) corresponding

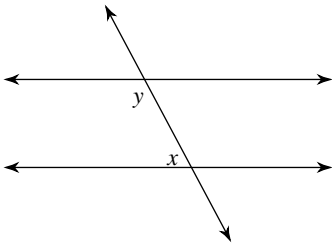
22)



- A) corresponding
- B) alternate exterior
- C) consecutive interior
- D) alternate interior

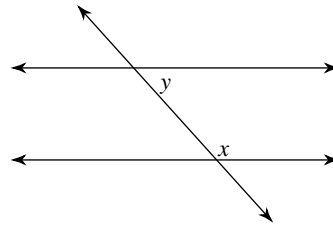


23)



- A) corresponding
- B) consecutive interior
- C) alternate exterior
- D) alternate interior

24)



- A) alternate exterior
- B) alternate interior
- C) consecutive interior
- D) corresponding



Answers to Assignment (ID: 4)

1) D
5) B
9) B
13) C
17) B
21) C

2) C
6) C
10) B
14) C
18) C
22) B

3) C
7) C
11) B
15) C
19) D
23) B

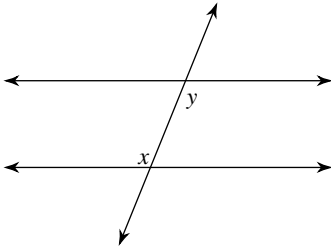
4) D
8) D
12) B
16) A
20) D
24) C



Assignment

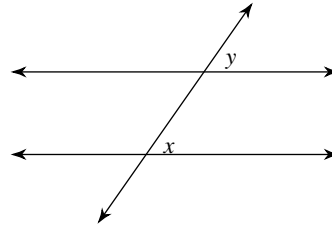
Identify each pair of angles as corresponding, alternate interior, alternate exterior, or consecutive interior.

1)



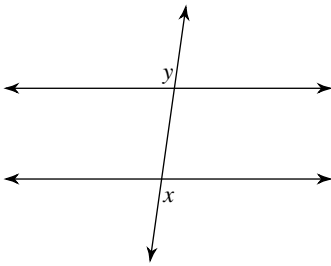
- A) corresponding
- B) alternate interior
- C) alternate exterior
- D) consecutive interior

2)



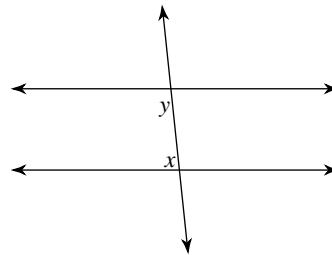
- A) alternate interior
- B) corresponding
- C) alternate exterior
- D) consecutive interior

3)



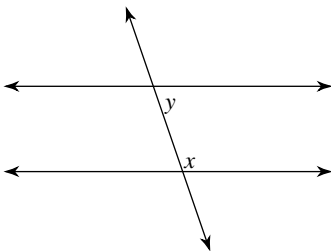
- A) corresponding
- B) alternate exterior
- C) consecutive interior
- D) alternate interior

4)



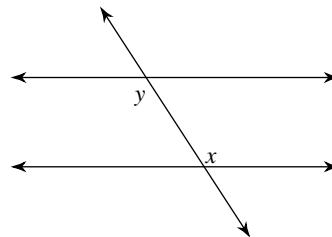
- A) corresponding
- B) alternate exterior
- C) consecutive interior
- D) alternate interior

5)



- A) corresponding
- B) alternate exterior
- C) consecutive interior
- D) alternate interior

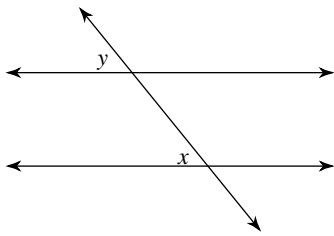
6)



- A) alternate interior
- B) corresponding
- C) consecutive interior
- D) alternate exterior

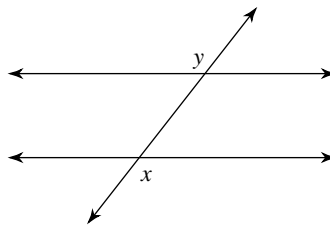


7)



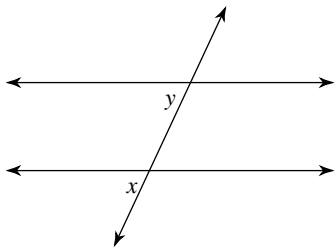
- A) corresponding
- B) consecutive interior
- C) alternate interior
- D) alternate exterior

8)



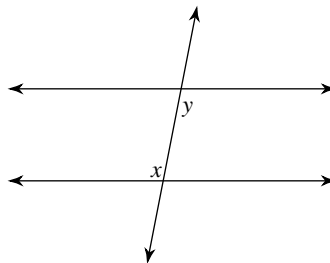
- A) alternate exterior
- B) alternate interior
- C) consecutive interior
- D) corresponding

9)



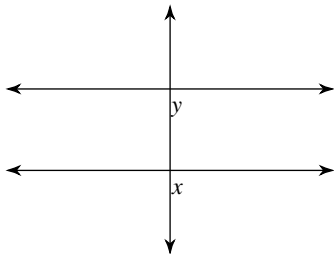
- A) alternate interior
- B) corresponding
- C) consecutive interior
- D) alternate exterior

10)



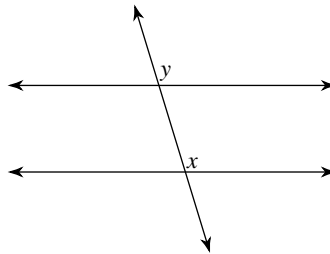
- A) corresponding
- B) consecutive interior
- C) alternate interior
- D) alternate exterior

11)



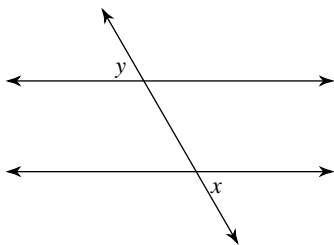
- A) corresponding
- B) consecutive interior
- C) alternate exterior
- D) alternate interior

12)



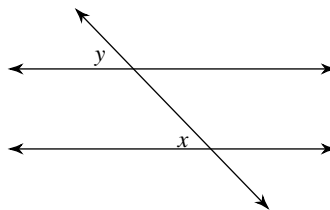
- A) alternate exterior
- B) alternate interior
- C) corresponding
- D) consecutive interior

13)



- A) alternate exterior
- B) corresponding
- C) alternate interior
- D) consecutive interior

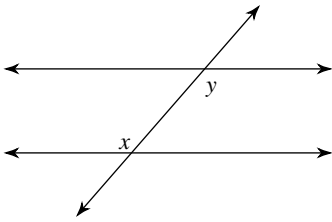
14)



- A) corresponding
- B) alternate exterior
- C) alternate interior
- D) consecutive interior

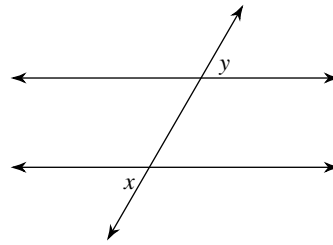


15)



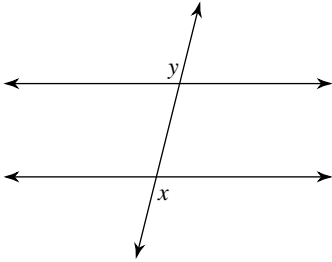
- A) alternate interior
- B) alternate exterior
- C) consecutive interior
- D) corresponding

16)



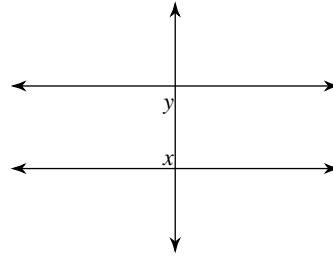
- A) alternate exterior
- B) consecutive interior
- C) alternate interior
- D) corresponding

17)



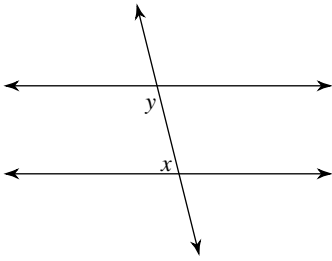
- A) alternate interior
- B) consecutive interior
- C) alternate exterior
- D) corresponding

18)



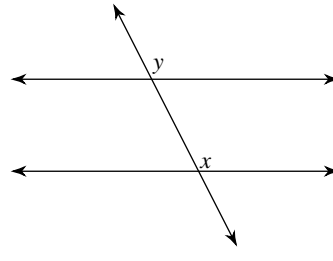
- A) alternate interior
- B) alternate exterior
- C) corresponding
- D) consecutive interior

19)



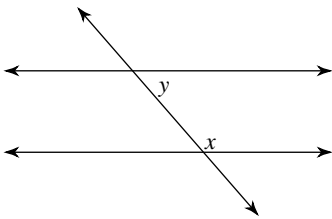
- A) alternate interior
- B) corresponding
- C) consecutive interior
- D) alternate exterior

20)



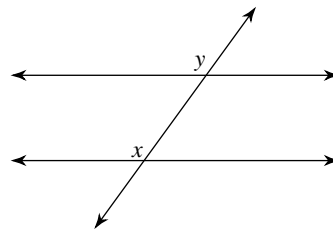
- A) alternate exterior
- B) consecutive interior
- C) corresponding
- D) alternate interior

21)



- A) alternate interior
- B) corresponding
- C) consecutive interior
- D) alternate exterior

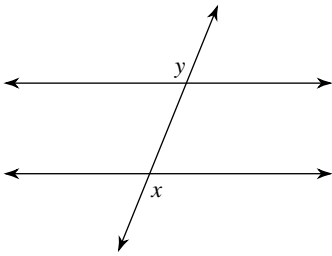
22)



- A) corresponding
- B) alternate interior
- C) consecutive interior
- D) alternate exterior

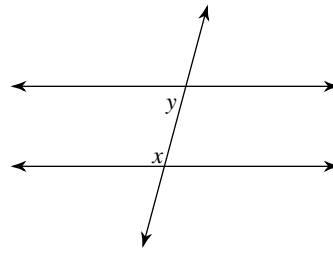


23)



- A) alternate exterior
- B) corresponding
- C) consecutive interior
- D) alternate interior

24)



- A) consecutive interior
- B) alternate interior
- C) alternate exterior
- D) corresponding



Answers to Assignment (ID: 5)

1) B
5) C
9) B
13) A
17) C
21) C

2) B
6) A
10) C
14) A
18) D
22) A

3) B
7) A
11) A
15) A
19) C
23) A

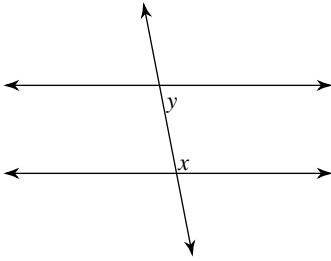
4) C
8) A
12) C
16) A
20) C
24) A



Assignment

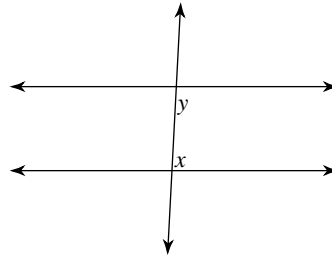
Identify each pair of angles as corresponding, alternate interior, alternate exterior, or consecutive interior.

1)



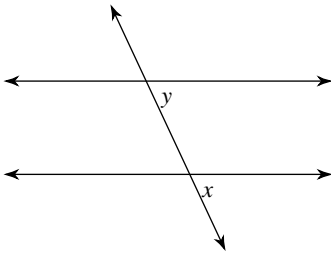
- A) consecutive interior
- B) corresponding
- C) alternate interior
- D) alternate exterior

2)



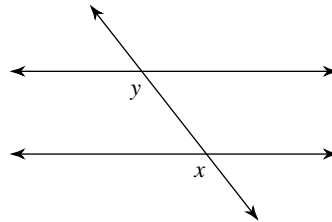
- A) alternate exterior
- B) consecutive interior
- C) corresponding
- D) alternate interior

3)



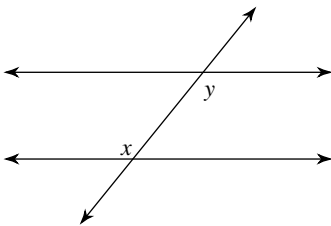
- A) alternate interior
- B) consecutive interior
- C) alternate exterior
- D) corresponding

4)



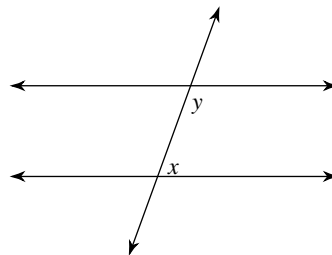
- A) corresponding
- B) alternate exterior
- C) consecutive interior
- D) alternate interior

5)



- A) alternate interior
- B) corresponding
- C) consecutive interior
- D) alternate exterior

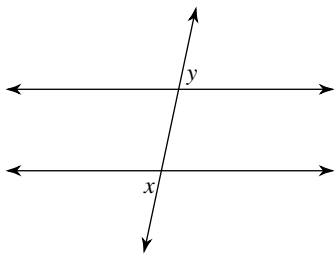
6)



- A) consecutive interior
- B) alternate exterior
- C) corresponding
- D) alternate interior

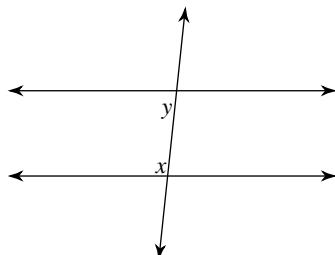


7)



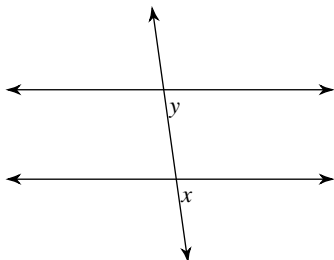
- A) alternate exterior
- B) corresponding
- C) alternate interior
- D) consecutive interior

8)



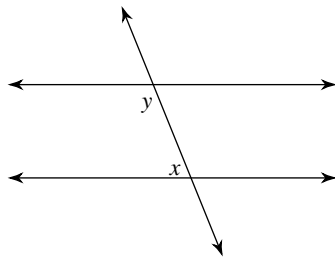
- A) consecutive interior
- B) alternate interior
- C) corresponding
- D) alternate exterior

9)



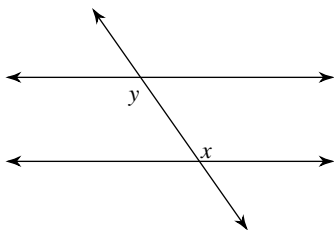
- A) alternate interior
- B) alternate exterior
- C) corresponding
- D) consecutive interior

10)



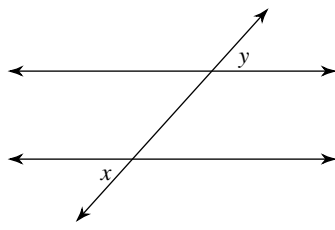
- A) corresponding
- B) alternate interior
- C) consecutive interior
- D) alternate exterior

11)



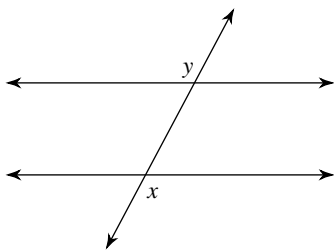
- A) alternate exterior
- B) alternate interior
- C) corresponding
- D) consecutive interior

12)



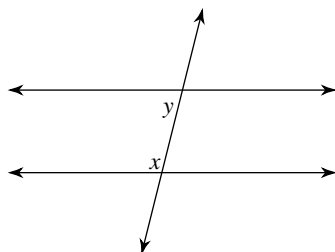
- A) alternate interior
- B) corresponding
- C) alternate exterior
- D) consecutive interior

13)



- A) alternate exterior
- B) corresponding
- C) alternate interior
- D) consecutive interior

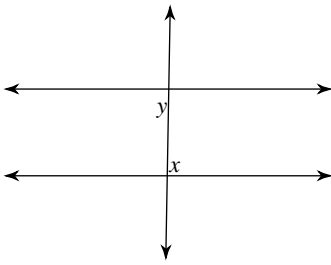
14)



- A) consecutive interior
- B) alternate exterior
- C) alternate interior
- D) corresponding

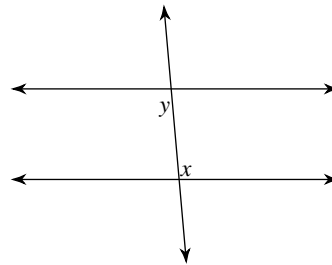


15)



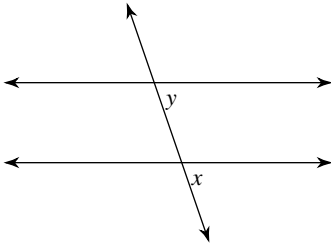
- A) consecutive interior
- B) alternate interior
- C) alternate exterior
- D) corresponding

16)



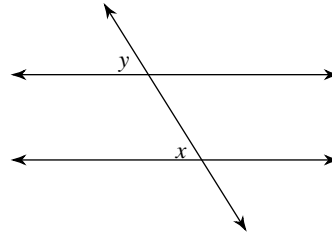
- A) alternate exterior
- B) alternate interior
- C) corresponding
- D) consecutive interior

17)



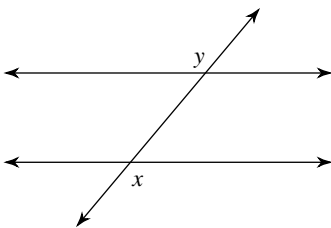
- A) consecutive interior
- B) alternate interior
- C) alternate exterior
- D) corresponding

18)



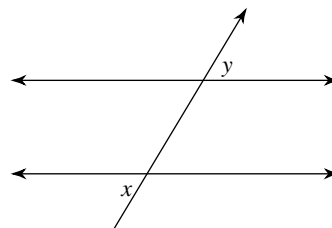
- A) corresponding
- B) alternate interior
- C) consecutive interior
- D) alternate exterior

19)



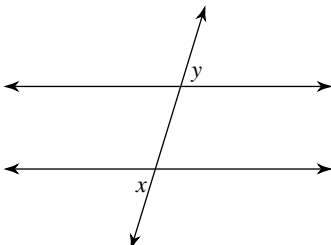
- A) alternate exterior
- B) alternate interior
- C) consecutive interior
- D) corresponding

20)



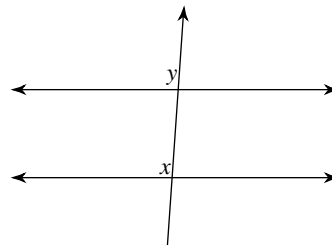
- A) consecutive interior
- B) alternate exterior
- C) alternate interior
- D) corresponding

21)



- A) consecutive interior
- B) alternate exterior
- C) alternate interior
- D) corresponding

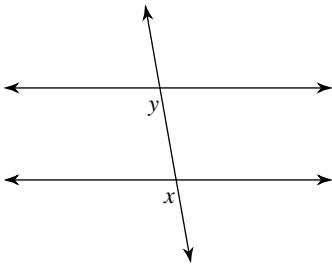
22)



- A) consecutive interior
- B) alternate interior
- C) corresponding
- D) alternate exterior

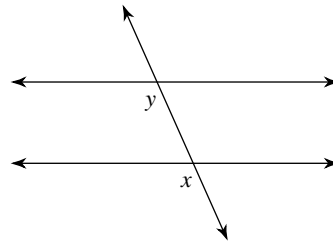


23)



- A) consecutive interior
- B) alternate exterior
- C) corresponding
- D) alternate interior

24)



- A) consecutive interior
- B) alternate interior
- C) corresponding
- D) alternate exterior



Answers to Assignment (ID: 6)

1) A
5) A
9) C
13) A
17) D
21) B

2) B
6) A
10) C
14) A
18) A
22) C

3) D
7) A
11) B
15) B
19) A
23) C

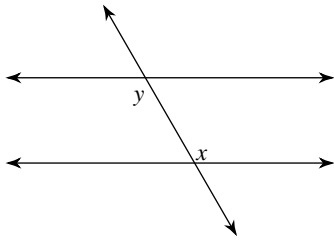
4) A
8) A
12) C
16) B
20) B
24) C



Assignment

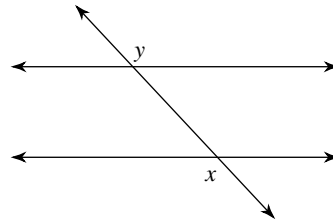
Identify each pair of angles as corresponding, alternate interior, alternate exterior, or consecutive interior.

1)



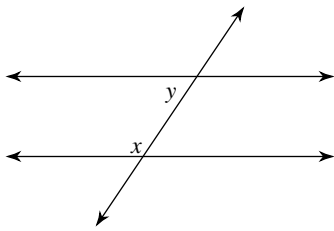
- A) alternate exterior
- B) consecutive interior
- C) corresponding
- D) alternate interior

2)



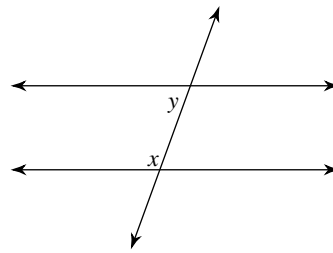
- A) consecutive interior
- B) alternate exterior
- C) alternate interior
- D) corresponding

3)



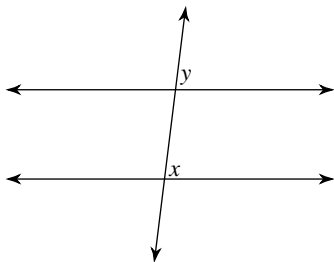
- A) alternate exterior
- B) consecutive interior
- C) alternate interior
- D) corresponding

4)



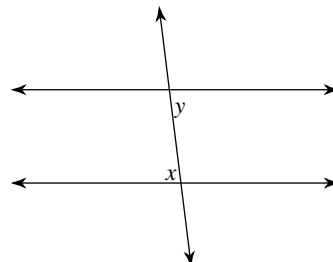
- A) alternate exterior
- B) consecutive interior
- C) corresponding
- D) alternate interior

5)



- A) consecutive interior
- B) alternate exterior
- C) corresponding
- D) alternate interior

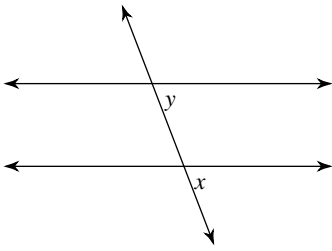
6)



- A) corresponding
- B) alternate interior
- C) consecutive interior
- D) alternate exterior

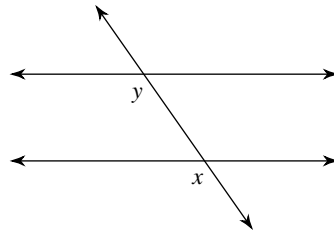


7)



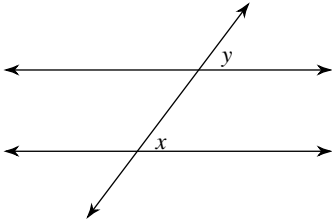
- A) consecutive interior
- B) alternate exterior
- C) corresponding
- D) alternate interior

8)



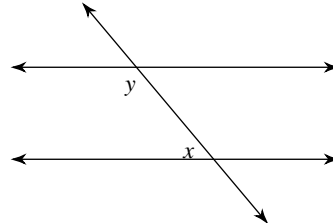
- A) consecutive interior
- B) alternate interior
- C) alternate exterior
- D) corresponding

9)



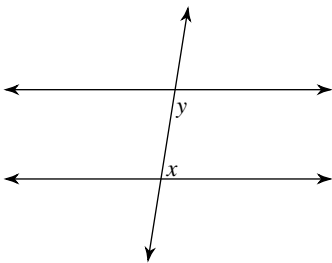
- A) alternate exterior
- B) corresponding
- C) consecutive interior
- D) alternate interior

10)



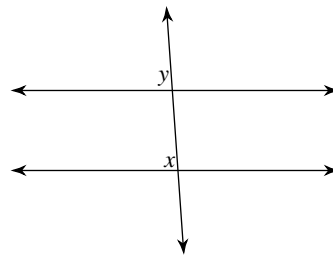
- A) alternate exterior
- B) corresponding
- C) alternate interior
- D) consecutive interior

11)



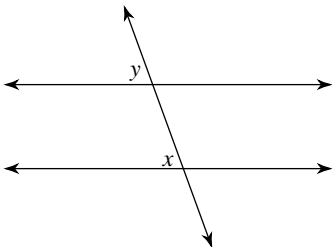
- A) consecutive interior
- B) alternate exterior
- C) alternate interior
- D) corresponding

12)



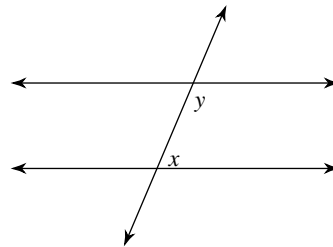
- A) alternate interior
- B) alternate exterior
- C) corresponding
- D) consecutive interior

13)



- A) alternate exterior
- B) alternate interior
- C) corresponding
- D) consecutive interior

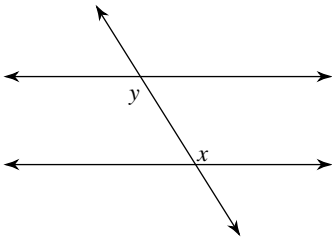
14)



- A) corresponding
- B) alternate interior
- C) consecutive interior
- D) alternate exterior

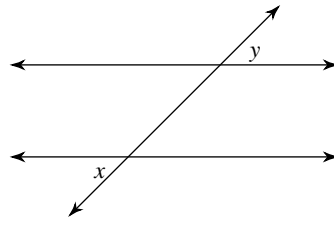


15)



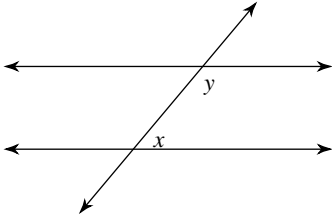
- A) corresponding
- B) alternate interior
- C) alternate exterior
- D) consecutive interior

16)



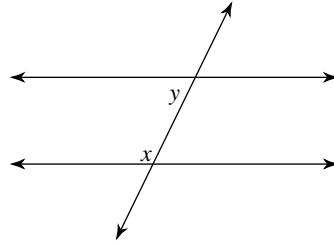
- A) corresponding
- B) consecutive interior
- C) alternate exterior
- D) alternate interior

17)



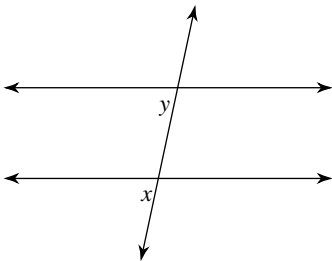
- A) alternate interior
- B) alternate exterior
- C) corresponding
- D) consecutive interior

18)



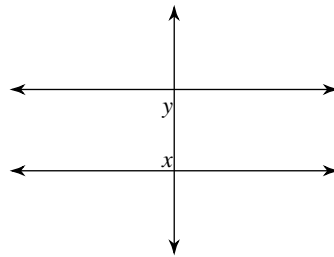
- A) alternate interior
- B) consecutive interior
- C) alternate exterior
- D) corresponding

19)



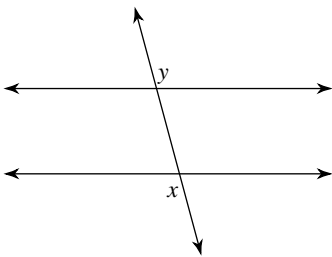
- A) corresponding
- B) consecutive interior
- C) alternate interior
- D) alternate exterior

20)



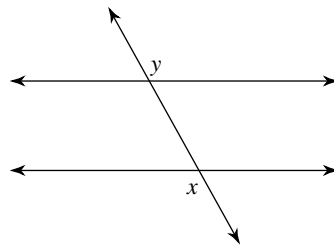
- A) alternate exterior
- B) consecutive interior
- C) corresponding
- D) alternate interior

21)



- A) alternate interior
- B) corresponding
- C) alternate exterior
- D) consecutive interior

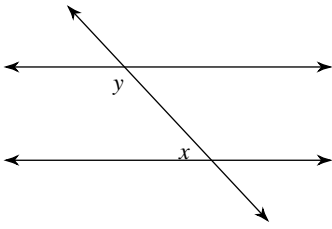
22)



- A) alternate interior
- B) corresponding
- C) consecutive interior
- D) alternate exterior

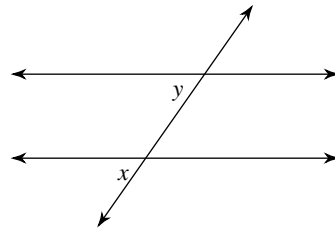


23)



- A) alternate interior
- B) corresponding
- C) alternate exterior
- D) consecutive interior

24)



- A) consecutive interior
- B) alternate exterior
- C) alternate interior
- D) corresponding



Answers to Assignment (ID: 7)

- 1) D
- 5) C
- 9) B
- 13) C
- 17) D
- 21) C

- 2) B
- 6) B
- 10) D
- 14) C
- 18) B
- 22) D

- 3) B
- 7) C
- 11) A
- 15) B
- 19) A
- 23) D

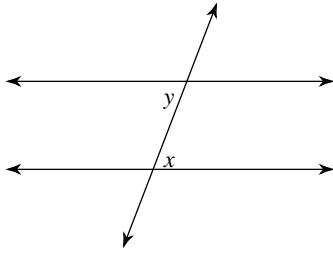
- 4) B
- 8) D
- 12) C
- 16) C
- 20) B
- 24) D



Assignment

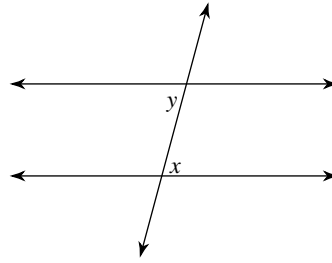
Identify each pair of angles as corresponding, alternate interior, alternate exterior, or consecutive interior.

1)



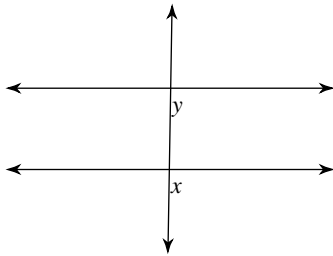
- A) corresponding
- B) alternate interior
- C) alternate exterior
- D) consecutive interior

2)



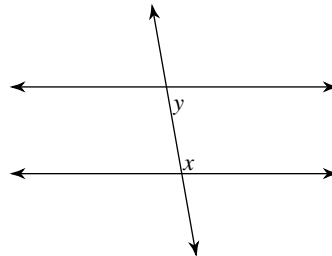
- A) alternate interior
- B) alternate exterior
- C) corresponding
- D) consecutive interior

3)



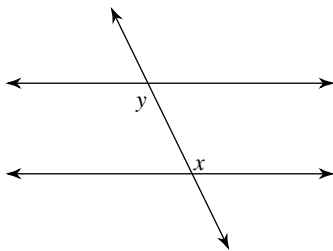
- A) alternate exterior
- B) alternate interior
- C) corresponding
- D) consecutive interior

4)



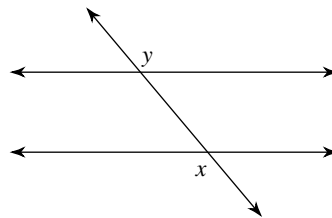
- A) corresponding
- B) alternate interior
- C) alternate exterior
- D) consecutive interior

5)



- A) consecutive interior
- B) corresponding
- C) alternate interior
- D) alternate exterior

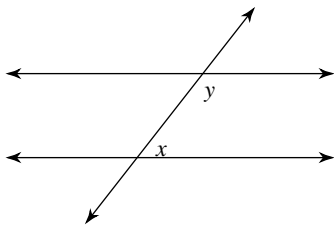
6)



- A) consecutive interior
- B) alternate exterior
- C) corresponding
- D) alternate interior

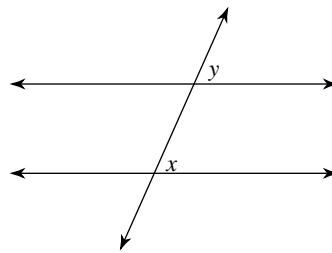


7)



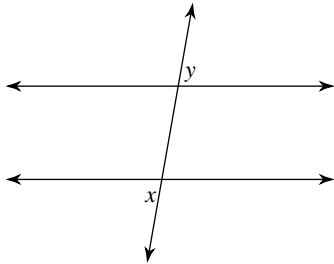
- A) alternate exterior
- B) corresponding
- C) alternate interior
- D) consecutive interior

8)



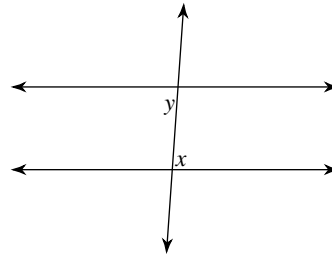
- A) alternate interior
- B) alternate exterior
- C) consecutive interior
- D) corresponding

9)



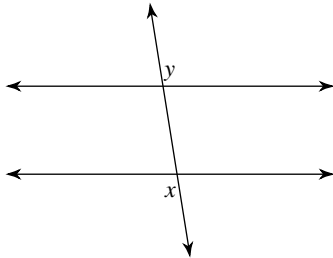
- A) corresponding
- B) consecutive interior
- C) alternate exterior
- D) alternate interior

10)



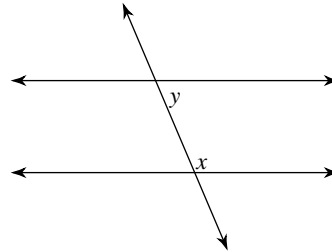
- A) corresponding
- B) consecutive interior
- C) alternate exterior
- D) alternate interior

11)



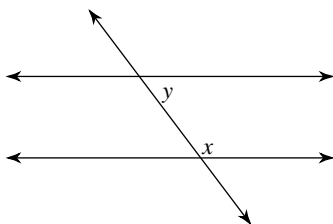
- A) corresponding
- B) consecutive interior
- C) alternate exterior
- D) alternate interior

12)



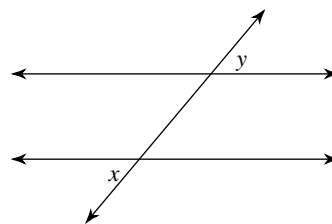
- A) corresponding
- B) consecutive interior
- C) alternate exterior
- D) alternate interior

13)



- A) corresponding
- B) consecutive interior
- C) alternate exterior
- D) alternate interior

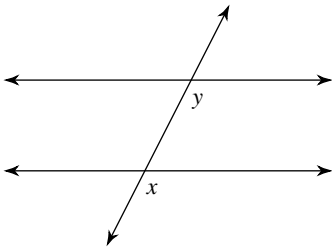
14)



- A) consecutive interior
- B) corresponding
- C) alternate interior
- D) alternate exterior

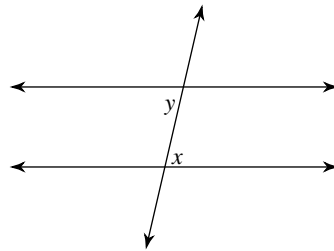


15)



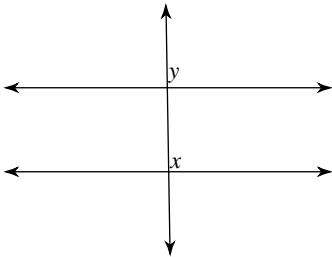
- A) alternate exterior
- B) alternate interior
- C) corresponding
- D) consecutive interior

16)



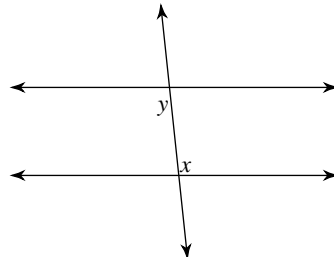
- A) alternate interior
- B) alternate exterior
- C) consecutive interior
- D) corresponding

17)



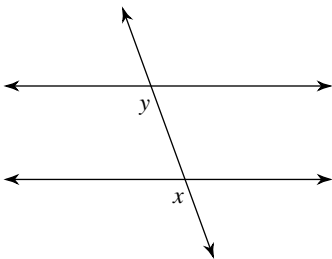
- A) alternate interior
- B) corresponding
- C) consecutive interior
- D) alternate exterior

18)



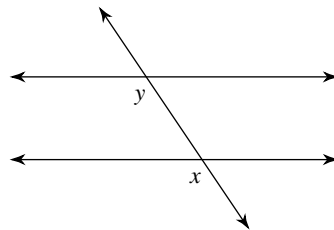
- A) corresponding
- B) consecutive interior
- C) alternate interior
- D) alternate exterior

19)



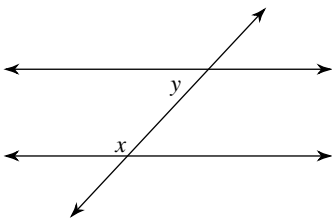
- A) corresponding
- B) consecutive interior
- C) alternate interior
- D) alternate exterior

20)



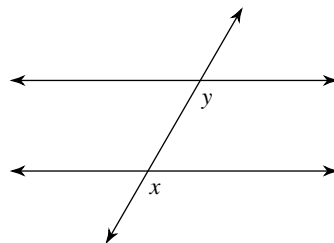
- A) alternate interior
- B) alternate exterior
- C) consecutive interior
- D) corresponding

21)



- A) alternate exterior
- B) consecutive interior
- C) corresponding
- D) alternate interior

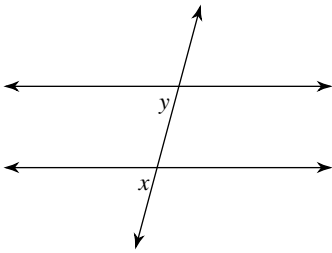
22)



- A) alternate interior
- B) alternate exterior
- C) corresponding
- D) consecutive interior

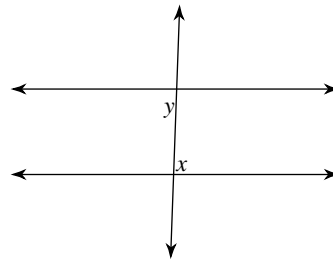


23)



- A) corresponding
- B) alternate exterior
- C) alternate interior
- D) consecutive interior

24)



- A) corresponding
- B) consecutive interior
- C) alternate interior
- D) alternate exterior



Answers to Assignment (ID: 8)

- 1) B
- 5) C
- 9) C
- 13) B
- 17) B
- 21) B

- 2) A
- 6) B
- 10) D
- 14) D
- 18) C
- 22) C

- 3) C
- 7) D
- 11) C
- 15) C
- 19) A
- 23) A

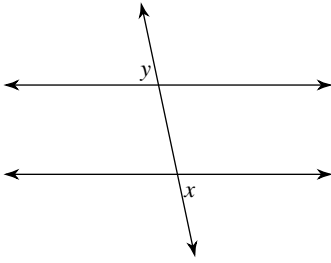
- 4) D
- 8) D
- 12) B
- 16) A
- 20) D
- 24) C



Assignment

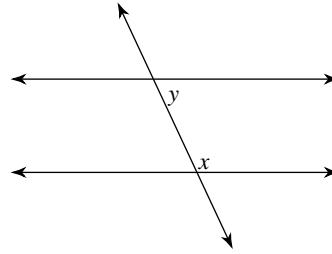
Identify each pair of angles as corresponding, alternate interior, alternate exterior, or consecutive interior.

1)



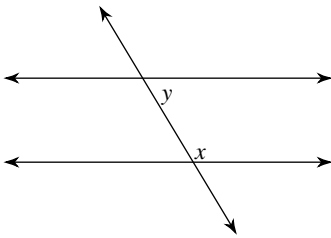
- A) alternate exterior
- B) consecutive interior
- C) corresponding
- D) alternate interior

2)



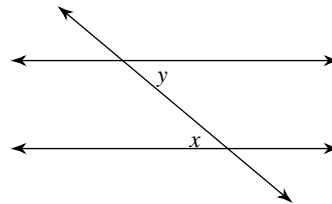
- A) consecutive interior
- B) alternate exterior
- C) alternate interior
- D) corresponding

3)



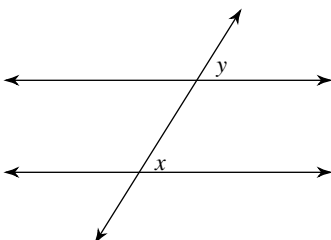
- A) consecutive interior
- B) alternate exterior
- C) alternate interior
- D) corresponding

4)



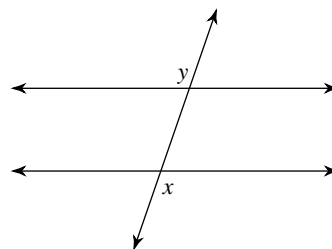
- A) alternate interior
- B) corresponding
- C) alternate exterior
- D) consecutive interior

5)



- A) consecutive interior
- B) alternate exterior
- C) corresponding
- D) alternate interior

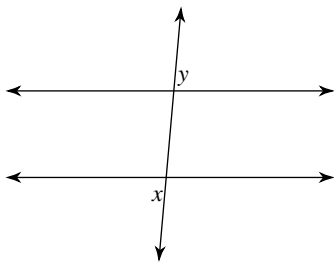
6)



- A) alternate interior
- B) corresponding
- C) consecutive interior
- D) alternate exterior

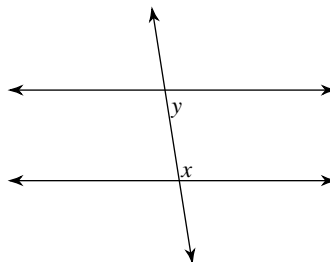


7)



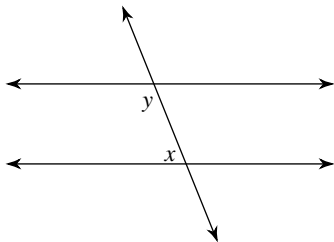
- A) alternate interior
- B) alternate exterior
- C) consecutive interior
- D) corresponding

8)



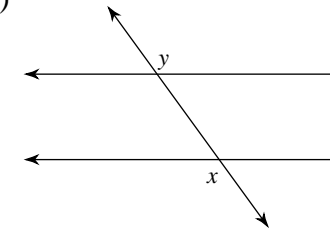
- A) alternate interior
- B) alternate exterior
- C) corresponding
- D) consecutive interior

9)



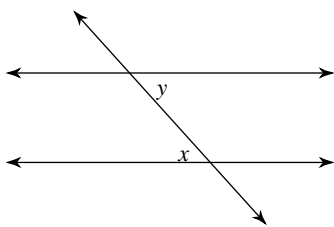
- A) alternate exterior
- B) consecutive interior
- C) alternate interior
- D) corresponding

10)



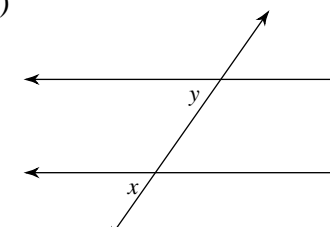
- A) alternate interior
- B) consecutive interior
- C) corresponding
- D) alternate exterior

11)



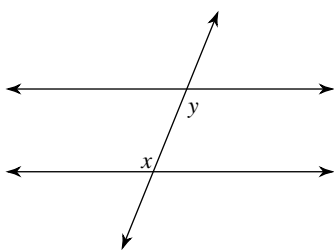
- A) consecutive interior
- B) alternate exterior
- C) alternate interior
- D) corresponding

12)



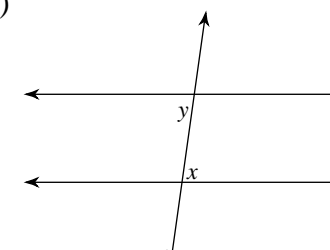
- A) alternate exterior
- B) consecutive interior
- C) corresponding
- D) alternate interior

13)



- A) alternate interior
- B) corresponding
- C) consecutive interior
- D) alternate exterior

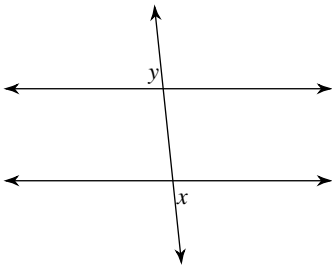
14)



- A) alternate interior
- B) corresponding
- C) alternate exterior
- D) consecutive interior

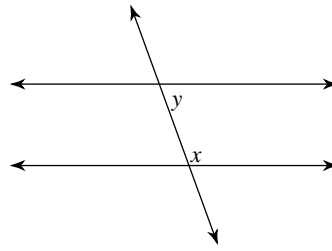


15)



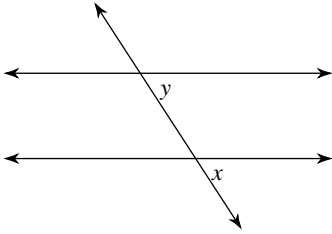
- A) alternate exterior
- B) corresponding
- C) alternate interior
- D) consecutive interior

16)



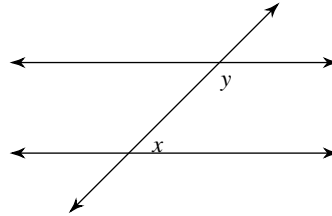
- A) consecutive interior
- B) alternate interior
- C) corresponding
- D) alternate exterior

17)



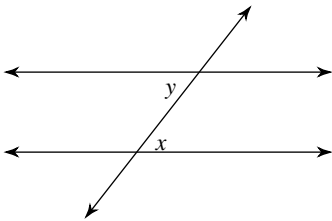
- A) corresponding
- B) alternate exterior
- C) consecutive interior
- D) alternate interior

18)



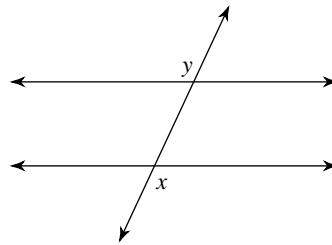
- A) alternate exterior
- B) alternate interior
- C) corresponding
- D) consecutive interior

19)



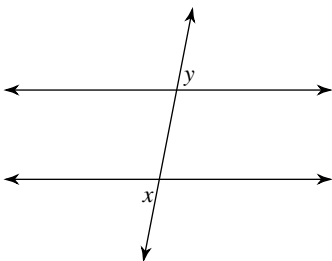
- A) alternate interior
- B) corresponding
- C) consecutive interior
- D) alternate exterior

20)



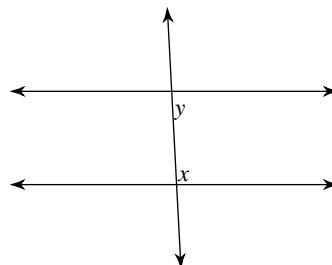
- A) alternate exterior
- B) corresponding
- C) alternate interior
- D) consecutive interior

21)



- A) alternate exterior
- B) corresponding
- C) alternate interior
- D) consecutive interior

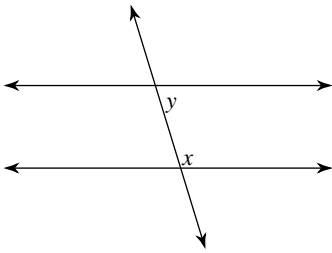
22)



- A) alternate interior
- B) consecutive interior
- C) alternate exterior
- D) corresponding

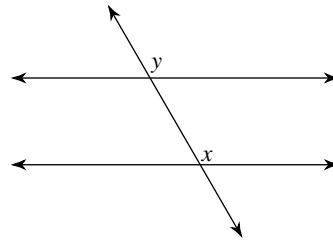


23)



- A) consecutive interior
- B) corresponding
- C) alternate exterior
- D) alternate interior

24)



- A) alternate exterior
- B) corresponding
- C) alternate interior
- D) consecutive interior



Answers to Assignment (ID: 9)

1) A
5) C
9) B
13) A
17) A
21) A

2) A
6) D
10) D
14) A
18) D
22) B

3) A
7) B
11) C
15) A
19) A
23) A

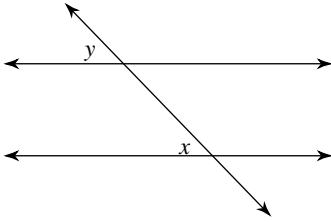
4) A
8) D
12) C
16) A
20) A
24) B



Assignment

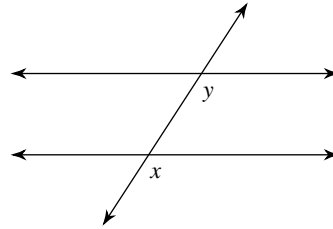
Identify each pair of angles as corresponding, alternate interior, alternate exterior, or consecutive interior.

1)



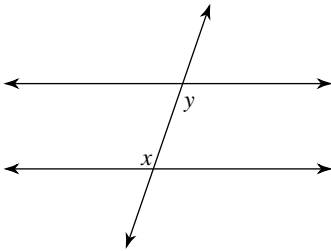
- A) consecutive interior
- B) alternate interior
- C) corresponding
- D) alternate exterior

2)



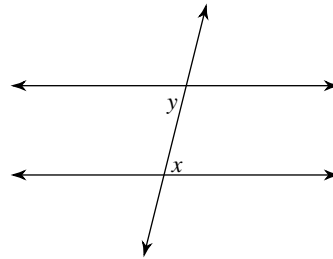
- A) alternate exterior
- B) alternate interior
- C) consecutive interior
- D) corresponding

3)



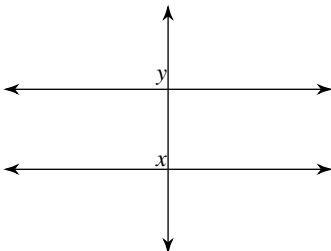
- A) alternate interior
- B) corresponding
- C) alternate exterior
- D) consecutive interior

4)



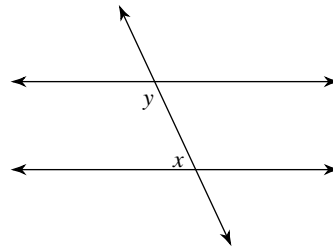
- A) consecutive interior
- B) alternate interior
- C) alternate exterior
- D) corresponding

5)



- A) corresponding
- B) consecutive interior
- C) alternate exterior
- D) alternate interior

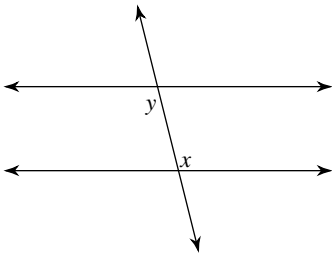
6)



- A) corresponding
- B) consecutive interior
- C) alternate exterior
- D) alternate interior

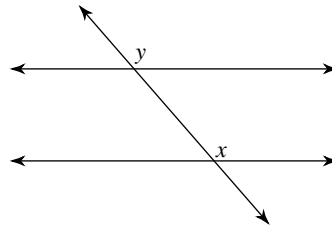


7)



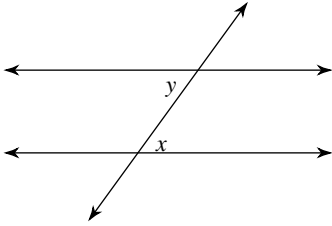
- A) consecutive interior
- B) alternate interior
- C) alternate exterior
- D) corresponding

8)



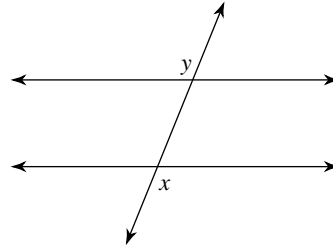
- A) corresponding
- B) alternate interior
- C) consecutive interior
- D) alternate exterior

9)



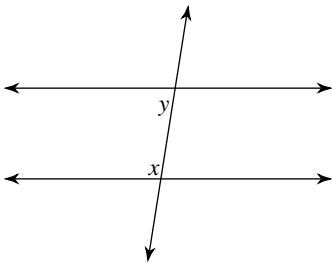
- A) consecutive interior
- B) corresponding
- C) alternate exterior
- D) alternate interior

10)



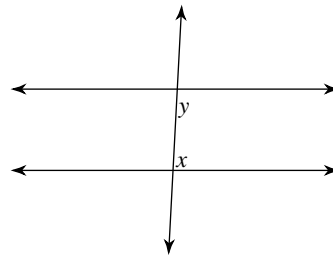
- A) consecutive interior
- B) alternate exterior
- C) alternate interior
- D) corresponding

11)



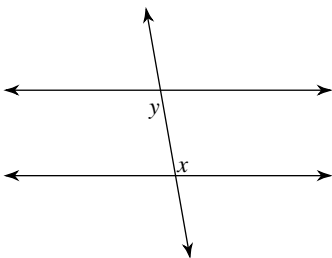
- A) alternate exterior
- B) consecutive interior
- C) alternate interior
- D) corresponding

12)



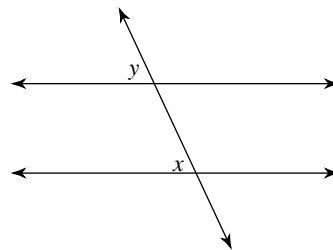
- A) alternate exterior
- B) consecutive interior
- C) corresponding
- D) alternate interior

13)



- A) alternate exterior
- B) consecutive interior
- C) corresponding
- D) alternate interior

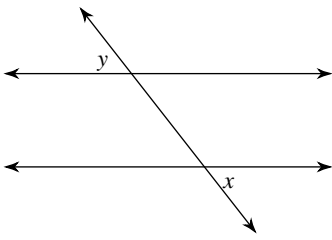
14)



- A) consecutive interior
- B) alternate interior
- C) corresponding
- D) alternate exterior

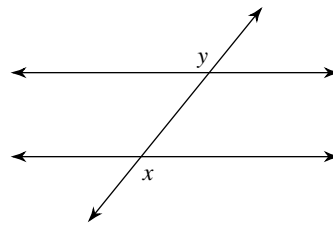


15)



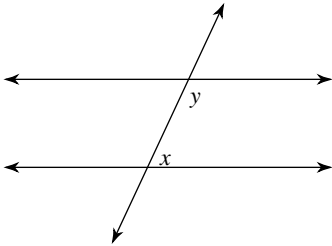
- A) consecutive interior
- B) alternate interior
- C) corresponding
- D) alternate exterior

16)



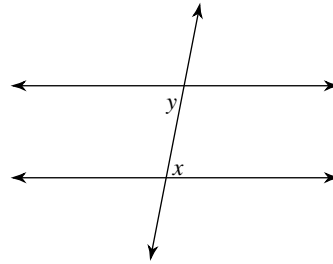
- A) consecutive interior
- B) corresponding
- C) alternate interior
- D) alternate exterior

17)



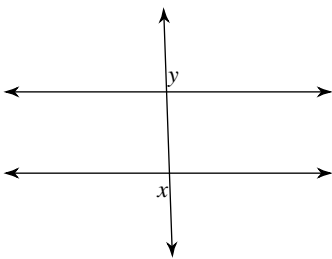
- A) alternate exterior
- B) consecutive interior
- C) alternate interior
- D) corresponding

18)



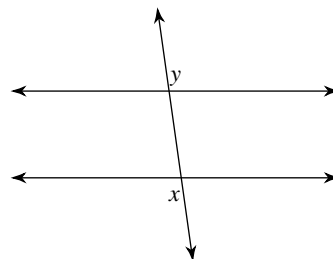
- A) corresponding
- B) alternate exterior
- C) consecutive interior
- D) alternate interior

19)



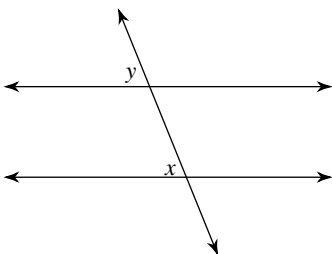
- A) corresponding
- B) consecutive interior
- C) alternate interior
- D) alternate exterior

20)



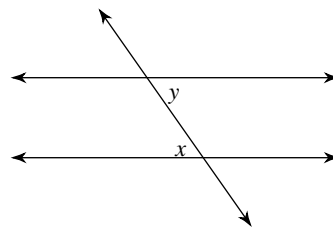
- A) alternate interior
- B) consecutive interior
- C) alternate exterior
- D) corresponding

21)



- A) consecutive interior
- B) alternate exterior
- C) corresponding
- D) alternate interior

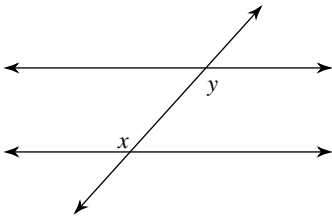
22)



- A) consecutive interior
- B) alternate exterior
- C) alternate interior
- D) corresponding

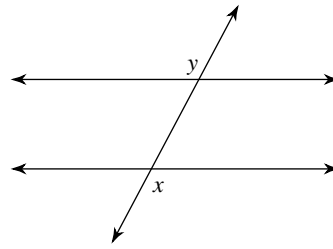


23)



- A) consecutive interior
- B) alternate interior
- C) alternate exterior
- D) corresponding

24)



- A) corresponding
- B) consecutive interior
- C) alternate exterior
- D) alternate interior



Answers to Assignment (ID: 10)

1) C
5) A
9) D
13) D
17) B
21) C

2) D
6) B
10) B
14) C
18) D
22) C

3) A
7) B
11) B
15) D
19) D
23) B

4) B
8) A
12) B
16) D
20) C
24) C

