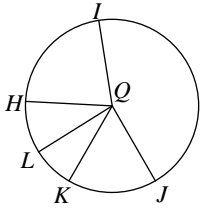


Assignment

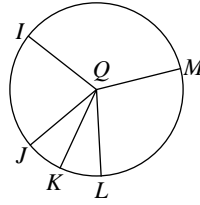
If an angle is given, name the arc it makes. If an arc is given, name its central angle.

1) \widehat{HI}



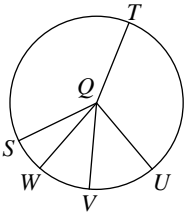
- A) $\angle JQK$ B) $\angle KQL$
 C) $\angle HQI$ D) $\angle IQJ$

2) \widehat{ML}



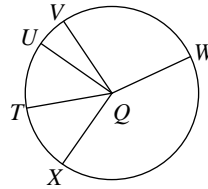
- A) $\angle MQJ$ B) $\angle MQI$
 C) $\angle MQK$ D) $\angle MQL$

3) \widehat{VTW}



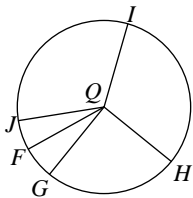
- A) $\angle TQW$ B) $\angle TQU$
 C) $\angle SQT$ D) $\angle VQW$

4) $\angle UQW$



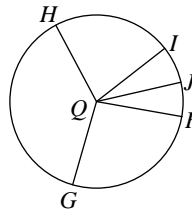
- A) \widehat{UW} B) \widehat{TW}
 C) \widehat{VWX} D) \widehat{VW}

5) Major arc for $\angle JQK$



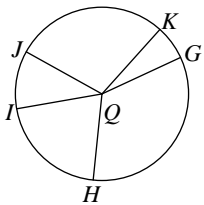
- A) \widehat{IF} B) \widehat{JIG}
 C) \widehat{IG} D) \widehat{HJG}

6) \widehat{GJH}



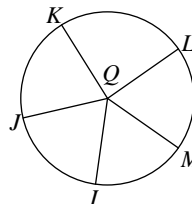
- A) $\angle HQJ$ B) $\angle FQI$
 C) $\angle GQH$ D) $\angle FQH$

7) \widehat{HIK}



- A) $\angle IQK$ B) $\angle HQJ$
 C) $\angle HQK$ D) $\angle GQJ$

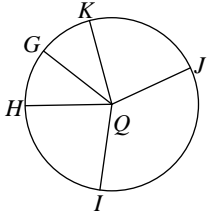
8) \widehat{JKM}



- A) $\angle JQL$ B) $\angle JQK$
 C) $\angle KQL$ D) $\angle JQM$

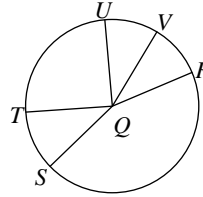


9) \widehat{JIG}



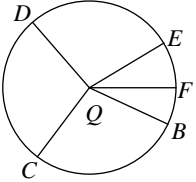
- A) $\angle IQG$ B) $\angle KQI$
 C) $\angle HQG$ D) $\angle JQG$

10) Major arc for $\angle UQV$



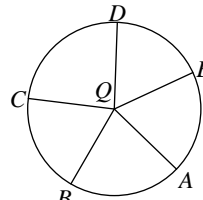
- A) \widehat{UV} B) \widehat{SRV}
 C) \widehat{ST} D) \widehat{USV}

11) Major arc for $\angle BQC$



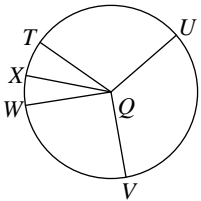
- A) \widehat{CE} B) \widehat{CF}
 C) \widehat{DF} D) \widehat{BEC}

12) Major arc for $\angle BQE$



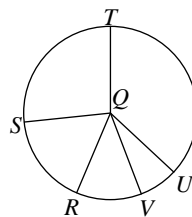
- A) \widehat{BCE} B) \widehat{CD}
 C) \widehat{ADC} D) \widehat{BED}

13) Major arc for $\angle TQV$



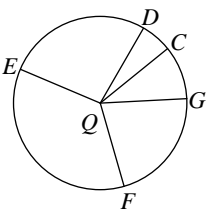
- A) \widehat{TUV} B) \widehat{UV}
 C) \widehat{WUX} D) \widehat{TUV}

14) $\angle TQV$



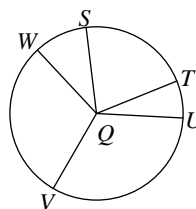
- A) \widehat{USV} B) \widehat{TV}
 C) \widehat{ST} D) \widehat{RSU}

15) Major arc for $\angle FQE$



- A) \widehat{FCE} B) \widehat{EGD}
 C) \widehat{GF} D) \widehat{GFE}

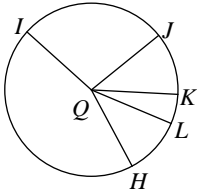
16) \widehat{TW}



- A) $\angle UQW$ B) $\angle TQW$
 C) $\angle VQW$ D) $\angle SQT$

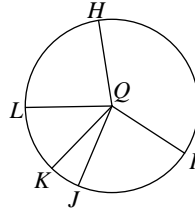


17) \widehat{KL}



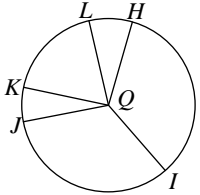
- A) $\angle HQK$ B) $\angle JQK$
 C) $\angle HQJ$ D) $\angle KQL$

18) \widehat{JL}



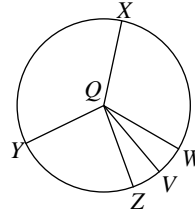
- A) $\angle JQL$ B) $\angle KQL$
 C) $\angle IQJ$ D) $\angle HQK$

19) \widehat{JHL}



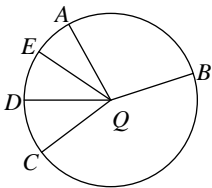
- A) $\angle IQK$ B) $\angle HQL$
 C) $\angle HQK$ D) $\angle JQL$

20) \widehat{ZYX}



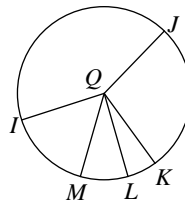
- A) $\angle ZQX$ B) $\angle YQX$
 C) $\angle ZQW$ D) $\angle XQW$

21) \widehat{AD}



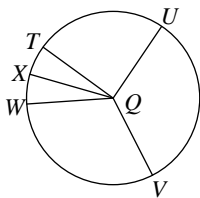
- A) $\angle AQE$ B) $\angle AQD$
 C) $\angle AQB$ D) $\angle BQE$

22) Major arc for $\angle IQJ$



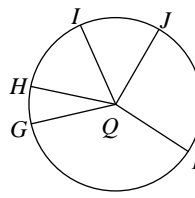
- A) \widehat{ILJ} B) \widehat{LM}
 C) \widehat{KM} D) \widehat{JM}

23) $\angle VQX$



- A) \widehat{TW} B) \widehat{TVX}
 C) \widehat{UX} D) \widehat{VX}

24) Major arc for $\angle GQH$



- A) \widehat{GJ} B) \widehat{GK}
 C) \widehat{GJH} D) \widehat{HK}



Answers to Assignment (ID: 1)

1) C
5) B
9) D
13) D
17) D
21) B

2) D
6) C
10) D
14) B
18) A
22) A

3) D
7) C
11) D
15) A
19) D
23) D

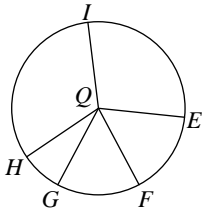
4) A
8) D
12) A
16) B
20) A
24) C



Assignment

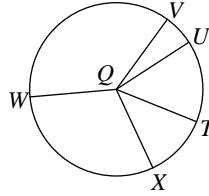
If an angle is given, name the arc it makes. If an arc is given, name its central angle.

1) \widehat{EH}



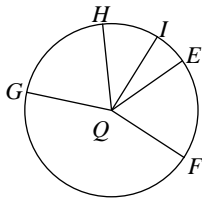
- A) $\angle FQG$ B) $\angle FQH$
 C) $\angle GQI$ D) $\angle EQH$

2) $\angle XQV$



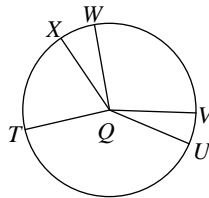
- A) \widehat{XV} B) \widehat{XWV}
 C) \widehat{XWU} D) \widehat{WTV}

3) \widehat{FGH}



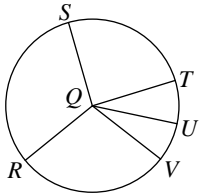
- A) $\angle FQH$ B) $\angle GQI$
 C) $\angle FQG$ D) $\angle EQI$

4) \widehat{WT}



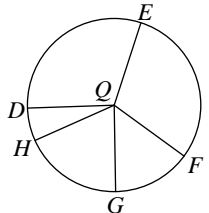
- A) $\angle XQU$ B) $\angle WQT$
 C) $\angle VQT$ D) $\angle WQV$

5) Major arc for $\angle SQU$



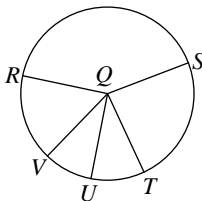
- A) \widehat{SVU} B) \widehat{RS}
 C) \widehat{RU} D) \widehat{USV}

6) Major arc for $\angle EQF$



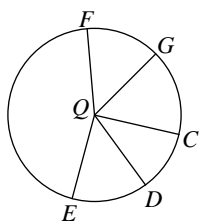
- A) \widehat{DGE} B) \widehat{DEG}
 C) \widehat{EHF} D) \widehat{DG}

7) \widehat{RTV}



- A) $\angle RQS$ B) $\angle SQT$
 C) $\angle RQV$ D) $\angle UQV$

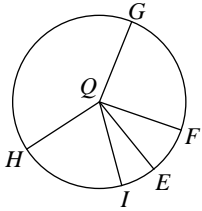
8) \widehat{FG}



- A) $\angle DQF$ B) $\angle FQG$
 C) $\angle CQE$ D) $\angle DQE$

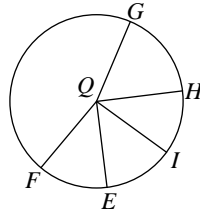


9) $\angle HQF$



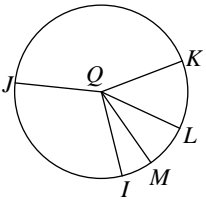
- A) \widehat{IFH} B) \widehat{IHG}
 C) \widehat{HF} D) \widehat{GF}

10) $\angle EQF$



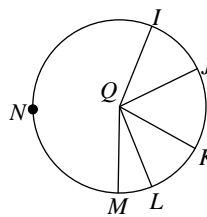
- A) \widehat{HFI} B) \widehat{EFG}
 C) \widehat{EF} D) \widehat{GH}

11) \widehat{IKM}



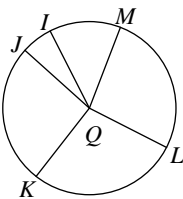
- A) $\angle IQM$ B) $\angle KQL$
 C) $\angle JQM$ D) $\angle IQK$

12) \widehat{JNL}



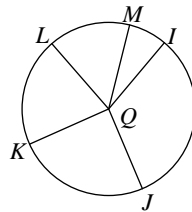
- A) $\angle IQL$ B) $\angle JQL$
 C) $\angle KQL$ D) $\angle LQM$

13) \widehat{MJ}



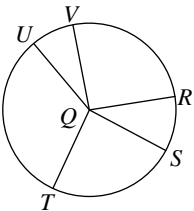
- A) $\angle MQJ$ B) $\angle MQK$
 C) $\angle LQK$ D) $\angle LQI$

14) Major arc for $\angle IQL$



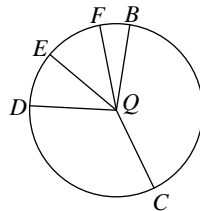
- A) \widehat{IM} B) \widehat{JL}
 C) \widehat{IJL} D) \widehat{IJK}

15) $\angle RQU$



- A) \widehat{RV} B) \widehat{RU}
 C) \widehat{UV} D) \widehat{RTV}

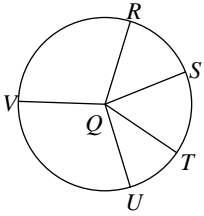
16) $\angle BQD$



- A) \widehat{CFE} B) \widehat{EF}
 C) \widehat{BD} D) \widehat{DBF}

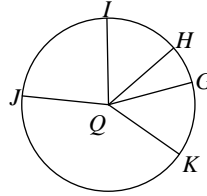


17) \widehat{RUT}



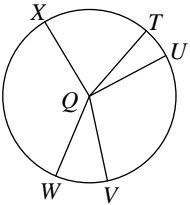
- A) $\angle RQV$ B) $\angle SQU$
 C) $\angle RQT$ D) $\angle TQV$

18) Major arc for $\angle KQH$



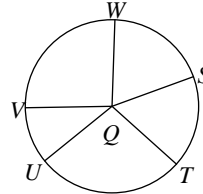
- A) \widehat{IKH} B) \widehat{KJH}
 C) \widehat{KG} D) \widehat{JKG}

19) \widehat{UW}



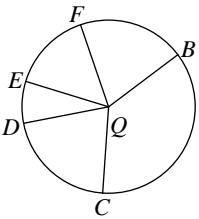
- A) $\angle TQU$ B) $\angle UQV$
 C) $\angle UQW$ D) $\angle WQX$

20) $\angle TQV$



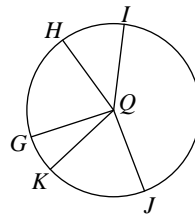
- A) \widehat{SU} B) \widehat{STV}
 C) \widehat{SUW} D) \widehat{TV}

21) \widehat{DF}



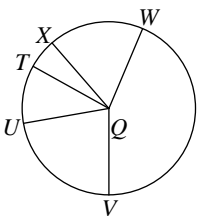
- A) $\angle CQE$ B) $\angle BQE$
 C) $\angle CQD$ D) $\angle DQF$

22) \widehat{HK}



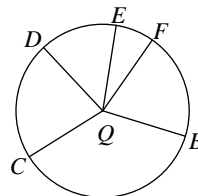
- A) $\angle HQK$ B) $\angle HQI$
 C) $\angle IQK$ D) $\angle GQK$

23) \widehat{WV}



- A) $\angle WQV$ B) $\angle XQW$
 C) $\angle WQT$ D) $\angle XQU$

24) Major arc for $\angle BQC$



- A) \widehat{CFD} B) \widehat{CE}
 C) \widehat{BEC} D) \widehat{EF}



Answers to Assignment (ID: 2)

1) D
5) A
9) C
13) A
17) C
21) D

2) A
6) C
10) C
14) C
18) B
22) A

3) A
7) C
11) A
15) B
19) C
23) A

4) B
8) B
12) B
16) C
20) D
24) C

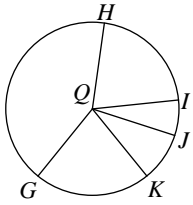


Assignment

Date _____ Period _____

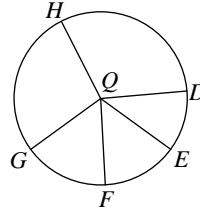
If an angle is given, name the arc it makes. If an arc is given, name its central angle.

1) \widehat{IGK}



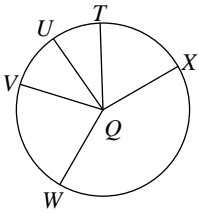
- A) $\angle GQK$ B) $\angle IQK$
 C) $\angle HQJ$ D) $\angle GQI$

2) Major arc for $\angle EQG$



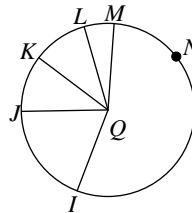
- A) \widehat{EHG} B) \widehat{GH}
 C) \widehat{DE} D) \widehat{FG}

3) \widehat{VXU}



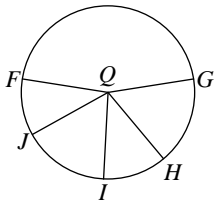
- A) $\angle XQT$ B) $\angle VQU$
 C) $\angle UQT$ D) $\angle XQU$

4) \widehat{LM}



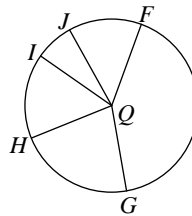
- A) $\angle IQL$ B) $\angle IQK$
 C) $\angle IQJ$ D) $\angle LQM$

5) $\angle GQI$



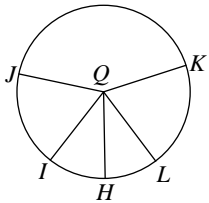
- A) \widehat{IGJ} B) \widehat{GI}
 C) \widehat{FG} D) \widehat{GH}

6) \widehat{GFJ}



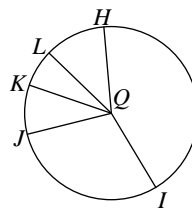
- A) $\angle GQJ$ B) $\angle HQJ$
 C) $\angle FQI$ D) $\angle GQI$

7) Major arc for $\angle IQJ$



- A) \widehat{HIK} B) \widehat{ILJ}
 C) \widehat{HK} D) \widehat{HKI}

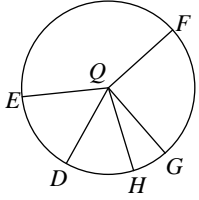
8) $\angle IQJ$



- A) \widehat{IJ} B) \widehat{IL}
 C) \widehat{JHK} D) \widehat{JHL}

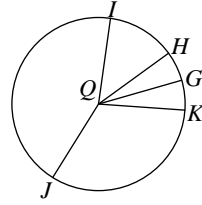


9) \widehat{DEF}



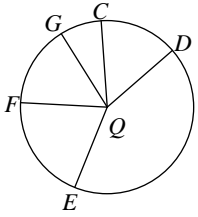
- A) $\angle DQF$ B) $\angle EQG$
 C) $\angle DQG$ D) $\angle FQH$

10) $\angle KQJ$



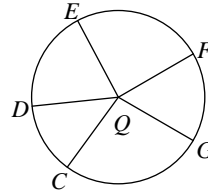
- A) \widehat{JIG} B) \widehat{KG}
 C) \widehat{KJ} D) \widehat{IH}

11) Major arc for $\angle EQF$



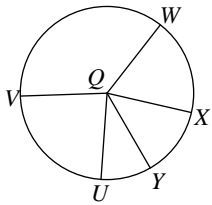
- A) \widehat{CDE} B) \widehat{DEF}
 C) \widehat{DG} D) \widehat{ECF}

12) $\angle DQG$



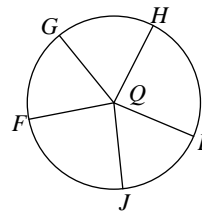
- A) \widehat{DF} B) \widehat{DGF}
 C) \widehat{DGE} D) \widehat{DG}

13) \widehat{UWY}



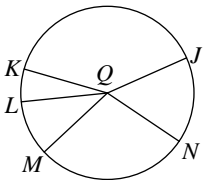
- A) $\angle VQY$ B) $\angle UQY$
 C) $\angle UQW$ D) $\angle UQV$

14) \widehat{HI}



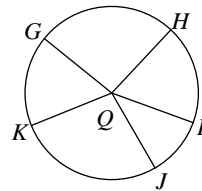
- A) $\angle GQJ$ B) $\angle FQJ$
 C) $\angle HQI$ D) $\angle GQH$

15) $\angle NQL$



- A) \widehat{NL} B) \widehat{LNJ}
 C) \widehat{NKM} D) \widehat{KMJ}

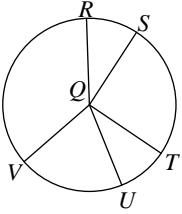
16) Major arc for $\angle GQI$



- A) \widehat{JK} B) \widehat{IK}
 C) \widehat{GH} D) \widehat{GI}

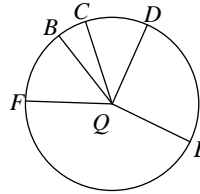


17) Major arc for $\angle TQU$



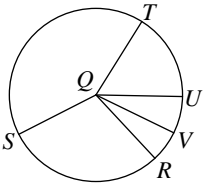
- A) \widehat{TRU} B) \widehat{RS}
 C) \widehat{TRV} D) \widehat{RVU}

18) \widehat{CFD}



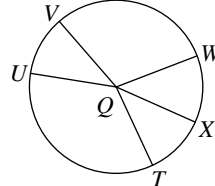
- A) $\angle CQF$ B) $\angle CQD$
 C) $\angle EQF$ D) $\angle BQC$

19) Major arc for $\angle RQV$



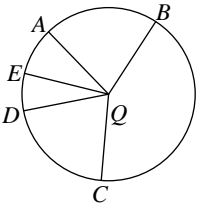
- A) \widehat{STV} B) \widehat{RV}
 C) \widehat{TV} D) \widehat{RTV}

20) Major arc for $\angle UQX$



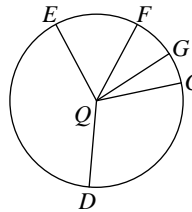
- A) \widehat{TVX} B) \widehat{UVX}
 C) \widehat{VX} D) \widehat{WX}

21) $\angle DQE$



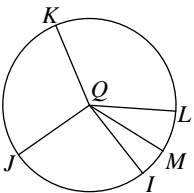
- A) \widehat{AD} B) \widehat{BC}
 C) \widehat{AB} D) \widehat{DE}

22) \widehat{FDG}



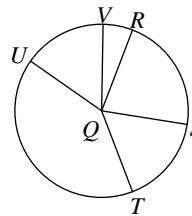
- A) $\angle DQE$ B) $\angle CQE$
 C) $\angle DQG$ D) $\angle FQG$

23) \widehat{IK}



- A) $\angle JQL$ B) $\angle JQK$
 C) $\angle KQL$ D) $\angle IQK$

24) \widehat{RV}



- A) $\angle RQV$ B) $\angle RQU$
 C) $\angle RQS$ D) $\angle SQU$



Answers to Assignment (ID: 3)

1) B
5) B
9) A
13) B
17) A
21) D

2) A
6) A
10) C
14) C
18) B
22) D

3) B
7) B
11) D
15) A
19) D
23) D

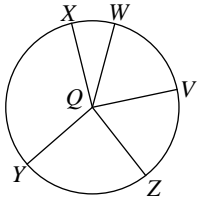
4) D
8) A
12) D
16) D
20) B
24) A



Assignment

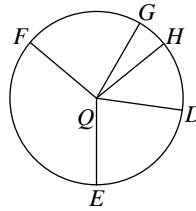
If an angle is given, name the arc it makes. If an arc is given, name its central angle.

1) \widehat{WYV}



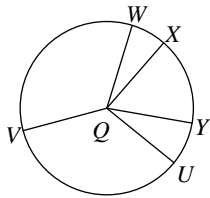
- A) $\angle WQV$
- B) $\angle ZQX$
- C) $\angle YQV$
- D) $\angle ZQV$

2) \widehat{DE}



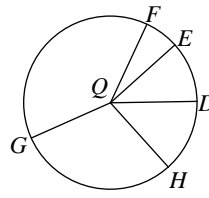
- A) $\angle FQH$
- B) $\angle EQF$
- C) $\angle EQG$
- D) $\angle DQE$

3) \widehat{VYW}



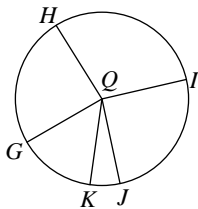
- A) $\angle WQX$
- B) $\angle XQY$
- C) $\angle VQW$
- D) $\angle WQY$

4) \widehat{HG}



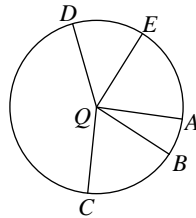
- A) $\angle HQG$
- B) $\angle GQE$
- C) $\angle FQD$
- D) $\angle HQD$

5) \widehat{GH}



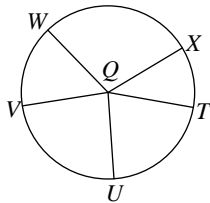
- A) $\angle GQH$
- B) $\angle JQK$
- C) $\angle IQK$
- D) $\angle GQJ$

6) $\angle AQE$



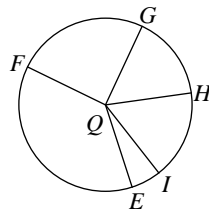
- A) \widehat{CE}
- B) \widehat{BCE}
- C) \widehat{AE}
- D) \widehat{AD}

7) \widehat{TV}



- A) $\angle WQX$
- B) $\angle TQV$
- C) $\angle TQU$
- D) $\angle VQW$

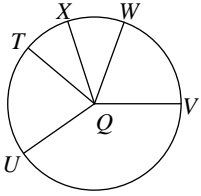
8) Major arc for $\angle HQI$



- A) \widehat{EI}
- B) \widehat{EFG}
- C) \widehat{HFI}
- D) \widehat{FG}

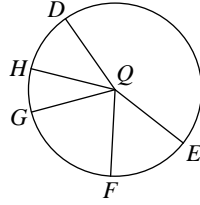


9) \widehat{XV}



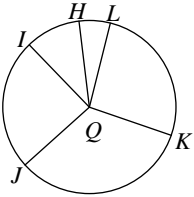
- A) $\angle XQU$ B) $\angle WQV$
 C) $\angle VQT$ D) $\angle XQV$

10) $\angle DQE$



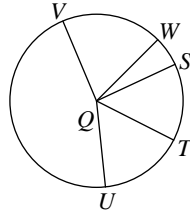
- A) \widehat{GH} B) \widehat{FH}
 C) \widehat{DE} D) \widehat{DGE}

11) $\angle KQH$



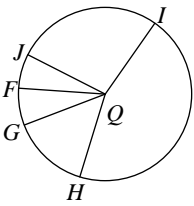
- A) \widehat{KH} B) \widehat{KJH}
 C) \widehat{JI} D) \widehat{LKJ}

12) $\angle TQW$



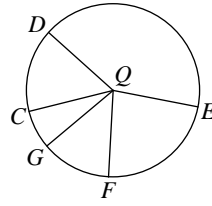
- A) \widehat{SUW} B) \widehat{TW}
 C) \widehat{TUW} D) \widehat{VTW}

13) \widehat{JIG}



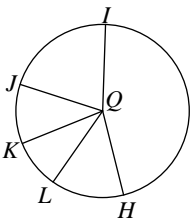
- A) $\angle HQF$ B) $\angle HQG$
 C) $\angle IQG$ D) $\angle JQG$

14) \widehat{CF}



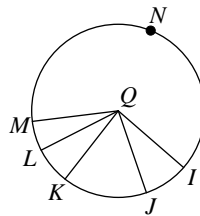
- A) $\angle DQE$ B) $\angle EQF$
 C) $\angle CQF$ D) $\angle DQG$

15) \widehat{KJ}



- A) $\angle LQK$ B) $\angle KQJ$
 C) $\angle LQI$ D) $\angle JQI$

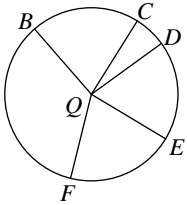
16) \widehat{JM}



- A) $\angle IQK$ B) $\angle KQL$
 C) $\angle IQJ$ D) $\angle JQM$

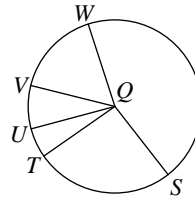


17) \widehat{DE}



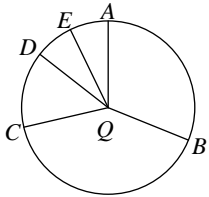
- A) $\angle CQF$ B) $\angle EQF$
 C) $\angle BQE$ D) $\angle DQE$

18) Major arc for $\angle TQW$



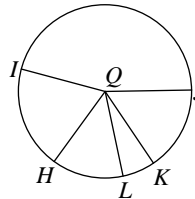
- A) \widehat{SU} B) \widehat{TSW}
 C) \widehat{SUW} D) \widehat{SV}

19) \widehat{AD}



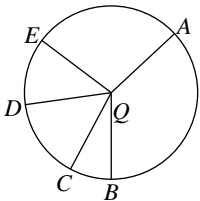
- A) $\angle BQD$ B) $\angle AQD$
 C) $\angle BQE$ D) $\angle DQE$

20) Major arc for $\angle HQK$



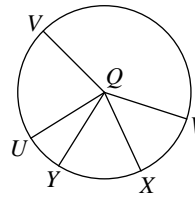
- A) \widehat{HIK} B) \widehat{IJL}
 C) \widehat{HI} D) \widehat{KIL}

21) \widehat{ABD}



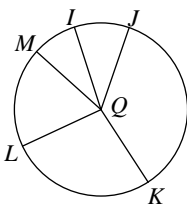
- A) $\angle BQC$ B) $\angle AQD$
 C) $\angle BQD$ D) $\angle AQE$

22) $\angle WQY$



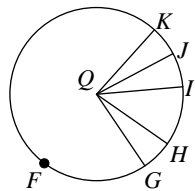
- A) \widehat{UW} B) \widehat{WX}
 C) \widehat{WY} D) \widehat{UX}

23) \widehat{IJL}



- A) $\angle JQK$ B) $\angle IQL$
 C) $\angle JQL$ D) $\angle JQM$

24) $\angle KQI$



- A) \widehat{JFG} B) \widehat{HKG}
 C) \widehat{KI} D) \widehat{KGH}



Answers to Assignment (ID: 4)

- 1) A
- 5) A
- 9) D
- 13) D
- 17) D
- 21) B

- 2) D
- 6) C
- 10) C
- 14) C
- 18) B
- 22) C

- 3) C
- 7) B
- 11) A
- 15) B
- 19) B
- 23) B

- 4) A
- 8) C
- 12) B
- 16) D
- 20) A
- 24) C

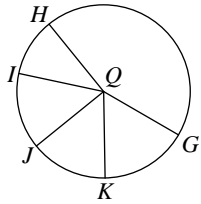


Assignment

Date _____ Period _____

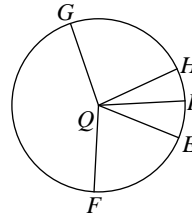
If an angle is given, name the arc it makes. If an arc is given, name its central angle.

1) \widehat{JH}



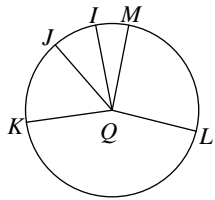
- A) $\angle IQG$
- B) $\angle JQH$
- C) $\angle JQI$
- D) $\angle IQH$

2) Major arc for $\angle HQI$



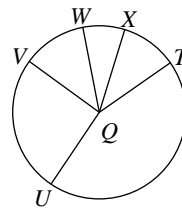
- A) \widehat{FI}
- B) \widehat{EI}
- C) \widehat{HFI}
- D) \widehat{EFH}

3) Major arc for $\angle JQI$



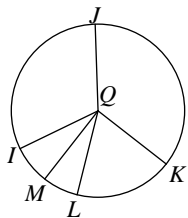
- A) \widehat{KMJ}
- B) \widehat{JI}
- C) \widehat{JLI}
- D) \widehat{MK}

4) \widehat{TVX}



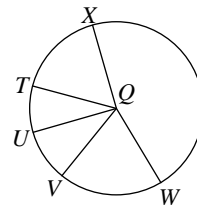
- A) $\angle TQV$
- B) $\angle UQX$
- C) $\angle TQW$
- D) $\angle TQX$

5) $\angle KQL$



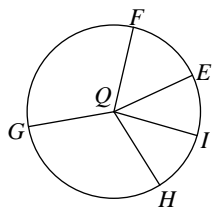
- A) \widehat{JKM}
- B) \widehat{KL}
- C) \widehat{LJM}
- D) \widehat{IKM}

6) $\angle WQU$



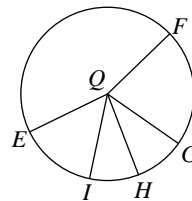
- A) \widehat{WU}
- B) \widehat{XT}
- C) \widehat{XUW}
- D) \widehat{UWT}

7) Major arc for $\angle HQF$



- A) \widehat{HEG}
- B) \widehat{FE}
- C) \widehat{HG}
- D) \widehat{HGF}

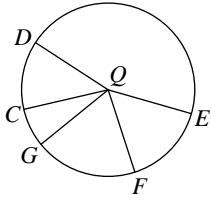
8) \widehat{EFH}



- A) $\angle EQF$
- B) $\angle FQG$
- C) $\angle GQH$
- D) $\angle EQH$

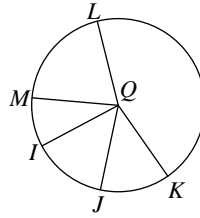


9) \widehat{ECF}



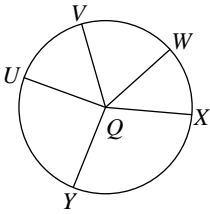
- A) $\angle CQF$ B) $\angle EQF$
 C) $\angle CQG$ D) $\angle CQD$

10) \widehat{MLJ}



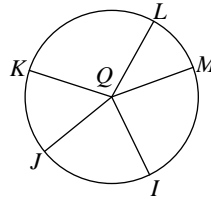
- A) $\angle KQJ$ B) $\angle MQK$
 C) $\angle MQJ$ D) $\angle MQL$

11) \widehat{WX}



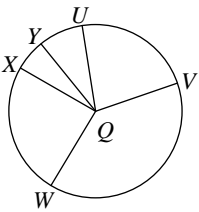
- A) $\angle VQY$ B) $\angle VQX$
 C) $\angle VQW$ D) $\angle WQX$

12) Major arc for $\angle IQJ$



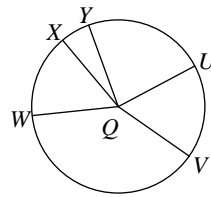
- A) \widehat{JL} B) \widehat{ILK}
 C) \widehat{ILJ} D) \widehat{JKM}

13) \widehat{UVX}



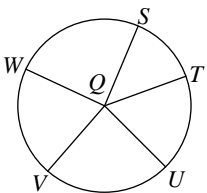
- A) $\angle UQY$ B) $\angle UQX$
 C) $\angle UQV$ D) $\angle WQY$

14) \widehat{VWX}



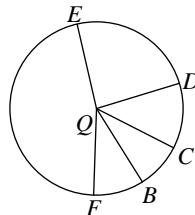
- A) $\angle UQY$ B) $\angle VQX$
 C) $\angle WQX$ D) $\angle UQX$

15) \widehat{USW}



- A) $\angle VQW$ B) $\angle UQW$
 C) $\angle TQW$ D) $\angle TQU$

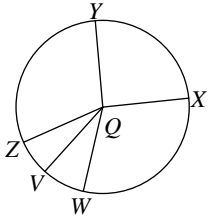
16) $\angle FQE$



- A) \widehat{FDB} B) \widehat{EBD}
 C) \widehat{FE} D) \widehat{EFB}

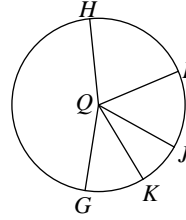


17) \widehat{XZV}



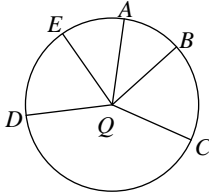
- A) $\angle YQX$ B) $\angle ZQW$
 C) $\angle XQV$ D) $\angle WQV$

18) $\angle IQJ$



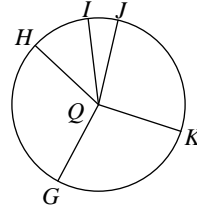
- A) \widehat{HI} B) \widehat{IK}
 C) \widehat{JK} D) \widehat{IJ}

19) Major arc for $\angle BQC$



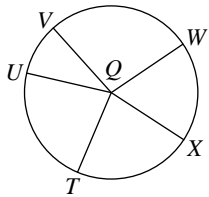
- A) \widehat{BCE} B) \widehat{BEC}
 C) \widehat{DBE} D) \widehat{CAD}

20) Major arc for $\angle JQK$



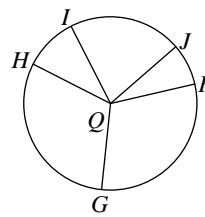
- A) \widehat{JK} B) \widehat{JHK}
 C) \widehat{IK} D) \widehat{IGK}

21) Major arc for $\angle UQW$



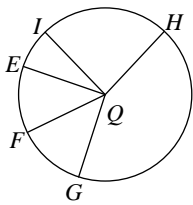
- A) \widehat{UV} B) \widehat{VW}
 C) \widehat{UXW} D) \widehat{TVX}

22) $\angle FQG$



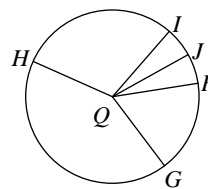
- A) \widehat{GH} B) \widehat{FG}
 C) \widehat{IGJ} D) \widehat{FHJ}

23) Major arc for $\angle IQE$



- A) \widehat{IHG} B) \widehat{FE}
 C) \widehat{IE} D) \widehat{IGE}

24) \widehat{GH}



- A) $\angle HQI$ B) $\angle IQJ$
 C) $\angle GQH$ D) $\angle GQJ$



Answers to Assignment (ID: 5)

- 1) B
- 5) B
- 9) B
- 13) B
- 17) C
- 21) C

- 2) C
- 6) A
- 10) C
- 14) B
- 18) D
- 22) B

- 3) C
- 7) D
- 11) D
- 15) B
- 19) B
- 23) D

- 4) D
- 8) D
- 12) C
- 16) C
- 20) B
- 24) C

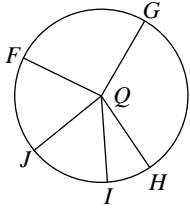


Assignment

Date _____ Period _____

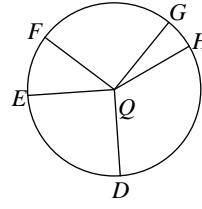
If an angle is given, name the arc it makes. If an arc is given, name its central angle.

1) $\angle FQJ$



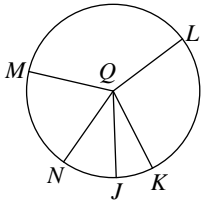
- A) \widehat{FH} B) \widehat{FJ}
 C) \widehat{IGJ} D) \widehat{GJH}

2) \widehat{DEG}



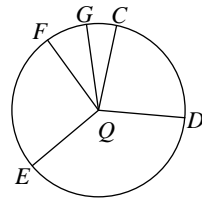
- A) $\angle FQG$ B) $\angle FQH$
 C) $\angle DQG$ D) $\angle EQH$

3) \widehat{NL}



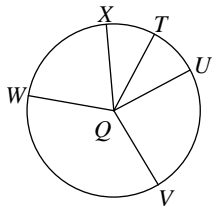
- A) $\angle MQJ$ B) $\angle NQL$
 C) $\angle NQM$ D) $\angle MQL$

4) Major arc for $\angle CQE$



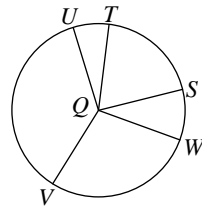
- A) \widehat{CE} B) \widehat{FDG}
 C) \widehat{EF} D) \widehat{CDE}

5) \widehat{TW}



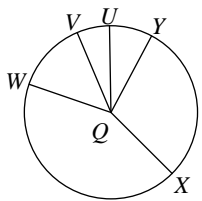
- A) $\angle VQW$ B) $\angle UQW$
 C) $\angle UQV$ D) $\angle TQW$

6) \widehat{UWS}



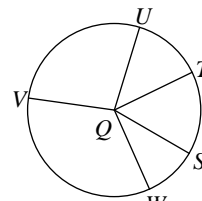
- A) $\angle UQS$ B) $\angle VQT$
 C) $\angle UQT$ D) $\angle TQS$

7) Major arc for $\angle WQV$



- A) \widehat{YVX} B) \widehat{WYV}
 C) \widehat{VXU} D) \widehat{XU}

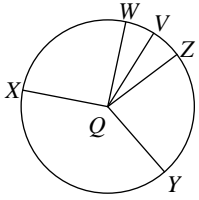
8) Major arc for $\angle WQU$



- A) \widehat{WVT} B) \widehat{WTV}
 C) \widehat{VU} D) \widehat{WVU}

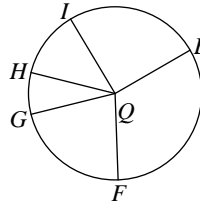


9) \widehat{ZYW}



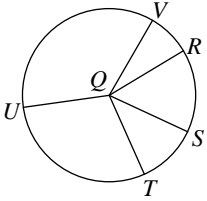
- A) $\angle YQV$ B) $\angle XQV$
 C) $\angle WQV$ D) $\angle ZQW$

10) \widehat{FH}



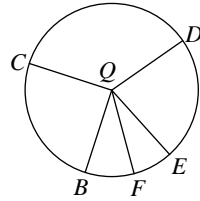
- A) $\angle EQH$ B) $\angle GQH$
 C) $\angle FQH$ D) $\angle FQI$

11) \widehat{SVU}



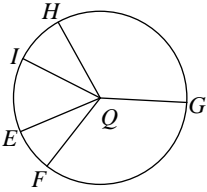
- A) $\angle RQV$ B) $\angle SQU$
 C) $\angle UQV$ D) $\angle RQU$

12) $\angle BQC$



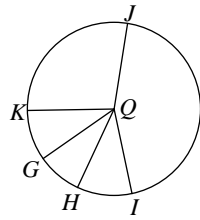
- A) \widehat{CFD} B) \widehat{BC}
 C) \widehat{DF} D) \widehat{EF}

13) Major arc for $\angle GQF$



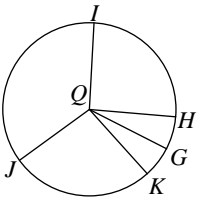
- A) \widehat{IE} B) \widehat{HG}
 C) \widehat{GIF} D) \widehat{HE}

14) \widehat{IKG}



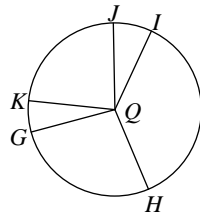
- A) $\angle HQG$ B) $\angle KQJ$
 C) $\angle KQH$ D) $\angle IQG$

15) \widehat{IKG}



- A) $\angle IQG$ B) $\angle JQI$
 C) $\angle HQG$ D) $\angle KQI$

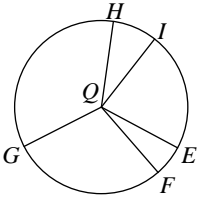
16) \widehat{KIG}



- A) $\angle JQI$ B) $\angle KQG$
 C) $\angle KQH$ D) $\angle IQH$

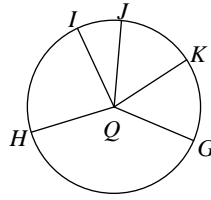


17) \widehat{HI}



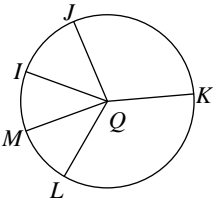
- A) $\angle EQH$ B) $\angle HQI$
 C) $\angle EQF$ D) $\angle FQI$

18) \widehat{GHJ}



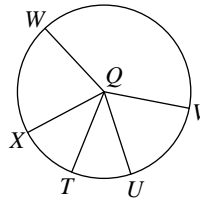
- A) $\angle GQK$ B) $\angle JQK$
 C) $\angle GQJ$ D) $\angle HQI$

19) \widehat{JM}



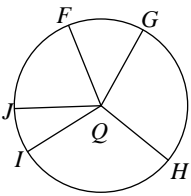
- A) $\angle JQM$ B) $\angle JQK$
 C) $\angle KQM$ D) $\angle IQK$

20) Major arc for $\angle XQT$



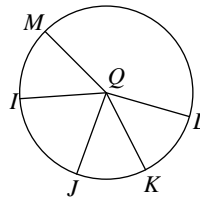
- A) \widehat{XVT} B) \widehat{VT}
 C) \widehat{XV} D) \widehat{UT}

21) \widehat{IJ}



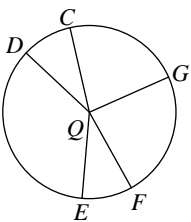
- A) $\angle HQJ$ B) $\angle IQJ$
 C) $\angle FQI$ D) $\angle GQI$

22) $\angle MQK$



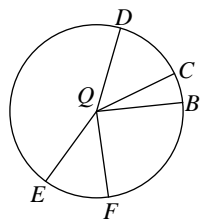
- A) \widehat{MJL} B) \widehat{MK}
 C) \widehat{LJ} D) \widehat{MLJ}

23) \widehat{FEC}



- A) $\angle FQD$ B) $\angle EQC$
 C) $\angle GQD$ D) $\angle FQC$

24) \widehat{ED}



- A) $\angle DQB$ B) $\angle FQE$
 C) $\angle EQD$ D) $\angle FQC$



Answers to Assignment (ID: 6)

1) B
5) D
9) D
13) C
17) B
21) B

2) C
6) A
10) C
14) D
18) C
22) B

3) B
7) B
11) B
15) A
19) A
23) D

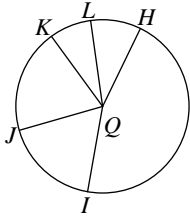
4) D
8) D
12) B
16) B
20) A
24) C



Assignment

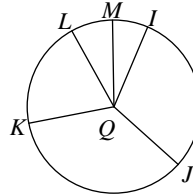
If an angle is given, name the arc it makes. If an arc is given, name its central angle.

1) \widehat{JHK}



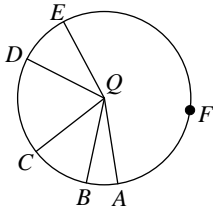
- A) $\angle JQK$ B) $\angle HQJ$
 C) $\angle IQK$ D) $\angle JQL$

2) \widehat{IM}



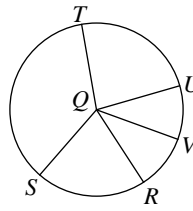
- A) $\angle IQK$ B) $\angle KQL$
 C) $\angle JQM$ D) $\angle IQM$

3) $\angle CQE$



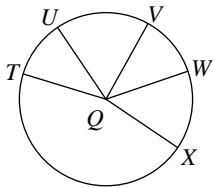
- A) \widehat{AB} B) \widehat{CE}
 C) \widehat{CAE} D) \widehat{ADB}

4) \widehat{TU}



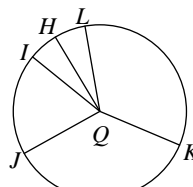
- A) $\angle TQU$ B) $\angle SQV$
 C) $\angle RQV$ D) $\angle RQS$

5) Major arc for $\angle TQV$



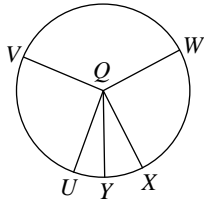
- A) \widehat{TWV} B) \widehat{TU}
 C) \widehat{UV} D) \widehat{UXW}

6) \widehat{LH}



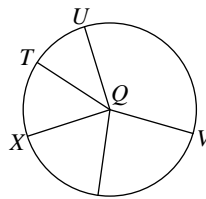
- A) $\angle KQJ$ B) $\angle JQH$
 C) $\angle LQH$ D) $\angle JQI$

7) Major arc for $\angle VQY$



- A) \widehat{UV} B) \widehat{WY}
 C) \widehat{VWY} D) \widehat{XVY}

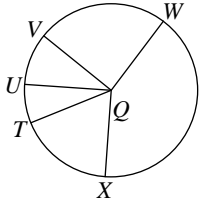
8) Major arc for $\angle VQW$



- A) \widehat{UVX} B) \widehat{UV}
 C) \widehat{VTX} D) \widehat{VTW}

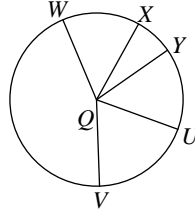


9) \widehat{VTW}



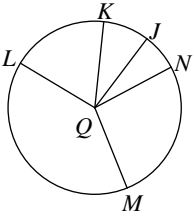
- A) $\angle VQW$ B) $\angle TQV$
 C) $\angle TQU$ D) $\angle TQX$

10) $\angle XQY$



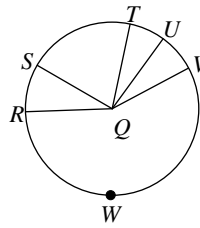
- A) \widehat{XY} B) \widehat{VW}
 C) \widehat{WUX} D) \widehat{UW}

11) Major arc for $\angle MQL$



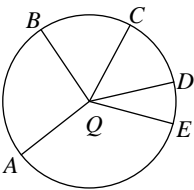
- A) \widehat{KMJ} B) \widehat{NM}
 C) \widehat{MK} D) \widehat{MJL}

12) \widehat{SVT}



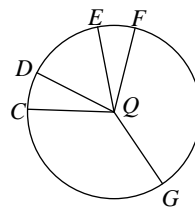
- A) $\angle SQT$ B) $\angle TQV$
 C) $\angle RQS$ D) $\angle RQT$

13) Major arc for $\angle BQD$



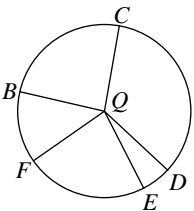
- A) \widehat{AC} B) \widehat{BE}
 C) \widehat{BED} D) \widehat{BEC}

14) \widehat{DGE}



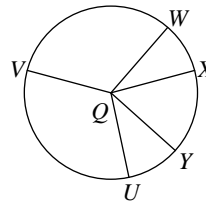
- A) $\angle CQG$ B) $\angle DQF$
 C) $\angle CQF$ D) $\angle DQE$

15) $\angle BQE$



- A) \widehat{DE} B) \widehat{BE}
 C) \widehat{DBF} D) \widehat{CDF}

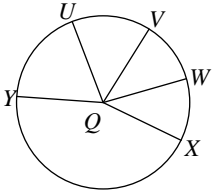
16) \widehat{UXV}



- A) $\angle WQX$ B) $\angle UQW$
 C) $\angle UQV$ D) $\angle WQY$

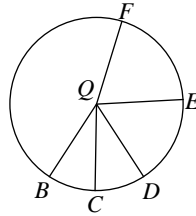


17) $\angle VQX$



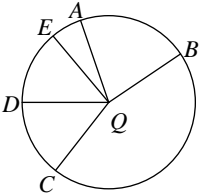
- A) \widehat{UY} B) \widehat{VX}
 C) \widehat{WUX} D) \widehat{UX}

18) Major arc for $\angle EQC$



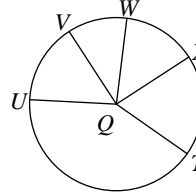
- A) \widehat{CEB} B) \widehat{DB}
 C) \widehat{EBC} D) \widehat{DFB}

19) \widehat{DE}



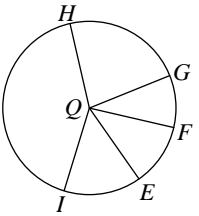
- A) $\angle BQC$ B) $\angle CQD$
 C) $\angle DQE$ D) $\angle AQE$

20) $\angle VQX$



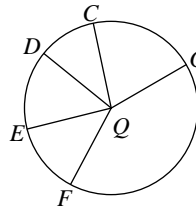
- A) \widehat{TUW} B) \widehat{WUX}
 C) \widehat{VX} D) \widehat{WX}

21) Major arc for $\angle FQE$



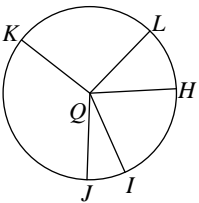
- A) \widehat{FE} B) \widehat{FHE}
 C) \widehat{GIF} D) \widehat{IH}

22) $\angle DQC$



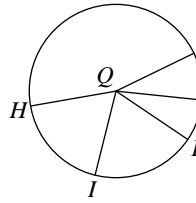
- A) \widehat{FCE} B) \widehat{EGC}
 C) \widehat{DC} D) \widehat{GE}

23) \widehat{HKI}



- A) $\angle JQK$ B) $\angle HQJ$
 C) $\angle HQL$ D) $\angle HQI$

24) Major arc for $\angle HQF$



- A) \widehat{IE} B) \widehat{HGF}
 C) \widehat{IHF} D) \widehat{FE}



Answers to Assignment (ID: 7)

1) A
5) A
9) A
13) C
17) B
21) B

2) D
6) C
10) A
14) D
18) C
22) C

3) B
7) C
11) D
15) B
19) C
23) D

4) A
8) D
12) A
16) C
20) C
24) B

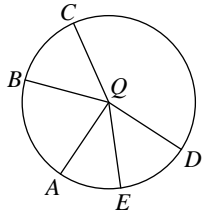


Assignment

Date _____ Period _____

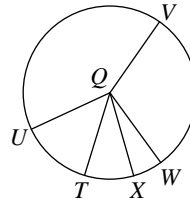
If an angle is given, name the arc it makes. If an arc is given, name its central angle.

1) \widehat{DE}



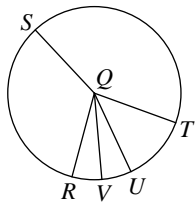
- A) $\angle A Q D$ B) $\angle D Q E$
 C) $\angle A Q E$ D) $\angle A Q B$

2) \widehat{TUV}



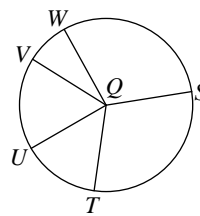
- A) $\angle T Q U$ B) $\angle T Q X$
 C) $\angle T Q W$ D) $\angle T Q V$

3) Major arc for $\angle R Q T$



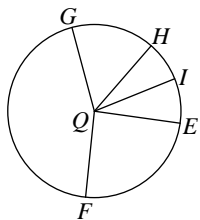
- A) $\widehat{R S T}$ B) $\widehat{R S}$
 C) $\widehat{R U S}$ D) $\widehat{R T}$

4) $\angle S Q W$



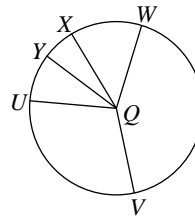
- A) $\widehat{S V}$ B) $\widehat{S U W}$
 C) $\widehat{S W}$ D) $\widehat{V W}$

5) \widehat{EI}



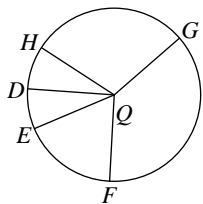
- A) $\angle E Q H$ B) $\angle E Q I$
 C) $\angle F Q G$ D) $\angle E Q G$

6) $\angle X Q W$



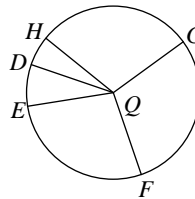
- A) $\widehat{W U}$ B) $\widehat{X W U}$
 C) $\widehat{X W}$ D) $\widehat{Y V W}$

7) $\widehat{H G F}$



- A) $\angle G Q D$ B) $\angle H Q F$
 C) $\angle E Q D$ D) $\angle F Q D$

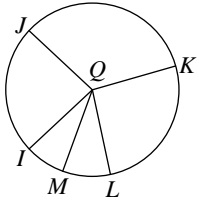
8) Major arc for $\angle E Q D$



- A) $\widehat{F H D}$ B) $\widehat{G F}$
 C) $\widehat{E G D}$ D) $\widehat{E D}$

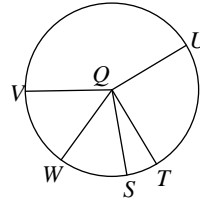


9) \widehat{IJL}



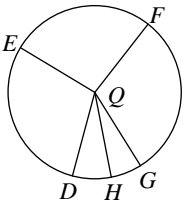
- A) $\angle JQL$ B) $\angle IQL$
 C) $\angle JQK$ D) $\angle KQM$

10) \widehat{VU}



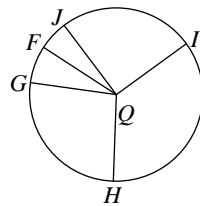
- A) $\angle VQU$ B) $\angle WQU$
 C) $\angle VQS$ D) $\angle TQS$

11) $\angle GQH$



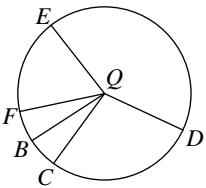
- A) \widehat{FH} B) \widehat{EFG}
 C) \widehat{EG} D) \widehat{GH}

12) \widehat{JH}



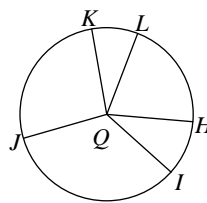
- A) $\angle IQH$ B) $\angle JQF$
 C) $\angle IQF$ D) $\angle JQH$

13) Major arc for $\angle EQC$



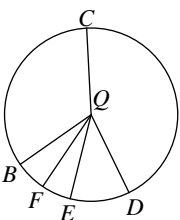
- A) \widehat{FED} B) \widehat{EDB}
 C) \widehat{EDC} D) \widehat{FCE}

14) \widehat{HIK}



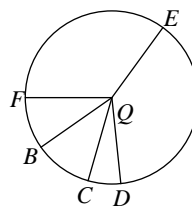
- A) $\angle KQL$ B) $\angle IQJ$
 C) $\angle HQK$ D) $\angle HQJ$

15) \widehat{BCD}



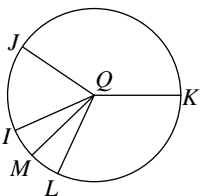
- A) $\angle BQC$ B) $\angle BQD$
 C) $\angle DQF$ D) $\angle CQF$

16) \widehat{EBC}



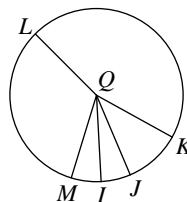
- A) $\angle CQB$ B) $\angle EQC$
 C) $\angle FQC$ D) $\angle DQB$

17) Major arc for $\angle KQM$



- A) \widehat{KIM} B) \widehat{JKM}
 C) \widehat{KI} D) \widehat{KI}

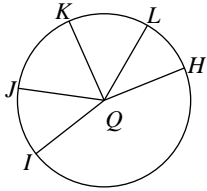
18) Major arc for $\angle KQI$



- A) \widehat{KMI} B) \widehat{KMJ}
 C) \widehat{LKI} D) \widehat{LKJ}

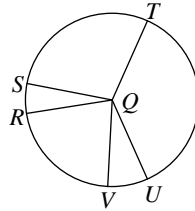


19) $\angle HQI$



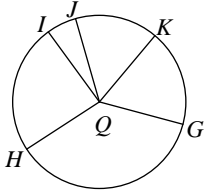
- A) \widehat{ILK} B) \widehat{JHK}
 C) \widehat{HI} D) \widehat{JK}

20) $\angle TQU$



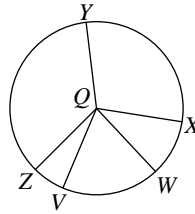
- A) \widehat{RUS} B) \widehat{STV}
 C) \widehat{USV} D) \widehat{TU}

21) \widehat{GHI}



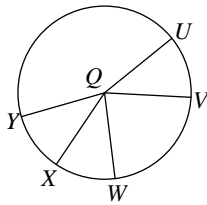
- A) $\angle HQJ$ B) $\angle GQI$
 C) $\angle GQH$ D) $\angle HQK$

22) $\angle YQX$



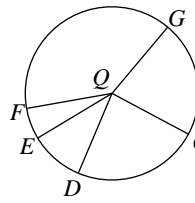
- A) \widehat{YX} B) \widehat{ZV}
 C) \widehat{YXV} D) \widehat{ZY}

23) \widehat{WY}



- A) $\angle WQY$ B) $\angle VQX$
 C) $\angle UQY$ D) $\angle VQY$

24) Major arc for $\angle DQE$



- A) \widehat{EG} B) \widehat{CF}
 C) \widehat{EF} D) \widehat{DGE}



Answers to Assignment (ID: 8)

1) B
5) B
9) B
13) C
17) A
21) B

2) D
6) C
10) A
14) C
18) A
22) A

3) A
7) B
11) D
15) B
19) C
23) A

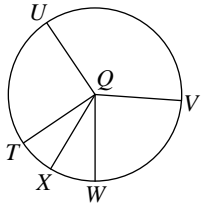
4) C
8) C
12) D
16) B
20) D
24) D



Assignment

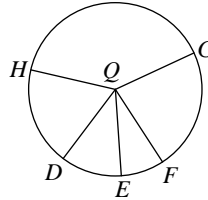
If an angle is given, name the arc it makes. If an arc is given, name its central angle.

1) \widehat{VX}



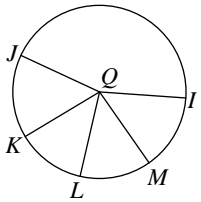
- A) $\angle VQX$ B) $\angle UQX$
 C) $\angle WQX$ D) $\angle VQW$

2) Major arc for $\angle FQE$



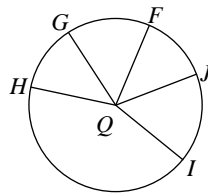
- A) \widehat{FHE} B) \widehat{GHD}
 C) \widehat{GDE} D) \widehat{HG}

3) Major arc for $\angle KQI$



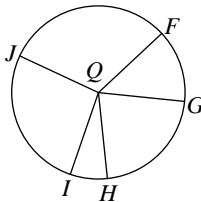
- A) \widehat{MIJ} B) \widehat{MI}
 C) \widehat{KJI} D) \widehat{LIJ}

4) \widehat{IF}



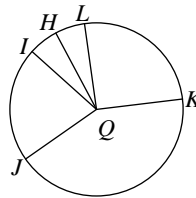
- A) $\angle HQF$ B) $\angle JQF$
 C) $\angle JQI$ D) $\angle IQF$

5) \widehat{GH}



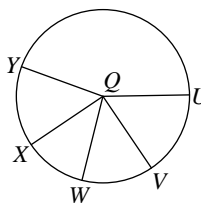
- A) $\angle GQH$ B) $\angle GQI$
 C) $\angle FQJ$ D) $\angle HQI$

6) \widehat{JH}



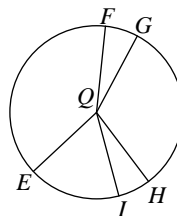
- A) $\angle JQH$ B) $\angle KQH$
 C) $\angle JQI$ D) $\angle LQJ$

7) Major arc for $\angle XQY$



- A) \widehat{VW} B) \widehat{UW}
 C) \widehat{UXW} D) \widehat{XVY}

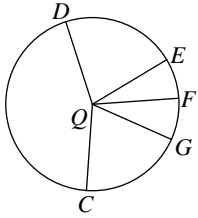
8) $\angle FQI$



- A) \widehat{FG} B) \widehat{FI}
 C) \widehat{HI} D) \widehat{EG}

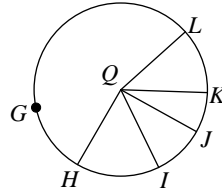


9) Major arc for $\angle EQG$



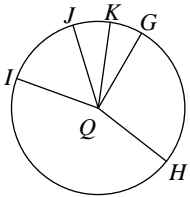
- A) \overline{DF} B) \overline{DE}
 C) \overline{CFD} D) \overline{ECG}

10) Major arc for $\angle JQH$



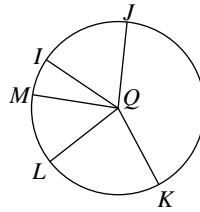
- A) \overline{JLH} B) \overline{JH}
 C) \overline{LHI} D) \overline{KGH}

11) $\angle GQK$



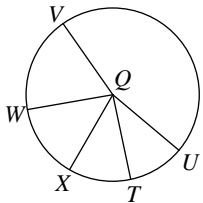
- A) \overline{GK} B) \overline{HK}
 C) \overline{HKI} D) \overline{GI}

12) Major arc for $\angle IQM$



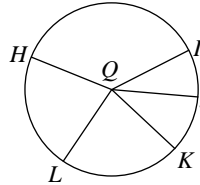
- A) \overline{JKL} B) \overline{IKM}
 C) \overline{KIM} D) \overline{KL}

13) $\angle WQV$



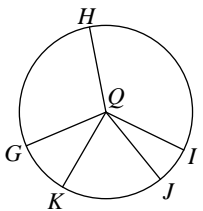
- A) \overline{VUT} B) \overline{VU}
 C) \overline{WVT} D) \overline{WV}

14) $\angle IQK$



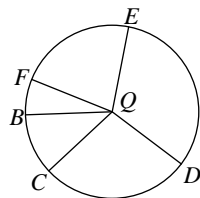
- A) \overline{IK} B) \overline{JHL}
 C) \overline{HJL} D) \overline{HKJ}

15) $\angle GQK$



- A) \overline{GK} B) \overline{IJ}
 C) \overline{GHI} D) \overline{GHJ}

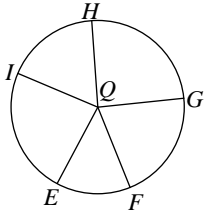
16) Major arc for $\angle FQE$



- A) \overline{FCE} B) \overline{EDC}
 C) \overline{DFC} D) \overline{EDB}

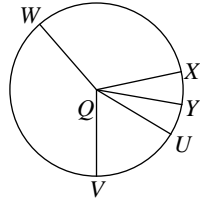


17) Major arc for $\angle IQH$



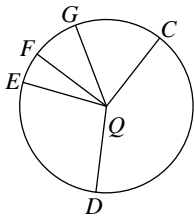
- A) \overline{FHE} B) \overline{HEG}
 C) \overline{HG} D) \overline{IFH}

18) $\angle XQY$



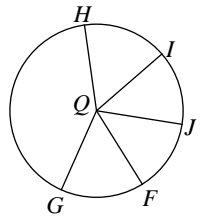
- A) \overline{UVW} B) \overline{XY}
 C) \overline{UX} D) \overline{UW}

19) $\angle DQE$



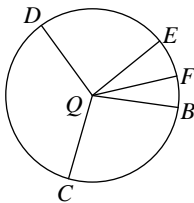
- A) \overline{DE} B) \overline{ECF}
 C) \overline{ECG} D) \overline{CE}

20) Major arc for $\angle GQH$



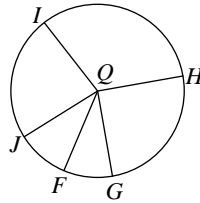
- A) \overline{GJH} B) \overline{HJ}
 C) \overline{HFJ} D) \overline{FGH}

21) \overline{DBF}



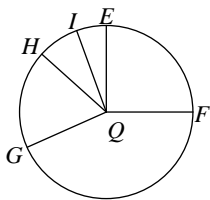
- A) $\angle DQF$ B) $\angle BQE$
 C) $\angle EQF$ D) $\angle DQE$

22) \overline{IFH}



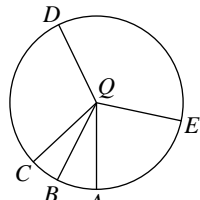
- A) $\angle GQF$ B) $\angle JQF$
 C) $\angle JQG$ D) $\angle IQH$

23) \overline{GEH}



- A) $\angle FQH$ B) $\angle HQI$
 C) $\angle GQH$ D) $\angle EQI$

24) Major arc for $\angle AQE$



- A) \overline{BCE} B) \overline{CDE}
 C) \overline{ACE} D) \overline{ADC}



Answers to Assignment (ID: 9)

- 1) A
- 5) A
- 9) D
- 13) D
- 17) D
- 21) A

- 2) A
- 6) A
- 10) A
- 14) A
- 18) B
- 22) D

- 3) C
- 7) D
- 11) A
- 15) A
- 19) A
- 23) C

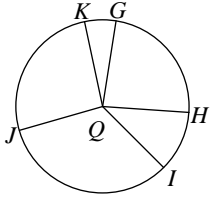
- 4) D
- 8) B
- 12) B
- 16) A
- 20) A
- 24) C



Assignment

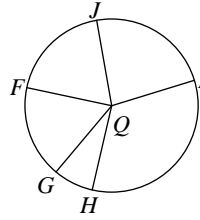
If an angle is given, name the arc it makes. If an arc is given, name its central angle.

1) $\angle GQK$



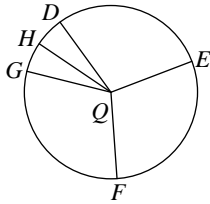
- A) \widehat{IJ} B) \widehat{GK}
 C) \widehat{IJK} D) \widehat{HI}

2) Major arc for $\angle IQG$



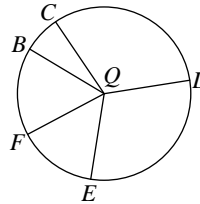
- A) \widehat{JI} B) \widehat{HJG}
 C) \widehat{IFG} D) \widehat{HG}

3) $\angle FQH$



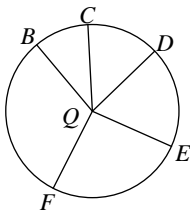
- A) \widehat{EF} B) \widehat{FH}
 C) \widehat{DE} D) \widehat{DG}

4) $\angle EQF$



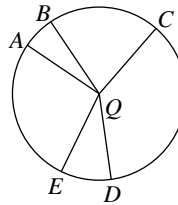
- A) \widehat{EF} B) \widehat{BEC}
 C) \widehat{CF} D) \widehat{BC}

5) \widehat{BFE}



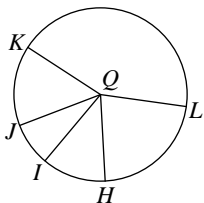
- A) $\angle BQC$ B) $\angle BQE$
 C) $\angle CQF$ D) $\angle DQF$

6) $\angle BQD$



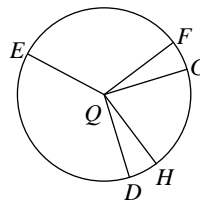
- A) \widehat{BC} B) \widehat{BCD}
 C) \widehat{BD} D) \widehat{BEC}

7) \widehat{HK}



- A) $\angle KQL$ B) $\angle IQK$
 C) $\angle HQK$ D) $\angle IQJ$

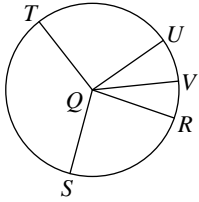
8) \widehat{FDG}



- A) $\angle FQH$ B) $\angle EQG$
 C) $\angle DQE$ D) $\angle FQG$

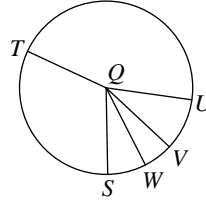


9) \widehat{TRU}



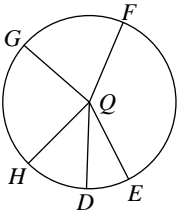
- A) $\angle TQU$ B) $\angle SQT$
 C) $\angle RQT$ D) $\angle SQT$

10) \widehat{UV}



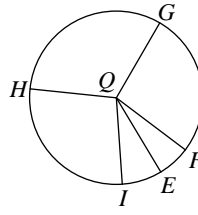
- A) $\angle UQW$ B) $\angle SQT$
 C) $\angle SQW$ D) $\angle UQV$

11) \widehat{ED}



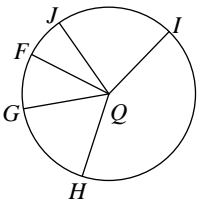
- A) $\angle HQF$ B) $\angle FQE$
 C) $\angle GQD$ D) $\angle EQD$

12) \widehat{IFH}



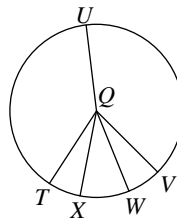
- A) $\angle IQF$ B) $\angle IQG$
 C) $\angle GQE$ D) $\angle IQH$

13) \widehat{JF}



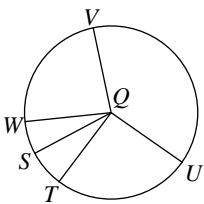
- A) $\angle IQF$ B) $\angle JQH$
 C) $\angle IQG$ D) $\angle JQF$

14) \widehat{VTW}



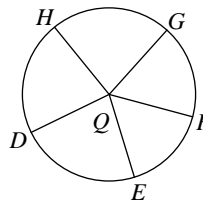
- A) $\angle TQV$ B) $\angle TQX$
 C) $\angle UQW$ D) $\angle VQW$

15) \widehat{UWS}



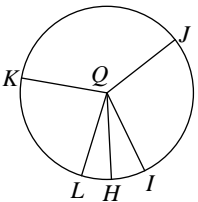
- A) $\angle WQT$ B) $\angle UQT$
 C) $\angle UQS$ D) $\angle TQS$

16) \widehat{EGD}



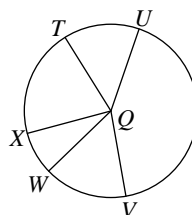
- A) $\angle GQE$ B) $\angle GQD$
 C) $\angle HQD$ D) $\angle EQD$

17) \widehat{KHJ}



- A) $\angle IQH$ B) $\angle LQJ$
 C) $\angle KOH$ D) $\angle KOI$

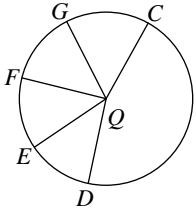
18) \widehat{TX}



- A) $\angle TQV$ B) $\angle UQW$
 C) $\angle UQX$ D) $\angle TQX$

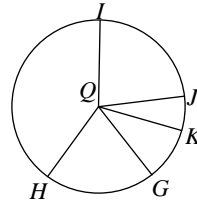


19) Major arc for $\angle EQF$



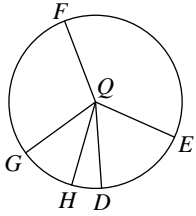
- A) \widehat{DGF} B) \widehat{CEG}
 C) \widehat{DG} D) \widehat{ECF}

20) $\angle JQK$



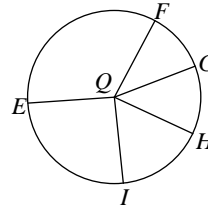
- A) \widehat{JK} B) \widehat{IGK}
 C) \widehat{GK} D) \widehat{HJ}

21) \widehat{HE}



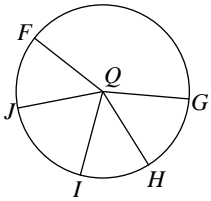
- A) $\angle HQG$ B) $\angle GQF$
 C) $\angle HQE$ D) $\angle FQD$

22) \widehat{GEH}



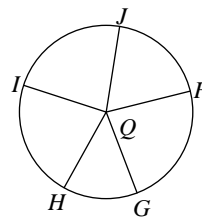
- A) $\angle FQI$ B) $\angle FQG$
 C) $\angle EQG$ D) $\angle GQH$

23) \widehat{HJ}



- A) $\angle HQJ$ B) $\angle FQI$
 C) $\angle FQG$ D) $\angle HQI$

24) \widehat{FG}



- A) $\angle GQH$ B) $\angle FQG$
 C) $\angle HQJ$ D) $\angle FQI$



Answers to Assignment (ID: 10)

1) B
5) B
9) A
13) D
17) D
21) C

2) C
6) C
10) D
14) D
18) D
22) D

3) B
7) C
11) D
15) C
19) D
23) A

4) A
8) D
12) D
16) D
20) A
24) B

