

Assignment

Date _____ Period ____

Construct a line segment congruent to each given line segment.

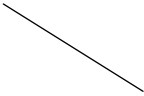
1)



2)



3)



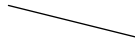
4)



5)



6)



7)



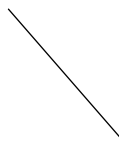
8)



9)



10)



11)



12)



13)



14)



15)



16)



17)



18)



19)



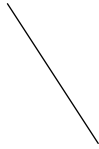
20)



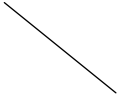
21)



22)



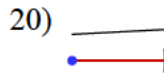
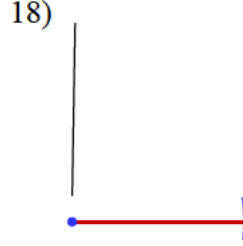
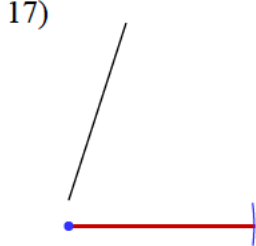
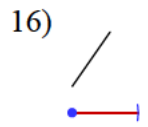
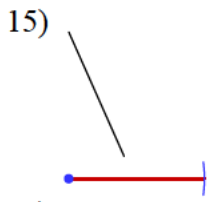
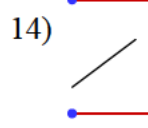
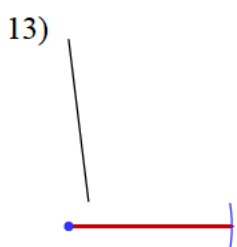
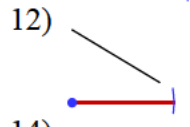
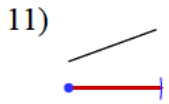
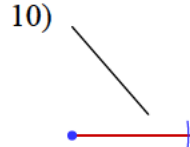
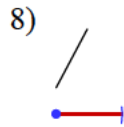
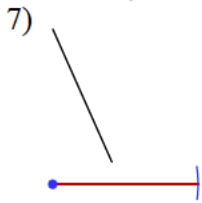
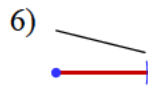
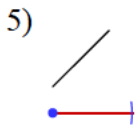
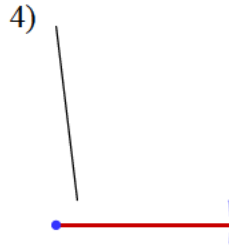
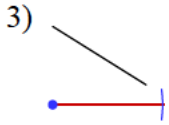
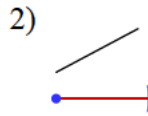
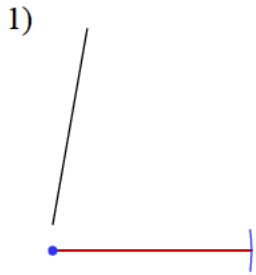
23)

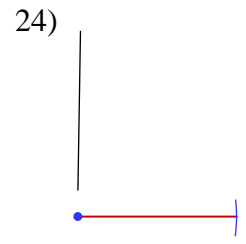
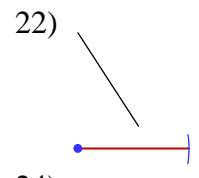
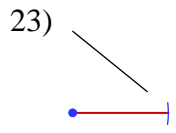
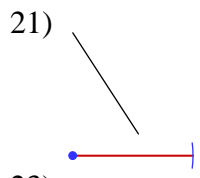


24)



Answers to Assignment (ID: 1)





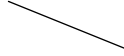
Assignment

Construct a line segment congruent to each given line segment.

1)




2)



3)



4)



5)




6)



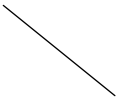
7)



8)



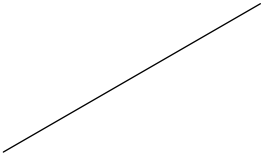
9)




10)



11)



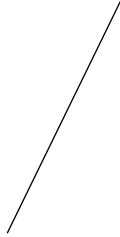
12)



13)



14)



15)



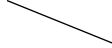
16)



17)



18)



19)



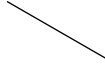
20)



21)




22)



23)



24)



Answers to Assignment (ID: 2)

1)



3)



5)



7)



9)



11)



13)



15)



17)



19)



2)



4)



6)



8)



10)



12)



14)



16)



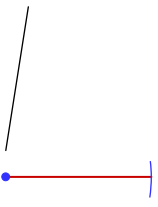
18)



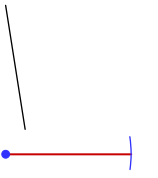
20)



21)



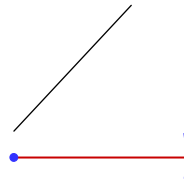
23)



22)

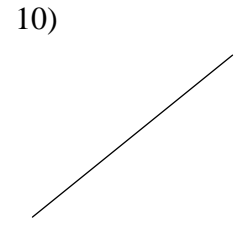
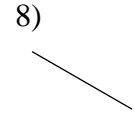
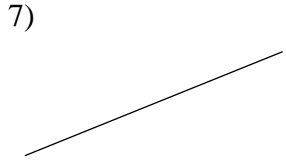
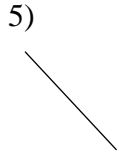
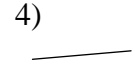
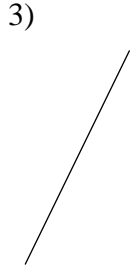
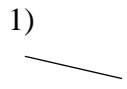


24)



Assignment


Construct a line segment congruent to each given line segment.



11)



12)



13)



14)



15)



16)



17)



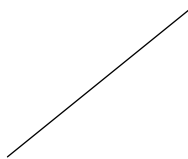
18)



19)



20)



21)



22)



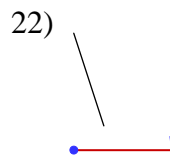
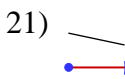
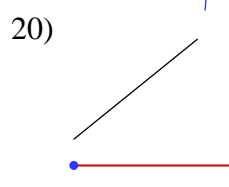
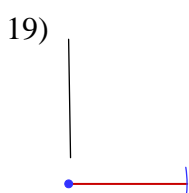
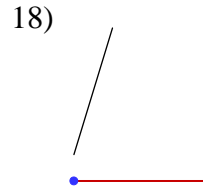
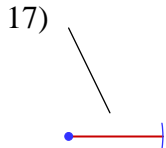
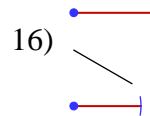
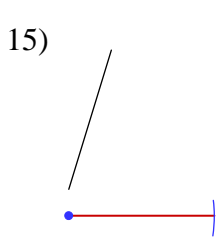
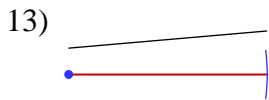
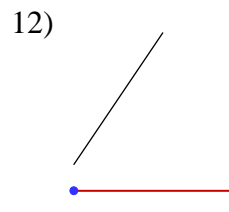
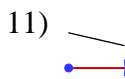
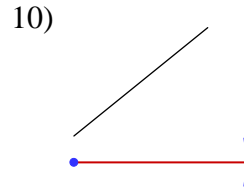
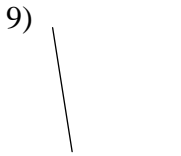
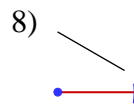
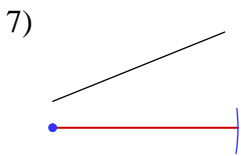
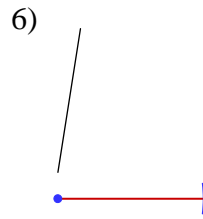
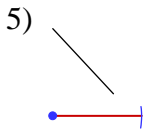
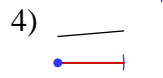
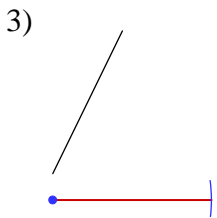
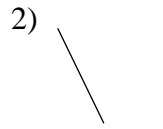
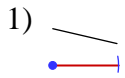
23)



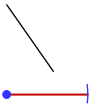
24)



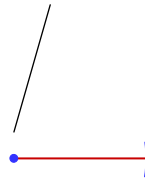
Answers to Assignment (ID: 3)



23)



24)

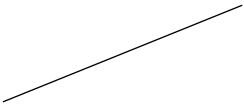


Assignment

Date _____ Period ____

Construct a line segment congruent to each given line segment.

1)




2)



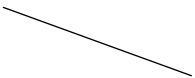
3)



4)




5)



6)



7)



8)



9)



10)



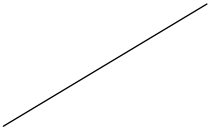
11)




12)



13)



14)



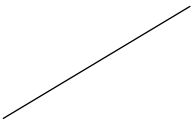
15)



16)




17)



18)



19)



20)



21)



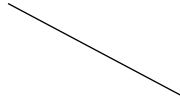
22)



23)

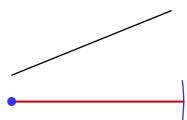


24)



Answers to Assignment (ID: 4)

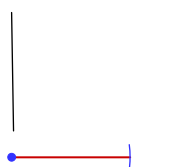
1)



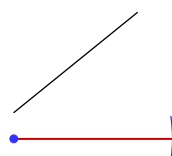
2)



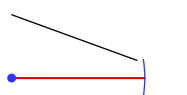
3)



4)



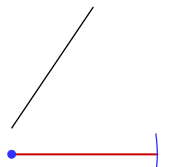
5)



6)



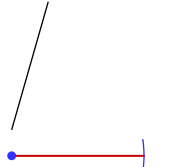
7)



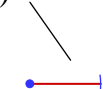
8)



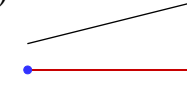
9)



10)



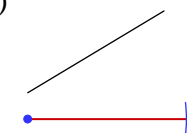
11)



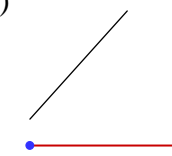
12)



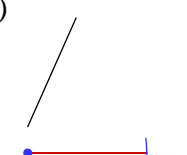
13)



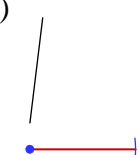
14)



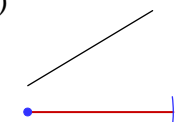
15)



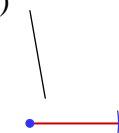
16)



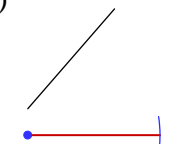
17)



18)



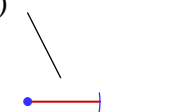
19)



20)



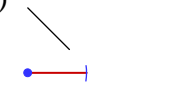
21)



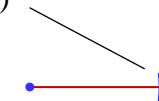
22)



23)



24)



Assignment


Date _____ Period ____

Construct a line segment congruent to each given line segment.


1)



2)



3)



4)



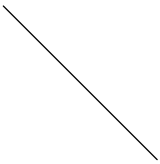
5)



6)



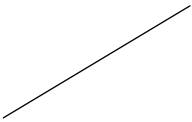
7)



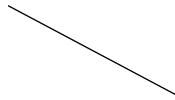
8)



9)



10)



11)




12)



13)



14)



15)



16)



17)



18)



19)



20)




21)



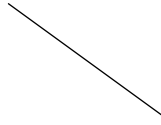
22)



23)



24)

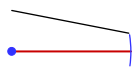


Answers to Assignment (ID: 5)

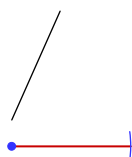
1)



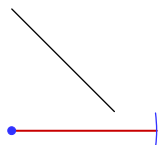
3)



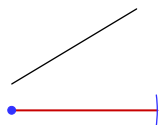
5)



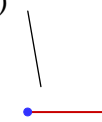
7)



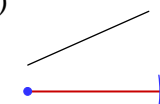
9)



11)



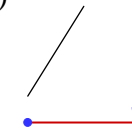
13)



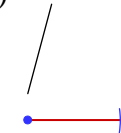
15)



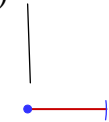
17)



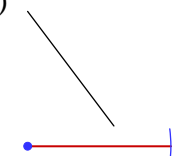
19)



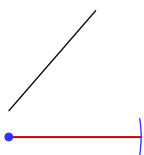
21)



23)



2)



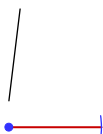
4)



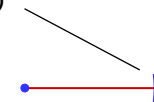
6)



8)



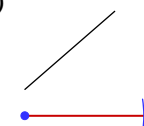
10)



12)



14)



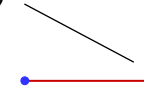
16)



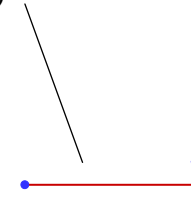
18)



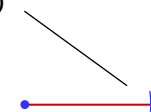
20)



22)



24)




Assignment

Construct a line segment congruent to each given line segment.

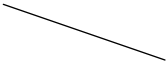
1)



2)



3)



4)




5)



6)



7)



8)



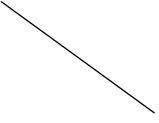
9)



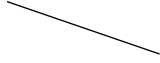
10)



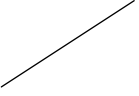
11)



12)



13)




14)



15)



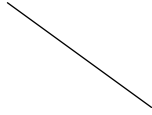
16)



17)



18)



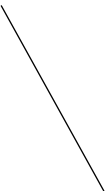
19)



20)




21)



22)



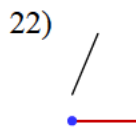
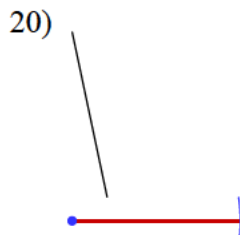
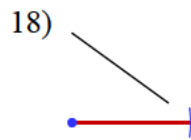
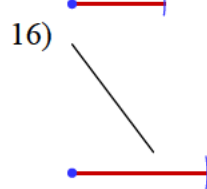
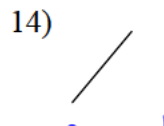
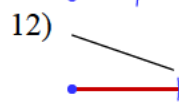
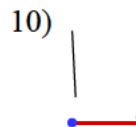
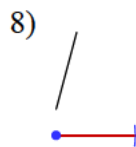
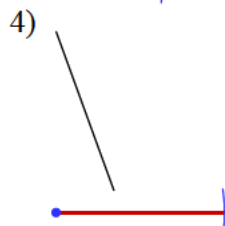
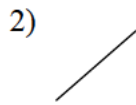
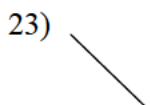
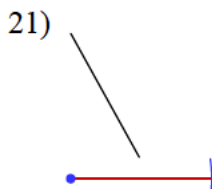
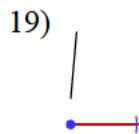
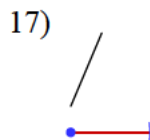
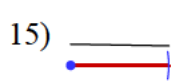
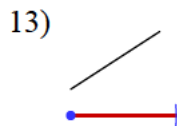
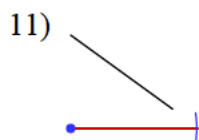
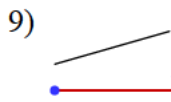
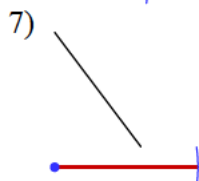
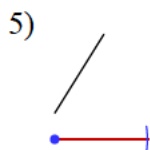
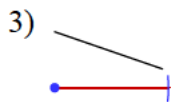
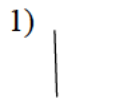
23)



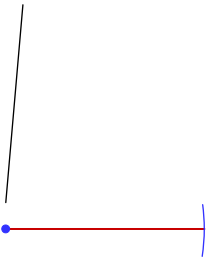
24)



Answers to Assignment (ID: 6)



24)

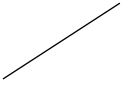


Assignment

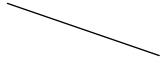
Date _____ Period ____

Construct a line segment congruent to each given line segment.

1)



2)



3)



4)



5)



6)



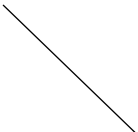
7)



8)



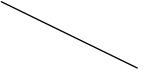
9)




10)



11)



12)



13)



14)



15)



16)




17)



18)



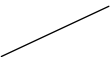
19)



20)



21)



22)



23)



24)

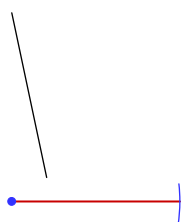


Answers to Assignment (ID: 7)

1)



3)



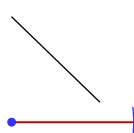
5)



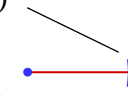
7)



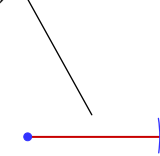
9)



11)



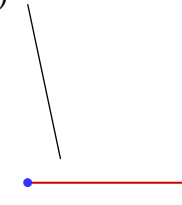
13)



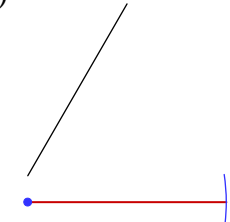
15)



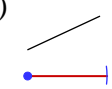
17)



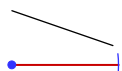
19)



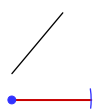
21)



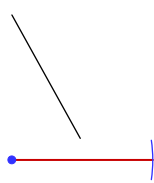
2)



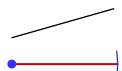
4)



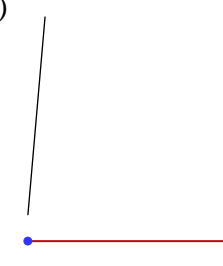
6)



8)



10)




12)



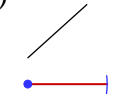
14)



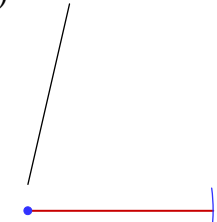
16)



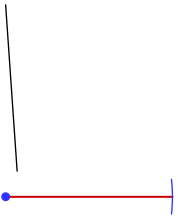
18)



20)



22)



24)



23)




Assignment

Construct a line segment congruent to each given line segment.

1)




2)



3)



4)



5)



6)



7)



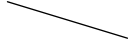
8)



9)



10)



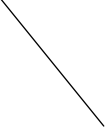
11)



12)



13)



14)



15)




16)



17)



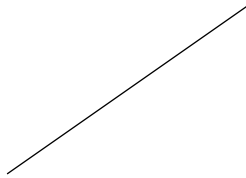
18)



19)



20)



21)

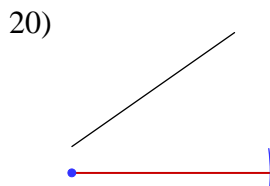
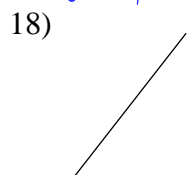
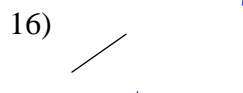
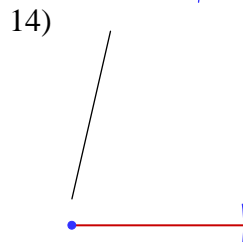
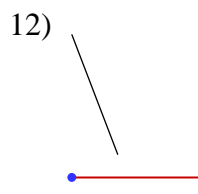
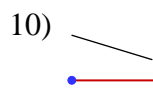
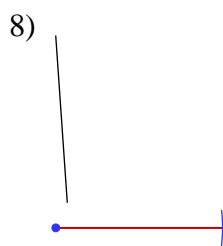
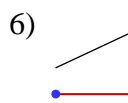
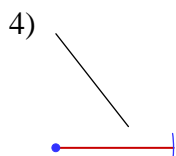
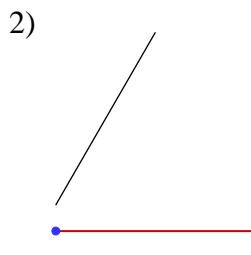
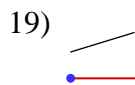
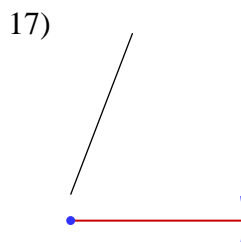
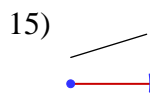
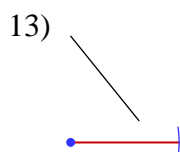
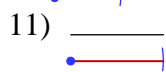
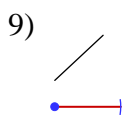
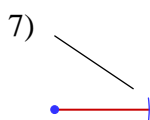
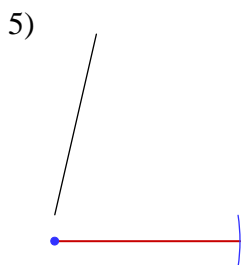
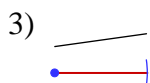
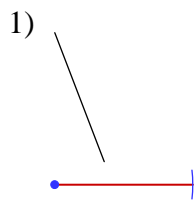
22)

23)

24)



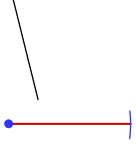
Answers to Assignment (ID: 8)



21)



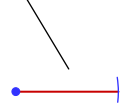
23)



22)



24)



Assignment

Date _____ Period ____

Construct a line segment congruent to each given line segment.

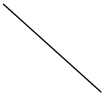
1)



2)



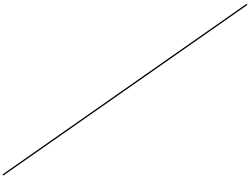
3)



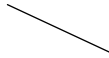
4)



5)




6)



7)



8)



9)



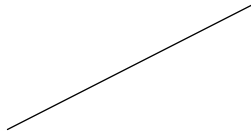
10)



11)




12)



13)



14)



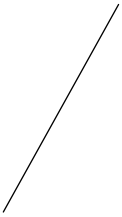
15)



16)



17)



18)



19)



20)



21)



22)



23)

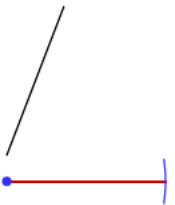


24)



Answers to Assignment (ID: 9)

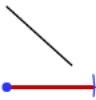
1)



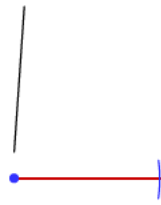
2)



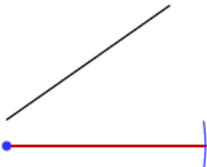
3)



4)



5)



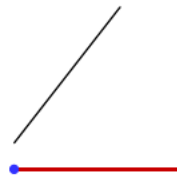
6)



7)



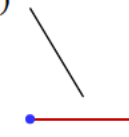
8)



9)



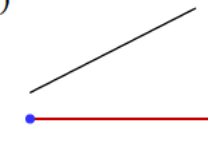
10)



11)



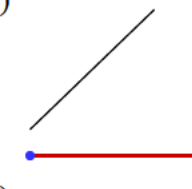
12)



13)



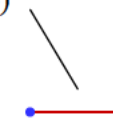
14)



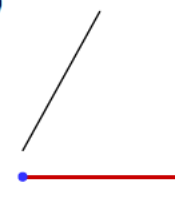
15)



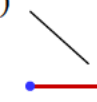
16)



17)



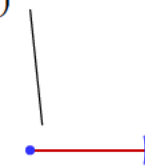
18)



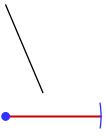
19)



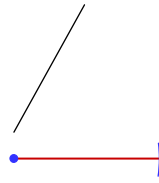
20)



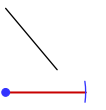
22)



23)



24)



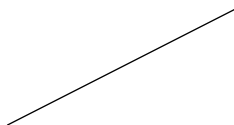
Assignment

Construct a line segment congruent to each given line segment.

1)



2)




3)



4)



5)



6)



7)



8)



9)



10)



11)



12)



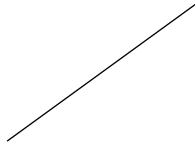
13)




14)



15)



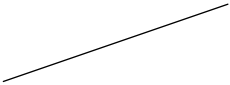
16)



17)



18)



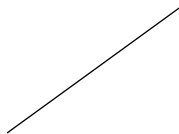
19)



20)



21)



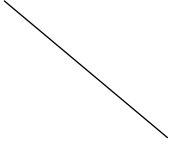
22)



23)

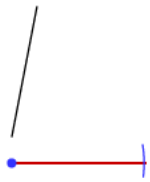


24)

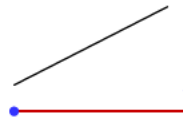


Answers to Assignment (ID: 10)

1)



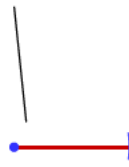
2)



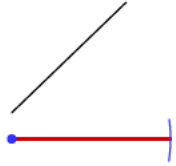
3)



4)



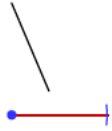
5)



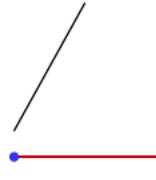
6)



7)



8)



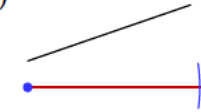
9)



10)



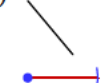
11)



12)



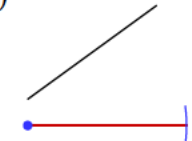
13)



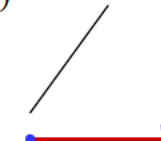
14)



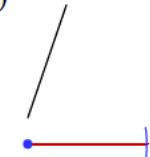
15)



16)



17)



18)



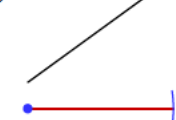
19)



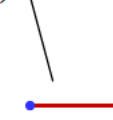
20)



21)



22)



23)



24)

