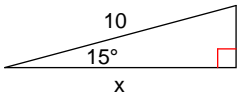


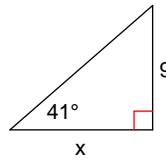
Assignment

Find the missing side. Round to the nearest tenth.

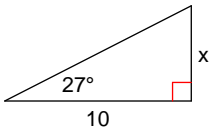
1)



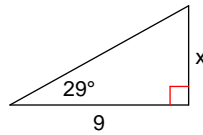
2)



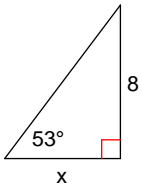
3)



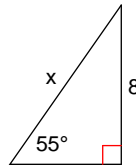
4)



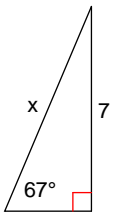
5)



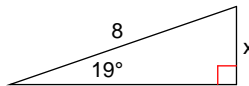
6)



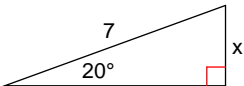
7)



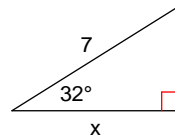
8)



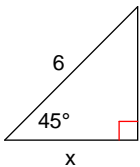
9)



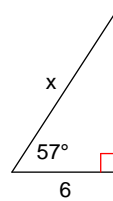
10)



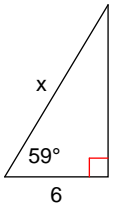
11)



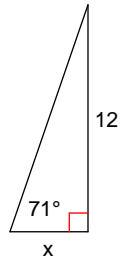
12)



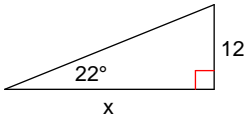
13)



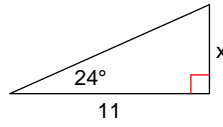
14)



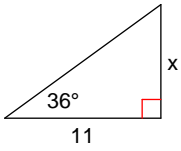
15)



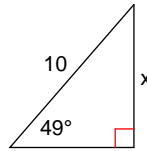
16)



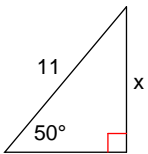
17)



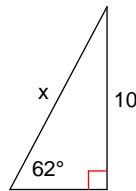
18)



19)



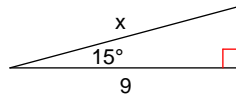
20)



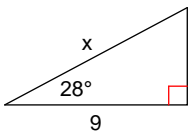
21)



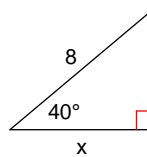
22)



23)



24)



Answers to Assignment (ID: 1)

1) 9.7
5) 6.0
9) 2.4
13) 11.6
17) 8.0
21) 38.6

2) 10.4
6) 9.8
10) 5.9
14) 4.1
18) 7.5
22) 9.3

3) 5.1
7) 7.6
11) 4.2
15) 29.7
19) 8.4
23) 10.2

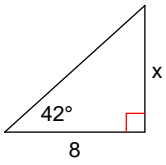
4) 5.0
8) 2.6
12) 11.0
16) 4.9
20) 11.3
24) 6.1



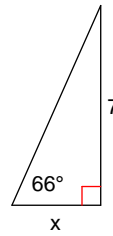
Assignment

Find the missing side. Round to the nearest tenth.

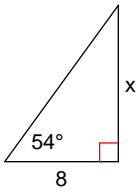
1)



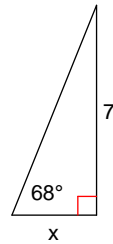
2)



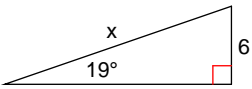
3)



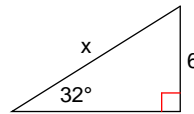
4)



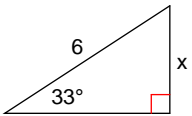
5)



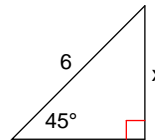
6)



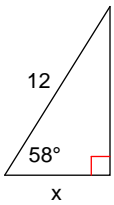
7)



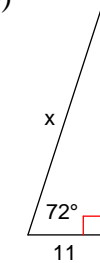
8)



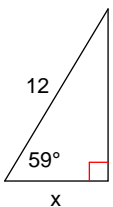
9)



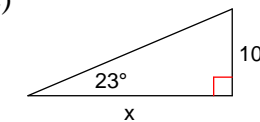
10)



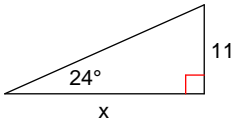
11)



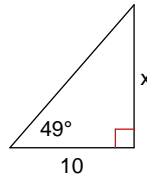
12)



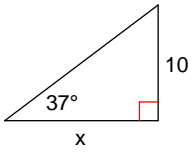
13)



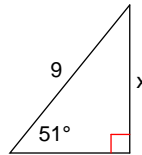
14)



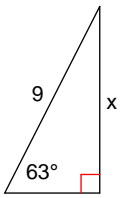
15)



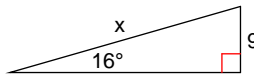
16)



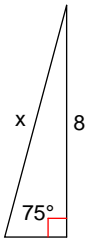
17)



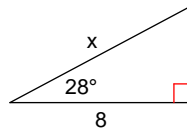
18)



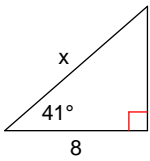
19)



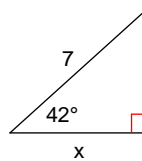
20)



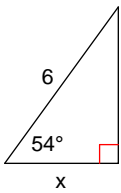
21)



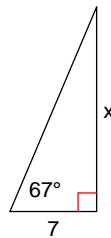
22)



23)



24)



Answers to Assignment (ID: 2)

1) 7.2
5) 18.4
9) 6.4
13) 24.7
17) 8.0
21) 10.6

2) 3.1
6) 11.3
10) 35.6
14) 11.5
18) 32.7
22) 5.2

3) 11.0
7) 3.3
11) 6.2
15) 13.3
19) 8.3
23) 3.5

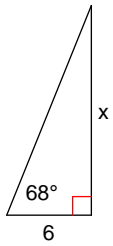
4) 2.8
8) 4.2
12) 23.6
16) 7.0
20) 9.1
24) 16.5



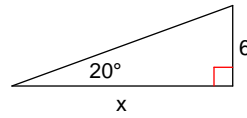
Assignment

Find the missing side. Round to the nearest tenth.

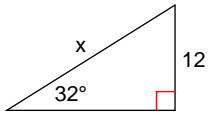
1)



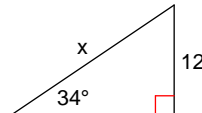
2)



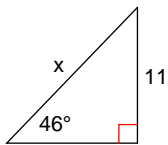
3)



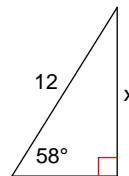
4)



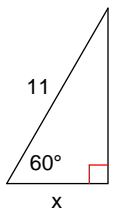
5)



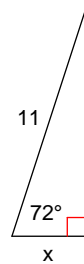
6)



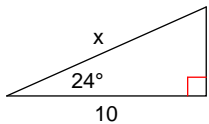
7)



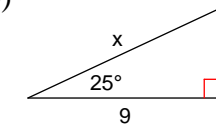
8)



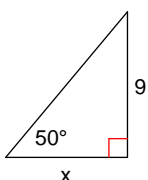
9)



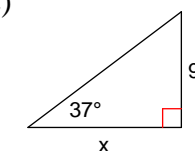
10)



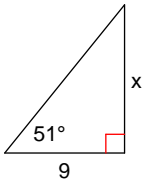
11)



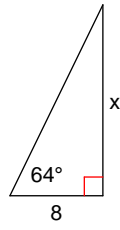
12)



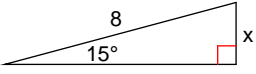
13)



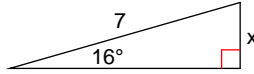
14)



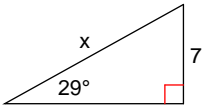
15)



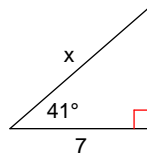
16)



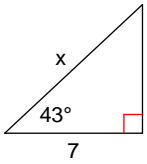
17)



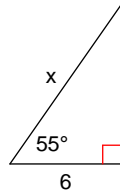
18)



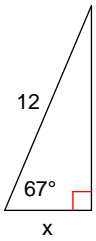
19)



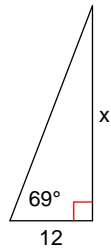
20)



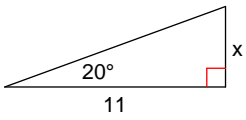
21)



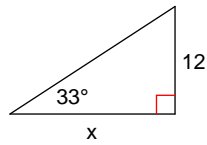
22)



23)



24)



Answers to Assignment (ID: 3)

1) 14.9

5) 15.3

9) 10.9

13) 11.1

17) 14.4

21) 4.7

2) 16.5

6) 10.2

10) 9.9

14) 16.4

18) 9.3

22) 31.3

3) 22.6

7) 5.5

11) 7.6

15) 2.1

19) 9.6

23) 4.0

4) 21.5

8) 3.4

12) 11.9

16) 1.9

20) 10.5

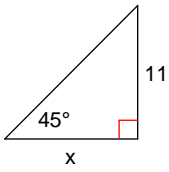
24) 18.5



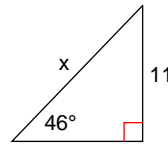
Assignment

Find the missing side. Round to the nearest tenth.

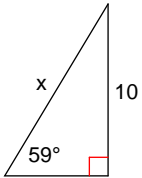
1)



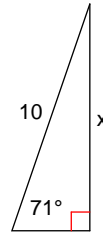
2)



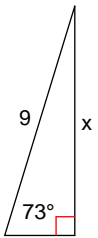
3)



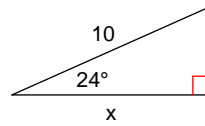
4)



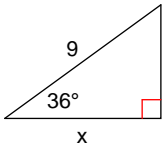
5)



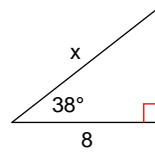
6)



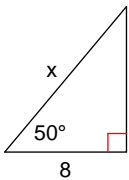
7)



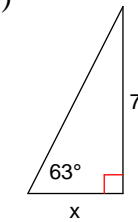
8)



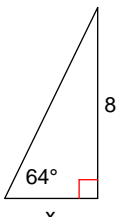
9)



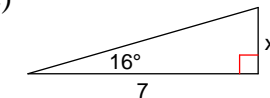
10)



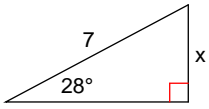
11)



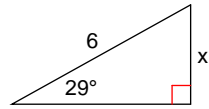
12)



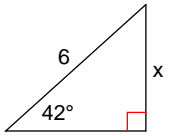
13)



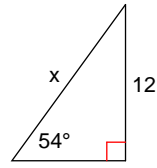
14)



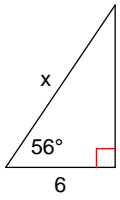
15)



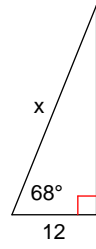
16)



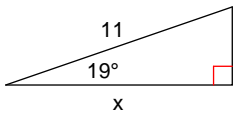
17)



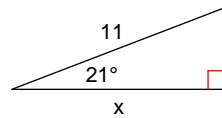
18)



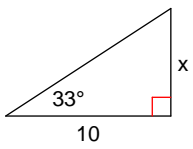
19)



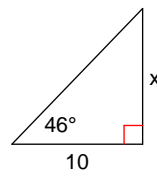
20)



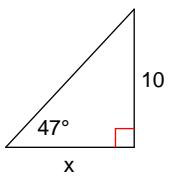
21)



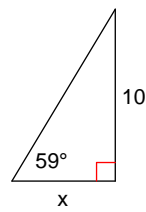
22)



23)



24)



Answers to Assignment (ID: 4)

1) 11.0

5) 8.6

9) 12.4

13) 3.3

17) 10.7

21) 6.5

2) 15.3

6) 9.1

10) 3.6

14) 2.9

18) 32.0

22) 10.4

3) 11.7

7) 7.3

11) 3.9

15) 4.0

19) 10.4

23) 9.3

4) 9.5

8) 10.2

12) 2.0

16) 14.8

20) 10.3

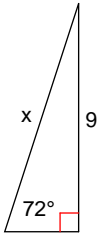
24) 6.0



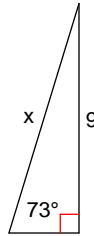
Assignment

Find the missing side. Round to the nearest tenth.

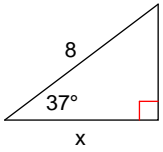
1)



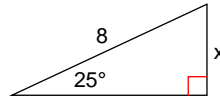
2)



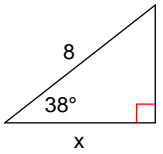
3)



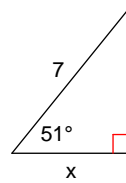
4)



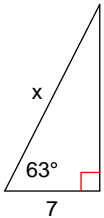
5)



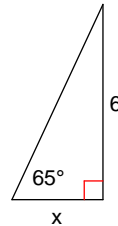
6)



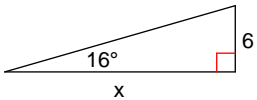
7)



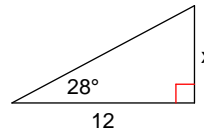
8)



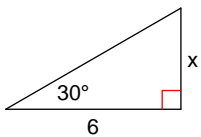
9)



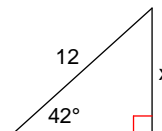
10)



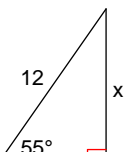
11)



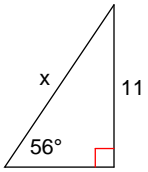
12)



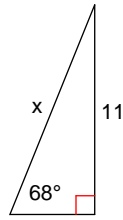
13)



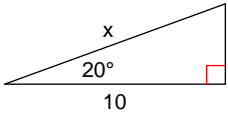
14)



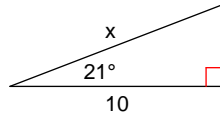
15)



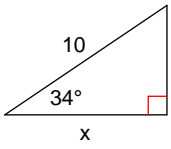
16)



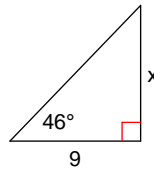
17)



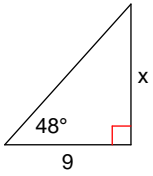
18)



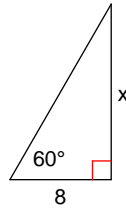
19)



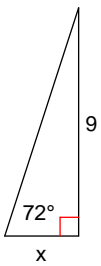
20)



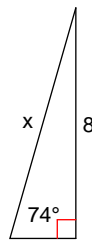
21)



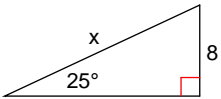
22)



23)



24)



Answers to Assignment (ID: 5)

1) 9.5
5) 6.3
9) 20.9
13) 9.8
17) 10.7
21) 13.9

2) 9.4
6) 4.4
10) 6.4
14) 13.3
18) 8.3
22) 2.9

3) 6.4
7) 15.4
11) 3.5
15) 11.9
19) 9.3
23) 8.3

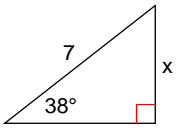
4) 3.4
8) 2.8
12) 8.0
16) 10.6
20) 10.0
24) 18.9



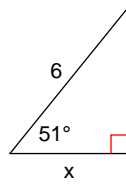
Assignment

Find the missing side. Round to the nearest tenth.

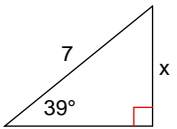
1)



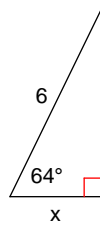
2)



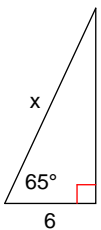
3)



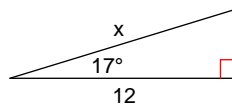
4)



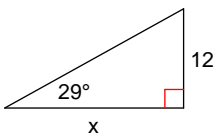
5)



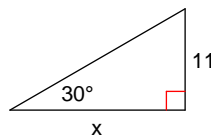
6)



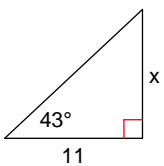
7)



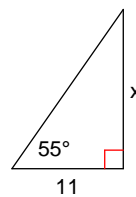
8)



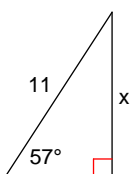
9)



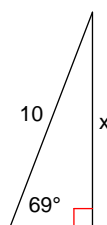
10)



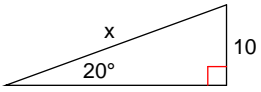
11)



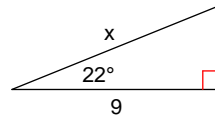
12)



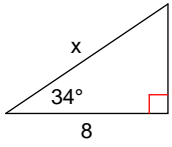
13)



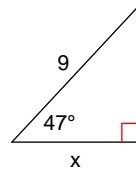
14)



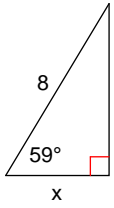
15)



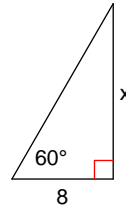
16)



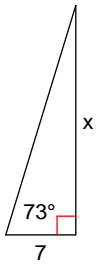
17)



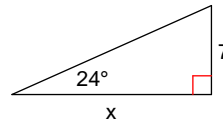
18)



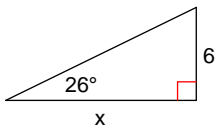
19)



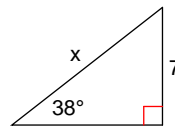
20)



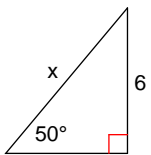
21)



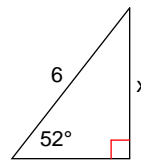
22)



23)



24)



Answers to Assignment (ID: 6)

- 1) 4.3
- 5) 14.2
- 9) 10.3
- 13) 29.2
- 17) 4.1
- 21) 12.3

- 2) 3.8
- 6) 12.5
- 10) 15.7
- 14) 9.7
- 18) 13.9
- 22) 11.4

- 3) 4.4
- 7) 21.6
- 11) 9.2
- 15) 9.6
- 19) 22.9
- 23) 7.8

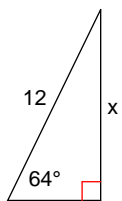
- 4) 2.6
- 8) 19.1
- 12) 9.3
- 16) 6.1
- 20) 15.7
- 24) 4.7



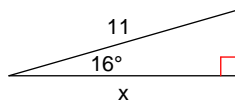
Assignment

Find the missing side. Round to the nearest tenth.

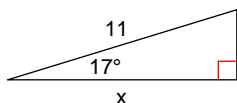
1)



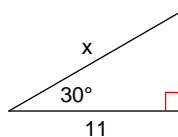
2)



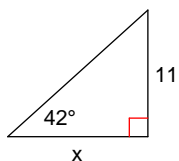
3)



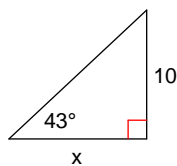
4)



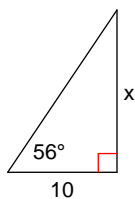
5)



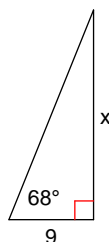
6)



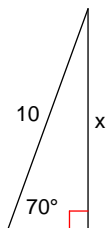
7)



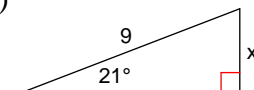
8)



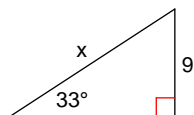
9)



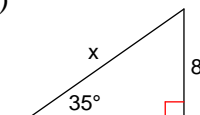
10)



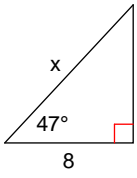
11)



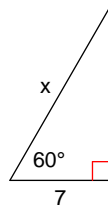
12)



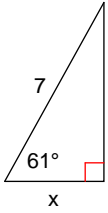
13)



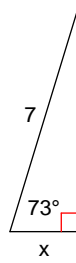
14)



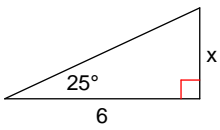
15)



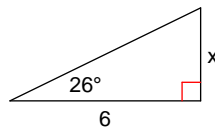
16)



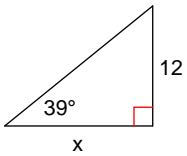
17)



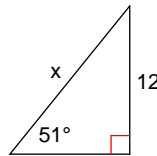
18)



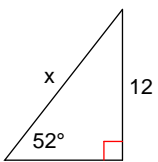
19)



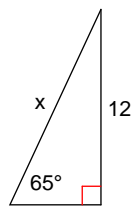
20)



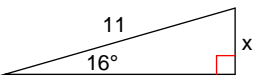
21)



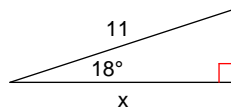
22)



23)



24)



Answers to Assignment (ID: 7)

1) 10.8

5) 12.2

9) 9.4

13) 11.7

17) 2.8

21) 15.2

2) 10.6

6) 10.7

10) 3.2

14) 14.0

18) 2.9

22) 13.2

3) 10.5

7) 14.8

11) 16.5

15) 3.4

19) 14.8

23) 3.0

4) 12.7

8) 22.3

12) 13.9

16) 2.0

20) 15.4

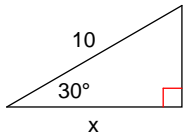
24) 10.5



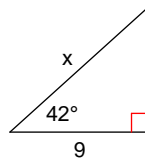
Assignment

Find the missing side. Round to the nearest tenth.

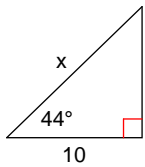
1)



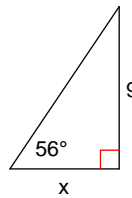
2)



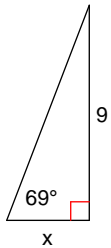
3)



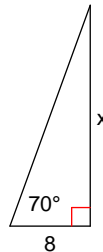
4)



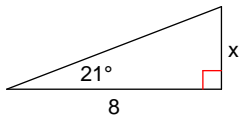
5)



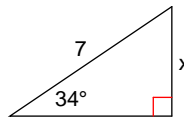
6)



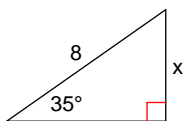
7)



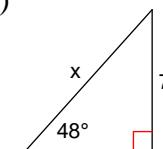
8)



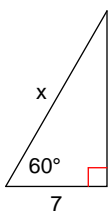
9)



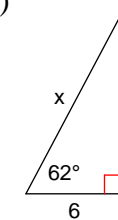
10)



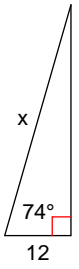
11)



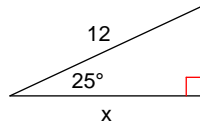
12)



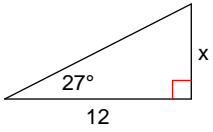
13)



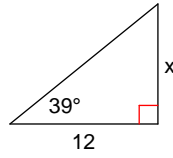
14)



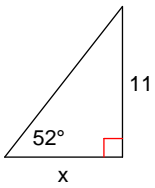
15)



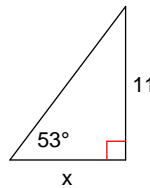
16)



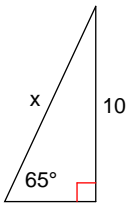
17)



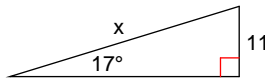
18)



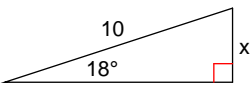
19)



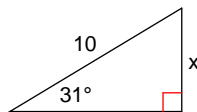
20)



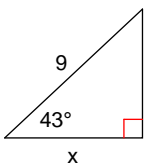
21)



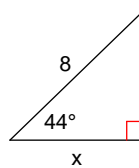
22)



23)



24)



Answers to Assignment (ID: 8)

1) 8.7
5) 3.5
9) 4.6
13) 43.5
17) 8.6
21) 3.1

2) 12.1
6) 22.0
10) 9.4
14) 10.9
18) 8.3
22) 5.2

3) 13.9
7) 3.1
11) 14.0
15) 6.1
19) 11.0
23) 6.6

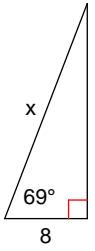
4) 6.1
8) 3.9
12) 12.8
16) 9.7
20) 37.6
24) 5.8



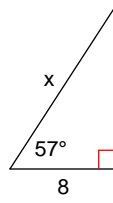
Assignment

Find the missing side. Round to the nearest tenth.

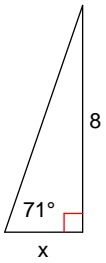
1)



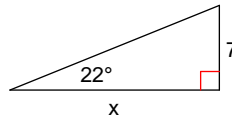
2)



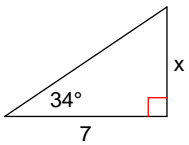
3)



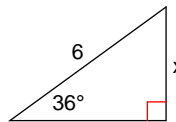
4)



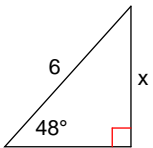
5)



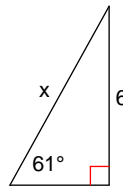
6)



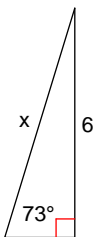
7)



8)



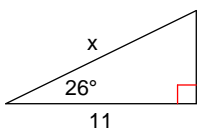
9)



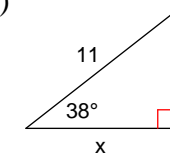
10)



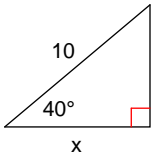
11)



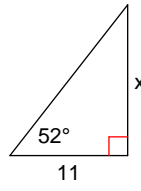
12)



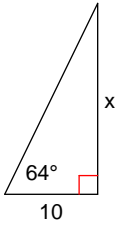
13)



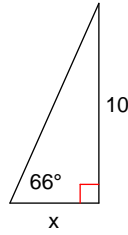
14)



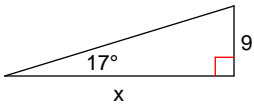
15)



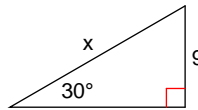
16)



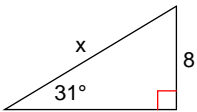
17)



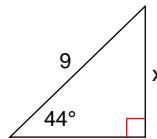
18)



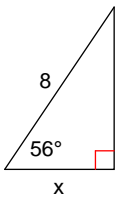
19)



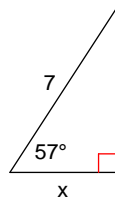
20)



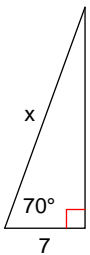
21)



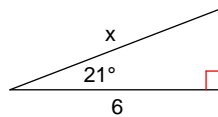
22)



23)



24)



Answers to Assignment (ID: 9)

1) 22.3

5) 4.7

9) 6.3

13) 7.7

17) 29.4

21) 4.5

2) 14.7

6) 3.5

10) 43.5

14) 14.1

18) 18.0

22) 3.8

3) 2.8

7) 4.5

11) 12.2

15) 20.5

19) 15.5

23) 20.5

4) 17.3

8) 6.9

12) 8.7

16) 4.5

20) 6.3

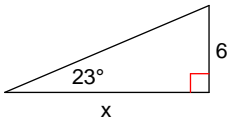
24) 6.4



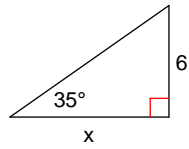
Assignment

Find the missing side. Round to the nearest tenth.

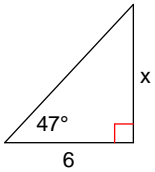
1)



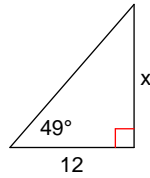
2)



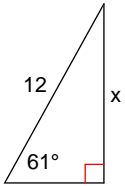
3)



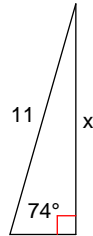
4)



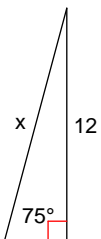
5)



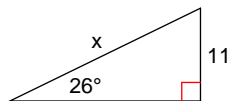
6)



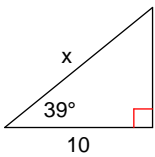
7)



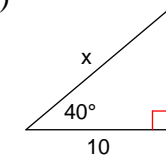
8)



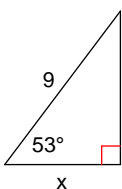
9)



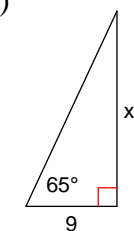
10)



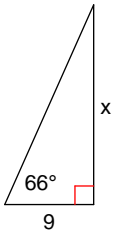
11)



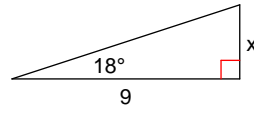
12)



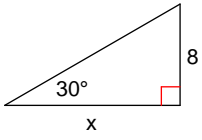
13)



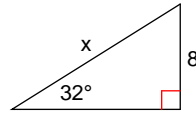
14)



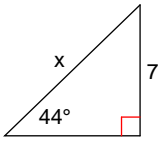
15)



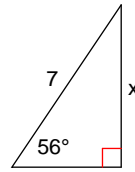
16)



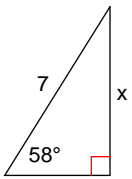
17)



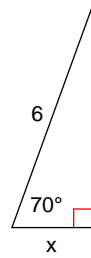
18)



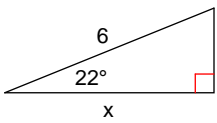
19)



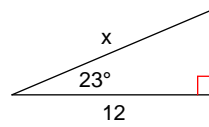
20)



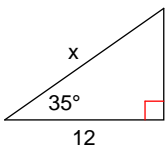
21)



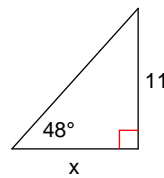
22)



23)



24)



Answers to Assignment (ID: 10)

1) 14.1

5) 10.5

9) 12.9

13) 20.2

17) 10.1

21) 5.6

2) 8.6

6) 10.6

10) 13.1

14) 2.9

18) 5.8

22) 13.0

3) 6.4

7) 12.4

11) 5.4

15) 13.9

19) 5.9

23) 14.6

4) 13.8

8) 25.1

12) 19.3

16) 15.1

20) 2.1

24) 9.9

