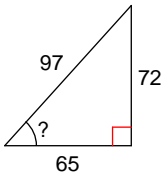


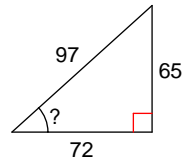
Assignment

Find the measure of the indicated angle to the nearest degree.

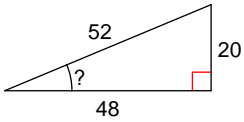
1)



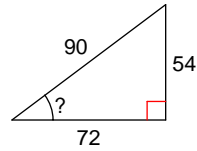
2)



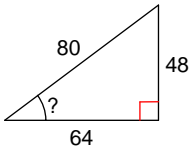
3)



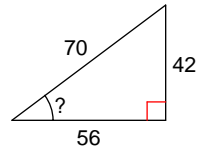
4)



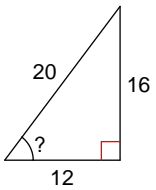
5)



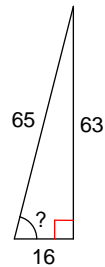
6)



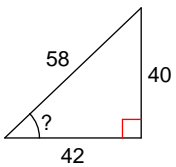
7)



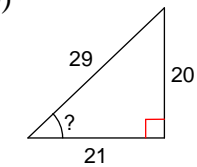
8)



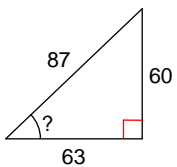
9)



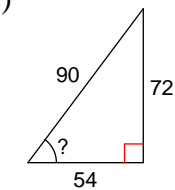
10)



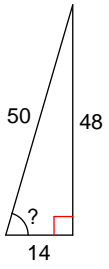
11)



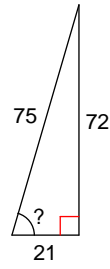
12)



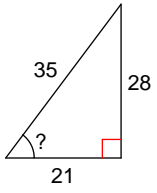
13)



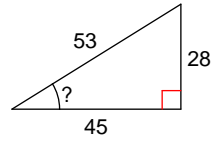
14)



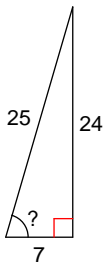
15)



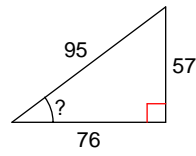
16)



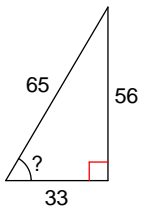
17)



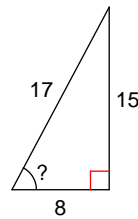
18)



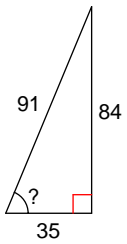
19)



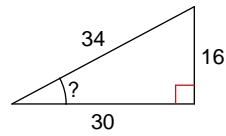
20)



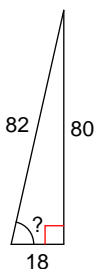
21)



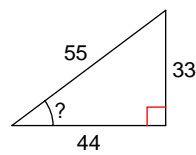
22)



23)



24)



Answers to Assignment (ID: 1)

1) 48°

5) 37°

9) 44°

13) 74°

17) 74°

21) 67°

2) 42°

6) 37°

10) 44°

14) 74°

18) 37°

22) 28°

3) 23°

7) 53°

11) 44°

15) 53°

19) 59°

23) 77°

4) 37°

8) 76°

12) 53°

16) 32°

20) 62°

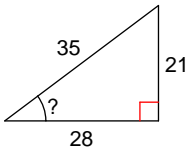
24) 37°



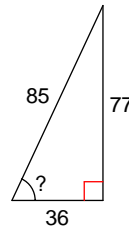
Assignment

Find the measure of the indicated angle to the nearest degree.

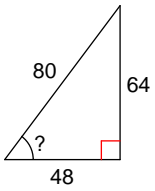
1)



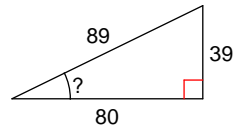
2)



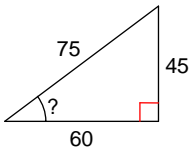
3)



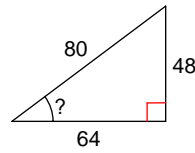
4)



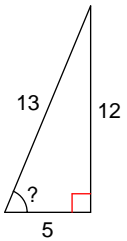
5)



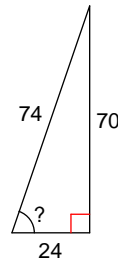
6)



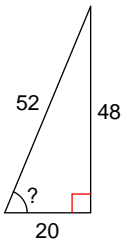
7)



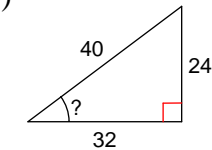
8)



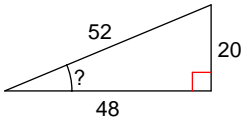
9)



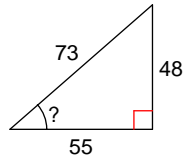
10)



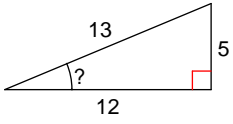
11)



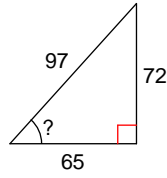
12)



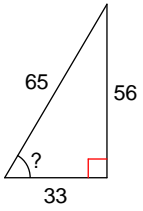
13)



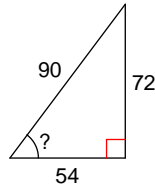
14)



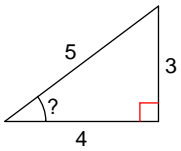
15)



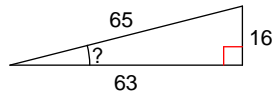
16)



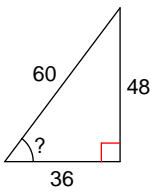
17)



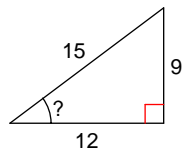
18)



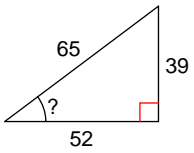
19)



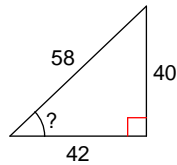
20)



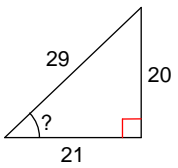
21)



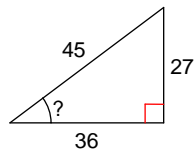
22)



23)



24)



Answers to Assignment (ID: 2)

1) 37°

5) 37°

9) 67°

13) 23°

17) 37°

21) 37°

2) 65°

6) 37°

10) 37°

14) 48°

18) 14°

22) 44°

3) 53°

7) 67°

11) 23°

15) 59°

19) 53°

23) 44°

4) 26°

8) 71°

12) 41°

16) 53°

20) 37°

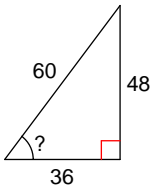
24) 37°



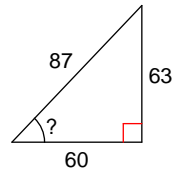
Assignment

Find the measure of the indicated angle to the nearest degree.

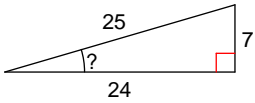
1)



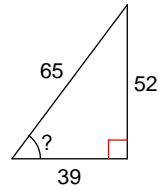
2)



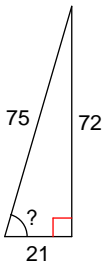
3)



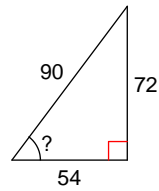
4)



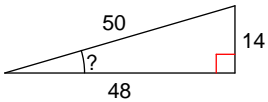
5)



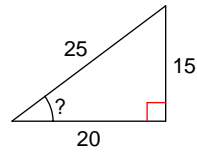
6)



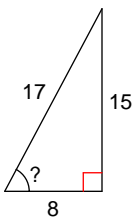
7)



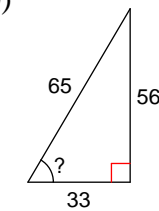
8)



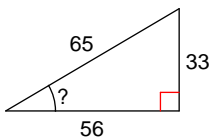
9)



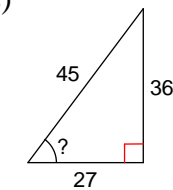
10)



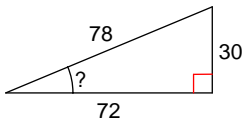
11)



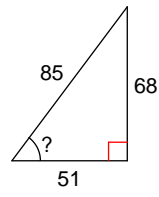
12)



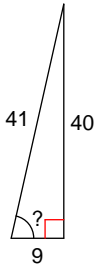
13)



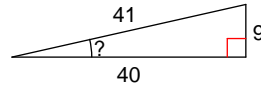
14)



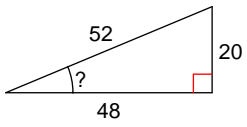
15)



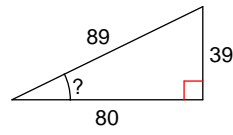
16)



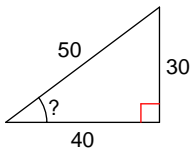
17)



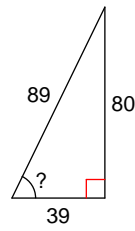
18)



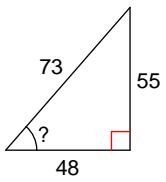
19)



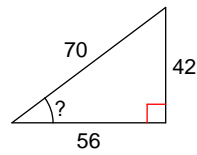
20)



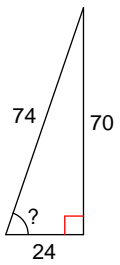
21)



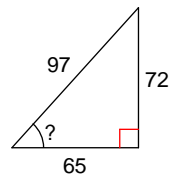
22)



23)



24)



Answers to Assignment (ID: 3)

1) 53°

5) 74°

9) 62°

13) 23°

17) 23°

21) 49°

2) 46°

6) 53°

10) 59°

14) 53°

18) 26°

22) 37°

3) 16°

7) 16°

11) 31°

15) 77°

19) 37°

23) 71°

4) 53°

8) 37°

12) 53°

16) 13°

20) 64°

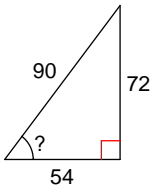
24) 48°



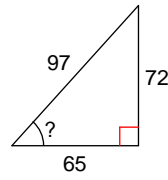
Assignment

Find the measure of the indicated angle to the nearest degree.

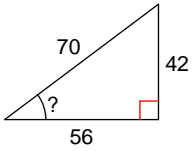
1)



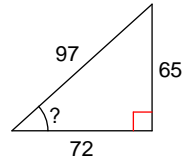
2)



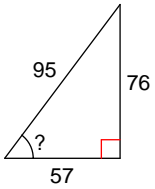
3)



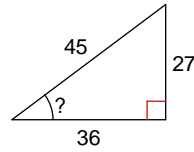
4)



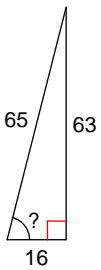
5)



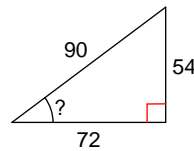
6)



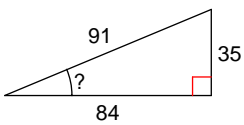
7)



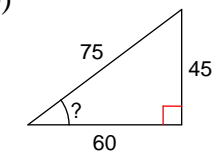
8)



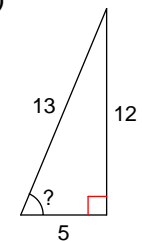
9)



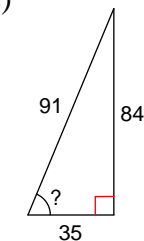
10)



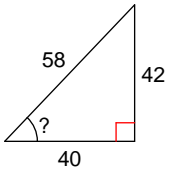
11)



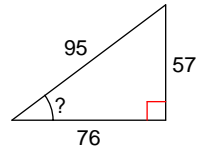
12)



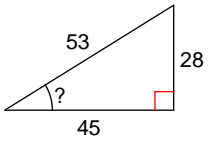
13)



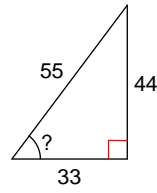
14)



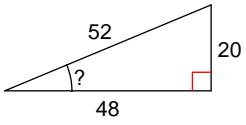
15)



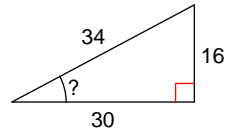
16)



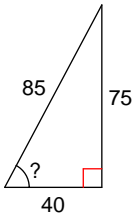
17)



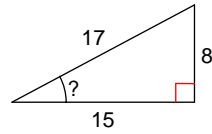
18)



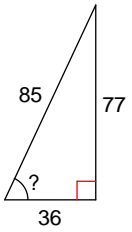
19)



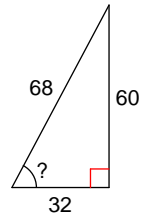
20)



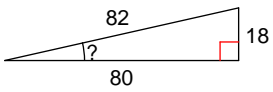
21)



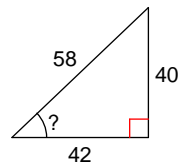
22)



23)



24)



Answers to Assignment (ID: 4)

1) 53°

5) 53°

9) 23°

13) 46°

17) 23°

21) 65°

2) 48°

6) 37°

10) 37°

14) 37°

18) 28°

22) 62°

3) 37°

7) 76°

11) 67°

15) 32°

19) 62°

23) 13°

4) 42°

8) 37°

12) 67°

16) 53°

20) 28°

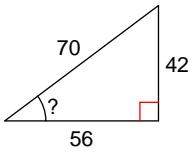
24) 44°



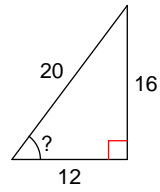
Assignment

Find the measure of the indicated angle to the nearest degree.

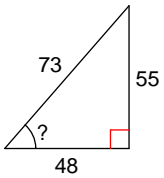
1)



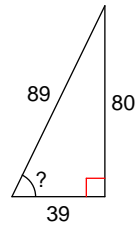
2)



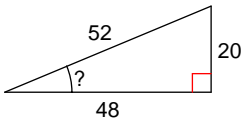
3)



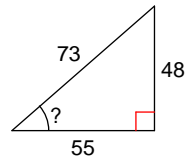
4)



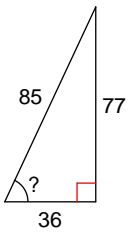
5)



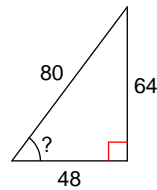
6)



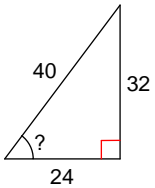
7)



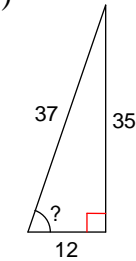
8)



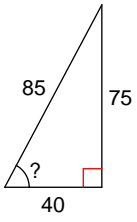
9)



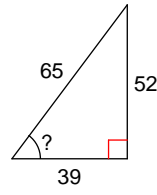
10)



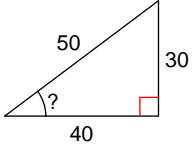
11)



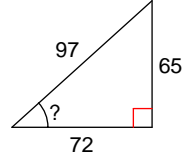
12)



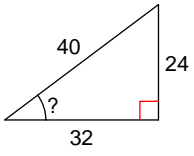
13)



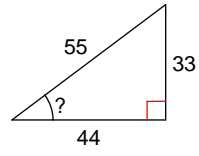
14)



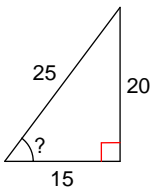
15)



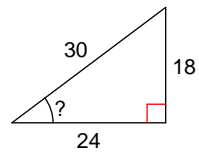
16)



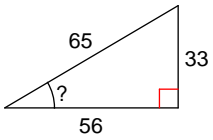
17)



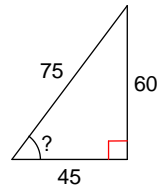
18)



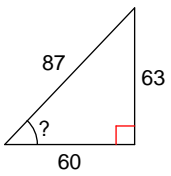
19)



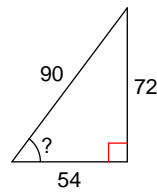
20)



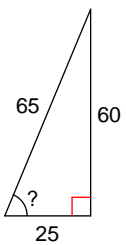
21)



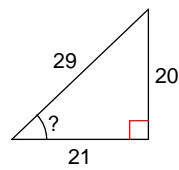
22)



23)



24)



Answers to Assignment (ID: 5)

1) 37°

5) 23°

9) 53°

13) 37°

17) 53°

21) 46°

2) 53°

6) 41°

10) 71°

14) 42°

18) 37°

22) 53°

3) 49°

7) 65°

11) 62°

15) 37°

19) 31°

23) 67°

4) 64°

8) 53°

12) 53°

16) 37°

20) 53°

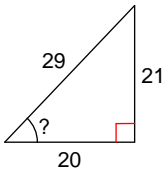
24) 44°



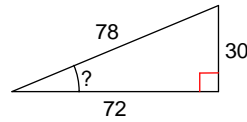
Assignment

Find the measure of the indicated angle to the nearest degree.

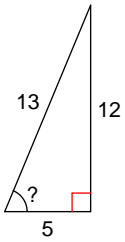
1)



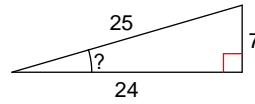
2)



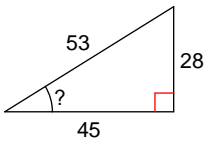
3)



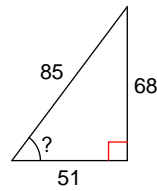
4)



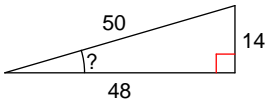
5)



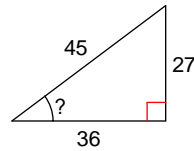
6)



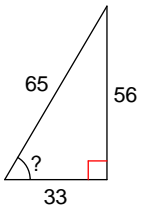
7)



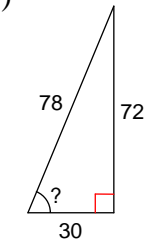
8)



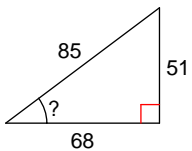
9)



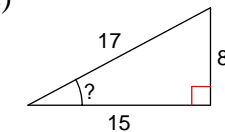
10)



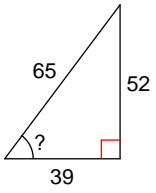
11)



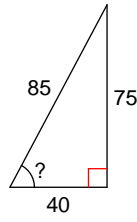
12)



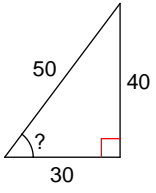
13)



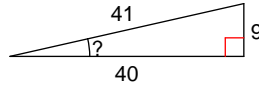
14)



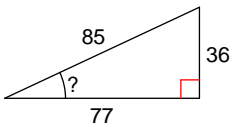
15)



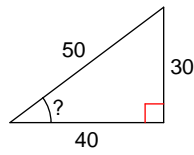
16)



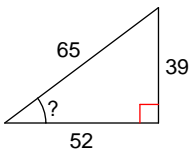
17)



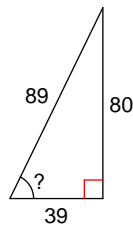
18)



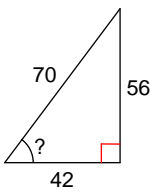
19)



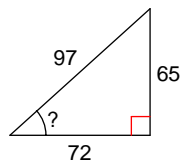
20)



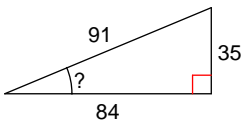
21)



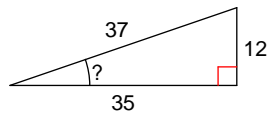
22)



23)



24)



Answers to Assignment (ID: 6)

1) 46°

5) 32°

9) 59°

13) 53°

17) 25°

21) 53°

2) 23°

6) 53°

10) 67°

14) 62°

18) 37°

22) 42°

3) 67°

7) 16°

11) 37°

15) 53°

19) 37°

23) 23°

4) 16°

8) 37°

12) 28°

16) 13°

20) 64°

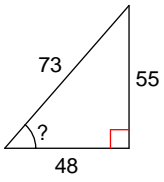
24) 19°



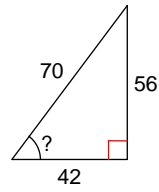
Assignment

Find the measure of the indicated angle to the nearest degree.

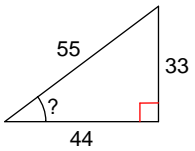
1)



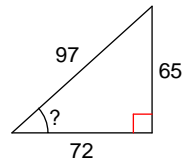
2)



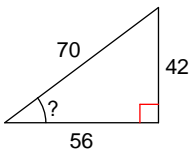
3)



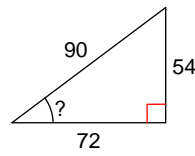
4)



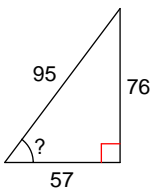
5)



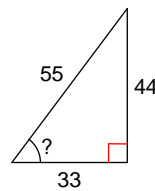
6)



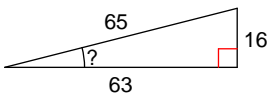
7)



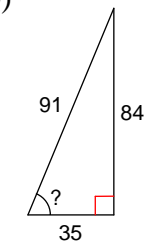
8)



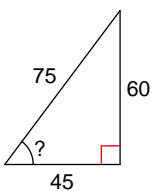
9)



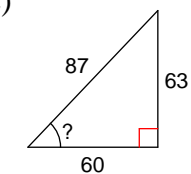
10)



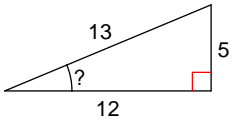
11)



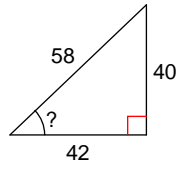
12)



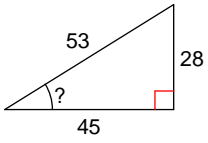
13)



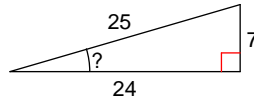
14)



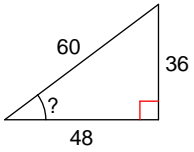
15)



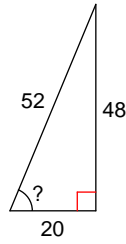
16)



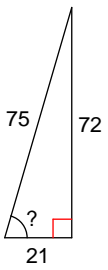
17)



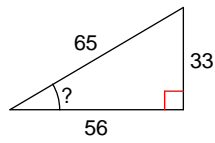
18)



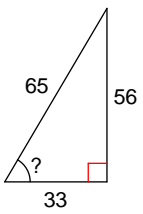
19)



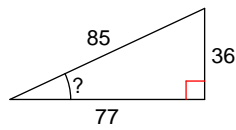
20)



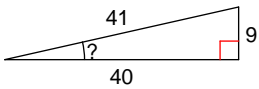
21)



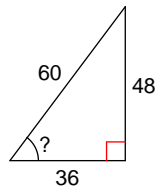
22)



23)



24)



Answers to Assignment (ID: 7)

1) 49°

5) 37°

9) 14°

13) 23°

17) 37°

21) 59°

2) 53°

6) 37°

10) 67°

14) 44°

18) 67°

22) 25°

3) 37°

7) 53°

11) 53°

15) 32°

19) 74°

23) 13°

4) 42°

8) 53°

12) 46°

16) 16°

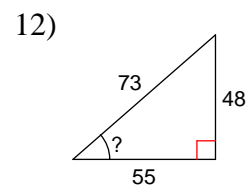
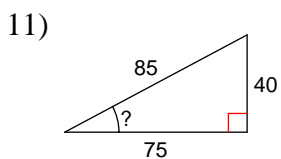
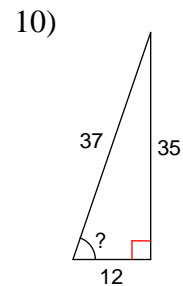
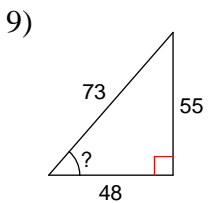
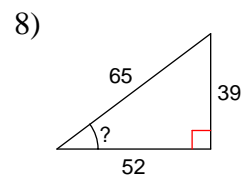
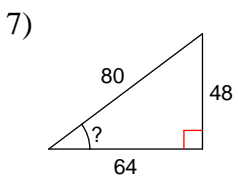
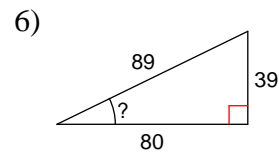
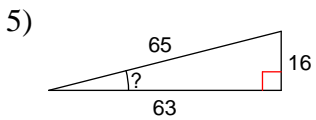
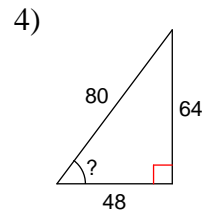
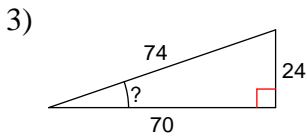
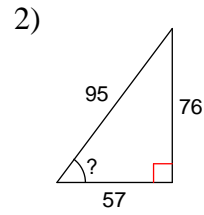
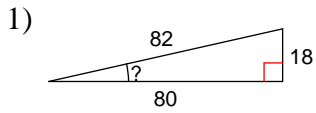
20) 31°

24) 53°

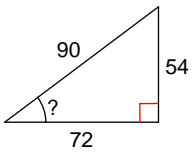


Assignment

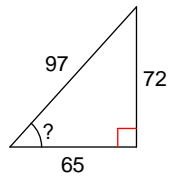
Find the measure of the indicated angle to the nearest degree.



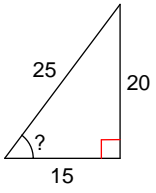
13)



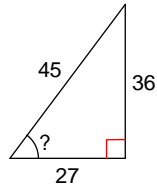
14)



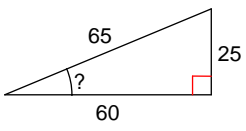
15)



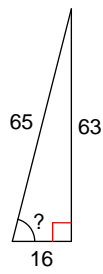
16)



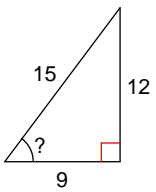
17)



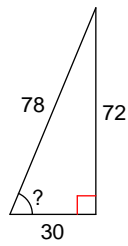
18)



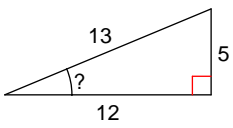
19)



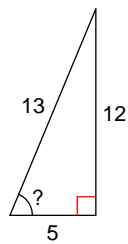
20)



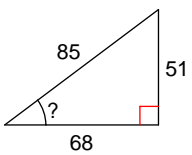
21)



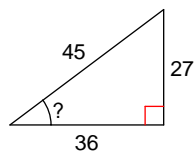
22)



23)



24)



Answers to Assignment (ID: 8)

1) 13°
5) 14°
9) 49°
13) 37°
17) 23°
21) 23°

2) 53°
6) 26°
10) 71°
14) 48°
18) 76°
22) 67°

3) 19°
7) 37°
11) 28°
15) 53°
19) 53°
23) 37°

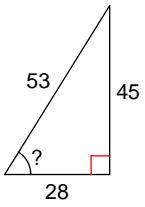
4) 53°
8) 37°
12) 41°
16) 53°
20) 67°
24) 37°



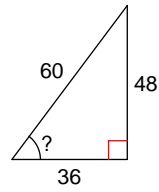
Assignment

Find the measure of the indicated angle to the nearest degree.

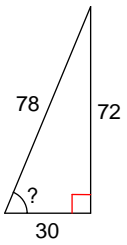
1)



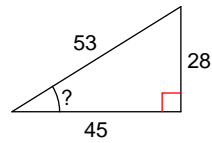
2)



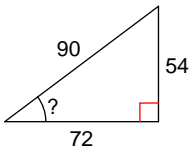
3)



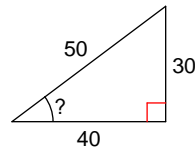
4)



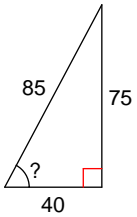
5)



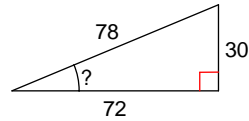
6)



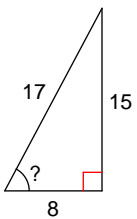
7)



8)



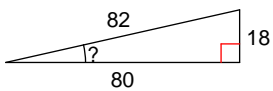
9)



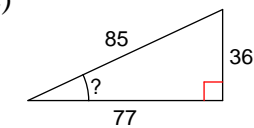
10)



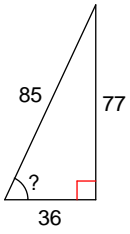
11)



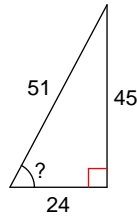
12)



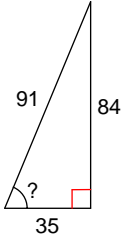
13)



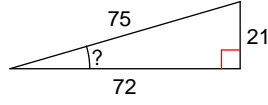
14)



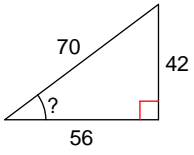
15)



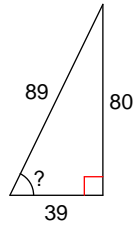
16)



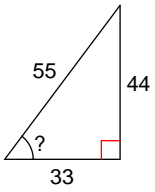
17)



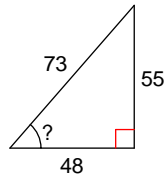
18)



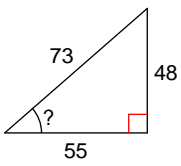
19)



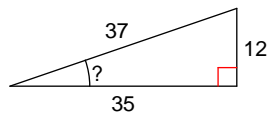
20)



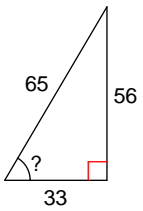
21)



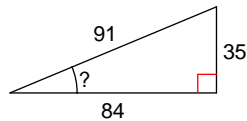
22)



23)



24)



Answers to Assignment (ID: 9)

1) 58°

5) 37°

9) 62°

13) 65°

17) 37°

21) 41°

2) 53°

6) 37°

10) 77°

14) 62°

18) 64°

22) 19°

3) 67°

7) 62°

11) 13°

15) 67°

19) 53°

23) 59°

4) 32°

8) 23°

12) 25°

16) 16°

20) 49°

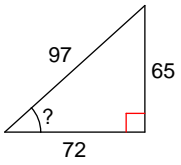
24) 23°



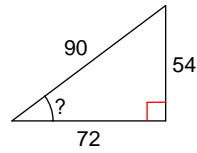
Assignment

Find the measure of the indicated angle to the nearest degree.

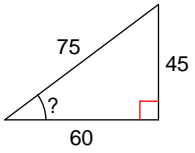
1)



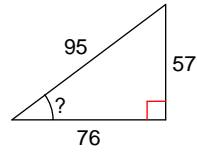
2)



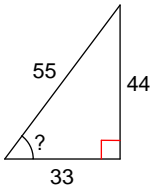
3)



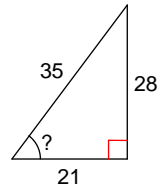
4)



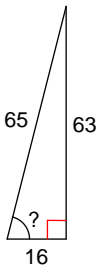
5)



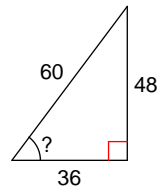
6)



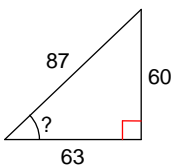
7)



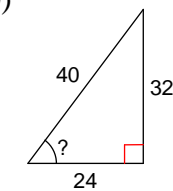
8)



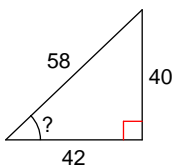
9)



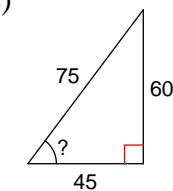
10)



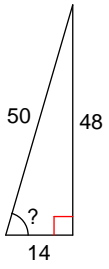
11)



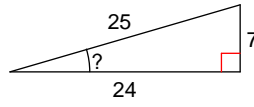
12)



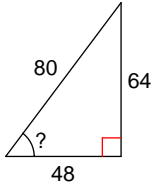
13)



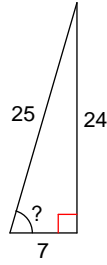
14)



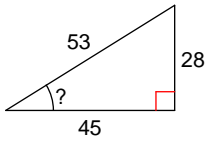
15)



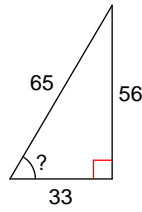
16)



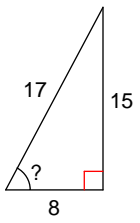
17)



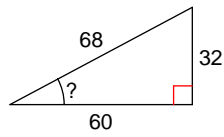
18)



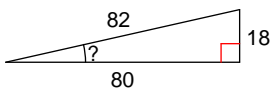
19)



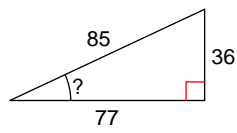
20)



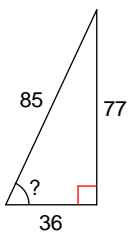
21)



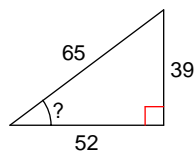
22)



23)



24)



Answers to Assignment (ID: 10)

1) 42°
5) 53°
9) 44°
13) 74°
17) 32°
21) 13°

2) 37°
6) 53°
10) 53°
14) 16°
18) 59°
22) 25°

3) 37°
7) 76°
11) 44°
15) 53°
19) 62°
23) 65°

4) 37°
8) 53°
12) 53°
16) 74°
20) 28°
24) 37°

