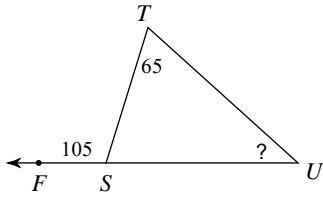


Assignment

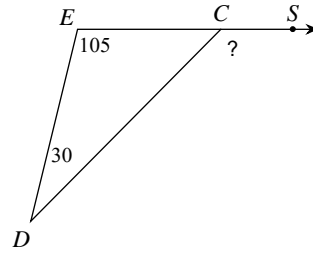
Find the measure of each angle indicated.

1)



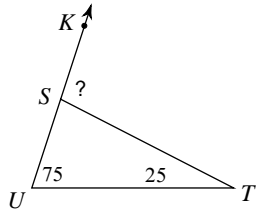
- A) 35° B) 75°
- C) 40° D) 36°

2)



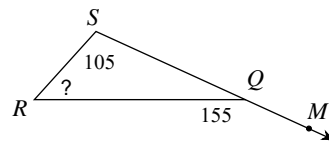
- A) 139° B) 135°
- C) 131° D) 45°

3)



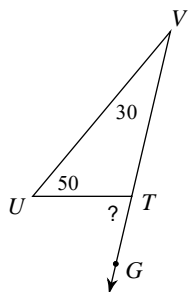
- A) 114° B) 100°
- C) 117° D) 80°

4)



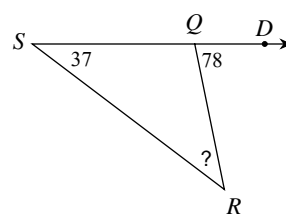
- A) 50° B) 63°
- C) 42° D) 25°

5)



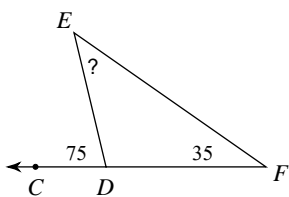
- A) 100° B) 73°
- C) 87° D) 80°

6)



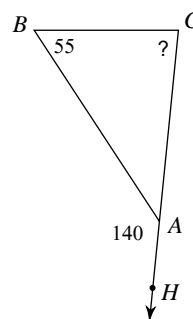
- A) 102° B) 40°
- C) 31° D) 41°

7)



- A) 40° B) 105°
- C) 47° D) 35°

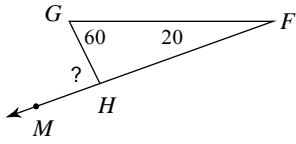
8)



- A) 82° B) 85°
- C) 72° D) 40°

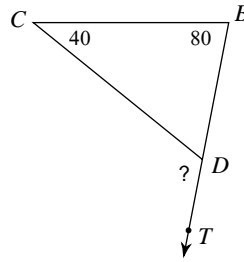


9)



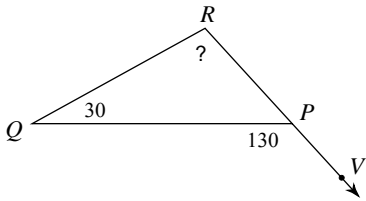
- A) 83° B) 66°
 C) 80° D) 100°

10)



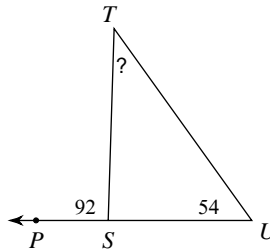
- A) 60° B) 92°
 C) 120° D) 129°

11)



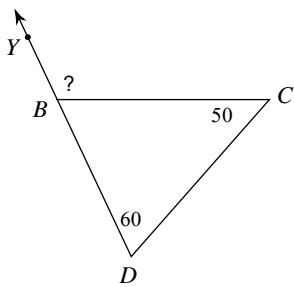
- A) 99° B) 114°
 C) 100° D) 50°

12)



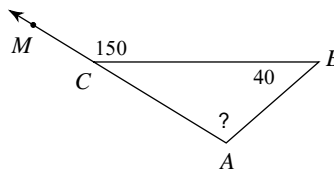
- A) 42° B) 38°
 C) 34° D) 88°

13)



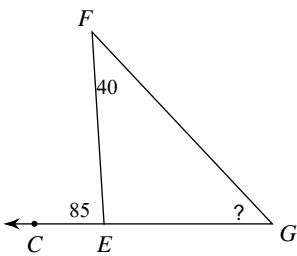
- A) 84° B) 70°
 C) 110° D) 101°

14)



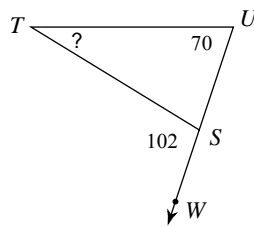
- A) 129° B) 86°
 C) 110° D) 30°

15)



- A) 45° B) 55°
 C) 42° D) 95°

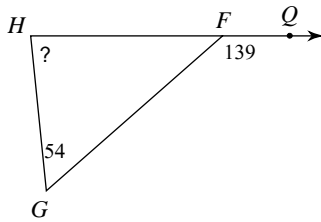
16)



- A) 30° B) 26°
 C) 32° D) 78°

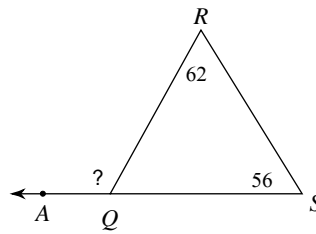


17)



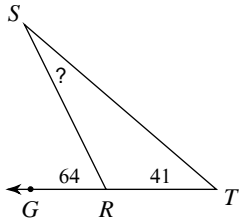
- A) 95° B) 82°
 C) 85° D) 41°

18)



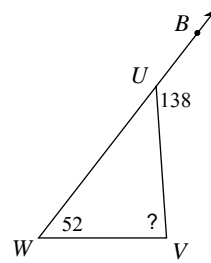
- A) 62° B) 118°
 C) 95° D) 90°

19)



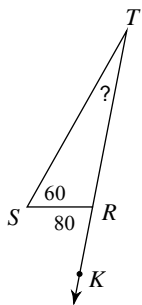
- A) 25° B) 116°
 C) 23° D) 26°

20)



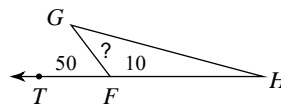
- A) 68° B) 107°
 C) 42° D) 86°

21)



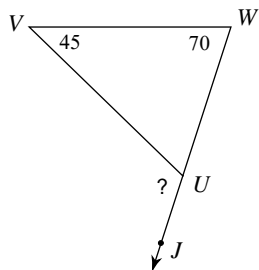
- A) 100° B) 23°
 C) 22° D) 20°

22)



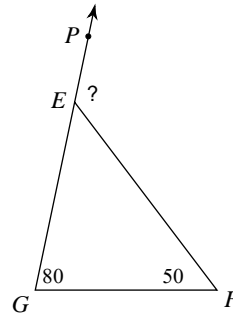
- A) 35° B) 48°
 C) 130° D) 40°

23)



- A) 115° B) 65°
 C) 103° D) 116°

24)



- A) 130° B) 50°
 C) 126° D) 124°



Answers to Assignment (ID: 1)

- 1) C
- 5) D
- 9) C
- 13) C
- 17) C
- 21) D

- 2) B
- 6) D
- 10) C
- 14) C
- 18) B
- 22) D

- 3) B
- 7) A
- 11) C
- 15) A
- 19) C
- 23) A

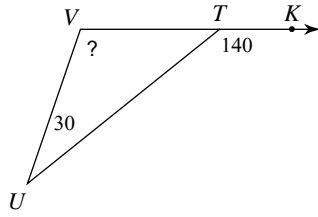
- 4) A
- 8) B
- 12) B
- 16) C
- 20) D
- 24) A



Assignment

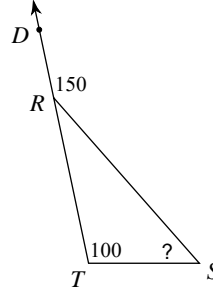
Find the measure of each angle indicated.

1)



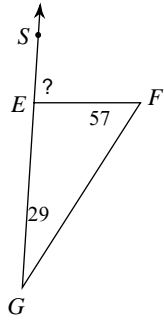
- A) 123°
- B) 40°
- C) 125°
- D) 110°

2)



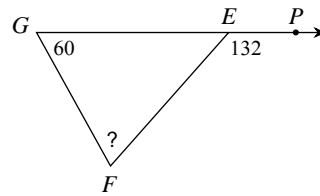
- A) 49°
- B) 54°
- C) 50°
- D) 30°

3)



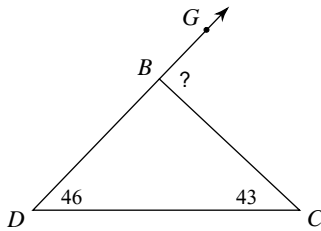
- A) 94°
- B) 81°
- C) 67°
- D) 86°

4)



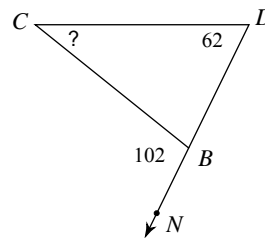
- A) 72°
- B) 48°
- C) 77°
- D) 59°

5)



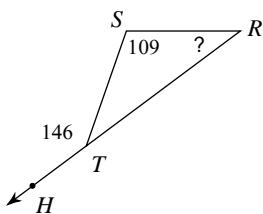
- A) 94°
- B) 89°
- C) 76°
- D) 91°

6)



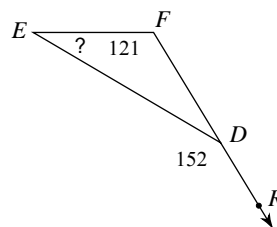
- A) 78°
- B) 41°
- C) 40°
- D) 36°

7)



- A) 34°
- B) 30°
- C) 32°
- D) 37°

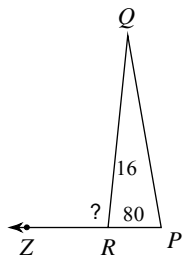
8)



- A) 38°
- B) 31°
- C) 28°
- D) 34°

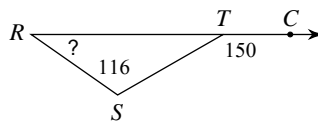


9)



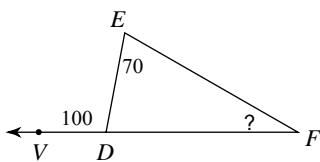
- A) 96° B) 116°
 C) 84° D) 104°

10)



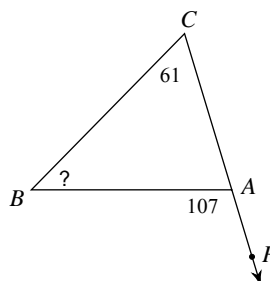
- A) 31° B) 27°
 C) 30° D) 34°

11)



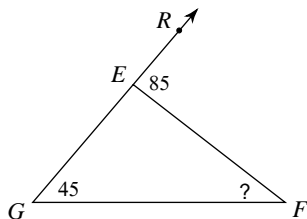
- A) 32° B) 80°
 C) 30° D) 24°

12)



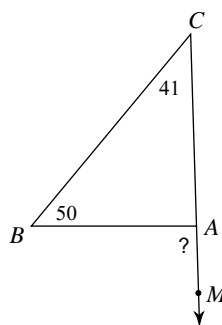
- A) 46° B) 42°
 C) 36° D) 73°

13)



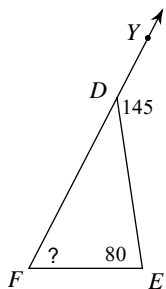
- A) 40° B) 30°
 C) 35° D) 95°

14)



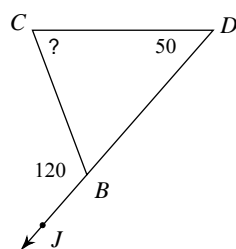
- A) 110° B) 91°
 C) 88° D) 87°

15)



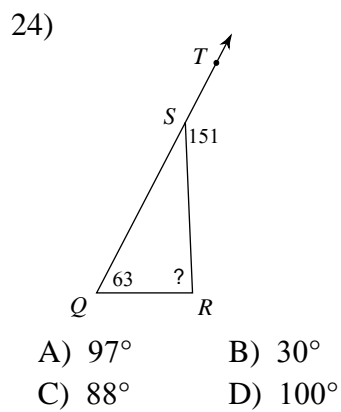
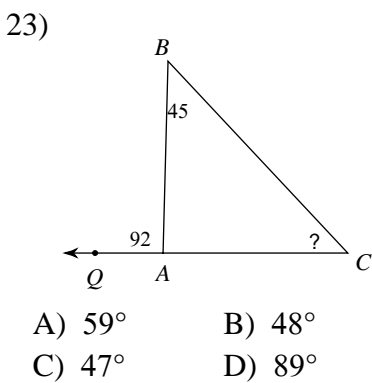
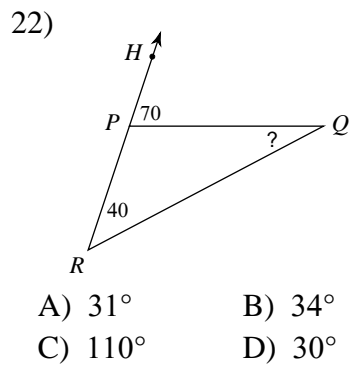
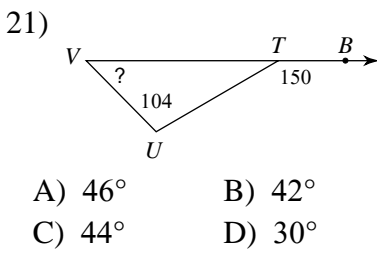
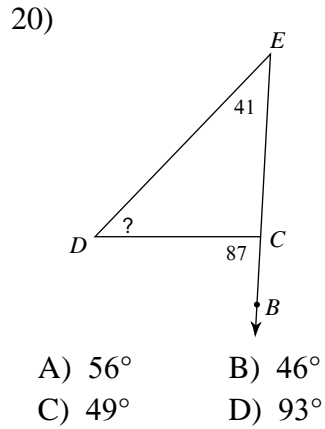
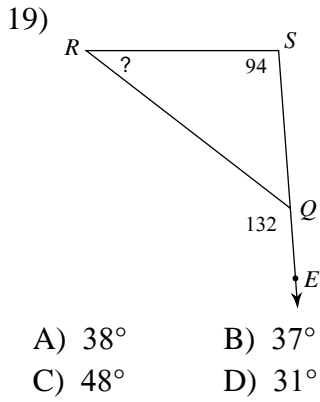
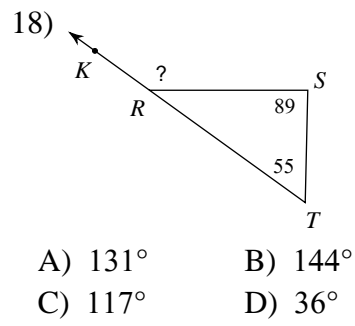
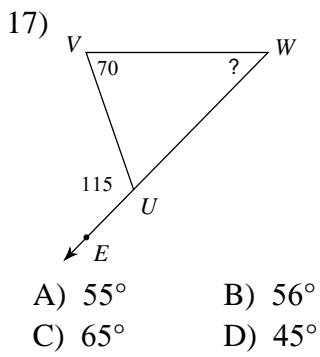
- A) 64° B) 35°
 C) 53° D) 65°

16)



- A) 70° B) 57°
 C) 59° D) 60°





Answers to Assignment (ID: 2)

1) D
5) B
9) A
13) A
17) D
21) A

2) C
6) C
10) D
14) B
18) B
22) D

3) D
7) D
11) C
15) D
19) A
23) C

4) A
8) B
12) A
16) A
20) B
24) C



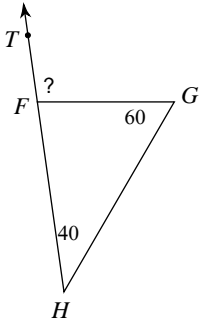
Assignment

Name _____

Date _____ Period _____

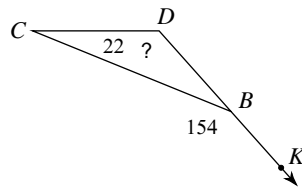
Find the measure of each angle indicated.

1)



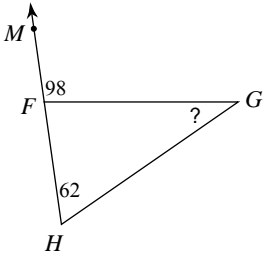
- A) 100°
- B) 112°
- C) 79°
- D) 80°

2)



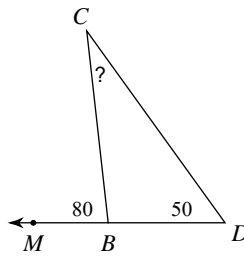
- A) 132°
- B) 26°
- C) 131°
- D) 142°

3)



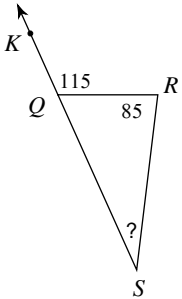
- A) 37°
- B) 82°
- C) 34°
- D) 36°

4)



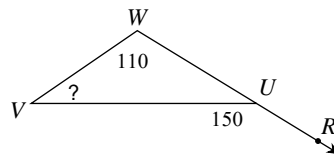
- A) 38°
- B) 30°
- C) 23°
- D) 100°

5)



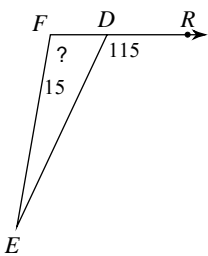
- A) 65°
- B) 28°
- C) 35°
- D) 30°

6)



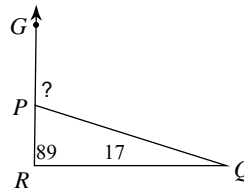
- A) 45°
- B) 40°
- C) 47°
- D) 30°

7)



- A) 103°
- B) 100°
- C) 65°
- D) 78°

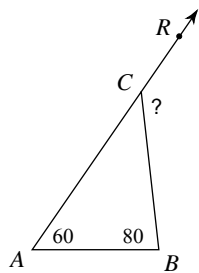
8)



- A) 113°
- B) 73°
- C) 106°
- D) 84°

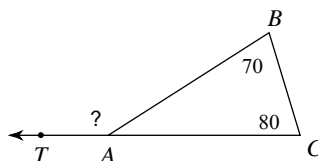


9)



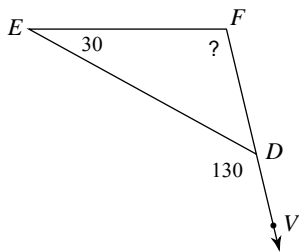
- A) 40° B) 111°
 C) 140° D) 105°

10)



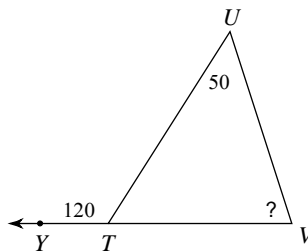
- A) 133° B) 150°
 C) 158° D) 30°

11)



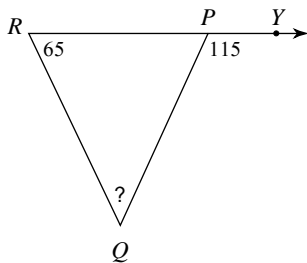
- A) 80° B) 50°
 C) 87° D) 100°

12)



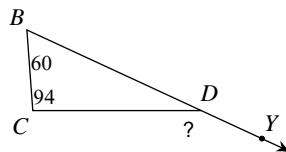
- A) 70° B) 73°
 C) 55° D) 60°

13)



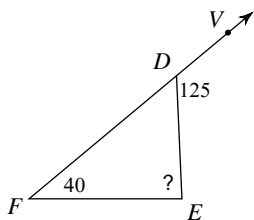
- A) 38° B) 62°
 C) 65° D) 50°

14)



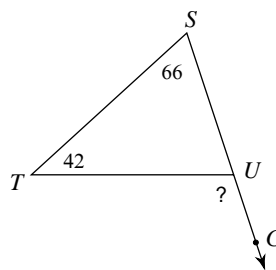
- A) 26° B) 125°
 C) 135° D) 154°

15)



- A) 55° B) 85°
 C) 88° D) 84°

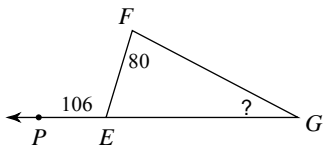
16)



- A) 108° B) 118°
 C) 72° D) 106°

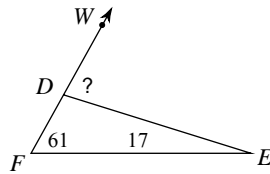


17)



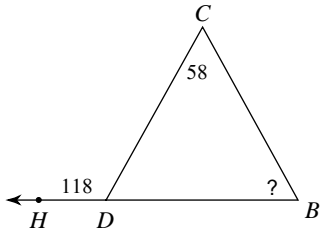
- A) 26° B) 31°
 C) 74° D) 28°

18)



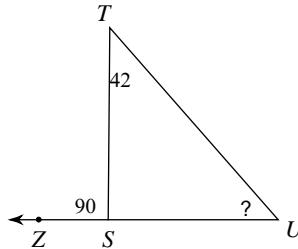
- A) 102° B) 92°
 C) 89° D) 78°

19)



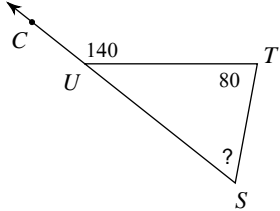
- A) 72° B) 60°
 C) 62° D) 65°

20)



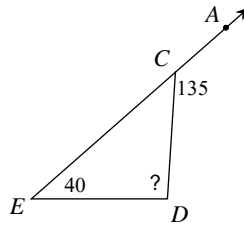
- A) 45° B) 90°
 C) 48° D) 51°

21)



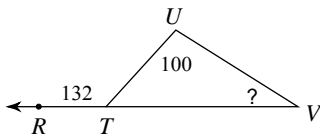
- A) 64° B) 40°
 C) 60° D) 67°

22)



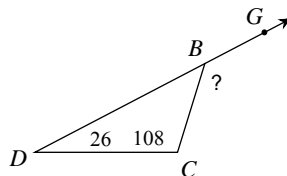
- A) 45° B) 116°
 C) 95° D) 93°

23)



- A) 48° B) 40°
 C) 24° D) 32°

24)



- A) 134° B) 125°
 C) 46° D) 109°



Answers to Assignment (ID: 3)

1) A
5) D
9) C
13) D
17) A
21) C

2) A
6) B
10) B
14) D
18) D
22) C

3) D
7) B
11) D
15) B
19) B
23) D

4) B
8) C
12) A
16) A
20) C
24) A



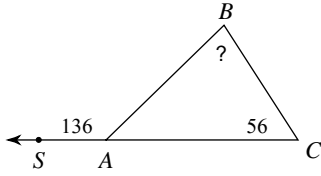
Assignment

Name _____

Date _____ Period _____

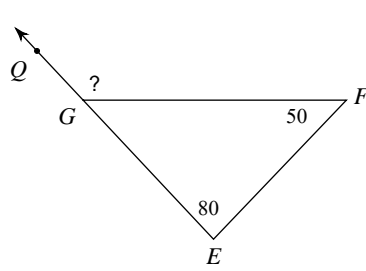
Find the measure of each angle indicated.

1)



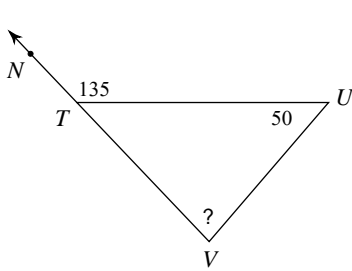
- A) 44°
- B) 89°
- C) 80°
- D) 87°

2)



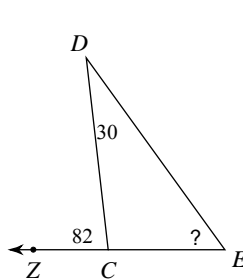
- A) 153°
- B) 130°
- C) 50°
- D) 144°

3)



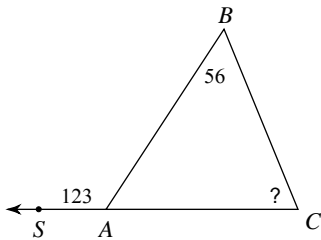
- A) 85°
- B) 72°
- C) 45°
- D) 77°

4)



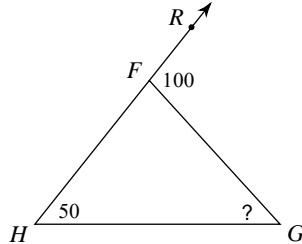
- A) 52°
- B) 43°
- C) 98°
- D) 59°

5)



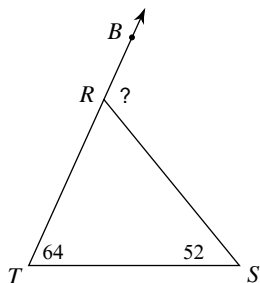
- A) 58°
- B) 57°
- C) 67°
- D) 75°

6)



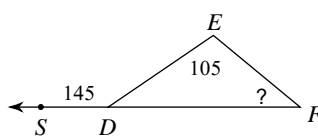
- A) 80°
- B) 41°
- C) 50°
- D) 47°

7)



- A) 105°
- B) 116°
- C) 93°
- D) 64°

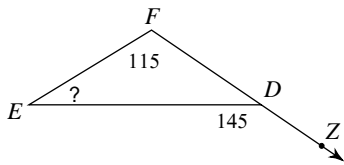
8)



- A) 34°
- B) 45°
- C) 35°
- D) 40°

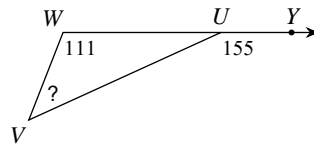


9)



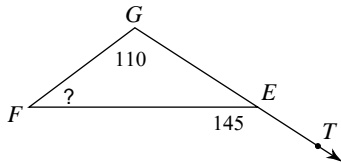
- A) 24° B) 30°
 C) 35° D) 23°

10)



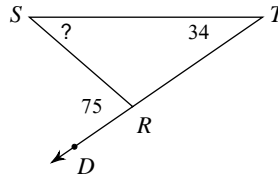
- A) 25° B) 44°
 C) 42° D) 52°

11)



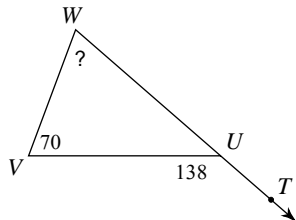
- A) 35° B) 29°
 C) 32° D) 42°

12)



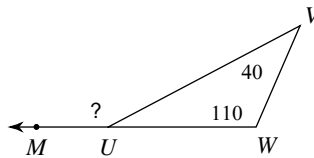
- A) 105° B) 41°
 C) 39° D) 44°

13)



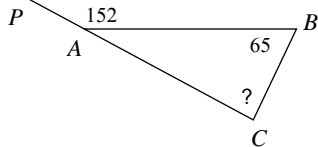
- A) 63° B) 68°
 C) 42° D) 58°

14)



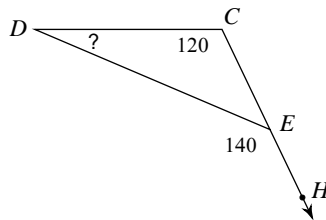
- A) 30° B) 150°
 C) 159° D) 120°

15)



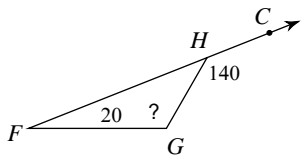
- A) 98° B) 87°
 C) 28° D) 97°

16)



- A) 23° B) 40°
 C) 24° D) 20°

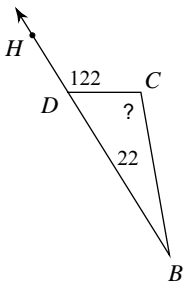
17)



- A) 40° B) 120°
 C) 130° D) 105°

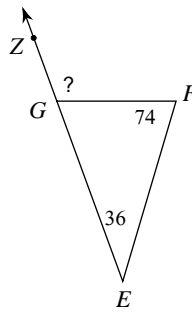


18)



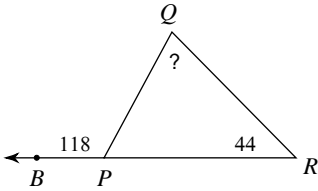
- A) 115° B) 100°
 C) 58° D) 92°

19)



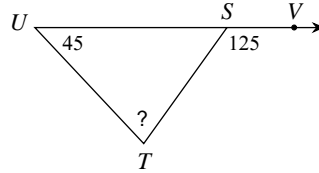
- A) 113° B) 95°
 C) 70° D) 110°

20)



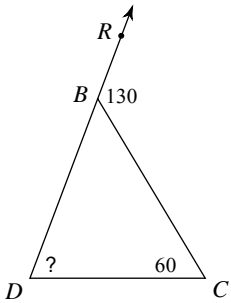
- A) 84° B) 74°
 C) 67° D) 62°

21)



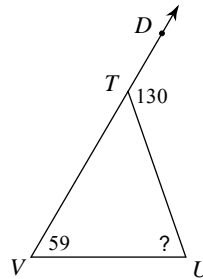
- A) 80° B) 55°
 C) 100° D) 69°

22)



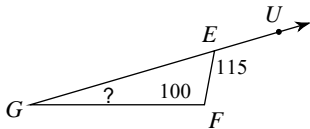
- A) 50° B) 54°
 C) 66° D) 70°

23)



- A) 88° B) 71°
 C) 50° D) 62°

24)



- A) 15° B) 22°
 C) 65° D) 24°



Answers to Assignment (ID: 4)

1) C
5) C
9) B
13) B
17) B
21) A

2) B
6) C
10) B
14) B
18) B
22) D

3) A
7) B
11) A
15) B
19) D
23) B

4) A
8) D
12) B
16) D
20) B
24) A



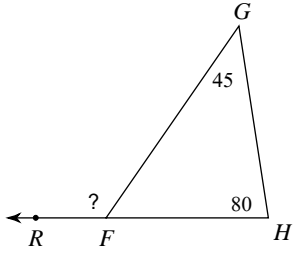
Assignment

Name _____

Date _____ Period _____

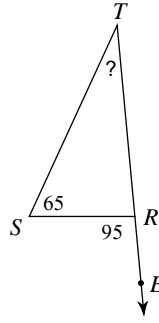
Find the measure of each angle indicated.

1)



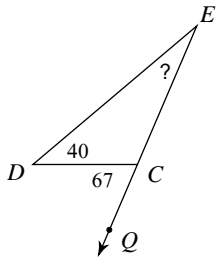
- A) 125°
- B) 55°
- C) 140°
- D) 130°

2)



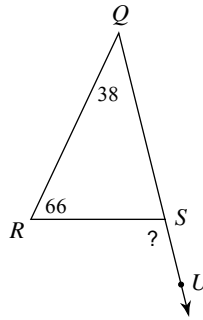
- A) 28°
- B) 85°
- C) 37°
- D) 30°

3)



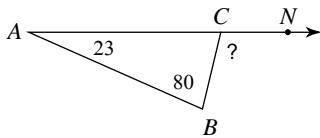
- A) 27°
- B) 113°
- C) 30°
- D) 33°

4)



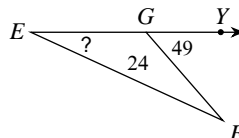
- A) 76°
- B) 122°
- C) 104°
- D) 106°

5)



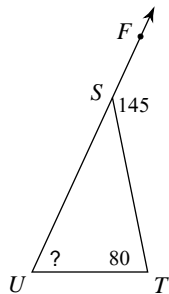
- A) 77°
- B) 110°
- C) 103°
- D) 116°

6)



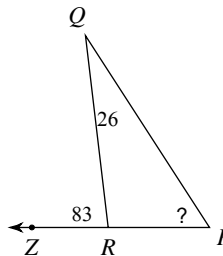
- A) 26°
- B) 22°
- C) 25°
- D) 131°

7)



- A) 67°
- B) 35°
- C) 72°
- D) 65°

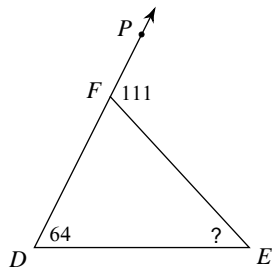
8)



- A) 97°
- B) 55°
- C) 57°
- D) 64°

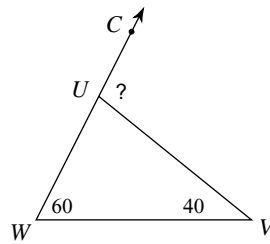


9)



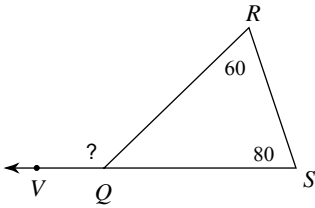
- A) 69° B) 42°
 C) 47° D) 37°

10)



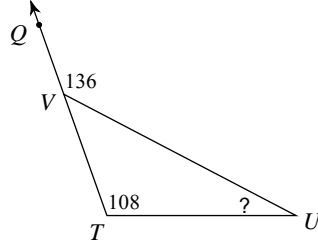
- A) 76° B) 100°
 C) 115° D) 80°

11)



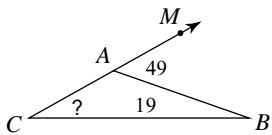
- A) 153° B) 40°
 C) 140° D) 110°

12)



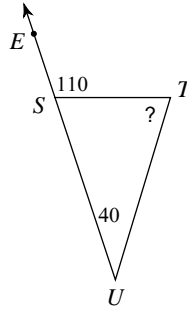
- A) 44° B) 22°
 C) 34° D) 28°

13)



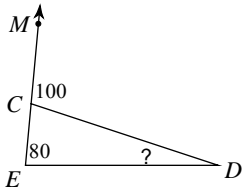
- A) 30° B) 131°
 C) 24° D) 35°

14)



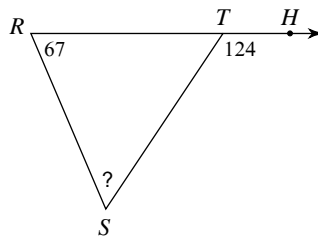
- A) 84° B) 71°
 C) 78° D) 70°

15)



- A) 80° B) 25°
 C) 20° D) 21°

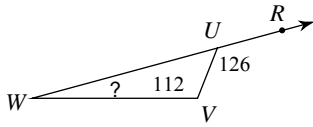
16)



- A) 64° B) 56°
 C) 57° D) 49°

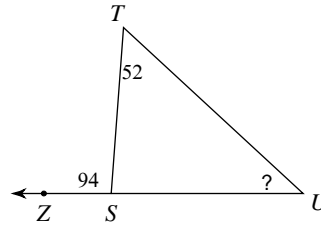


17)



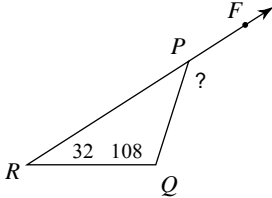
- A) 21° B) 14°
 C) 54° D) 24°

18)



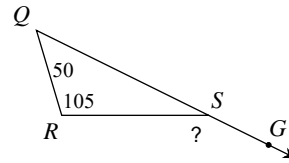
- A) 51° B) 47°
 C) 86° D) 42°

19)



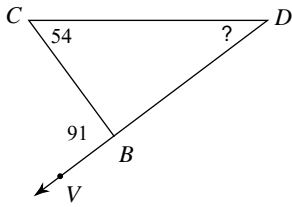
- A) 154° B) 157°
 C) 140° D) 40°

20)



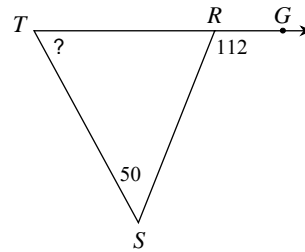
- A) 131° B) 155°
 C) 146° D) 25°

21)



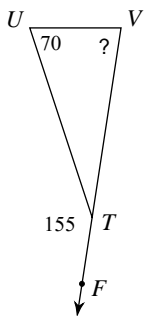
- A) 35° B) 37°
 C) 89° D) 32°

22)



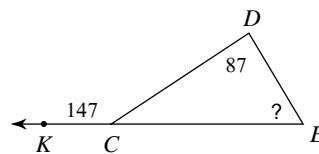
- A) 68° B) 62°
 C) 52° D) 72°

23)



- A) 25° B) 94°
 C) 85° D) 72°

24)



- A) 62° B) 60°
 C) 75° D) 33°



Answers to Assignment (ID: 5)

- 1) A
- 5) C
- 9) C
- 13) A
- 17) B
- 21) B

- 2) D
- 6) C
- 10) B
- 14) D
- 18) D
- 22) B

- 3) A
- 7) D
- 11) C
- 15) C
- 19) C
- 23) C

- 4) C
- 8) C
- 12) D
- 16) C
- 20) B
- 24) B



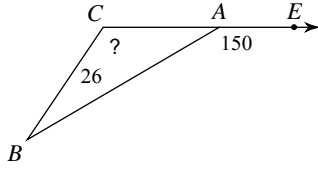
Assignment

Name _____

Date _____ Period _____

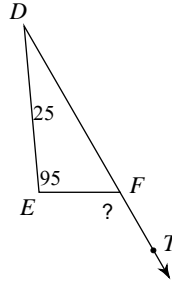
Find the measure of each angle indicated.

1)



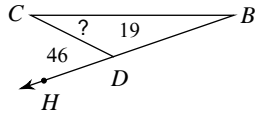
- A) 30°
- B) 153°
- C) 142°
- D) 124°

2)



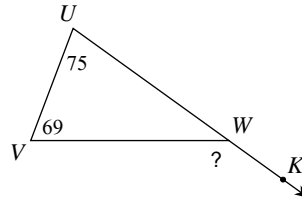
- A) 120°
- B) 90°
- C) 60°
- D) 95°

3)



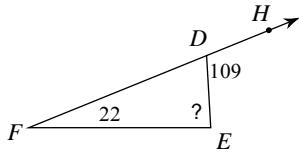
- A) 134°
- B) 24°
- C) 25°
- D) 27°

4)



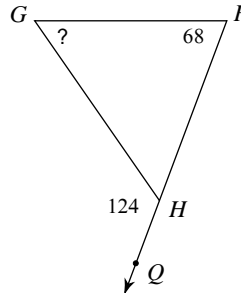
- A) 144°
- B) 158°
- C) 36°
- D) 111°

5)



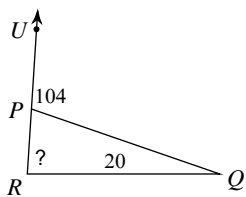
- A) 97°
- B) 98°
- C) 71°
- D) 87°

6)



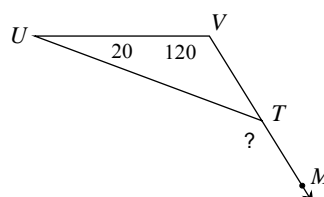
- A) 60°
- B) 56°
- C) 46°
- D) 68°

7)



- A) 84°
- B) 76°
- C) 75°
- D) 81°

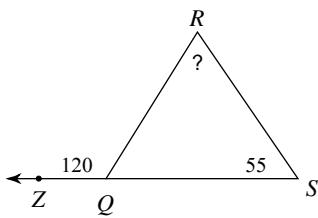
8)



- A) 149°
- B) 140°
- C) 40°
- D) 134°

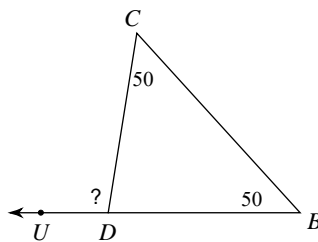


9)



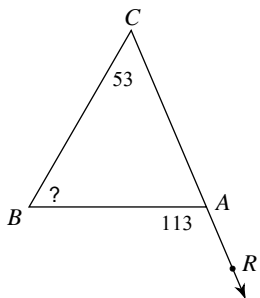
- A) 78° B) 65°
 C) 60° D) 71°

10)



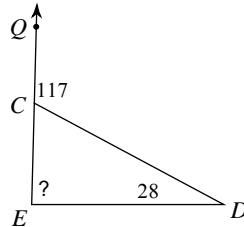
- A) 80° B) 100°
 C) 95° D) 106°

11)



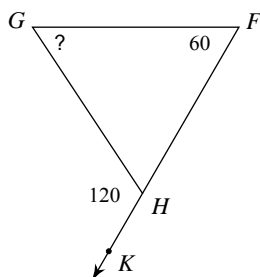
- A) 67° B) 60°
 C) 46° D) 49°

12)



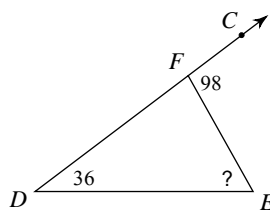
- A) 100° B) 89°
 C) 80° D) 63°

13)



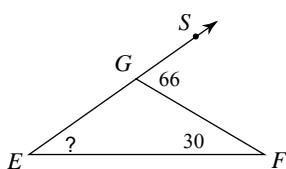
- A) 52° B) 46°
 C) 60° D) 65°

14)



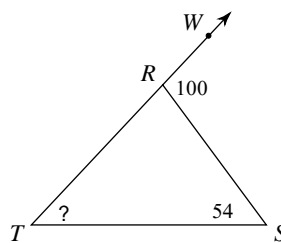
- A) 62° B) 56°
 C) 68° D) 82°

15)



- A) 32° B) 114°
 C) 27° D) 36°

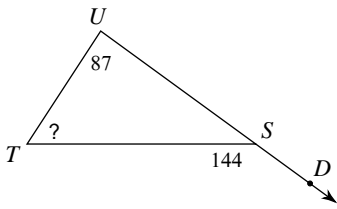
16)



- A) 80° B) 47°
 C) 46° D) 42°

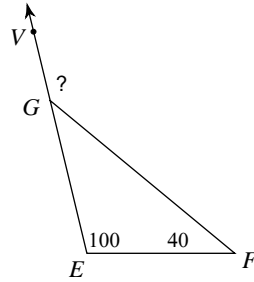


17)



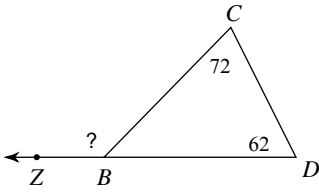
- A) 57° B) 49°
 C) 61° D) 36°

18)



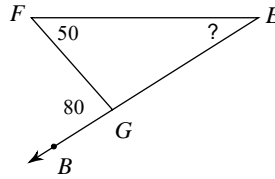
- A) 40° B) 107°
 C) 122° D) 140°

19)



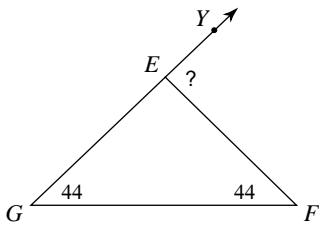
- A) 134° B) 142°
 C) 46° D) 126°

20)



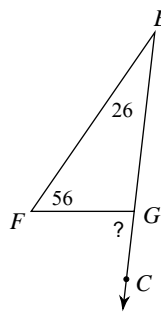
- A) 38° B) 30°
 C) 100° D) 33°

21)



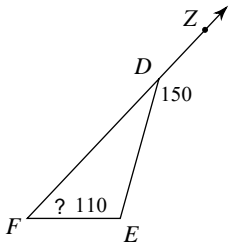
- A) 92° B) 88°
 C) 81° D) 80°

22)



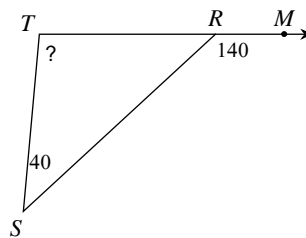
- A) 82° B) 93°
 C) 102° D) 98°

23)



- A) 40° B) 50°
 C) 30° D) 42°

24)



- A) 86° B) 40°
 C) 100° D) 94°



Answers to Assignment (ID: 6)

1) D
5) D
9) B
13) C
17) A
21) B

2) A
6) B
10) B
14) A
18) D
22) A

3) D
7) A
11) B
15) D
19) A
23) A

4) A
8) B
12) B
16) C
20) B
24) C



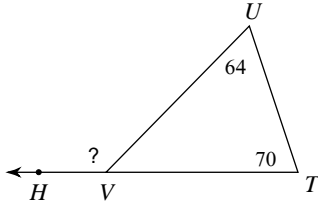
Assignment

Name _____

Date _____ Period _____

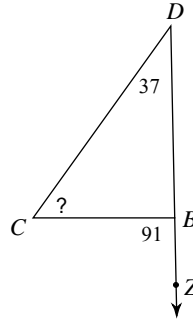
Find the measure of each angle indicated.

1)



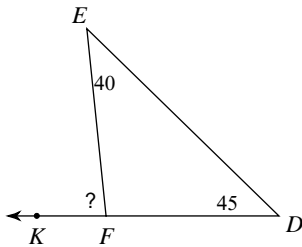
- A) 134°
- B) 135°
- C) 141°
- D) 46°

2)



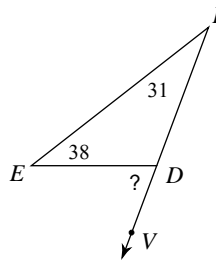
- A) 63°
- B) 54°
- C) 52°
- D) 89°

3)



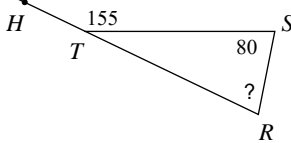
- A) 95°
- B) 64°
- C) 85°
- D) 93°

4)



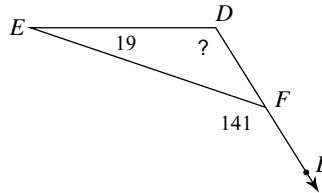
- A) 69°
- B) 85°
- C) 60°
- D) 111°

5)



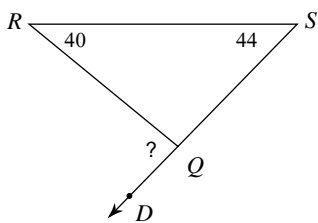
- A) 75°
- B) 85°
- C) 59°
- D) 25°

6)



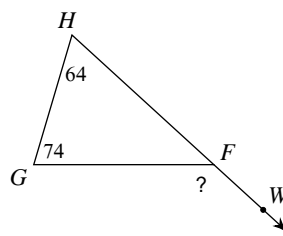
- A) 122°
- B) 39°
- C) 106°
- D) 109°

7)



- A) 99°
- B) 96°
- C) 97°
- D) 84°

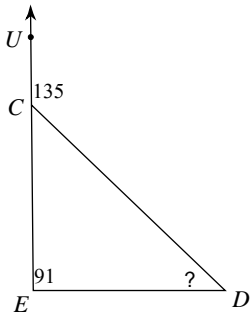
8)



- A) 109°
- B) 115°
- C) 138°
- D) 42°

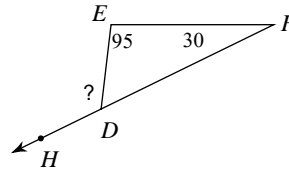


9)



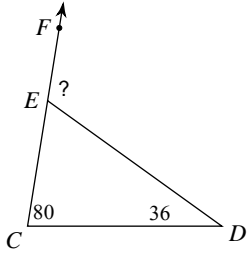
- A) 36° B) 44°
 C) 46° D) 47°

10)



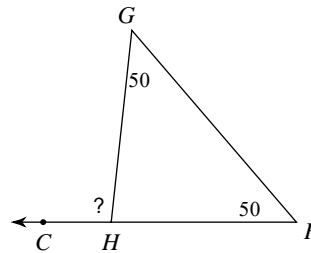
- A) 150° B) 55°
 C) 136° D) 125°

11)



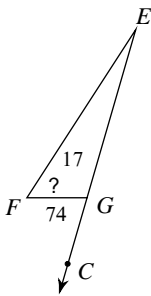
- A) 103° B) 64°
 C) 134° D) 116°

12)



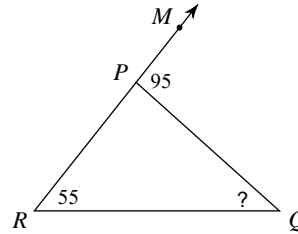
- A) 80° B) 104°
 C) 100° D) 108°

13)



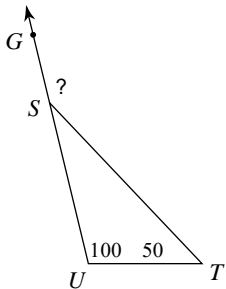
- A) 59° B) 57°
 C) 106° D) 69°

14)



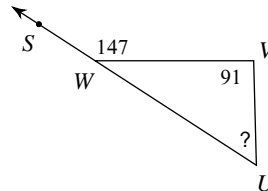
- A) 36° B) 41°
 C) 85° D) 40°

15)



- A) 150° B) 159°
 C) 30° D) 125°

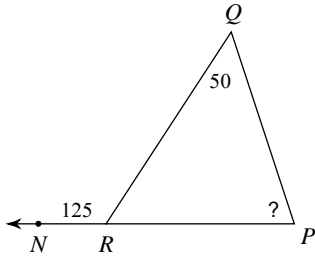
16)



- A) 33° B) 70°
 C) 56° D) 61°

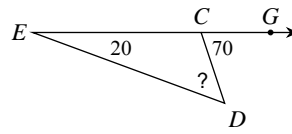


17)



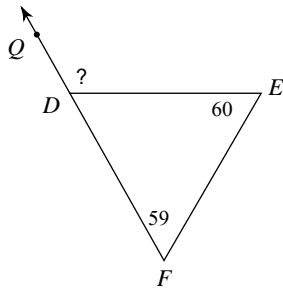
- A) 75° B) 68°
 C) 87° D) 55°

18)



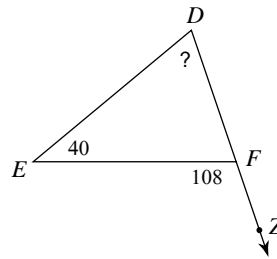
- A) 59° B) 48°
 C) 50° D) 110°

19)



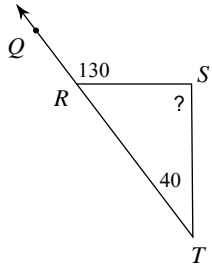
- A) 119° B) 96°
 C) 61° D) 128°

20)



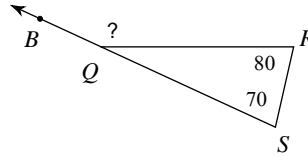
- A) 56° B) 72°
 C) 77° D) 68°

21)



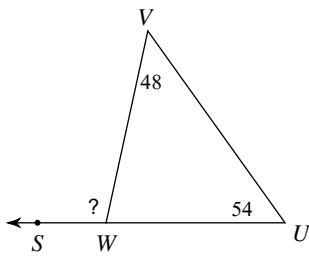
- A) 92° B) 50°
 C) 90° D) 77°

22)



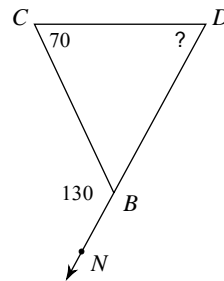
- A) 116° B) 30°
 C) 150° D) 147°

23)



- A) 80° B) 107°
 C) 78° D) 102°

24)



- A) 60° B) 58°
 C) 50° D) 47°



Answers to Assignment (ID: 7)

- 1) A
- 5) A
- 9) B
- 13) B
- 17) A
- 21) C

- 2) B
- 6) A
- 10) D
- 14) D
- 18) C
- 22) C

- 3) C
- 7) D
- 11) D
- 15) A
- 19) A
- 23) D

- 4) A
- 8) C
- 12) C
- 16) C
- 20) D
- 24) A

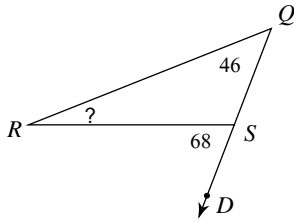


Assignment

Name _____ Date _____ Period _____

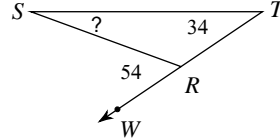
Find the measure of each angle indicated.

1)



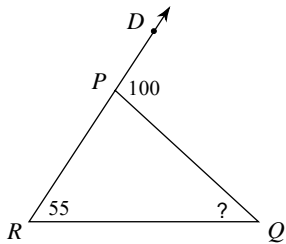
- A) 24°
- B) 112°
- C) 21°
- D) 22°

2)



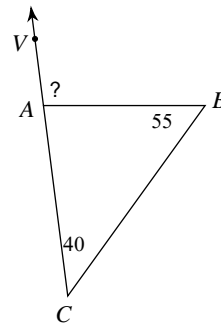
- A) 126°
- B) 25°
- C) 21°
- D) 20°

3)



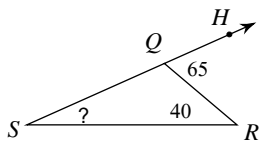
- A) 36°
- B) 45°
- C) 52°
- D) 80°

4)



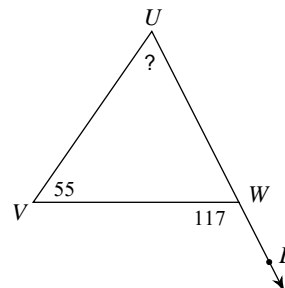
- A) 94°
- B) 113°
- C) 85°
- D) 95°

5)



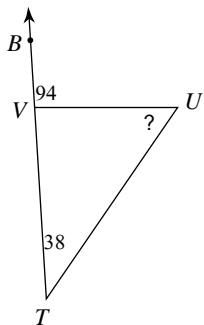
- A) 115°
- B) 31°
- C) 25°
- D) 29°

6)



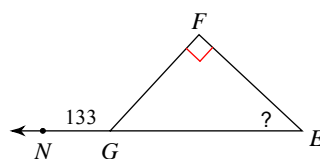
- A) 63°
- B) 62°
- C) 50°
- D) 66°

7)



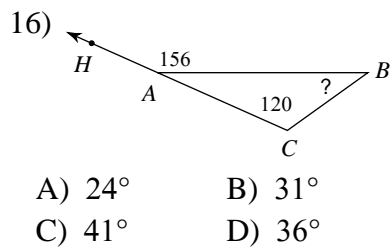
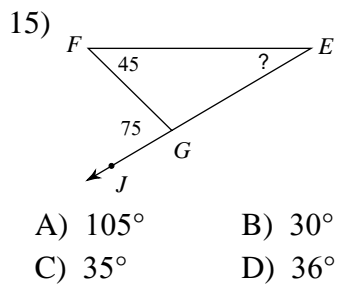
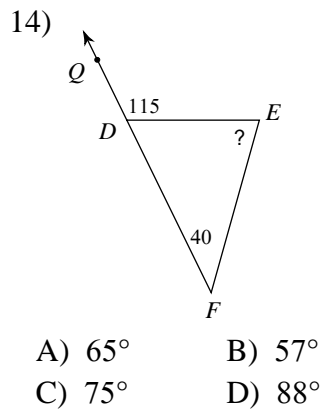
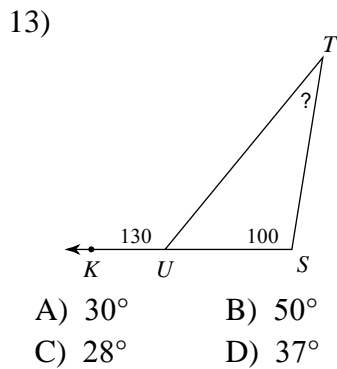
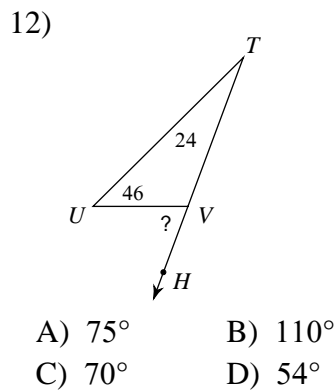
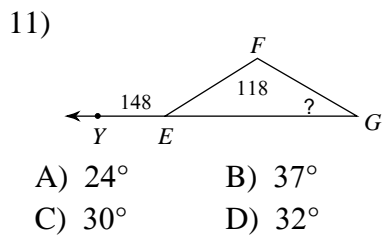
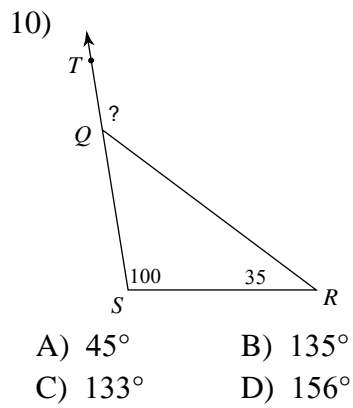
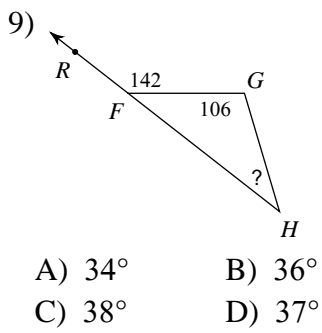
- A) 86°
- B) 62°
- C) 59°
- D) 56°

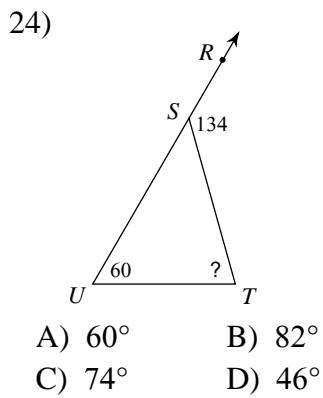
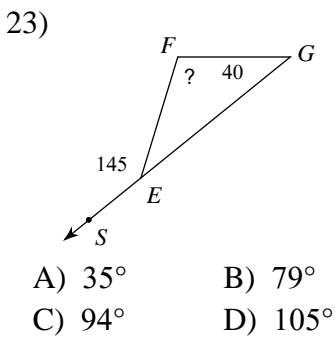
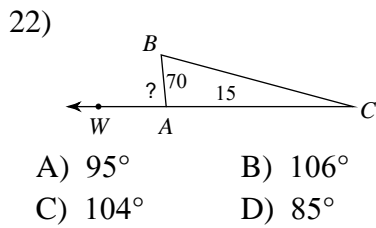
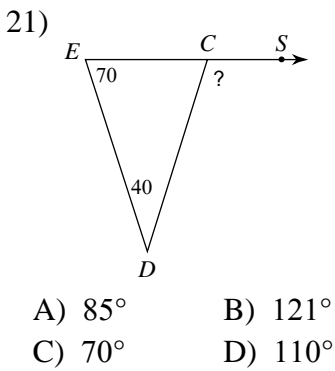
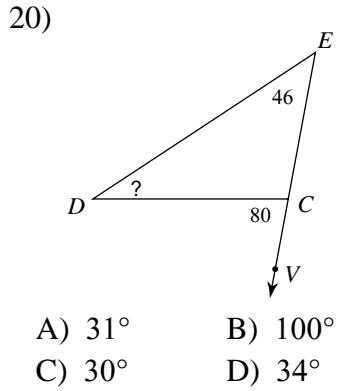
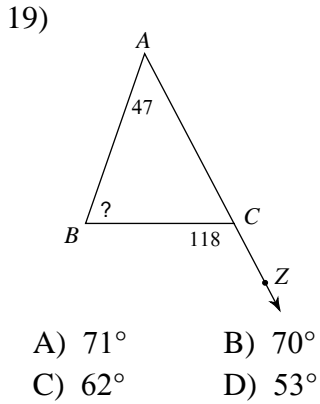
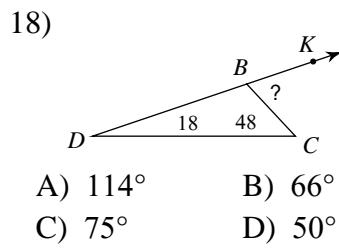
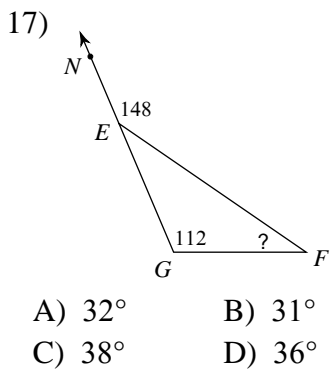
8)



- A) 43°
- B) 52°
- C) 47°
- D) 33°







Answers to Assignment (ID: 8)

1) D
5) C
9) B
13) A
17) D
21) D

2) D
6) B
10) B
14) C
18) B
22) D

3) B
7) D
11) C
15) B
19) A
23) D

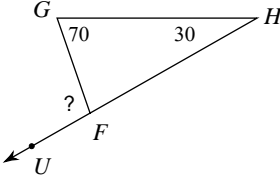
4) D
8) A
12) C
16) D
20) D
24) C

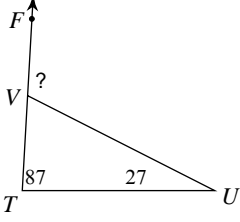


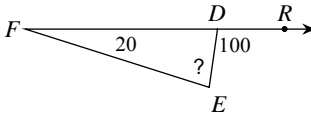
Assignment

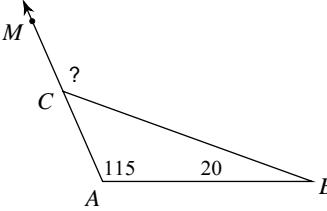
Name _____ Date _____ Period _____

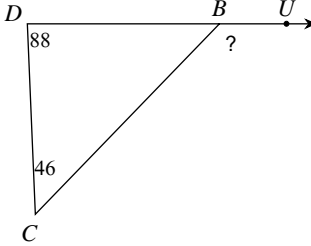
Find the measure of each angle indicated.

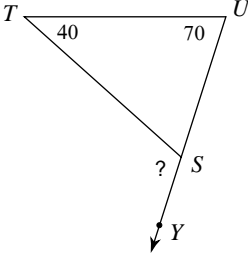
1) 
 A) 116° B) 117°
 C) 80° D) 100°

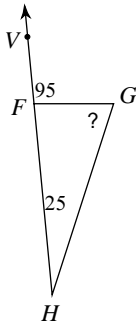
2) 
 A) 103° B) 112°
 C) 114° D) 66°

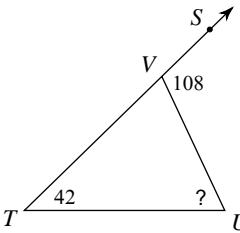
3) 
 A) 66° B) 83°
 C) 94° D) 80°

4) 
 A) 134° B) 45°
 C) 135° D) 112°

5) 
 A) 115° B) 148°
 C) 134° D) 46°

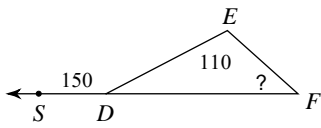
6) 
 A) 110° B) 115°
 C) 70° D) 101°

7) 
 A) 63° B) 84°
 C) 85° D) 70°

8) 
 A) 56° B) 53°
 C) 72° D) 66°

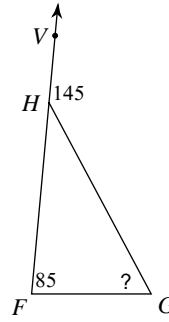


9)



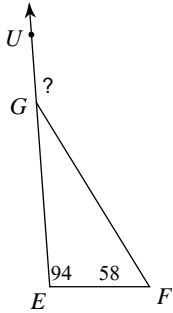
- A) 34° B) 40°
 C) 30° D) 36°

10)



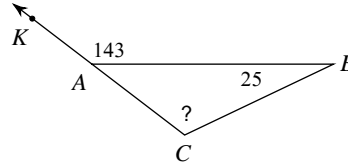
- A) 73° B) 35°
 C) 46° D) 60°

11)



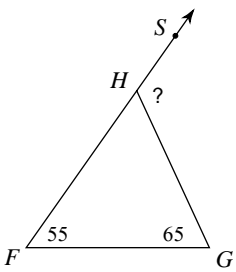
- A) 28° B) 133°
 C) 143° D) 152°

12)



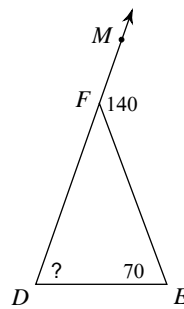
- A) 37° B) 118°
 C) 116° D) 111°

13)



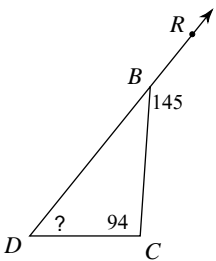
- A) 60° B) 147°
 C) 120° D) 130°

14)



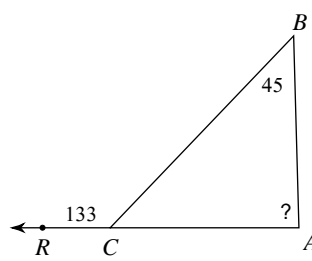
- A) 70° B) 40°
 C) 66° D) 53°

15)



- A) 35° B) 44°
 C) 51° D) 38°

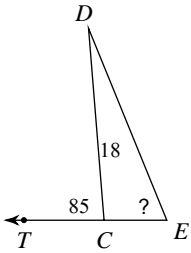
16)



- A) 69° B) 88°
 C) 74° D) 46°

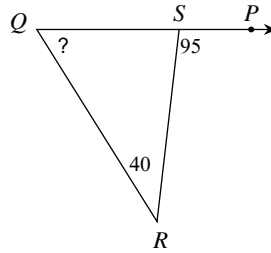


17)



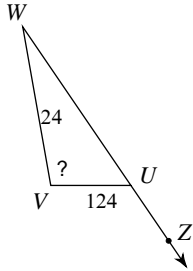
- A) 55° B) 95°
 C) 67° D) 50°

18)



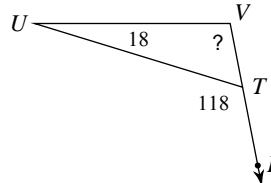
- A) 85° B) 55°
 C) 49° D) 57°

19)



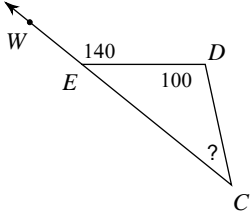
- A) 75° B) 100°
 C) 110° D) 56°

20)



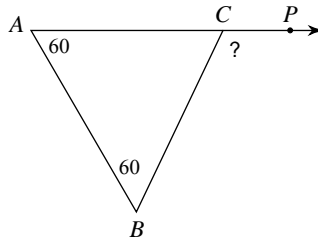
- A) 80° B) 108°
 C) 62° D) 100°

21)



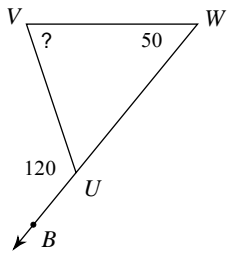
- A) 42° B) 46°
 C) 40° D) 39°

22)



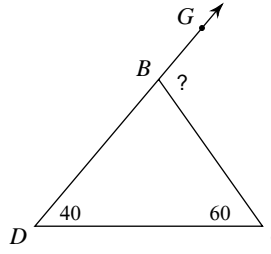
- A) 93° B) 150°
 C) 120° D) 60°

23)



- A) 60° B) 70°
 C) 76° D) 65°

24)



- A) 80° B) 91°
 C) 100° D) 111°



Answers to Assignment (ID: 9)

1) D
5) C
9) B
13) C
17) C
21) C

2) C
6) A
10) D
14) A
18) B
22) C

3) D
7) D
11) D
15) C
19) B
23) B

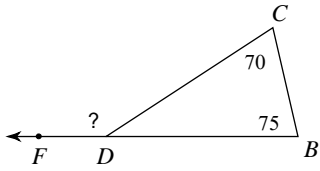
4) C
8) D
12) B
16) B
20) D
24) C



Assignment

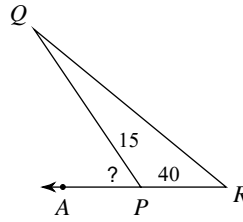
Find the measure of each angle indicated.

1)



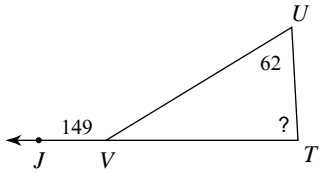
- A) 35°
- B) 112°
- C) 145°
- D) 148°

2)



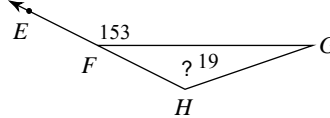
- A) 55°
- B) 125°
- C) 64°
- D) 48°

3)



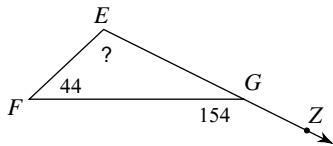
- A) 87°
- B) 71°
- C) 31°
- D) 85°

4)



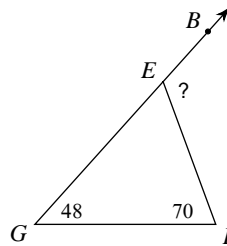
- A) 115°
- B) 108°
- C) 27°
- D) 134°

5)



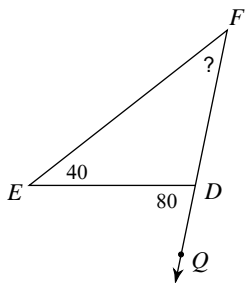
- A) 110°
- B) 138°
- C) 26°
- D) 94°

6)



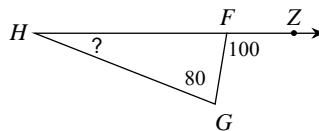
- A) 118°
- B) 145°
- C) 141°
- D) 62°

7)



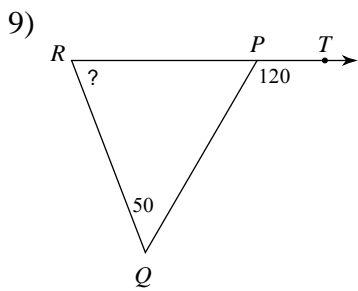
- A) 100°
- B) 43°
- C) 33°
- D) 40°

8)

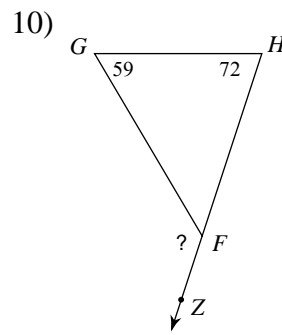


- A) 24°
- B) 23°
- C) 80°
- D) 20°

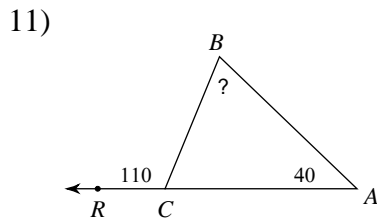




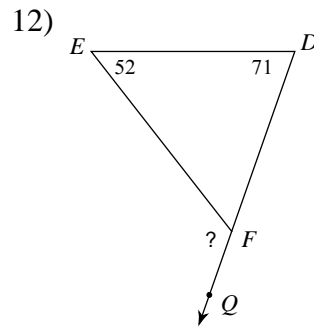
- A) 53° B) 60°
 C) 66° D) 70°



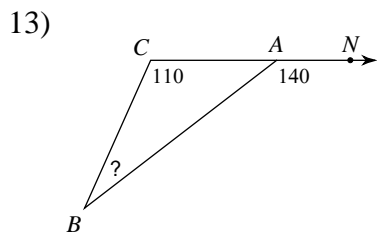
- A) 101° B) 49°
 C) 155° D) 131°



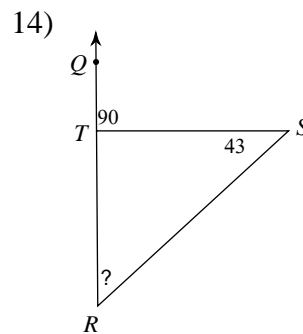
- A) 70° B) 54°
 C) 86° D) 79°



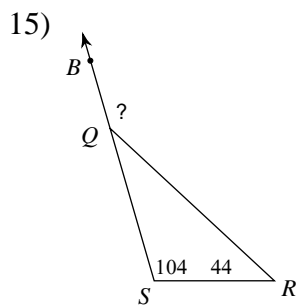
- A) 123° B) 57°
 C) 92° D) 117°



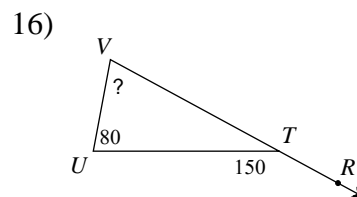
- A) 38° B) 34°
 C) 30° D) 40°



- A) 47° B) 43°
 C) 90° D) 41°



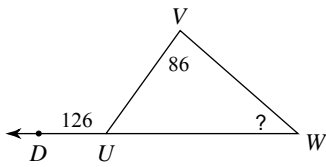
- A) 128° B) 32°
 C) 148° D) 133°



- A) 30° B) 69°
 C) 67° D) 70°

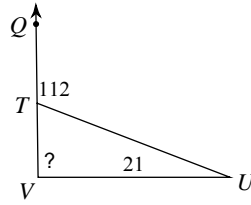


17)



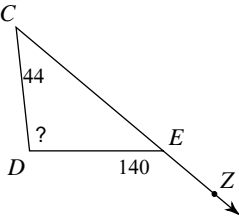
- A) 54° B) 32°
 C) 42° D) 40°

18)



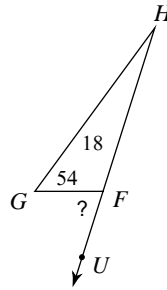
- A) 68° B) 108°
 C) 91° D) 76°

19)



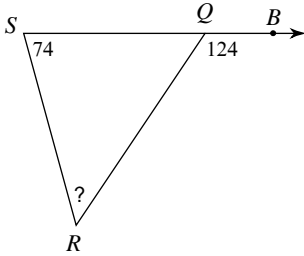
- A) 96° B) 40°
 C) 86° D) 84°

20)



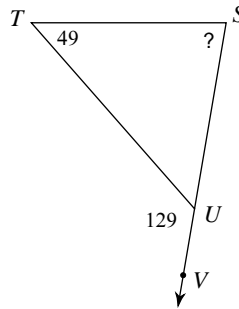
- A) 108° B) 72°
 C) 66° D) 80°

21)



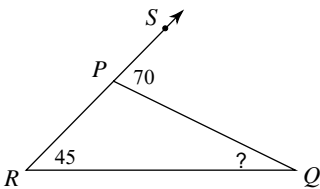
- A) 63° B) 50°
 C) 53° D) 56°

22)



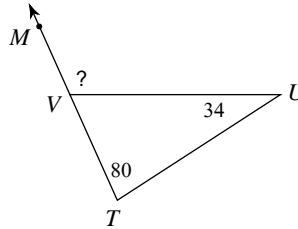
- A) 88° B) 51°
 C) 73° D) 80°

23)



- A) 21° B) 25°
 C) 22° D) 110°

24)



- A) 114° B) 125°
 C) 66° D) 92°



Answers to Assignment (ID: 10)

1) C
5) A
9) D
13) C
17) D
21) B

2) A
6) A
10) D
14) A
18) C
22) D

3) A
7) D
11) A
15) C
19) A
23) B

4) D
8) D
12) A
16) D
20) B
24) A

