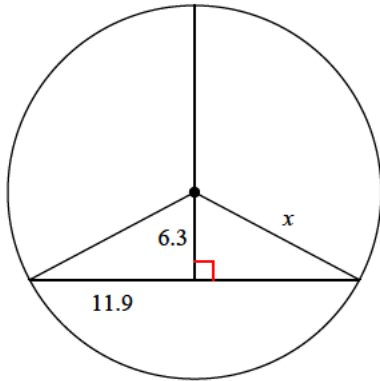


Assignment

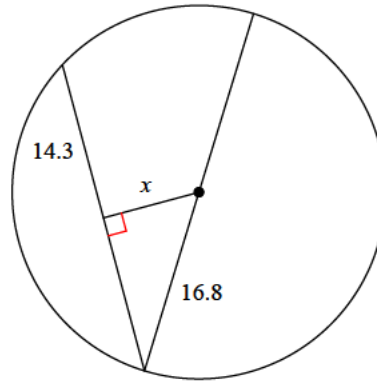
Find the length of the segment indicated. Round your answer to the nearest tenth if necessary.

1)



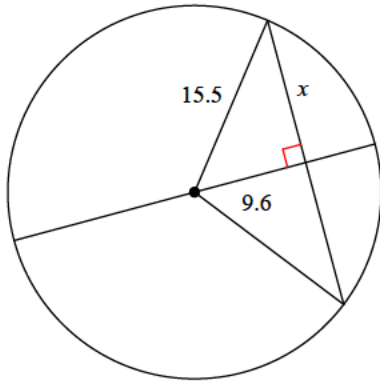
- A) 11.8 B) 7.9
C) 18.2 D) 13.5

2)



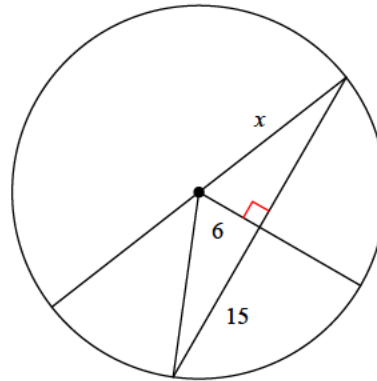
- A) 9.3 B) 8.8
C) 8.9 D) 11.1

3)



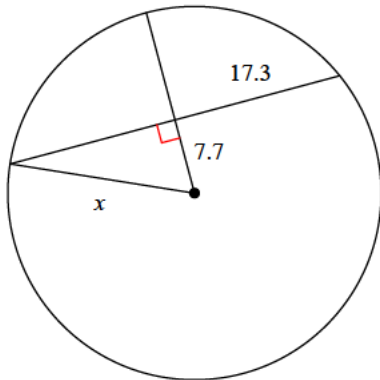
- A) 12.6 B) 12.2
C) 13.9 D) 16.8

4)



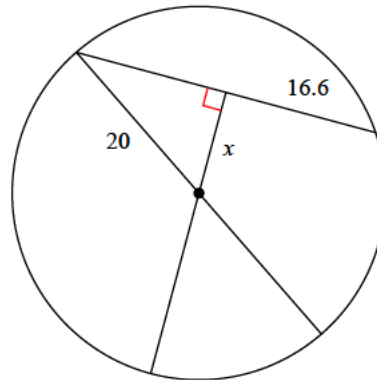
- A) 16.2 B) 18
C) 9.7 D) 8.2

5)



- A) 26 B) 18.9
C) 27.9 D) 20.8

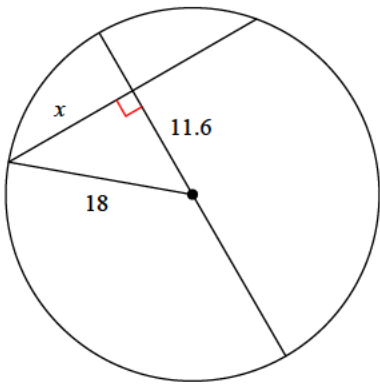
6)



- A) 16.2 B) 8.6
C) 11.2 D) 6.3

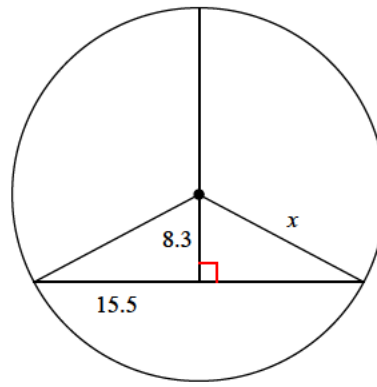


7)



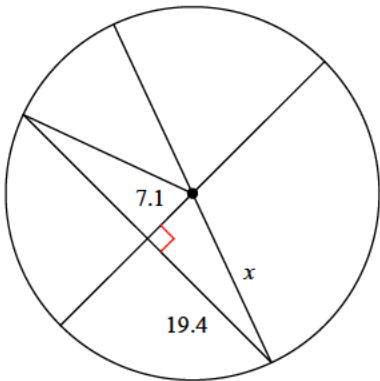
- A) 10.1 B) 10.5
C) 13.8 D) 12.1

8)



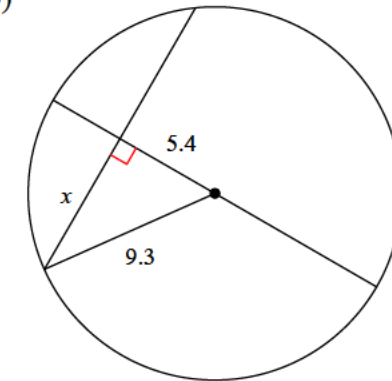
- A) 15.3 B) 11.4
C) 21.6 D) 17.6

9)



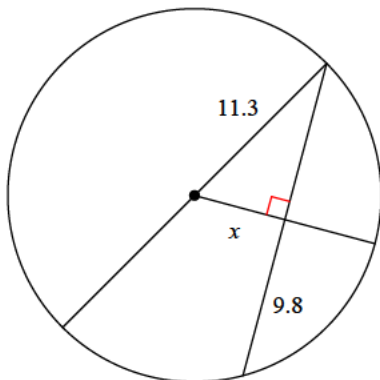
- A) 18.3 B) 20.7
C) 26 D) 24.1

10)



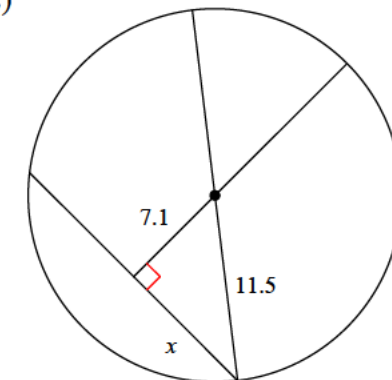
- A) 7.6 B) 4.5
C) 8.4 D) 9.2

11)



- A) 3.5 B) 3.3
C) 2.9 D) 5.6

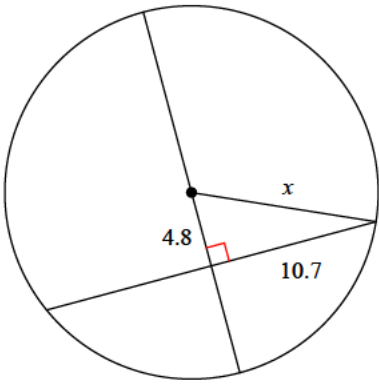
12)



- A) 9 B) 11.4
C) 12.9 D) 7.4

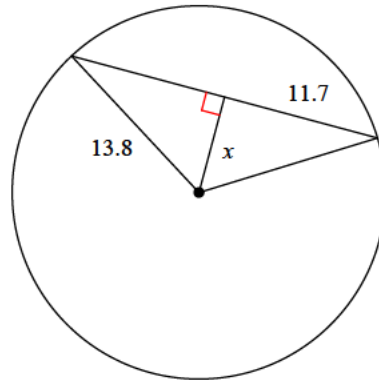


13)



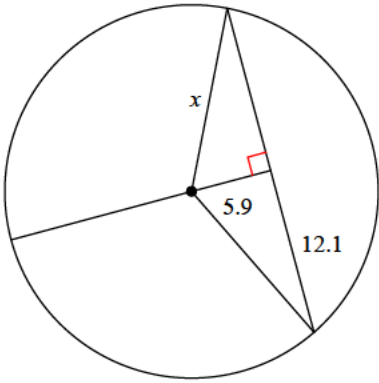
- A) 15 B) 11.7
C) 8.4 D) 10.4

14)



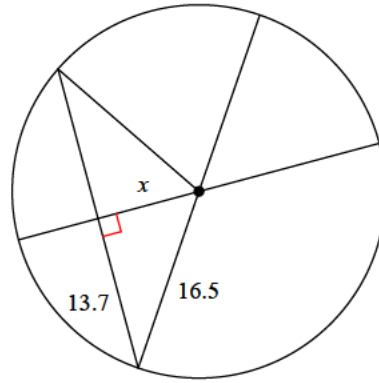
- A) 10.3 B) 7.3
C) 5.7 D) 9

15)



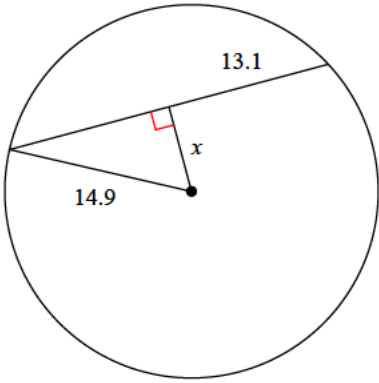
- A) 19.2 B) 11.6
C) 16.2 D) 13.5

16)



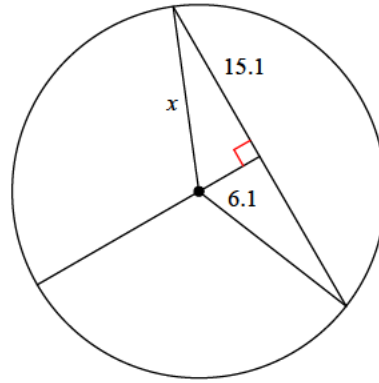
- A) 9.2 B) 11.8
C) 11.2 D) 12.7

17)



- A) 9.8 B) 8.2
C) 7.1 D) 10.4

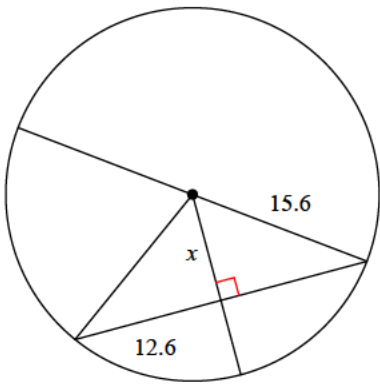
18)



- A) 16.3 B) 13.6
C) 11.1 D) 22.3

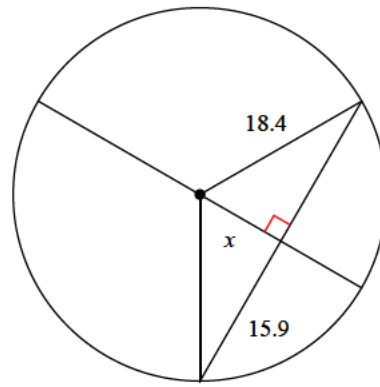


19)



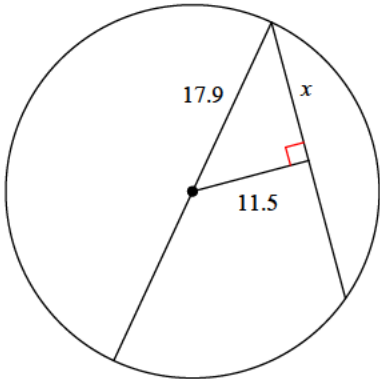
- A) 9.2 B) 8.5
C) 9.7 D) 11.8

20)



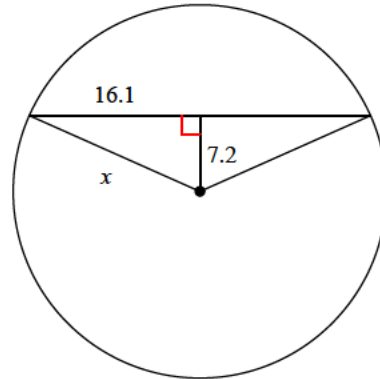
- A) 14 B) 12.3
C) 9.3 D) 11.4

21)



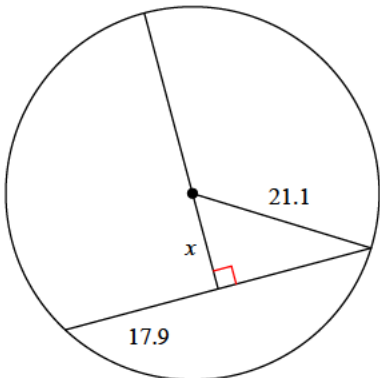
- A) 10.8 B) 11.6
C) 13.7 D) 18.7

22)



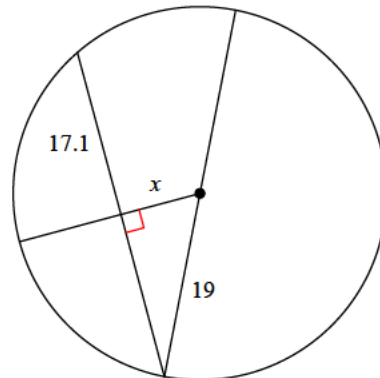
- A) 17.6 B) 16.1
C) 24.1 D) 23.5

23)



- A) 12.4 B) 11.2
C) 8.8 D) 7

24)



- A) 8.3 B) 5.9
C) 7.2 D) 7.6



Answers to Assignment (ID: 1)

1) D
5) B
9) B
13) B
17) C
21) C

2) B
6) C
10) A
14) B
18) A
22) A

3) B
7) C
11) D
15) D
19) A
23) B

4) A
8) D
12) A
16) A
20) C
24) A

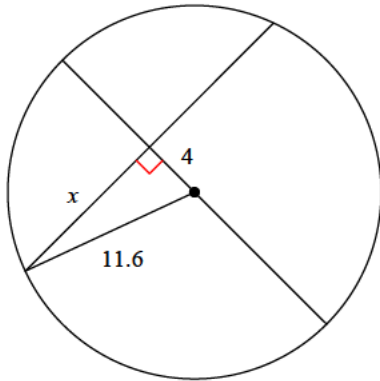


Assignment

Date _____ Period _____

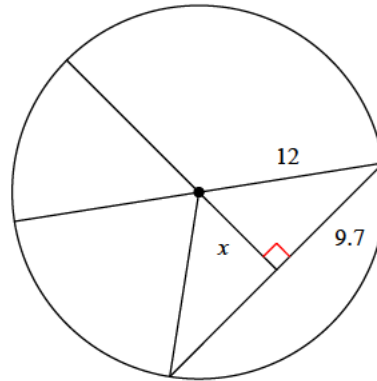
Find the length of the segment indicated. Round your answer to the nearest tenth if necessary.

1)



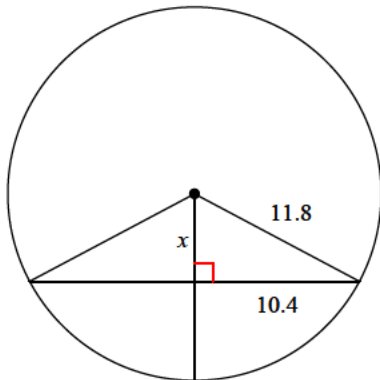
- A) 7.5
- B) 9.3
- C) 15.4
- D) 10.9

2)



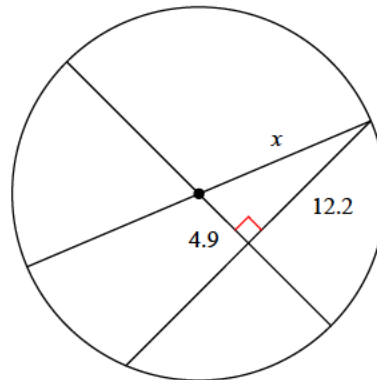
- A) 7.7
- B) 8.9
- C) 7.1
- D) 8.1

3)



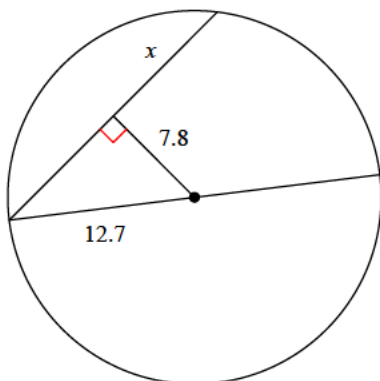
- A) 4.3
- B) 5.6
- C) 3.3
- D) 4.2

4)



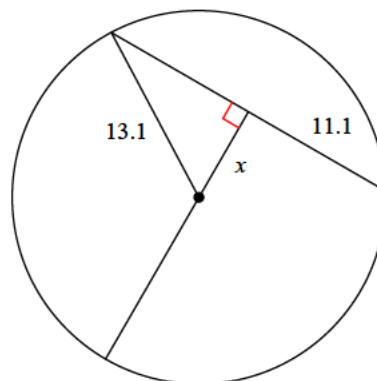
- A) 7.7
- B) 15
- C) 12.3
- D) 13.1

5)



- A) 6.5
- B) 14.2
- C) 5.2
- D) 10

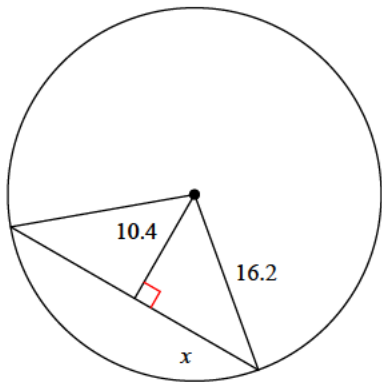
6)



- A) 3.8
- B) 5.9
- C) 10
- D) 7

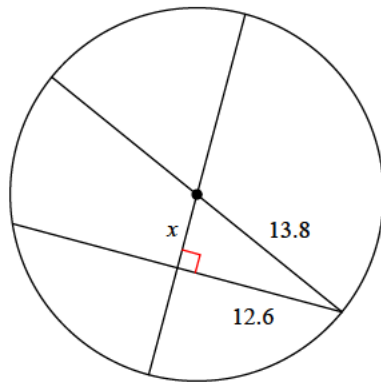


7)



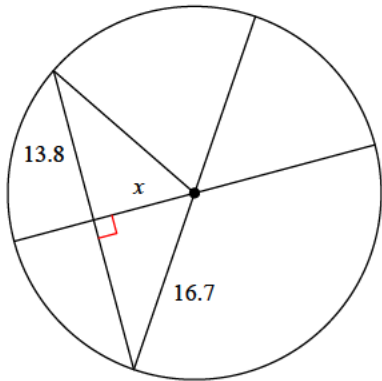
- A) 17 B) 13.9
C) 15.1 D) 12.4

8)



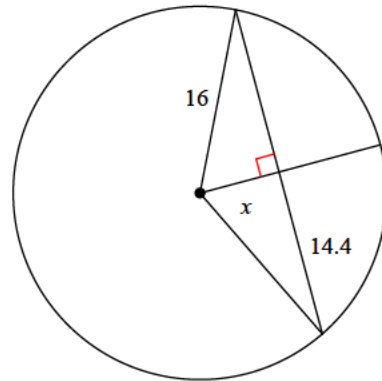
- A) 5.6 B) 5.2
C) 3.9 D) 5.7

9)



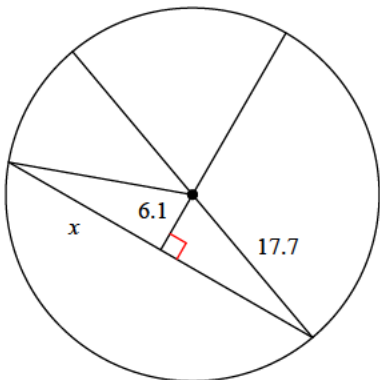
- A) 11.9 B) 6.5
C) 9.4 D) 13.7

10)



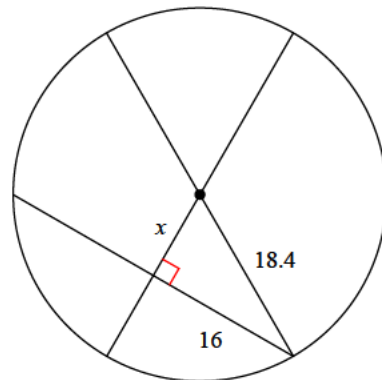
- A) 7 B) 7.5
C) 9.1 D) 10.4

11)



- A) 19.1 B) 16.6
C) 14.7 D) 24.1

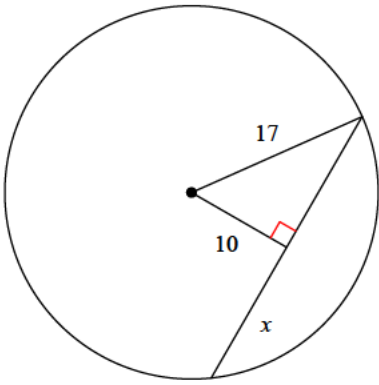
12)



- A) 9.1 B) 7
C) 11.3 D) 10.1

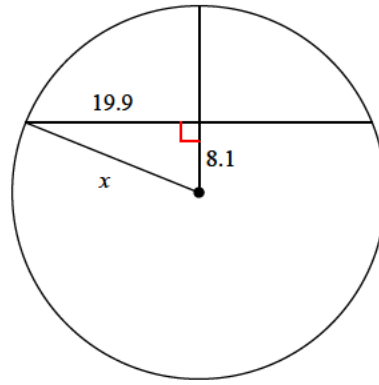


13)



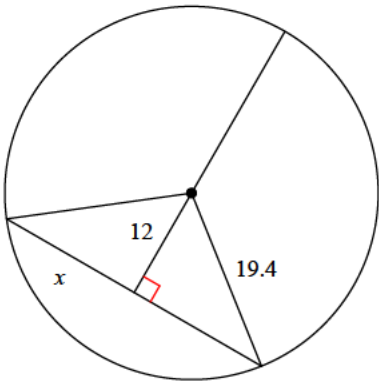
- A) 17.2 B) 13.7
C) 10 D) 14.5

14)



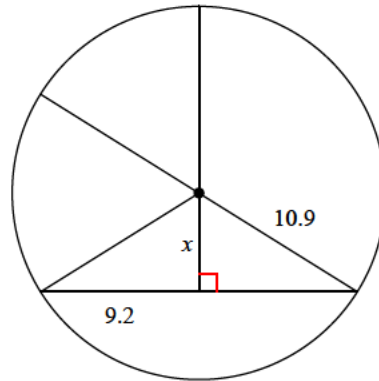
- A) 20.1 B) 18.8
C) 29.5 D) 21.5

15)



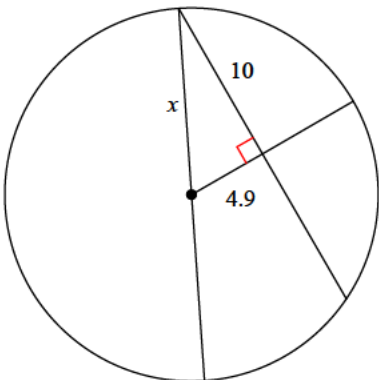
- A) 20.9 B) 7.9
C) 22.3 D) 15.2

16)



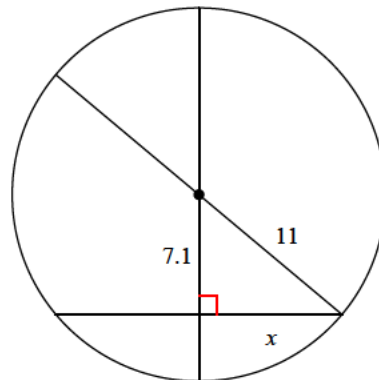
- A) 7.7 B) 3.2
C) 7.8 D) 5.8

17)



- A) 6.7 B) 11.1
C) 16 D) 13.6

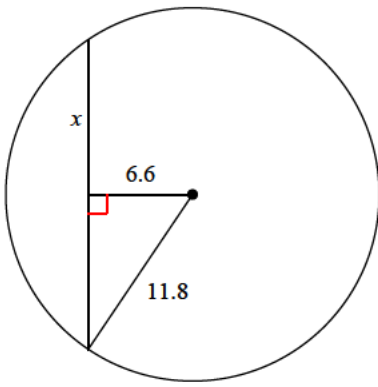
18)



- A) 8.4 B) 5.1
C) 7.2 D) 9.6

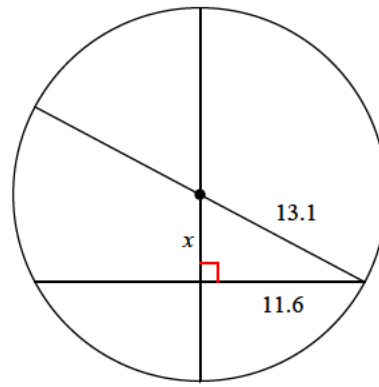


19)



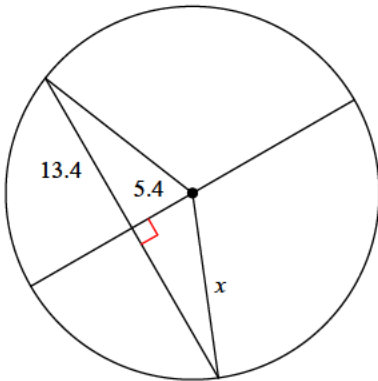
- A) 9.8 B) 6.6
C) 12.9 D) 6

20)



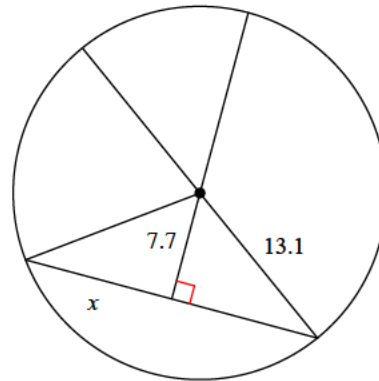
- A) 6.5 B) 6.4
C) 6.1 D) 6.8

21)



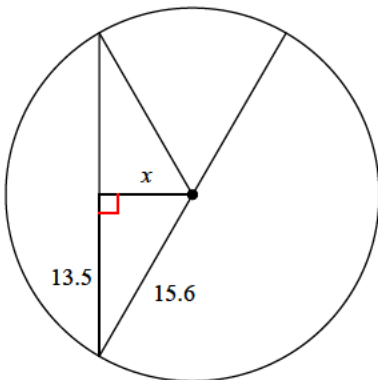
- A) 20.6 B) 14.4
C) 7.8 D) 20.3

22)



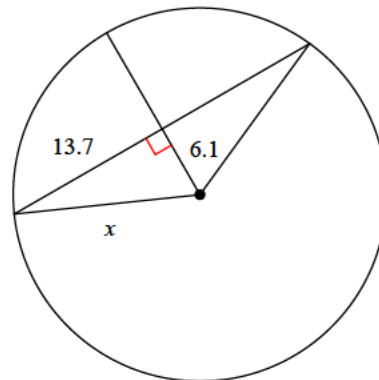
- A) 9 B) 10.1
C) 10.6 D) 14.4

23)



- A) 4 B) 7.8
C) 10.7 D) 7.4

24)



- A) 17.8 B) 16.3
C) 7.8 D) 15



Answers to Assignment (ID: 2)

1) D
5) D
9) C
13) B
17) B
21) B

2) C
6) D
10) A
14) D
18) A
22) C

3) B
7) D
11) B
15) D
19) A
23) B

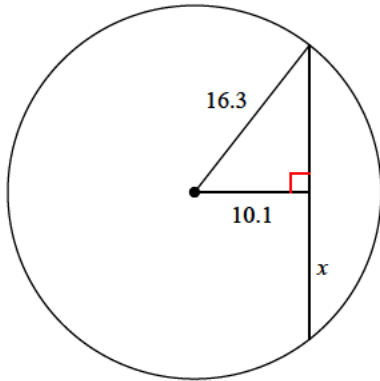
4) D
8) A
12) A
16) D
20) C
24) D



Assignment

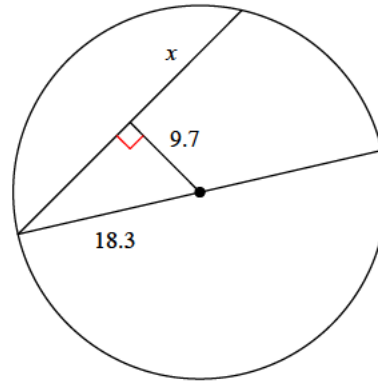
Find the length of the segment indicated. Round your answer to the nearest tenth if necessary.

1)



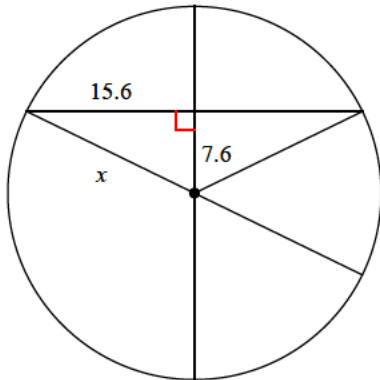
- A) 12.8
- B) 16.4
- C) 18.2
- D) 16.3

2)



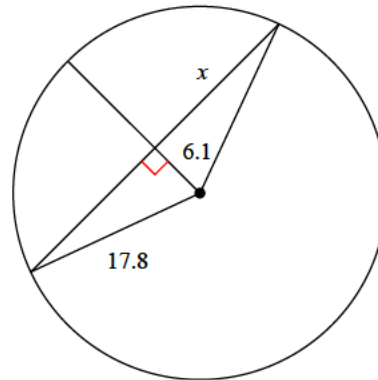
- A) 15.5
- B) 18
- C) 13.8
- D) 13.9

3)



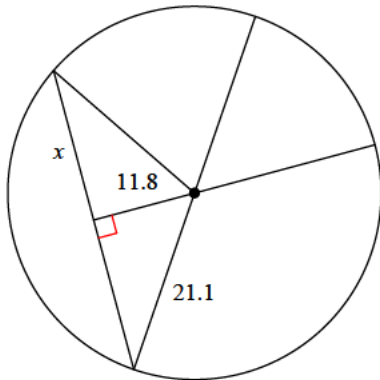
- A) 19.9
- B) 13.7
- C) 17.4
- D) 9.3

4)



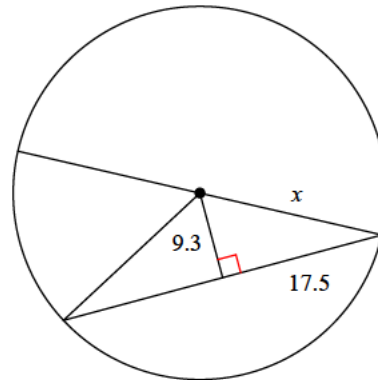
- A) 16.7
- B) 17.9
- C) 12.5
- D) 17.3

5)



- A) 26.3
- B) 17.5
- C) 10.6
- D) 25.2

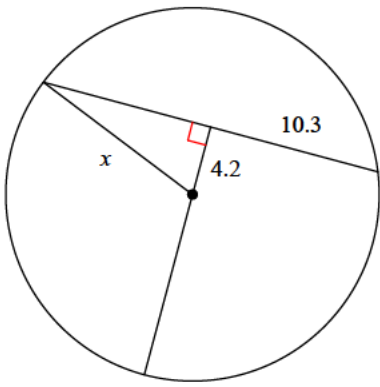
6)



- A) 28.7
- B) 19.8
- C) 24.3
- D) 24.6

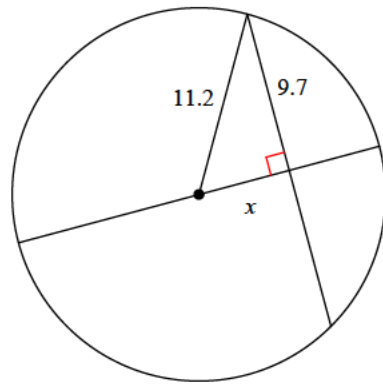


7)



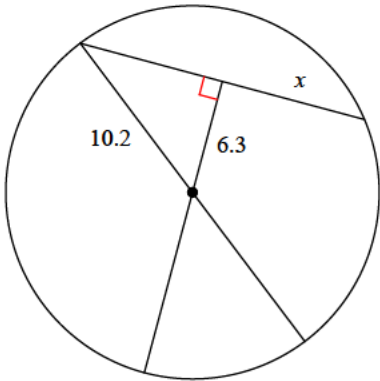
- A) 5.8 B) 11.5
C) 11.1 D) 7.7

8)



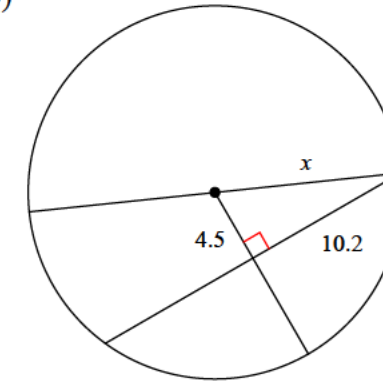
- A) 5 B) 7.9
C) 5.6 D) 7.4

9)



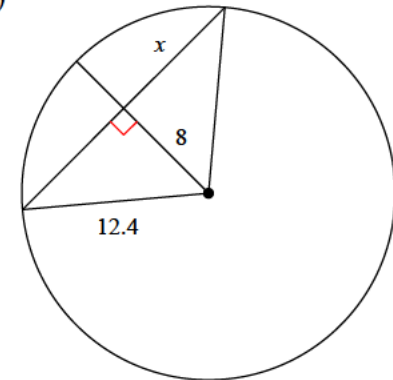
- A) 6.8 B) 8
C) 7.2 D) 4.9

10)



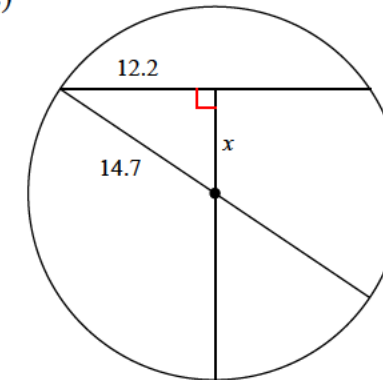
- A) 9 B) 10.7
C) 11.1 D) 8.5

11)



- A) 9.5 B) 6.8
C) 9.6 D) 11.1

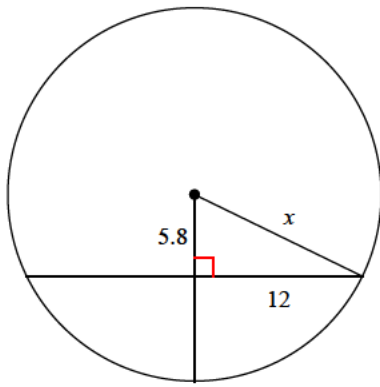
12)



- A) 9.8 B) 11.4
C) 12.1 D) 8.2

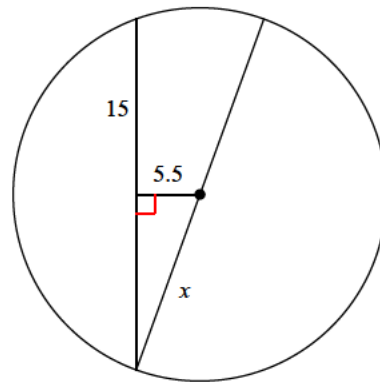


13)



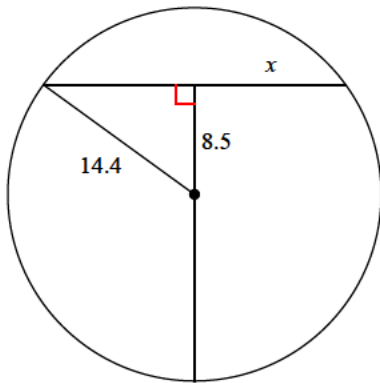
- A) 11.5 B) 11.9
C) 13.3 D) 7

14)



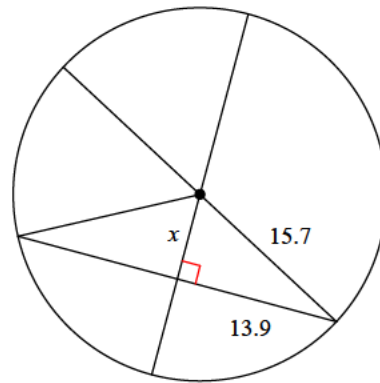
- A) 15.7 B) 19
C) 10.4 D) 16

15)



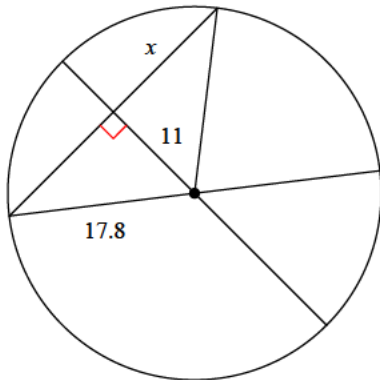
- A) 15.4 B) 11.6
C) 6.4 D) 12.7

16)



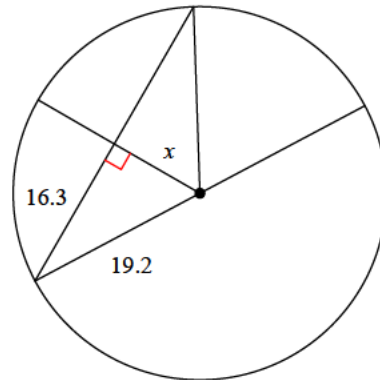
- A) 5.8 B) 7.3
C) 8.4 D) 6.9

17)



- A) 19.4 B) 8.1
C) 15.2 D) 14

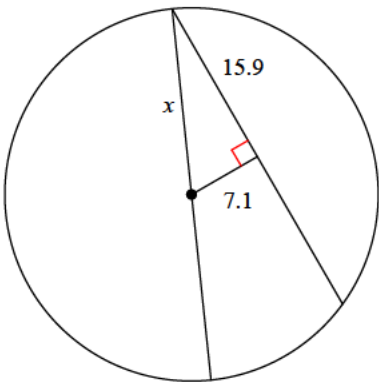
18)



- A) 10.1 B) 8.4
C) 14 D) 11.9

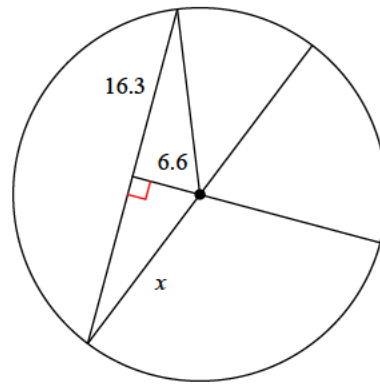


19)



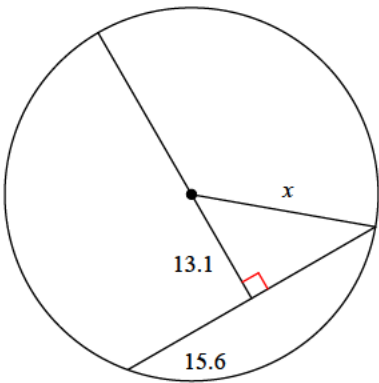
- A) 13.1 B) 24.5
C) 11.8 D) 17.4

20)



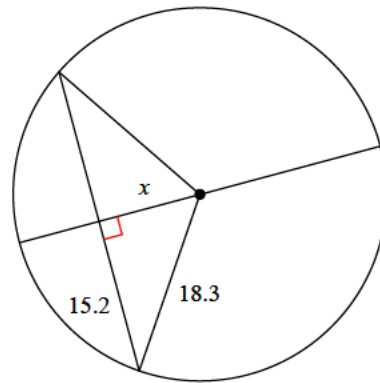
- A) 24.6 B) 22
C) 24 D) 17.6

21)



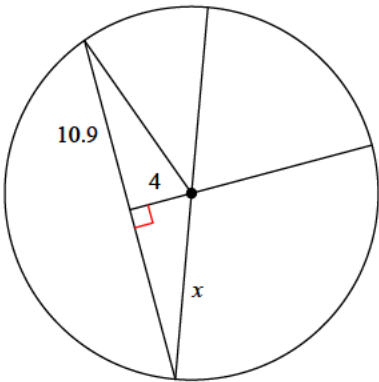
- A) 29.3 B) 20.4
C) 21 D) 17.1

22)



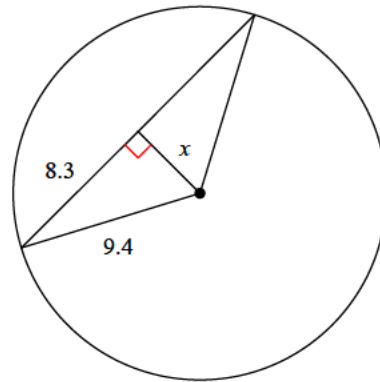
- A) 11.4 B) 7
C) 12.2 D) 10.2

23)



- A) 11.6 B) 6.7
C) 13.3 D) 8.7

24)



- A) 3.1 B) 4.4
C) 4.7 D) 3.7



Answers to Assignment (ID: 3)

- 1) A
- 5) B
- 9) B
- 13) C
- 17) D
- 21) B

- 2) A
- 6) B
- 10) C
- 14) D
- 18) A
- 22) D

- 3) C
- 7) C
- 11) A
- 15) B
- 19) D
- 23) A

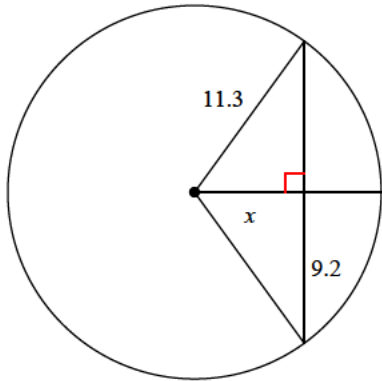
- 4) A
- 8) C
- 12) D
- 16) B
- 20) D
- 24) B



Assignment

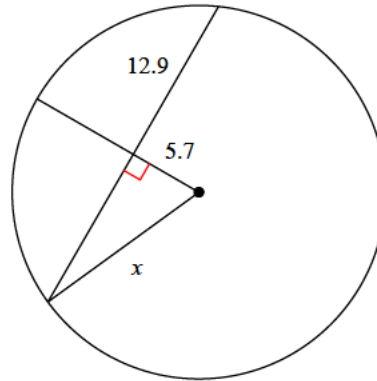
Find the length of the segment indicated. Round your answer to the nearest tenth if necessary.

1)



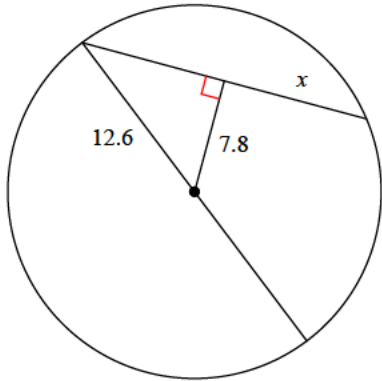
- A) 9.5
- B) 9.3
- C) 6.6
- D) 7.4

2)



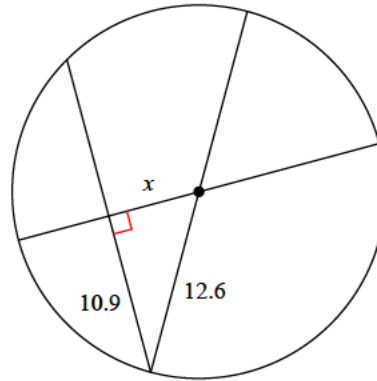
- A) 13.8
- B) 12.6
- C) 14.1
- D) 15

3)



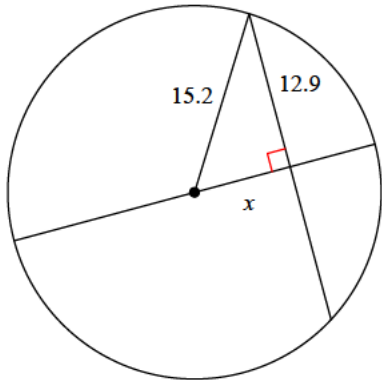
- A) 9.6
- B) 14.8
- C) 13.1
- D) 9.9

4)



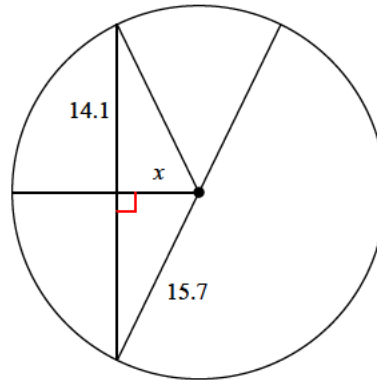
- A) 3.7
- B) 8
- C) 6.3
- D) 7.6

5)



- A) 11.4
- B) 5.6
- C) 8
- D) 6.6

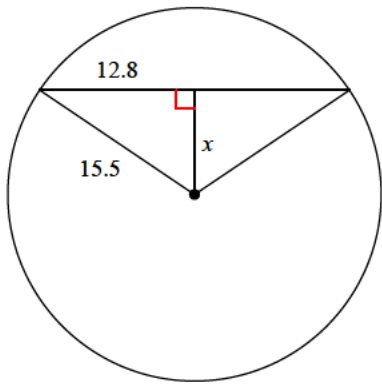
6)



- A) 6.9
- B) 7.9
- C) 4.6
- D) 8.7

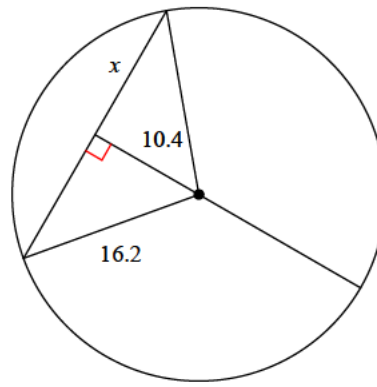


7)



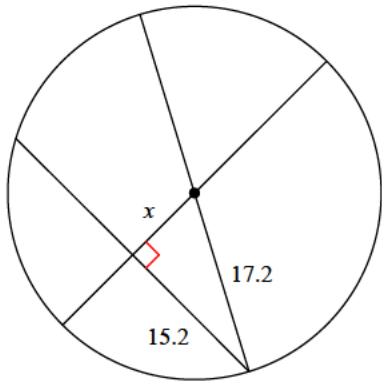
- A) 8.7 B) 5
C) 7.7 D) 13

8)



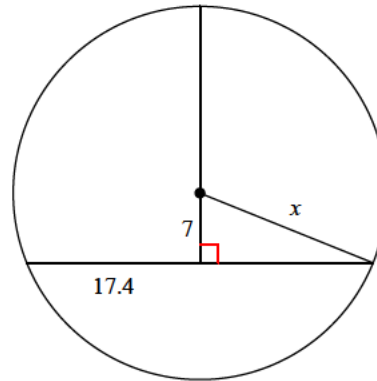
- A) 7.9 B) 12.6
C) 6.3 D) 12.4

9)



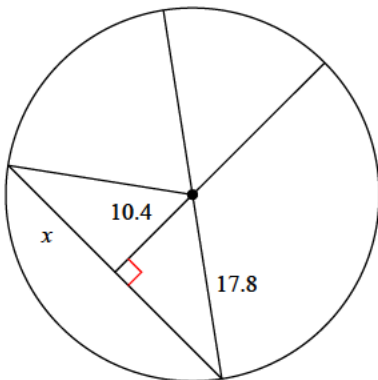
- A) 9.1 B) 8.6
C) 6.6 D) 8

10)



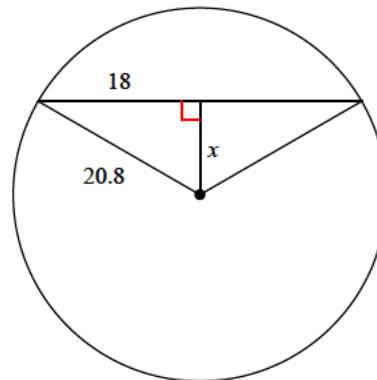
- A) 16.1 B) 18.8
C) 12.3 D) 22.8

11)



- A) 7.6 B) 21.1
C) 14.4 D) 14.6

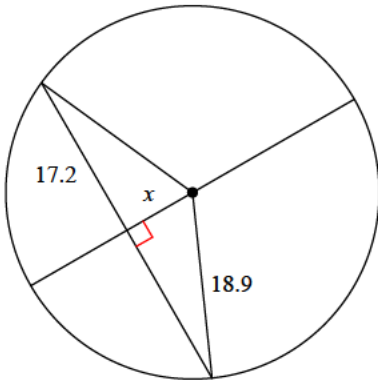
12)



- A) 11.2 B) 14.8
C) 10.4 D) 11.6

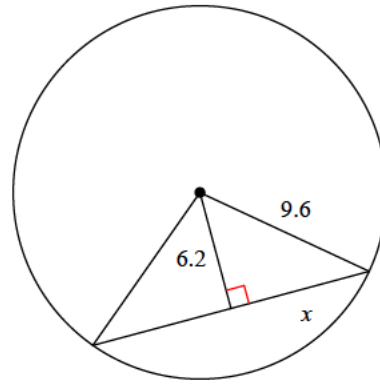


13)



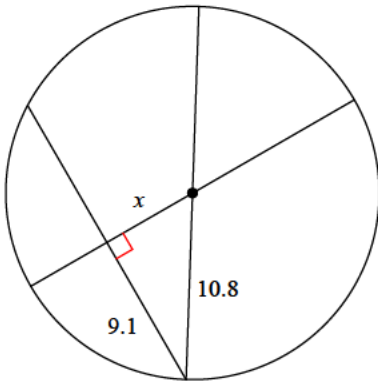
- A) 7.8 B) 10.4
C) 8.6 D) 9.3

14)



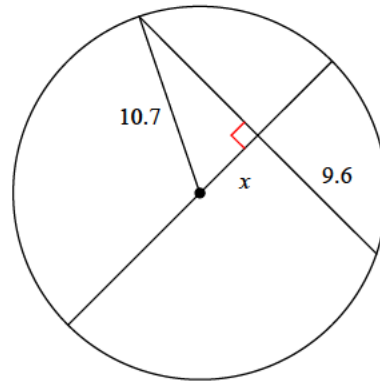
- A) 7.3 B) 6.6
C) 4.8 D) 4.5

15)



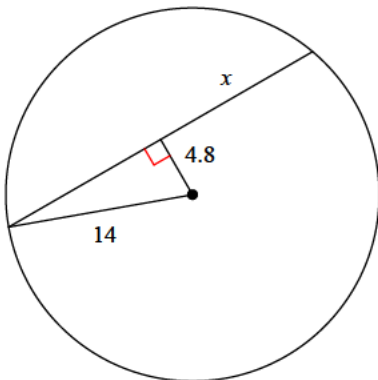
- A) 5.7 B) 5.8
C) 5.4 D) 2.9

16)



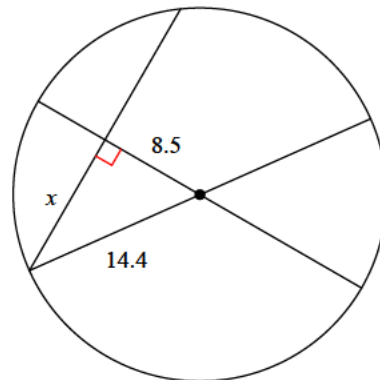
- A) 4.3 B) 6.4
C) 4.9 D) 4.7

17)



- A) 11.9 B) 13.2
C) 9.5 D) 17.7

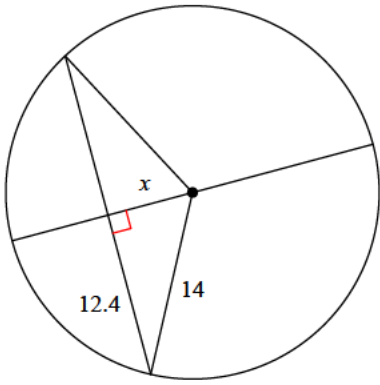
18)



- A) 11.6 B) 16.2
C) 17 D) 12.9

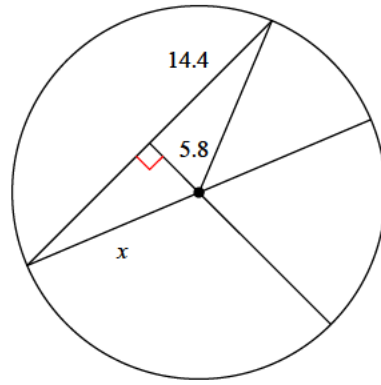


19)



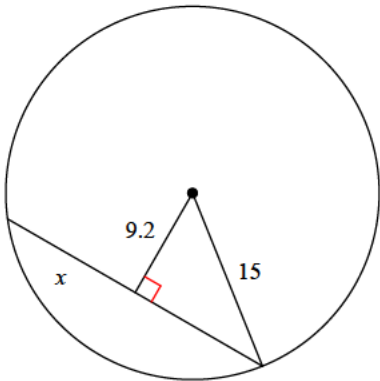
- A) 6.5 B) 8.4
C) 9.5 D) 6.2

20)



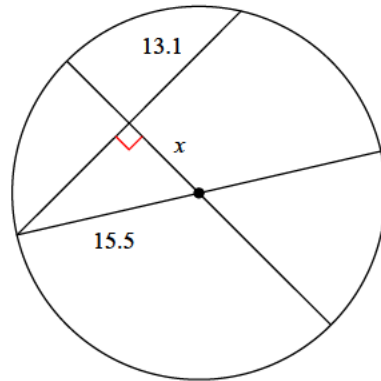
- A) 11 B) 15.5
C) 13.7 D) 10.7

21)



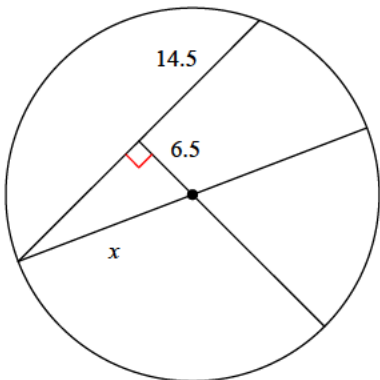
- A) 11.9 B) 15.5
C) 16.1 D) 11.8

22)



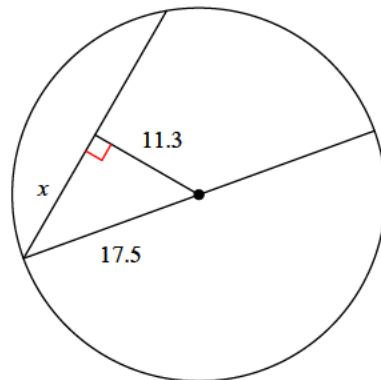
- A) 5.5 B) 6.3
C) 8.3 D) 5

23)



- A) 10.5 B) 13.5
C) 15.9 D) 9

24)



- A) 13.4 B) 8
C) 12.5 D) 18



Answers to Assignment (ID: 4)

1) C
5) C
9) D
13) A
17) B
21) D

2) C
6) A
10) B
14) A
18) A
22) C

3) D
7) A
11) C
15) B
19) A
23) C

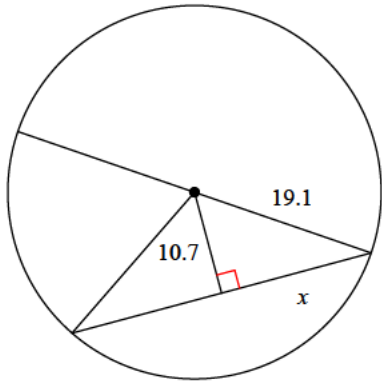
4) C
8) D
12) C
16) D
20) B
24) A



Assignment

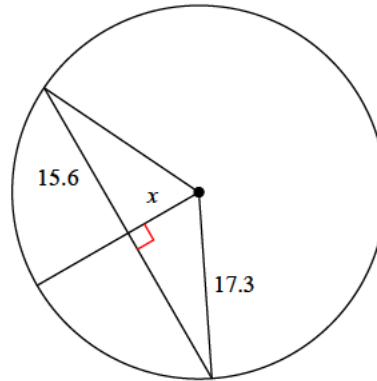
Find the length of the segment indicated. Round your answer to the nearest tenth if necessary.

1)



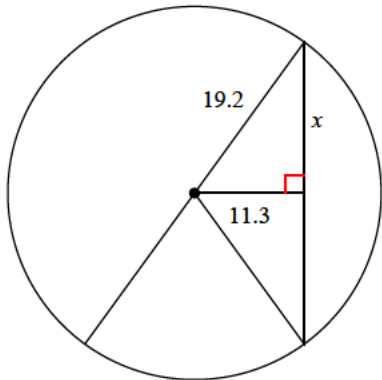
- A) 22.8 B) 15.8
C) 10.7 D) 13.3

2)



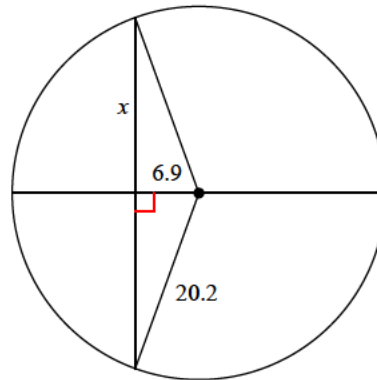
- A) 5.8 B) 4
C) 7.5 D) 9.9

3)



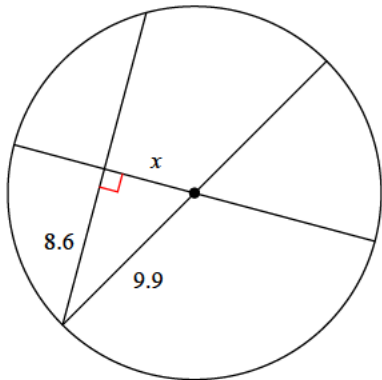
- A) 9.5 B) 20
C) 15.5 D) 9.8

4)



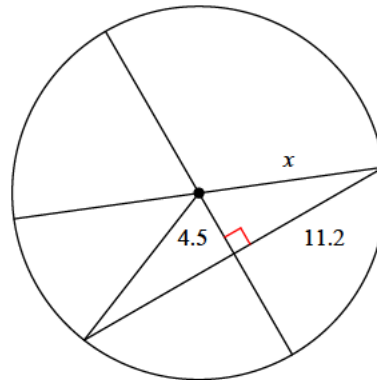
- A) 15.5 B) 26.6
C) 19 D) 11.6

5)



- A) 6.3 B) 4.8
C) 3.9 D) 4.9

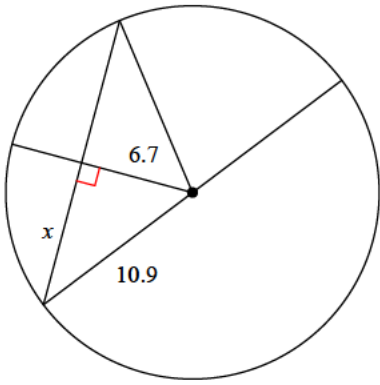
6)



- A) 12.1 B) 9.2
C) 10.5 D) 14.3

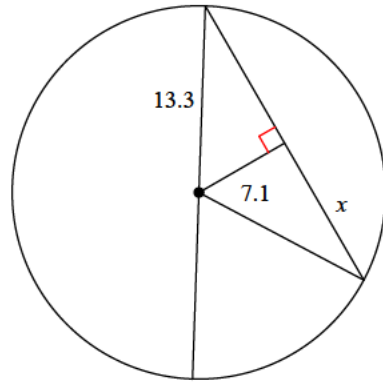


7)



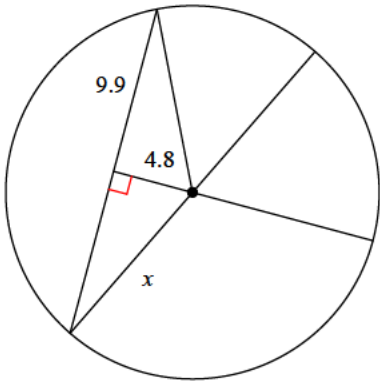
- A) 12.6 B) 9.9
C) 12.5 D) 8.6

8)



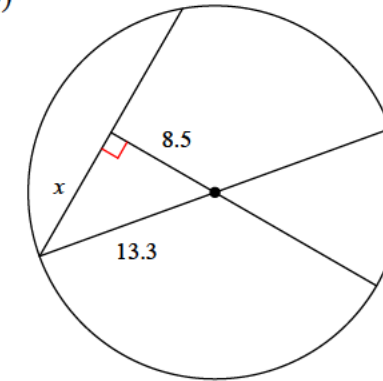
- A) 11.9 B) 14.1
C) 10.5 D) 11.2

9)



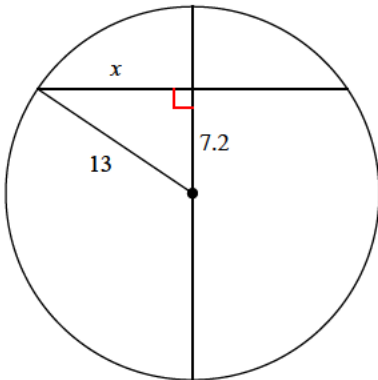
- A) 7.2 B) 11
C) 16.5 D) 6.6

10)



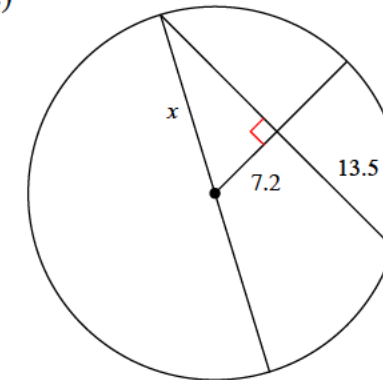
- A) 13.4 B) 10.2
C) 5.3 D) 13.8

11)



- A) 11.4 B) 10.8
C) 10.2 D) 8.7

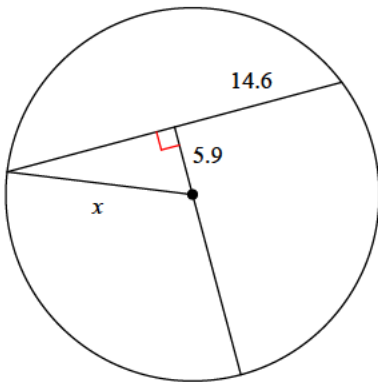
12)



- A) 8.3 B) 18.4
C) 16.4 D) 15.3

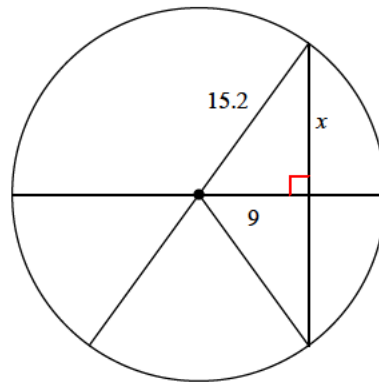


13)



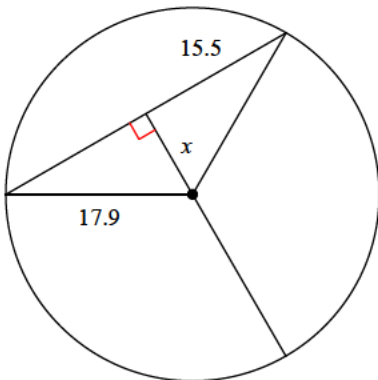
- A) 15.7 B) 20.9
C) 13.4 D) 12

14)



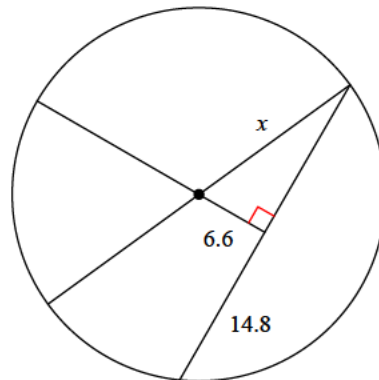
- A) 12.2 B) 13.5
C) 6.4 D) 7.1

15)



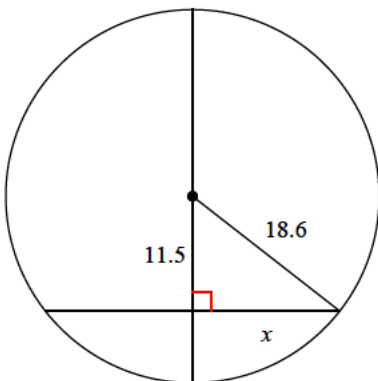
- A) 9.1 B) 11.1
C) 8.3 D) 9

16)



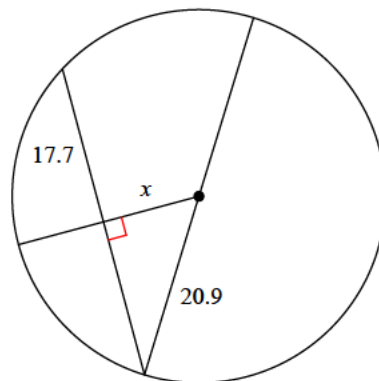
- A) 16.2 B) 19.8
C) 22.2 D) 24.2

17)



- A) 14.4 B) 12
C) 14.6 D) 13.2

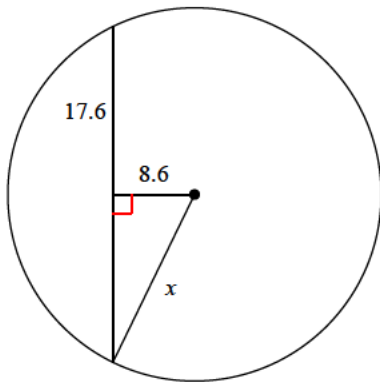
18)



- A) 8.4 B) 11.1
C) 9.7 D) 16.4

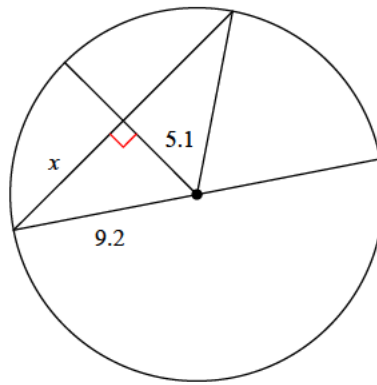


19)



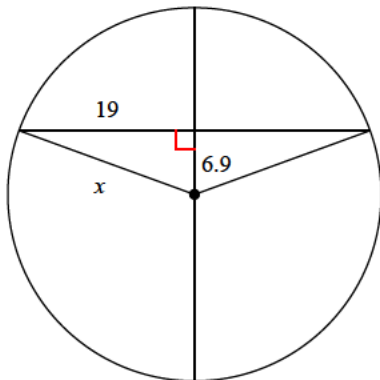
- A) 14.1 B) 19.9
C) 11.6 D) 19.6

20)



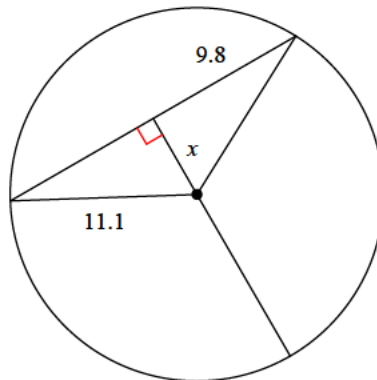
- A) 9.6 B) 5.1
C) 10.5 D) 7.7

21)



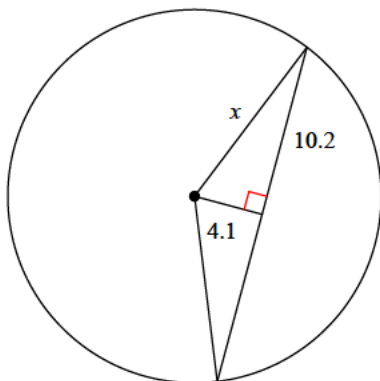
- A) 14.7 B) 10.1
C) 25.9 D) 20.2

22)



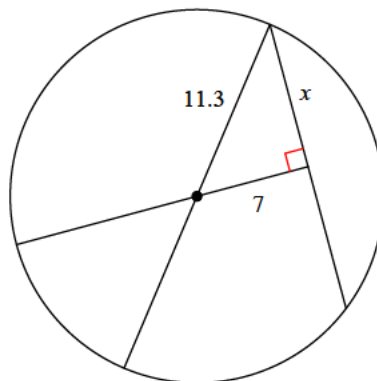
- A) 7.8 B) 2.9
C) 4.9 D) 5.2

23)



- A) 9.1 B) 11
C) 12.2 D) 8.3

24)



- A) 4.8 B) 5
C) 8.9 D) 5.3



Answers to Assignment (ID: 5)

1) B
5) D
9) B
13) A
17) C
21) D

2) C
6) A
10) B
14) A
18) B
22) D

3) C
7) D
11) B
15) D
19) D
23) B

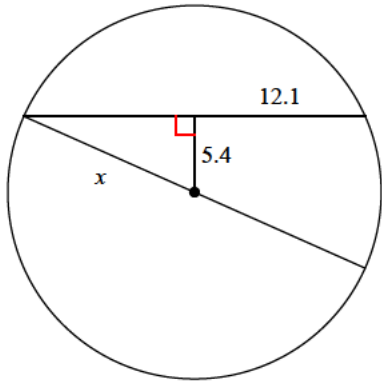
4) C
8) D
12) D
16) A
20) D
24) C



Assignment

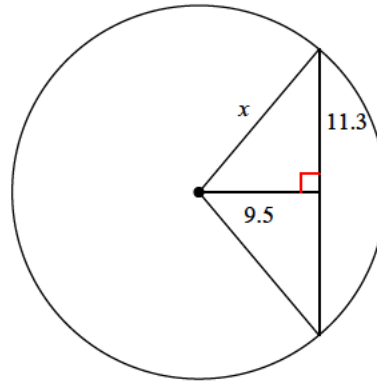
Find the length of the segment indicated. Round your answer to the nearest tenth if necessary.

1)



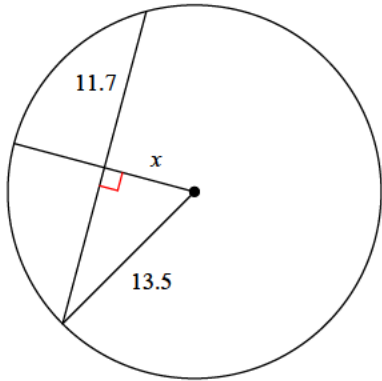
- A) 13.3
- B) 19.9
- C) 13.9
- D) 16.9

2)



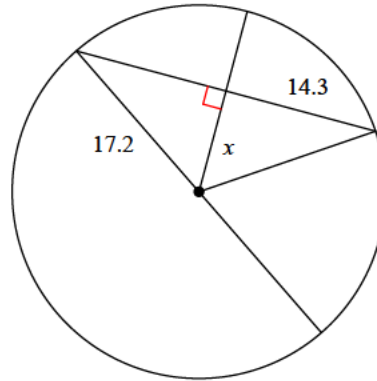
- A) 14.9
- B) 17.6
- C) 14
- D) 14.8

3)



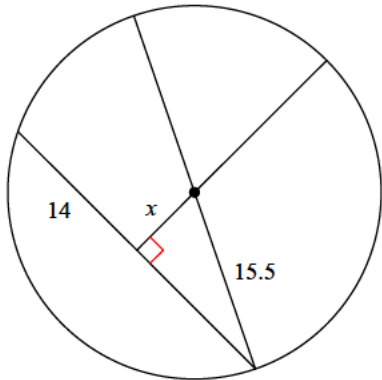
- A) 5.6
- B) 5.4
- C) 6.8
- D) 6.7

4)



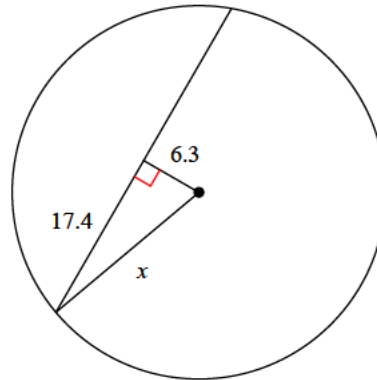
- A) 6
- B) 7
- C) 9.6
- D) 5.2

5)



- A) 6.9
- B) 6.7
- C) 4
- D) 6.3

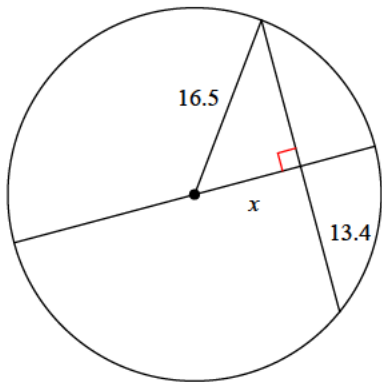
6)



- A) 17.5
- B) 19.7
- C) 18.5
- D) 18

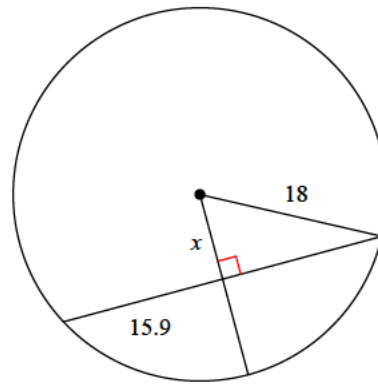


7)



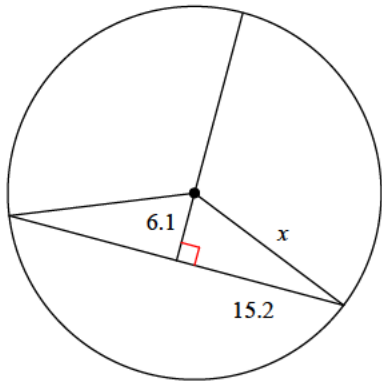
- A) 9.6 B) 11.9
C) 10.9 D) 7.6

8)



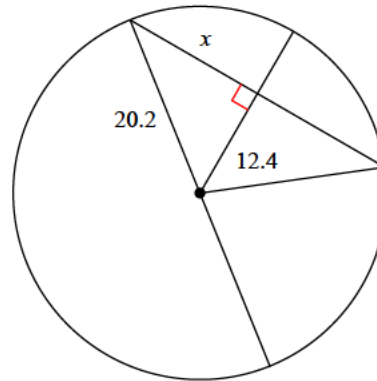
- A) 9.8 B) 8.4
C) 6.9 D) 10.3

9)



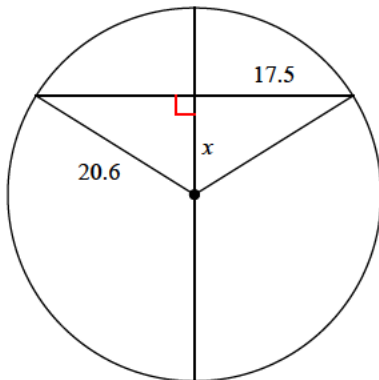
- A) 16.8 B) 22.2
C) 11 D) 16.4

10)



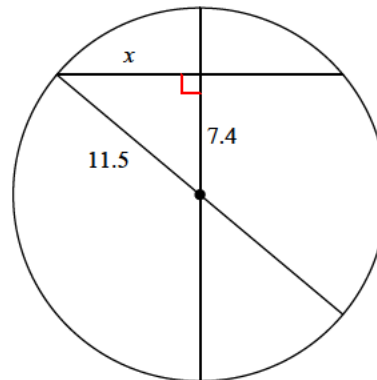
- A) 10.1 B) 15.9
C) 13.9 D) 14.1

11)



- A) 9.4 B) 12.4
C) 10.6 D) 10.9

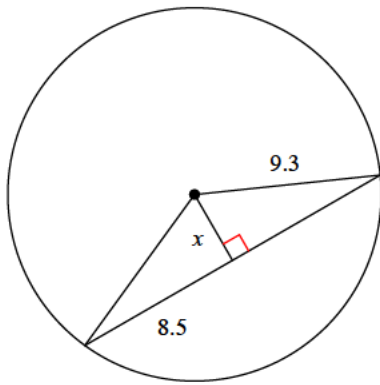
12)



- A) 10.2 B) 8.5
C) 7.1 D) 8.8

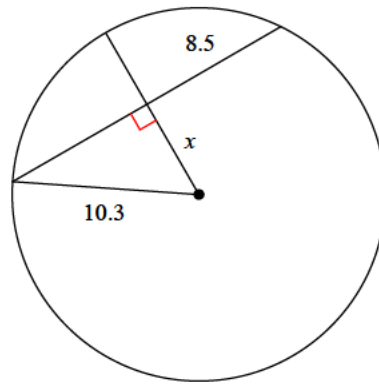


13)



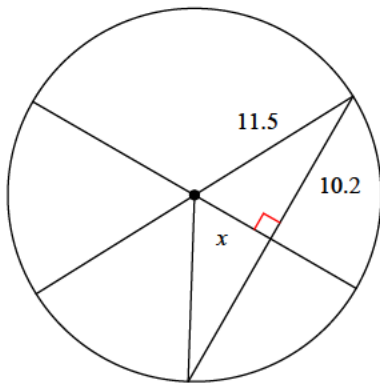
- A) 3.5 B) 3.8
C) 4.6 D) 4.3

14)



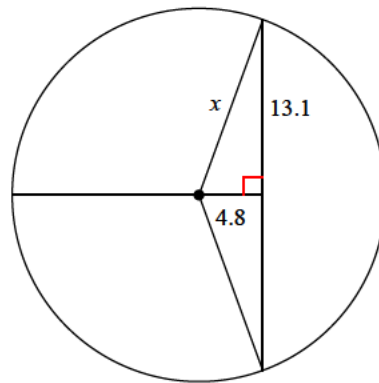
- A) 4.2 B) 5.5
C) 8.5 D) 5.8

15)



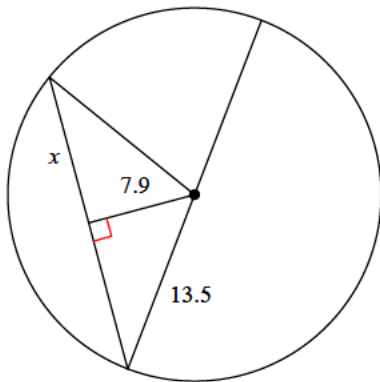
- A) 5.3 B) 4.1
C) 3.4 D) 4.8

16)



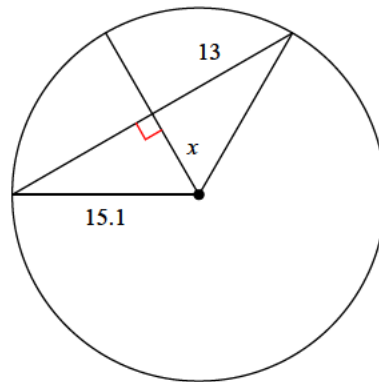
- A) 7.8 B) 18.8
C) 14 D) 17.3

17)



- A) 10.9 B) 8.7
C) 14.4 D) 12.9

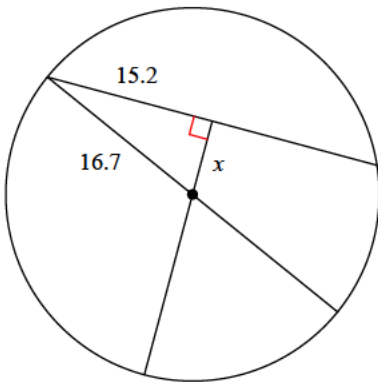
18)



- A) 11.5 B) 7.5
C) 7.7 D) 5.6

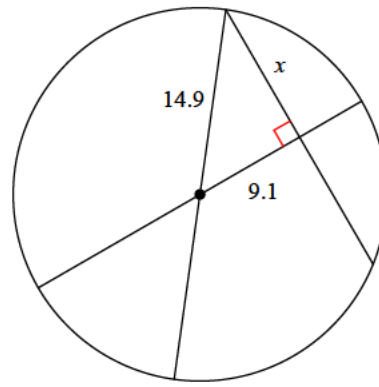


19)



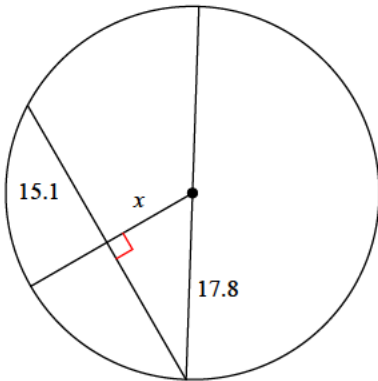
- A) 9.4 B) 6.9
C) 9.7 D) 6.4

20)



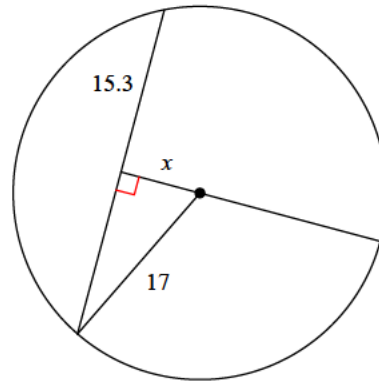
- A) 10.6 B) 9.5
C) 11.8 D) 11.7

21)



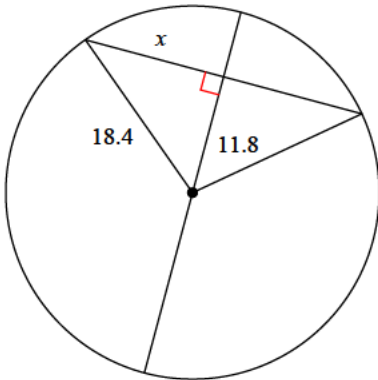
- A) 9.2 B) 6.9
C) 11.8 D) 9.4

22)



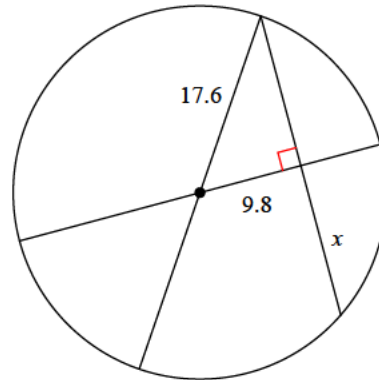
- A) 7.4 B) 10.1
C) 11 D) 10.7

23)



- A) 14.1 B) 18.4
C) 19.7 D) 19

24)



- A) 14.6 B) 10.6
C) 8.9 D) 12



Answers to Assignment (ID: 6)

1) A
5) B
9) D
13) B
17) A
21) D

2) D
6) C
10) B
14) D
18) C
22) A

3) D
7) A
11) D
15) A
19) B
23) A

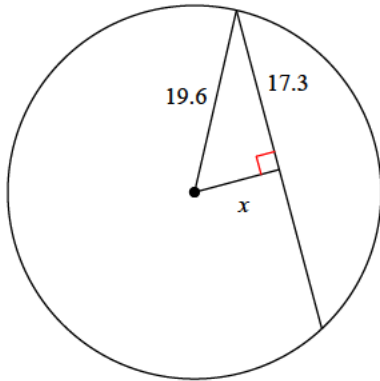
4) C
8) B
12) D
16) C
20) C
24) A



Assignment

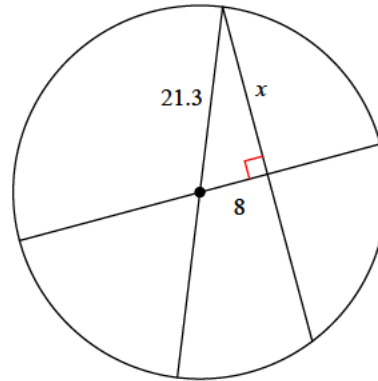
Find the length of the segment indicated. Round your answer to the nearest tenth if necessary.

1)



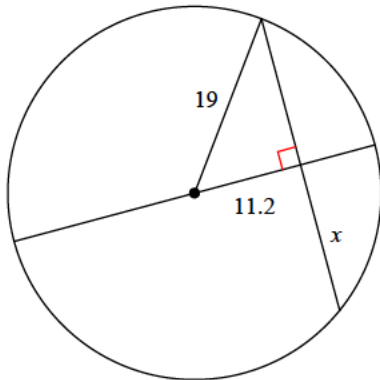
- A) 12.8
- B) 8.4
- C) 9.2
- D) 5.6

2)



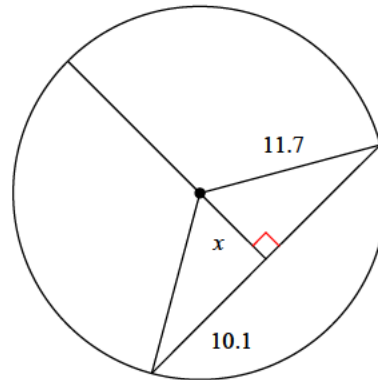
- A) 11.8
- B) 19.7
- C) 21.7
- D) 18.1

3)



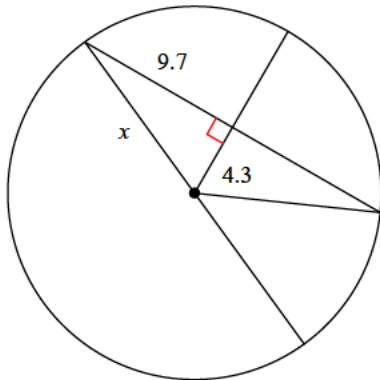
- A) 10.8
- B) 10
- C) 9.1
- D) 15.3

4)



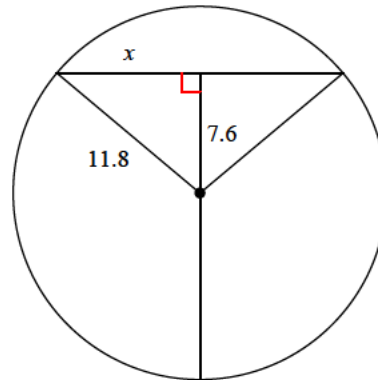
- A) 7.5
- B) 6
- C) 3.5
- D) 5.9

5)



- A) 7.3
- B) 8.2
- C) 10.6
- D) 9.4

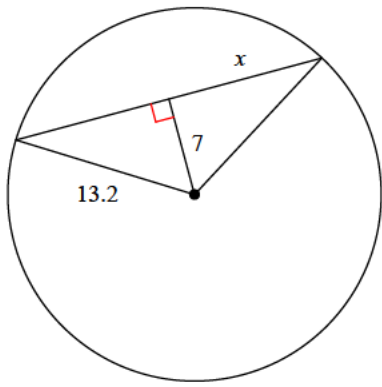
6)



- A) 9
- B) 4.8
- C) 7
- D) 5.4

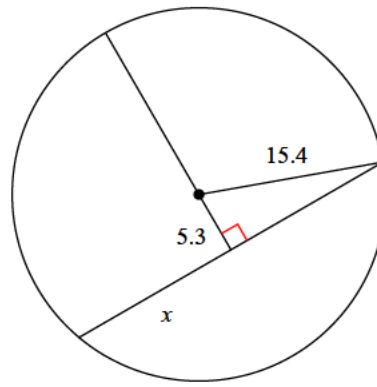


7)



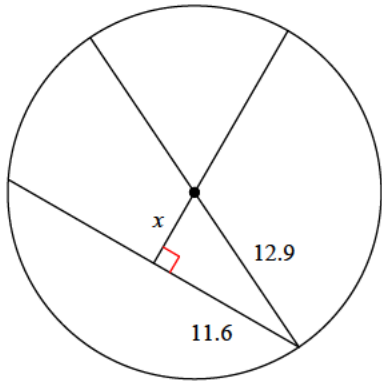
- A) 10.3 B) 11.2
C) 7.6 D) 13.4

8)



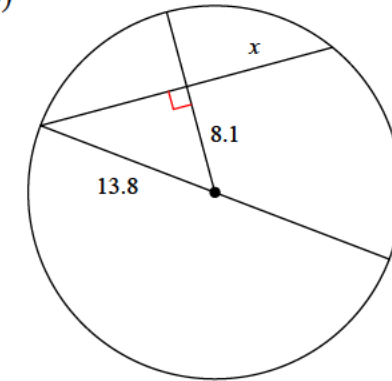
- A) 21.4 B) 19.7
C) 14.5 D) 12.8

9)



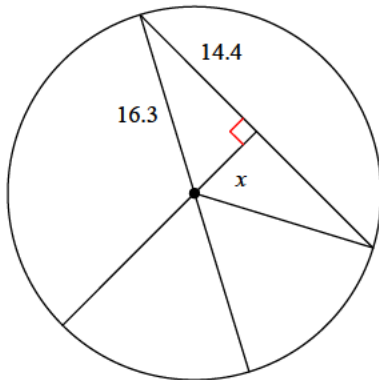
- A) 5.6 B) 6.3
C) 2.8 D) 5.5

10)



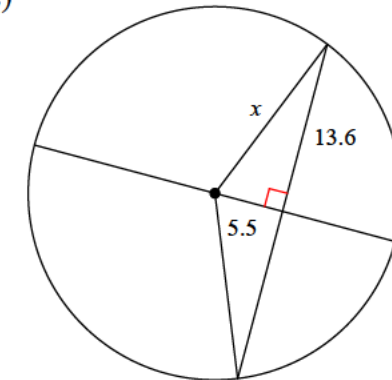
- A) 14.1 B) 15.7
C) 11.2 D) 11.6

11)



- A) 10.6 B) 7
C) 7.6 D) 9.8

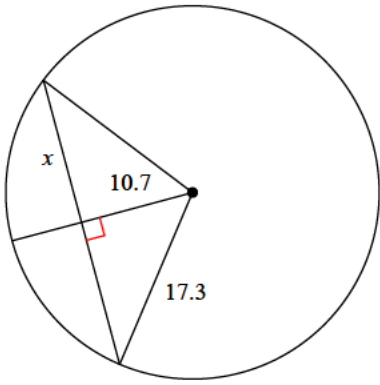
12)



- A) 14.7 B) 17
C) 15.4 D) 21

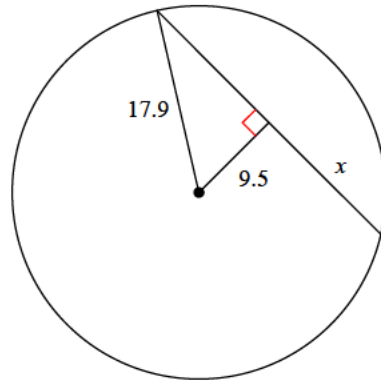


13)



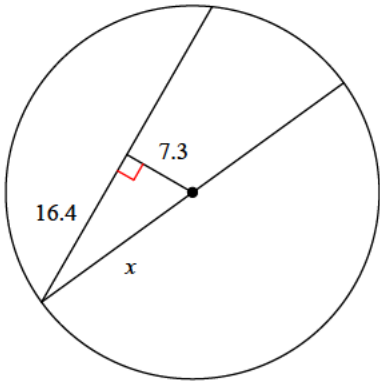
- A) 16.2 B) 13.6
C) 19.7 D) 18.9

14)



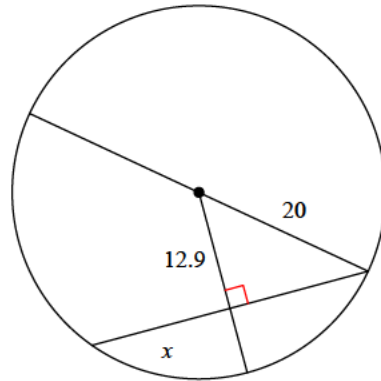
- A) 15.2 B) 20.6
C) 16.7 D) 14.5

15)



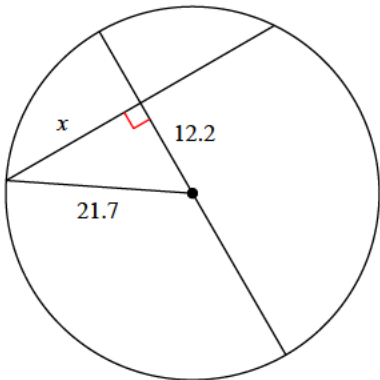
- A) 12.8 B) 14.2
C) 13.1 D) 18

16)



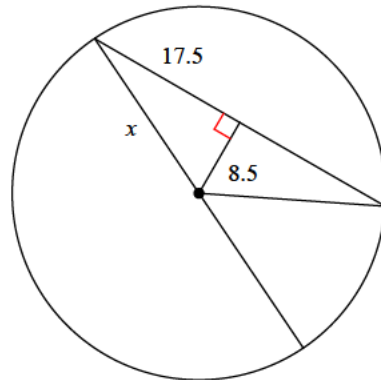
- A) 12.3 B) 15.2
C) 14.5 D) 15.3

17)



- A) 12.5 B) 23.3
C) 10 D) 17.9

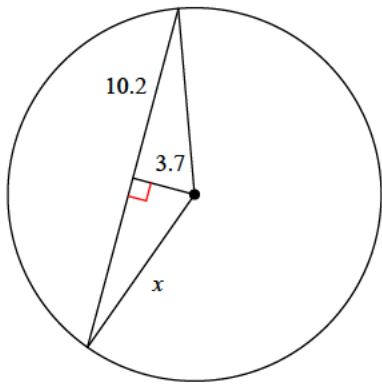
18)



- A) 19.5 B) 19
C) 12 D) 18.7

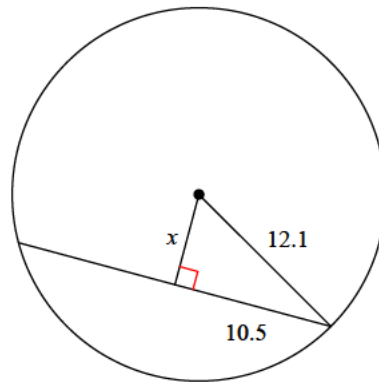


19)



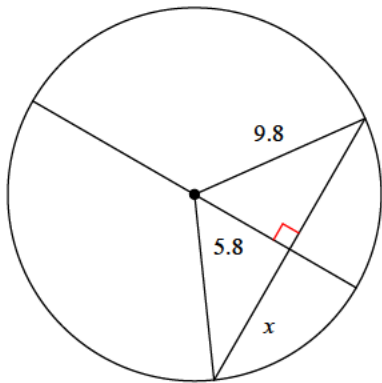
- A) 12.9 B) 8.7
C) 13.5 D) 10.9

20)



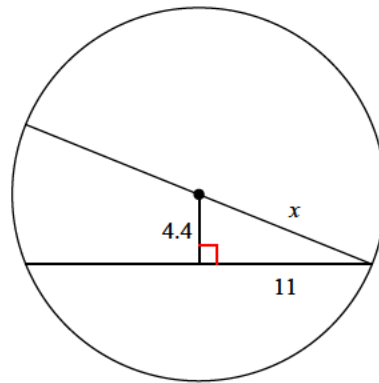
- A) 4.2 B) 4.4
C) 3.8 D) 6

21)



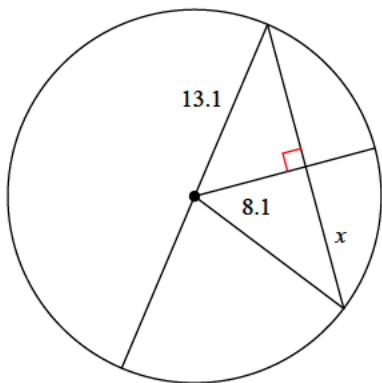
- A) 9 B) 8.9
C) 8.7 D) 7.9

22)



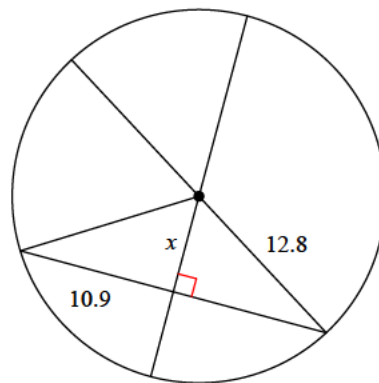
- A) 7.3 B) 11.8
C) 11.7 D) 6.7

23)



- A) 7.9 B) 14.7
C) 6.8 D) 10.3

24)



- A) 7.8 B) 6.7
C) 4.7 D) 7.4



Answers to Assignment (ID: 7)

- 1) C
- 5) C
- 9) A
- 13) B
- 17) D
- 21) D

- 2) B
- 6) A
- 10) C
- 14) A
- 18) A
- 22) B

- 3) D
- 7) B
- 11) C
- 15) D
- 19) D
- 23) D

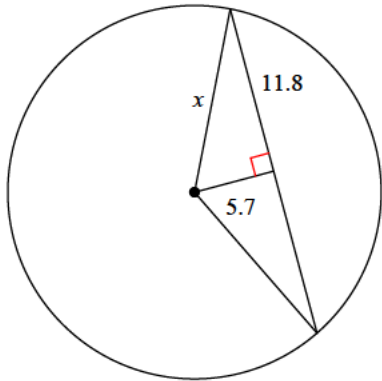
- 4) D
- 8) C
- 12) A
- 16) D
- 20) D
- 24) B



Assignment

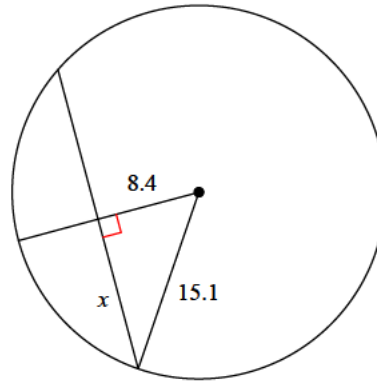
Find the length of the segment indicated. Round your answer to the nearest tenth if necessary.

1)



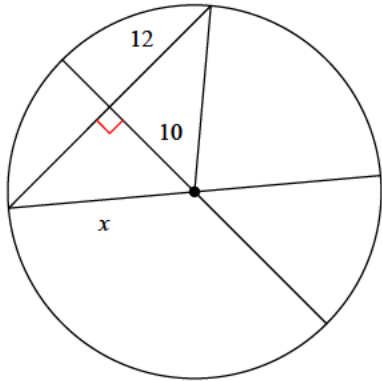
- A) 8.8
- B) 13.9
- C) 16.3
- D) 13.1

2)



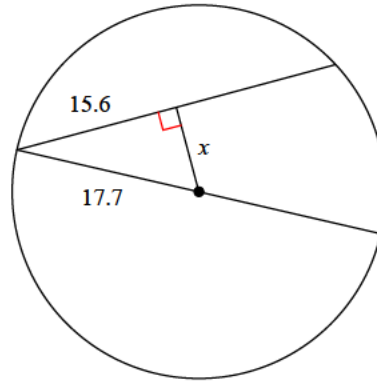
- A) 12.5
- B) 10
- C) 16.9
- D) 8.7

3)



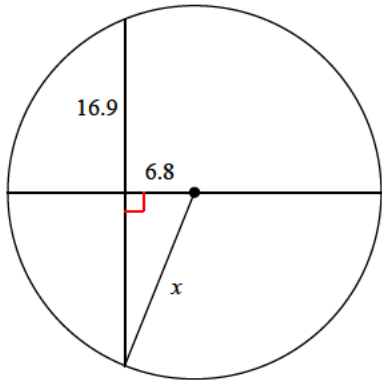
- A) 16.5
- B) 9.5
- C) 8.3
- D) 15.6

4)



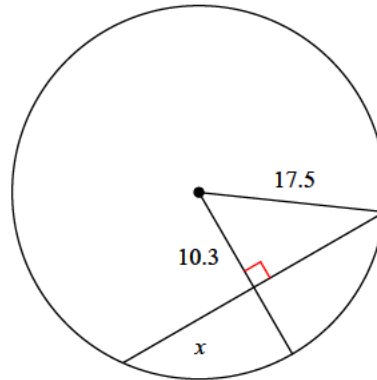
- A) 7.2
- B) 8.4
- C) 4.5
- D) 6.3

5)



- A) 15.2
- B) 12.1
- C) 19.7
- D) 18.2

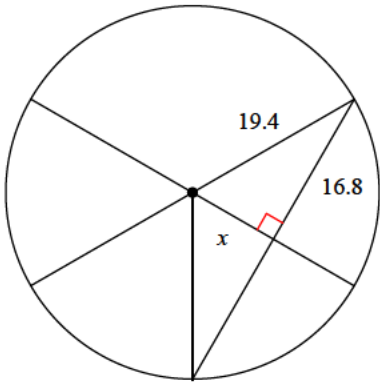
6)



- A) 13.6
- B) 15.5
- C) 9.4
- D) 14.1

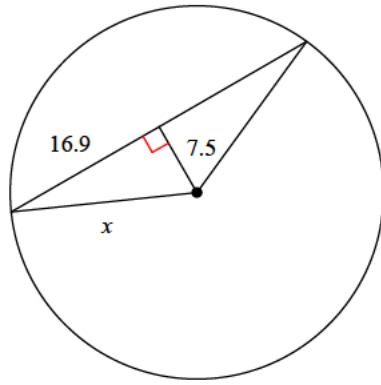


7)



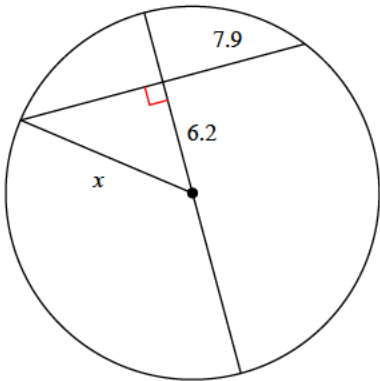
- A) 9.7 B) 13.3
C) 11.9 D) 9.5

8)



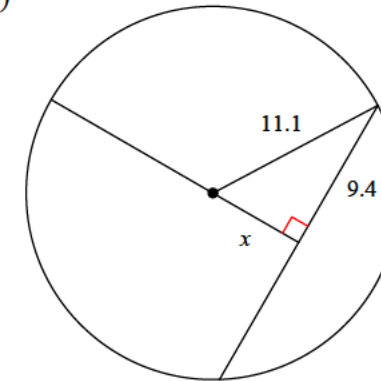
- A) 19 B) 18.5
C) 23.6 D) 12.9

9)



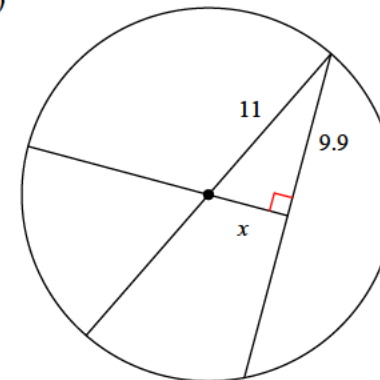
- A) 10 B) 13
C) 10.2 D) 8.5

10)



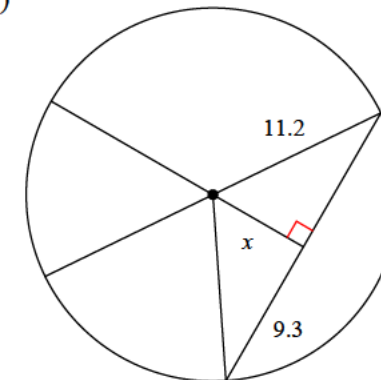
- A) 5.9 B) 6.9
C) 4.8 D) 7.7

11)



- A) 2.8 B) 6
C) 4.8 D) 3

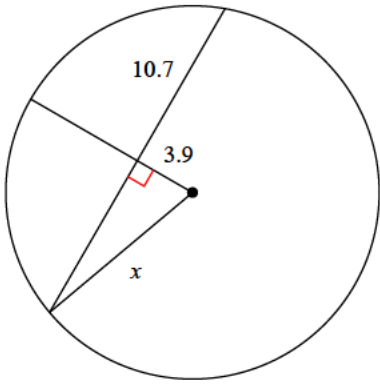
12)



- A) 3.3 B) 5.4
C) 3.2 D) 6.2

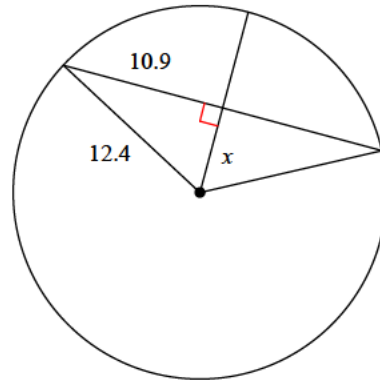


13)



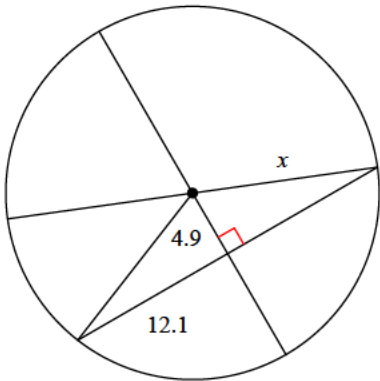
- A) 17 B) 6
C) 15.2 D) 11.4

14)



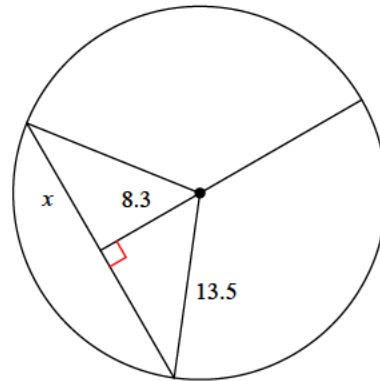
- A) 4.6 B) 8.2
C) 5.9 D) 4.3

15)



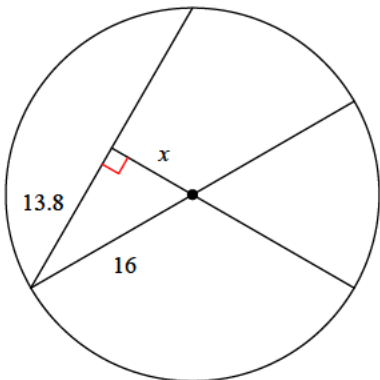
- A) 13.1 B) 12.6
C) 13.4 D) 17.7

16)



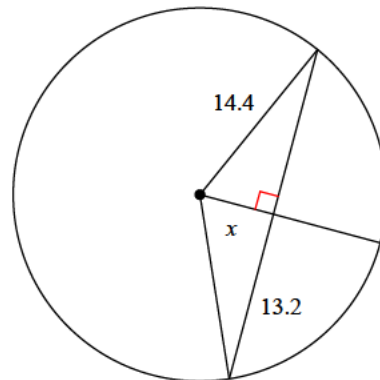
- A) 11.5 B) 10.6
C) 15.7 D) 15.9

17)



- A) 5.6 B) 8.1
C) 11.1 D) 7.6

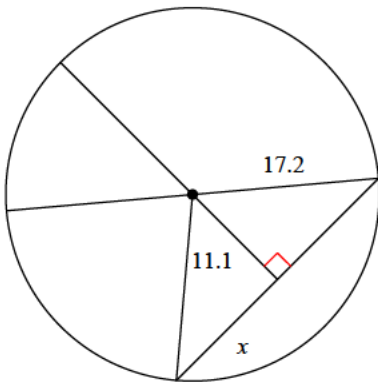
18)



- A) 5.8 B) 3.3
C) 7.4 D) 6.4

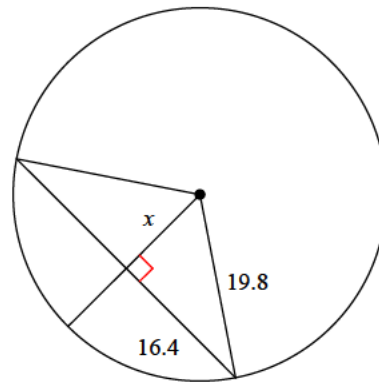


19)



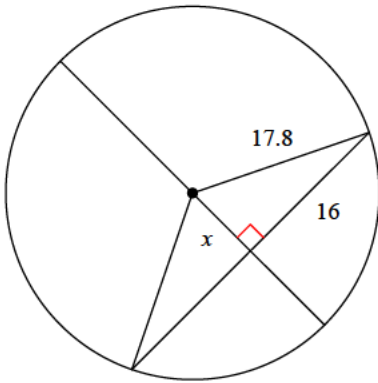
- A) 17.5 B) 13.1
C) 17.7 D) 10.6

20)



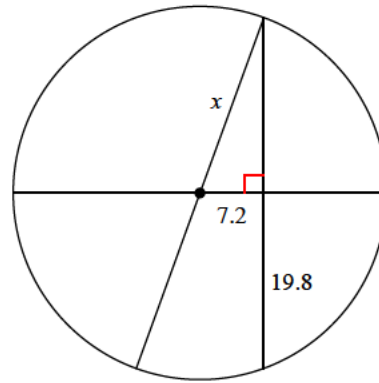
- A) 12.3 B) 14.4
C) 7.2 D) 11.1

21)



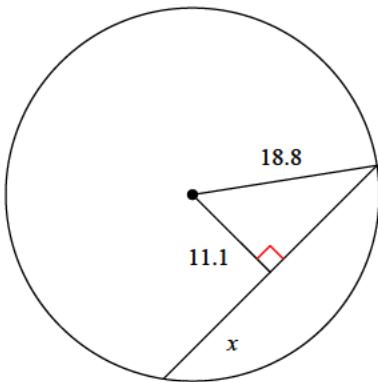
- A) 9.3 B) 7.8
C) 5.9 D) 6.3

22)



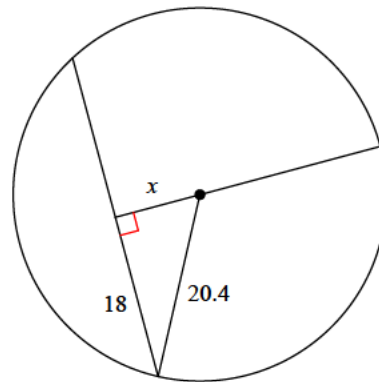
- A) 19.3 B) 21.1
C) 26.6 D) 13.1

23)



- A) 15 B) 13.4
C) 18.9 D) 15.2

24)



- A) 5.4 B) 9.6
C) 12.8 D) 8.2



Answers to Assignment (ID: 8)

1) D
5) D
9) A
13) D
17) B
21) B

2) A
6) D
10) A
14) C
18) A
22) B

3) D
7) A
11) C
15) A
19) B
23) D

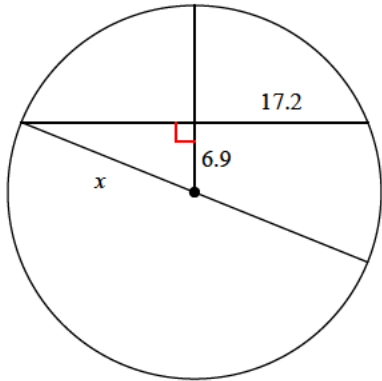
4) B
8) B
12) D
16) B
20) D
24) B



Assignment

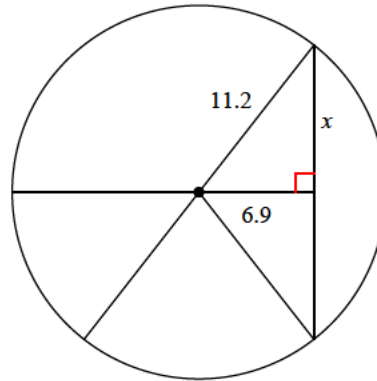
Find the length of the segment indicated. Round your answer to the nearest tenth if necessary.

1)



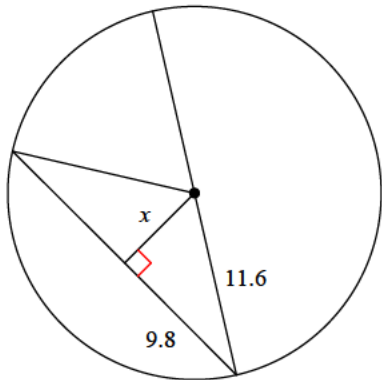
- A) 18.5
- B) 23.6
- C) 23.4
- D) 25.8

2)



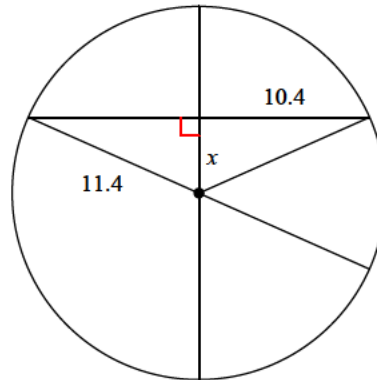
- A) 6.1
- B) 12.2
- C) 7.2
- D) 8.8

3)



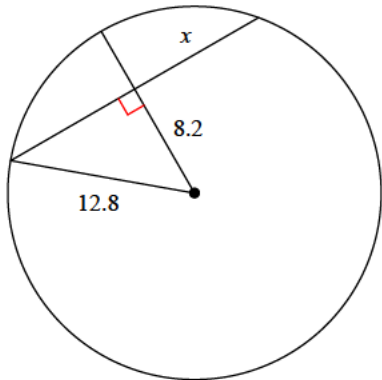
- A) 3.4
- B) 8.2
- C) 6.2
- D) 5.6

4)



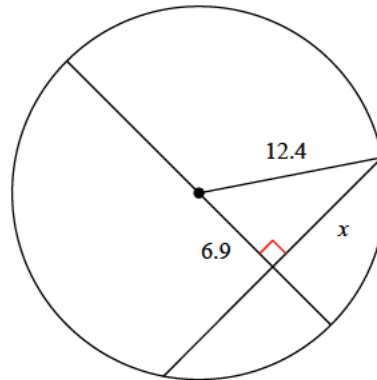
- A) 4.1
- B) 5.2
- C) 4.7
- D) 3

5)



- A) 7.1
- B) 9.8
- C) 8
- D) 8.2

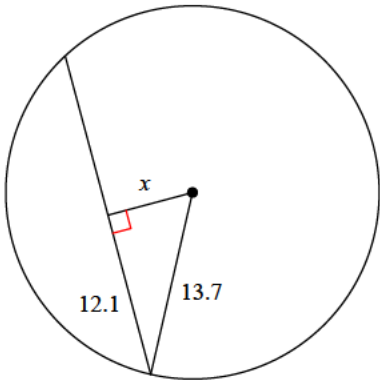
6)



- A) 5.3
- B) 13.7
- C) 10.3
- D) 15

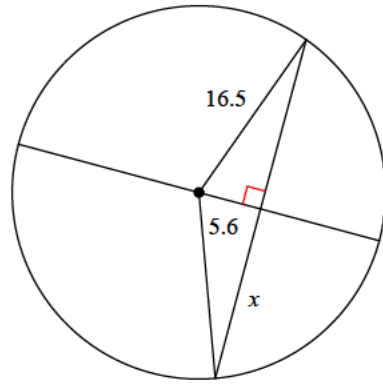


7)



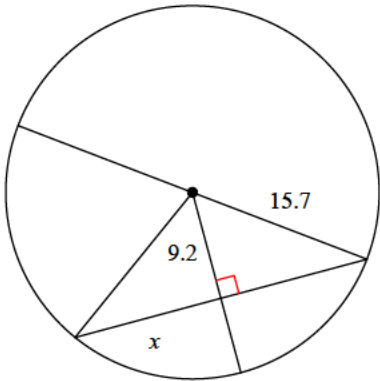
- A) 3.2 B) 9.3
C) 9.5 D) 6.4

8)



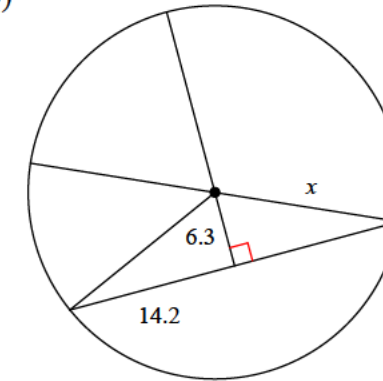
- A) 22.3 B) 15.5
C) 10.5 D) 16.7

9)



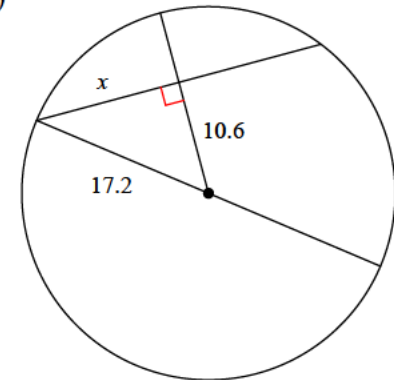
- A) 17 B) 15
C) 12.7 D) 8.3

10)



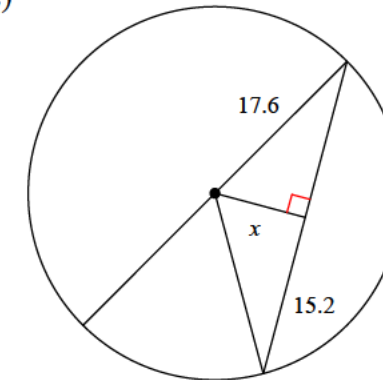
- A) 15.5 B) 16.5
C) 21.8 D) 14.9

11)



- A) 14.6 B) 9.3
C) 9.5 D) 13.5

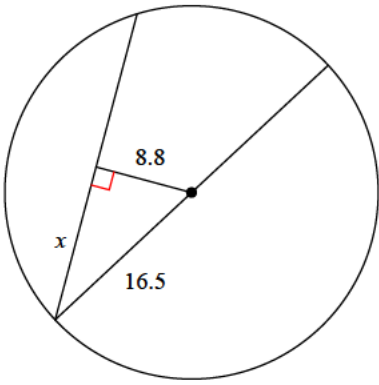
12)



- A) 8.9 B) 10.6
C) 6.3 D) 7

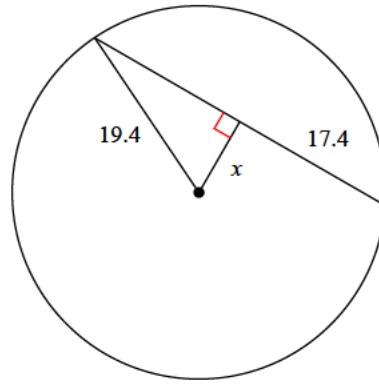


13)



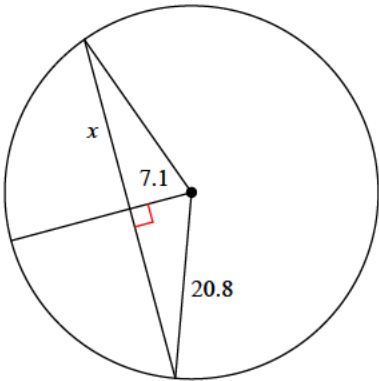
- A) 16.2 B) 15.9
C) 14 D) 12.4

14)



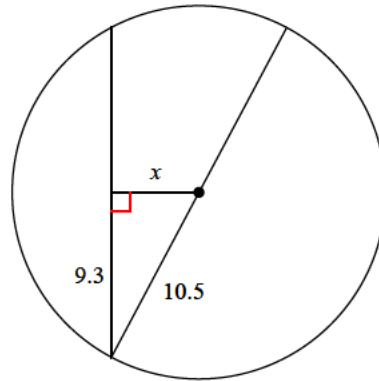
- A) 10.4 B) 9.6
C) 5.1 D) 8.6

15)



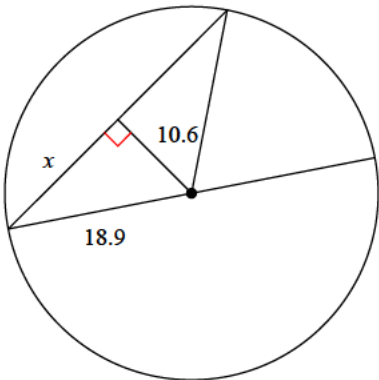
- A) 11.6 B) 15.7
C) 19.6 D) 14.6

16)



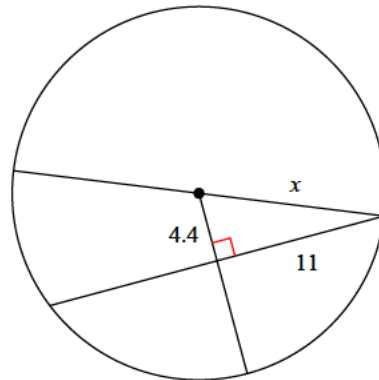
- A) 6.1 B) 4.9
C) 6.2 D) 2.7

17)



- A) 8 B) 21.9
C) 15.6 D) 12.9

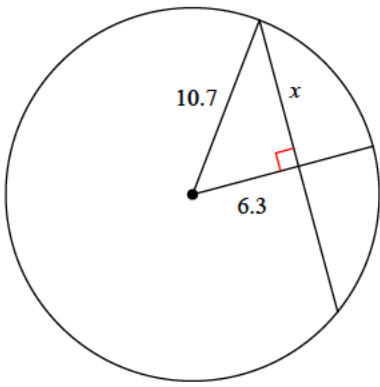
18)



- A) 16.6 B) 11.8
C) 7.6 D) 5.9

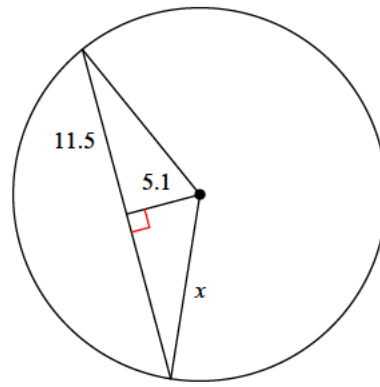


19)



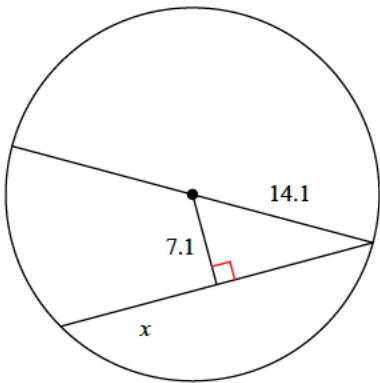
- A) 6.5 B) 8.6
C) 7.8 D) 9.3

20)



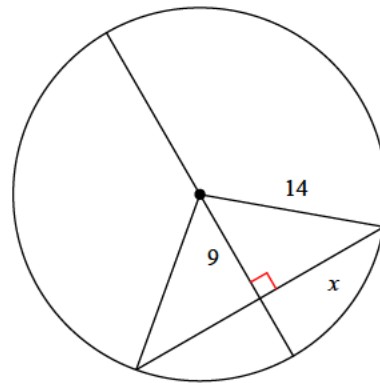
- A) 8.7 B) 12.6
C) 11 D) 18.2

21)



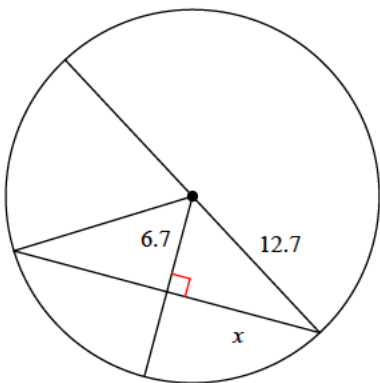
- A) 11.3 B) 6.4
C) 12.2 D) 6.2

22)



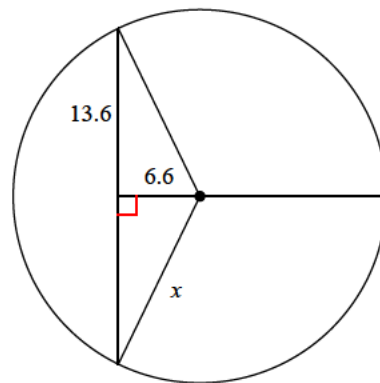
- A) 14.5 B) 10.7
C) 15.4 D) 6.4

23)



- A) 10.8 B) 14.5
C) 5.6 D) 10.9

24)



- A) 9.9 B) 20.9
C) 15.1 D) 21.3



Answers to Assignment (ID: 9)

- 1) A
- 5) B
- 9) C
- 13) C
- 17) C
- 21) C

- 2) D
- 6) C
- 10) A
- 14) D
- 18) B
- 22) B

- 3) C
- 7) D
- 11) D
- 15) C
- 19) B
- 23) A

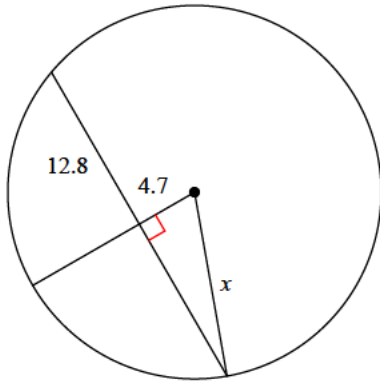
- 4) C
- 8) B
- 12) A
- 16) B
- 20) B
- 24) C



Assignment

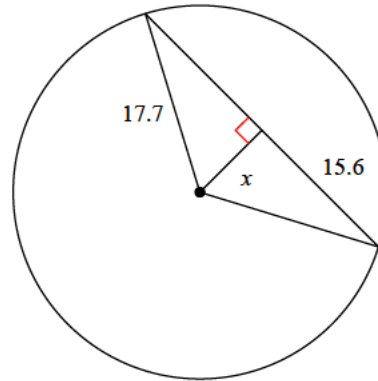
Find the length of the segment indicated. Round your answer to the nearest tenth if necessary.

1)



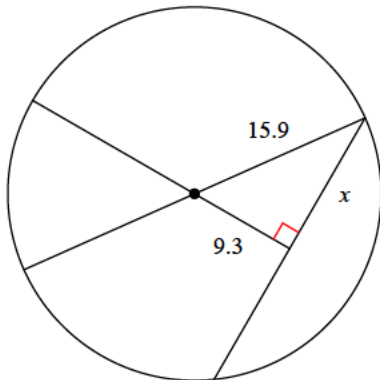
- A) 13.6
- B) 9.2
- C) 8.5
- D) 17.4

2)



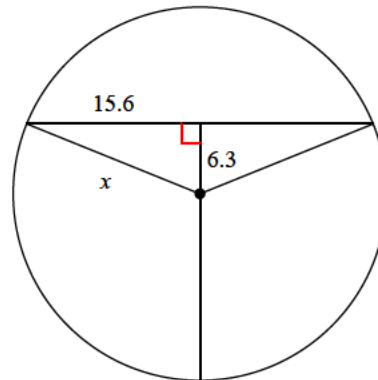
- A) 4.4
- B) 8.4
- C) 7.2
- D) 7

3)



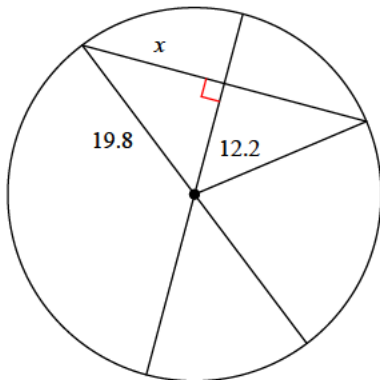
- A) 12.9
- B) 15.2
- C) 18.4
- D) 16

4)



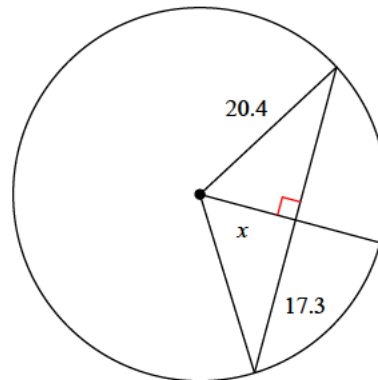
- A) 15.3
- B) 11.1
- C) 16.8
- D) 9.3

5)



- A) 17.9
- B) 21.1
- C) 18.2
- D) 15.6

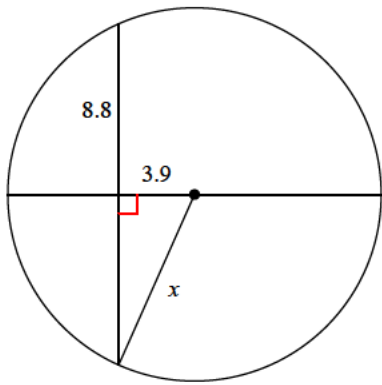
6)



- A) 5.5
- B) 10.8
- C) 9.7
- D) 16

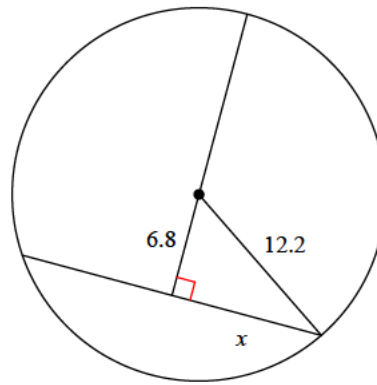


7)



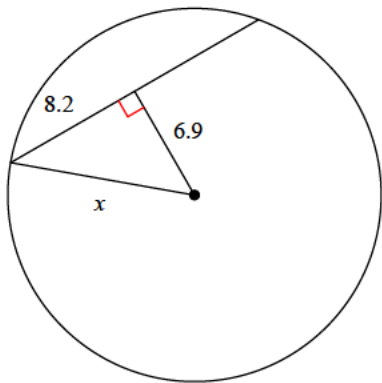
- A) 5.4 B) 9.3
C) 8.2 D) 9.6

8)



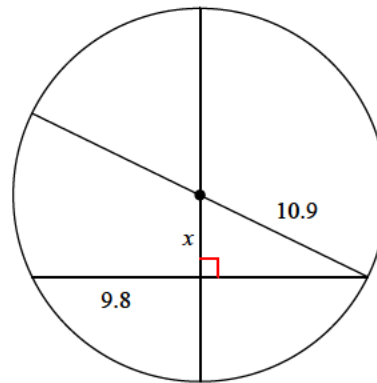
- A) 12.7 B) 10.8
C) 10.1 D) 6.8

9)



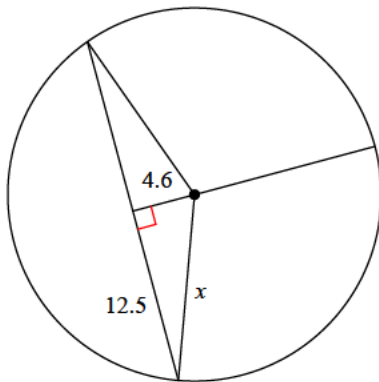
- A) 10.7 B) 15.1
C) 5.4 D) 7.9

10)



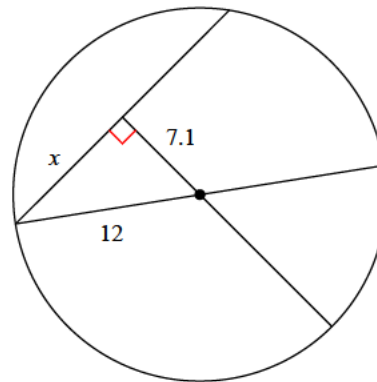
- A) 6.9 B) 3.1
C) 4.8 D) 3.3

11)



- A) 13.3 B) 20
C) 17.5 D) 17.1

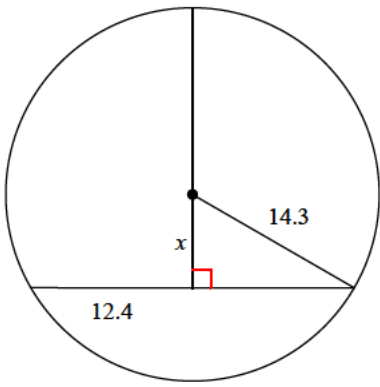
12)



- A) 6.4 B) 9.7
C) 5.2 D) 6.3

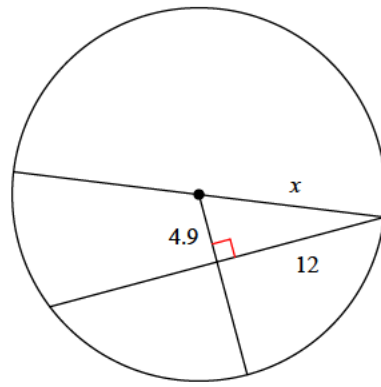


13)



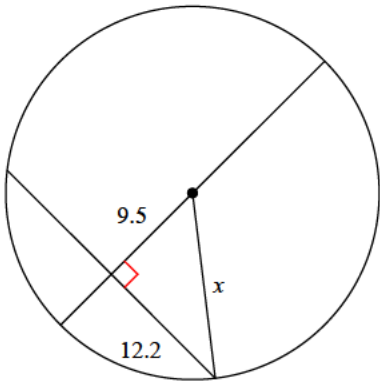
- A) 6.9 B) 7.1
C) 6 D) 8.2

14)



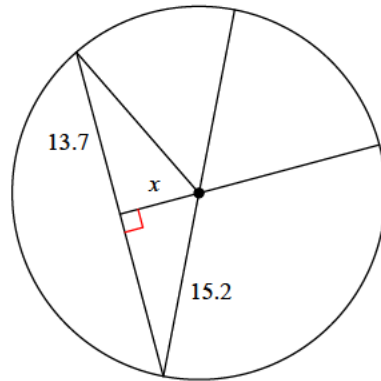
- A) 15.4 B) 17
C) 11 D) 13

15)



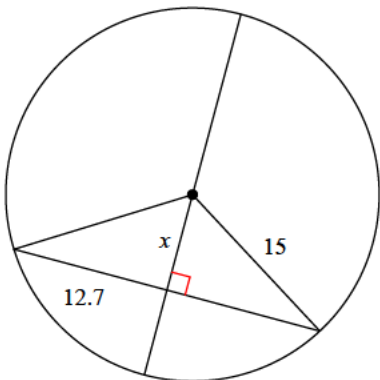
- A) 21.2 B) 22.6
C) 9.2 D) 15.5

16)



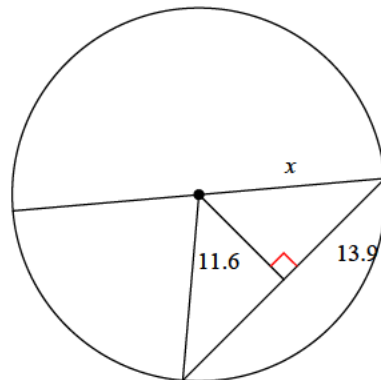
- A) 6.6 B) 9.8
C) 8.6 D) 4.4

17)



- A) 5.6 B) 8
C) 7.9 D) 6.5

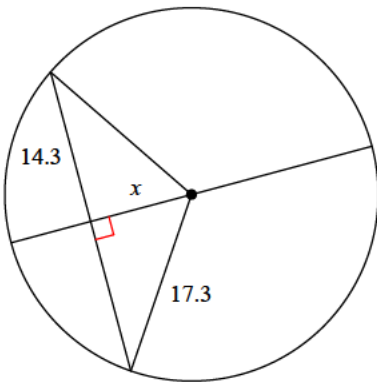
18)



- A) 18.5 B) 16.3
C) 18.1 D) 21.3

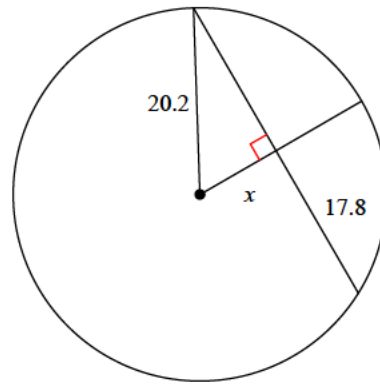


19)



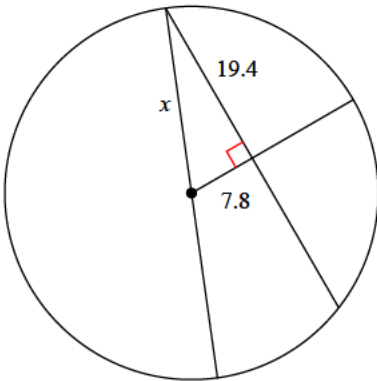
- A) 4.9 B) 13.6
C) 9.7 D) 12

20)



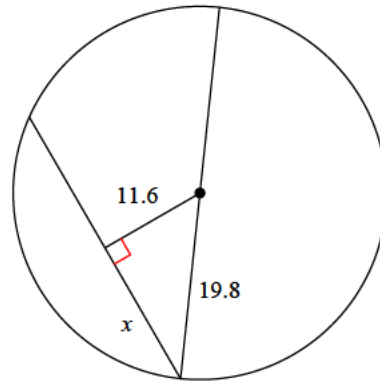
- A) 12.1 B) 9.5
C) 4.8 D) 11.3

21)



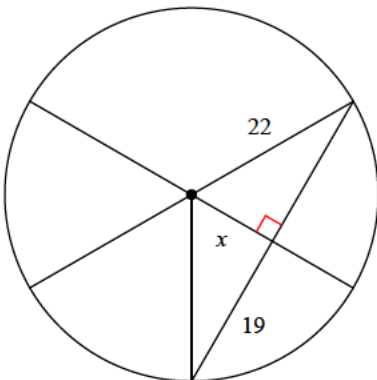
- A) 20.9 B) 27.6
C) 11.8 D) 26.3

22)



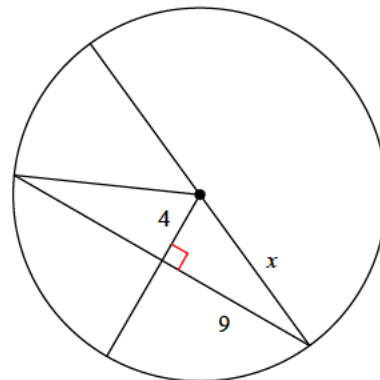
- A) 14.6 B) 9.1
C) 8.4 D) 16

23)



- A) 11.1 B) 16.4
C) 7.4 D) 15.7

24)



- A) 9.8 B) 6.2
C) 10 D) 5.2



Answers to Assignment (ID: 10)

- | | | | |
|-------|-------|-------|-------|
| 1) A | 2) B | 3) A | 4) C |
| 5) D | 6) B | 7) D | 8) C |
| 9) A | 10) C | 11) A | 12) B |
| 13) B | 14) D | 15) D | 16) A |
| 17) B | 18) C | 19) C | 20) B |
| 21) A | 22) D | 23) A | 24) A |

