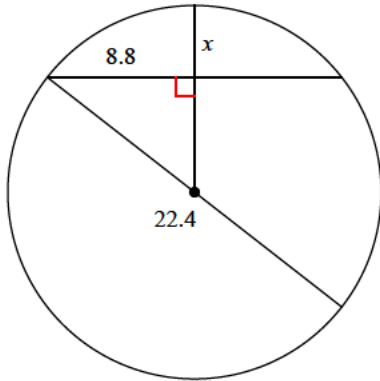


Assignment

Date _____ Period _____

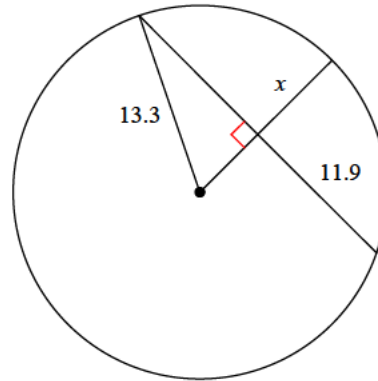
Find the length of the segment indicated. Round your answer to the nearest tenth if necessary.

1)



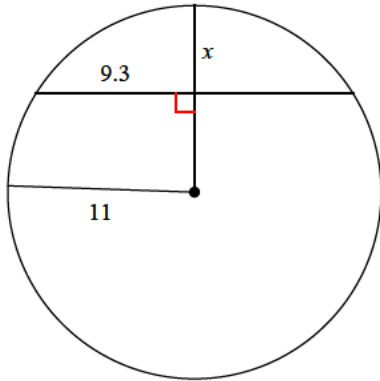
- A) 5
- B) 4.3
- C) 4.4
- D) 3.1

2)



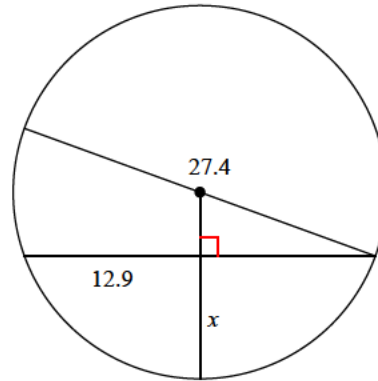
- A) 10.4
- B) 7.4
- C) 6.6
- D) 7

3)



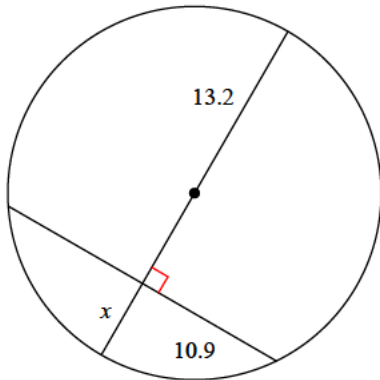
- A) 6.8
- B) 5.1
- C) 3.9
- D) 3.4

4)



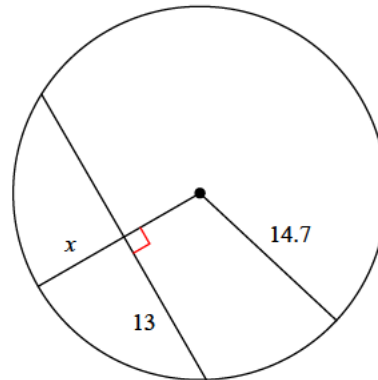
- A) 9.8
- B) 9.1
- C) 8.7
- D) 12.7

5)



- A) 3.2
- B) 6.4
- C) 5.8
- D) 7.3

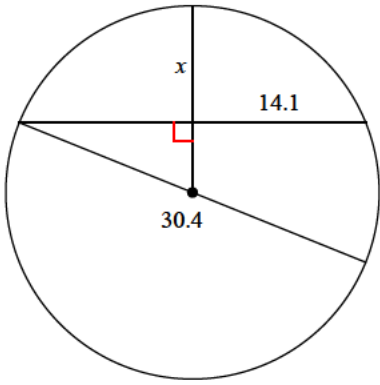
6)



- A) 8.4
- B) 4.6
- C) 7.8
- D) 6.6

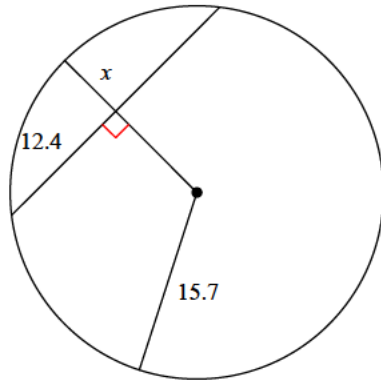


7)



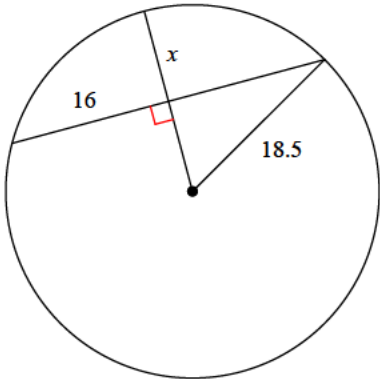
- A) 9.5 B) 12.2
C) 6 D) 9.4

8)



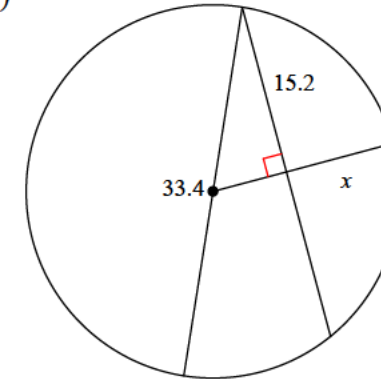
- A) 5.2 B) 6.8
C) 6.1 D) 3.1

9)



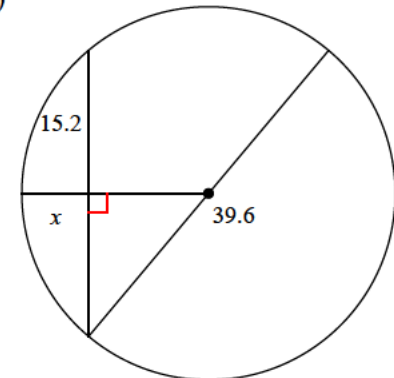
- A) 6 B) 9.2
C) 11.9 D) 11.8

10)



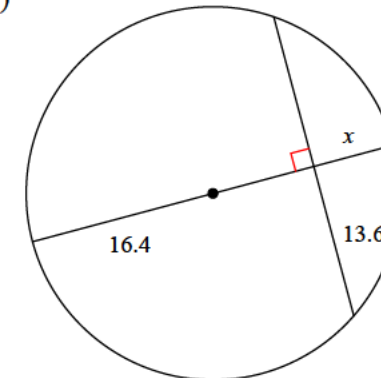
- A) 7 B) 10.9
C) 12.2 D) 9.8

11)



- A) 4.2 B) 7.1
C) 5.5 D) 7.7

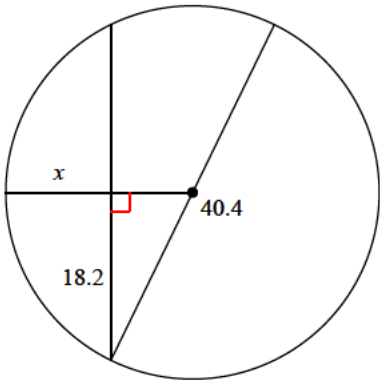
12)



- A) 5.9 B) 5.7
C) 7.9 D) 7.2

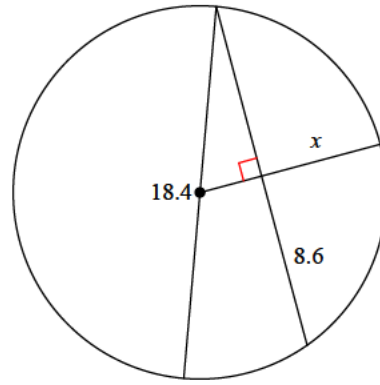


13)



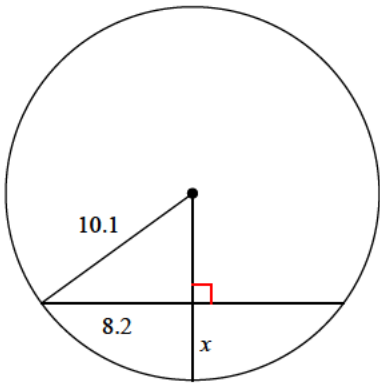
- A) 15.2 B) 8.6
C) 9 D) 11.4

14)



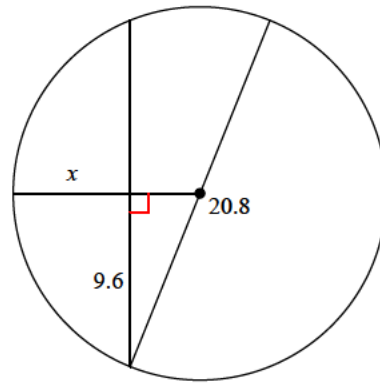
- A) 3.2 B) 5.1
C) 5.4 D) 5.9

15)



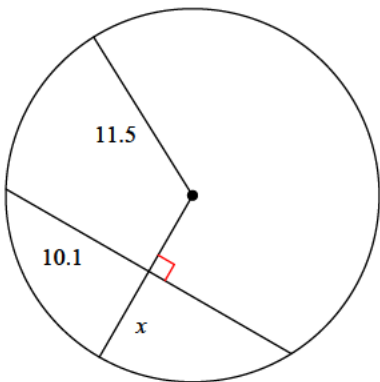
- A) 4.9 B) 4.1
C) 3.2 D) 4.2

16)



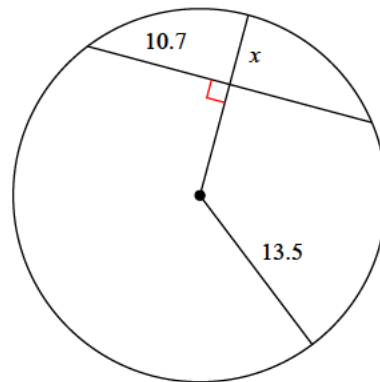
- A) 8.7 B) 5.8
C) 6.4 D) 5.9

17)



- A) 6 B) 3
C) 8.6 D) 8.9

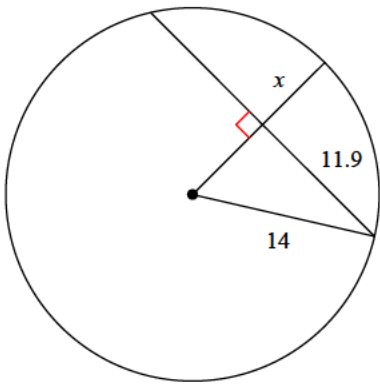
18)



- A) 6 B) 4.4
C) 5.3 D) 7.8

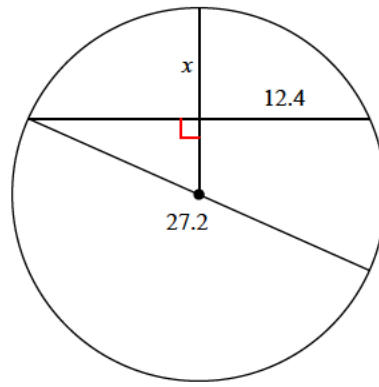


19)



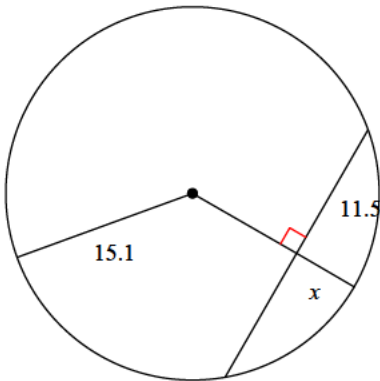
- A) 9.7 B) 4.7
C) 6.6 D) 9.1

20)



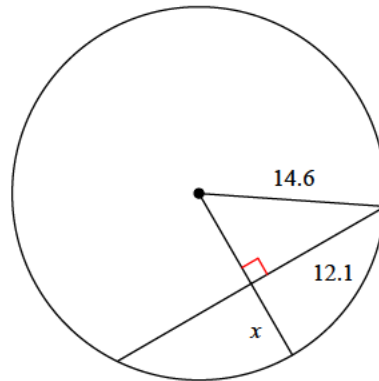
- A) 9.5 B) 10.6
C) 8 D) 6.5

21)



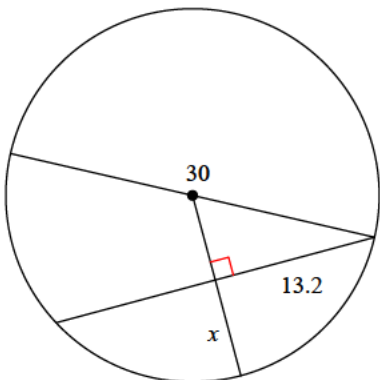
- A) 5.3 B) 6.5
C) 6.7 D) 7.3

22)



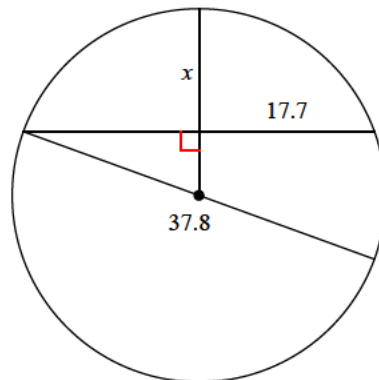
- A) 3.4 B) 6.4
C) 3.2 D) 7.1

23)



- A) 8.1 B) 4.6
C) 11.9 D) 7.9

24)



- A) 9 B) 12.3
C) 8.8 D) 14.1



Answers to Assignment (ID: 1)

1) B
5) C
9) B
13) D
17) A
21) A

2) B
6) C
10) D
14) D
18) C
22) B

3) B
7) A
11) B
15) D
19) C
23) D

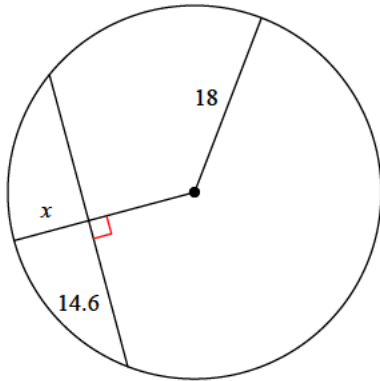
4) B
8) C
12) D
16) C
20) C
24) B



Assignment

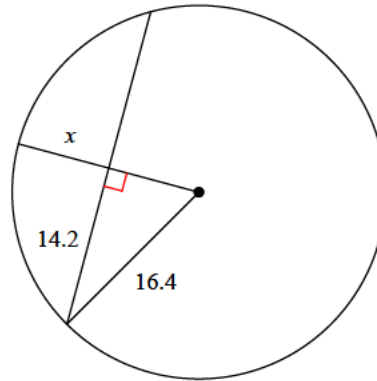
Find the length of the segment indicated. Round your answer to the nearest tenth if necessary.

1)



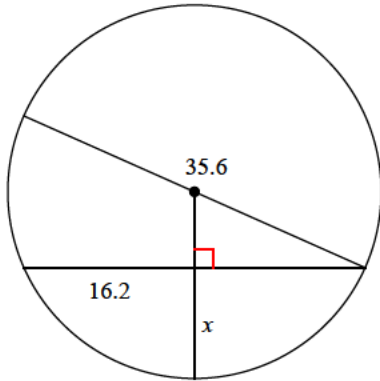
- A) 8.2
- B) 7.5
- C) 4.2
- D) 10.1

2)



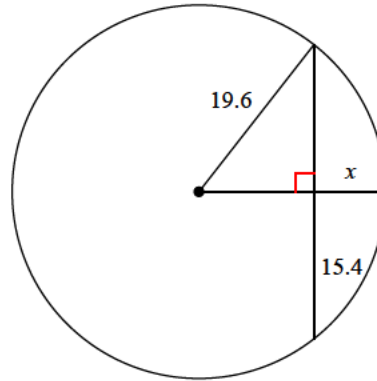
- A) 9.7
- B) 7.9
- C) 8.2
- D) 11.6

3)



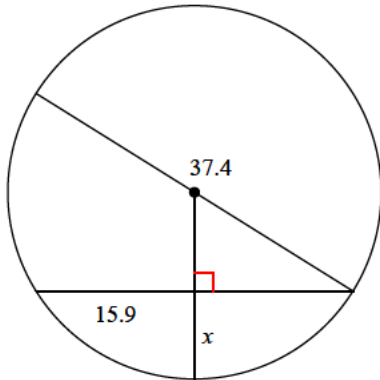
- A) 13.8
- B) 6.5
- C) 10.4
- D) 11.8

4)



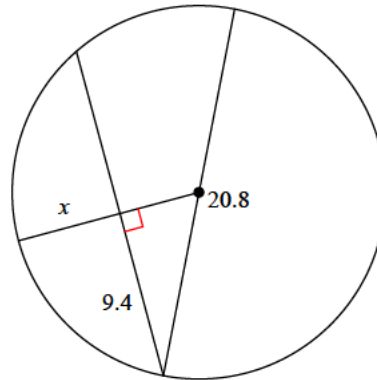
- A) 3.8
- B) 9.8
- C) 7.5
- D) 10.6

5)



- A) 10.6
- B) 8.9
- C) 6.2
- D) 5.5

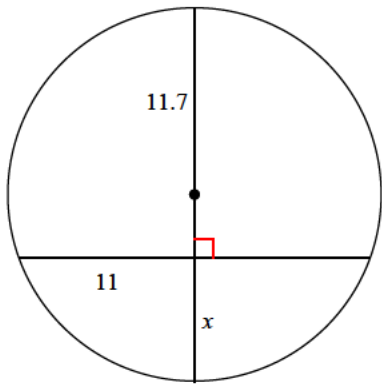
6)



- A) 5.9
- B) 6
- C) 3
- D) 9

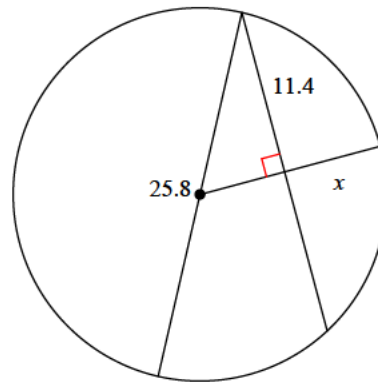


7)



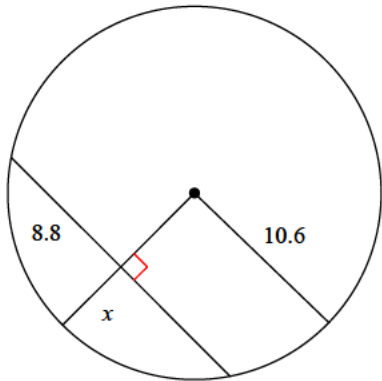
- A) 5.8 B) 7.7
C) 7.4 D) 11.4

8)



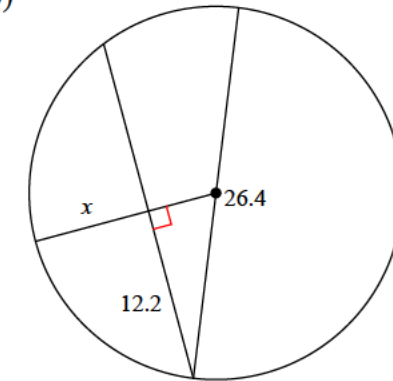
- A) 3.5 B) 4.7
C) 4.1 D) 6.9

9)



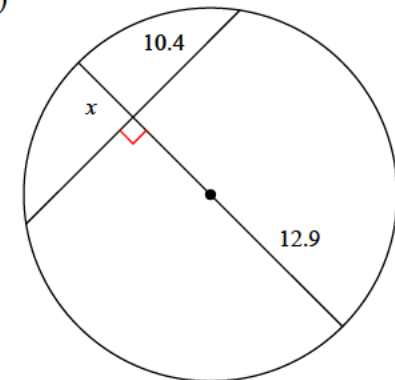
- A) 5.9 B) 4.7
C) 6.7 D) 5.1

10)



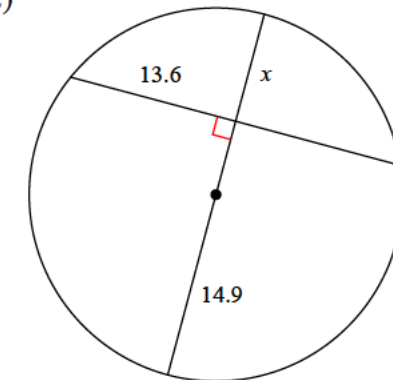
- A) 5.1 B) 9.3
C) 5.8 D) 8.2

11)



- A) 2.9 B) 3.7
C) 4.7 D) 5.3

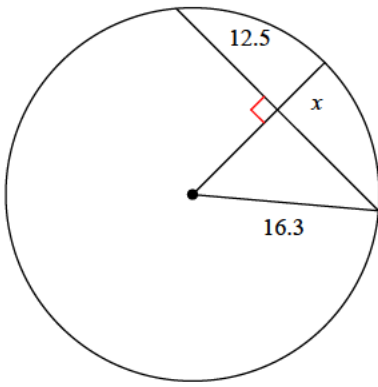
12)



- A) 10.2 B) 10.1
C) 8.8 D) 7.8

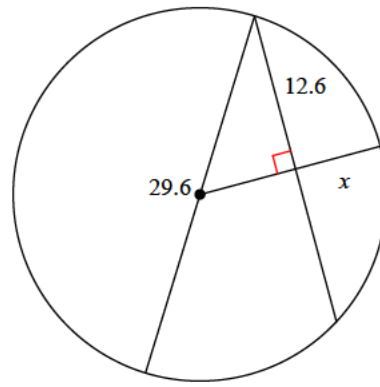


13)



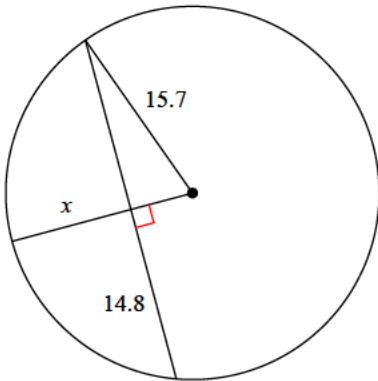
- A) 6.9 B) 4
C) 4.9 D) 5.8

14)



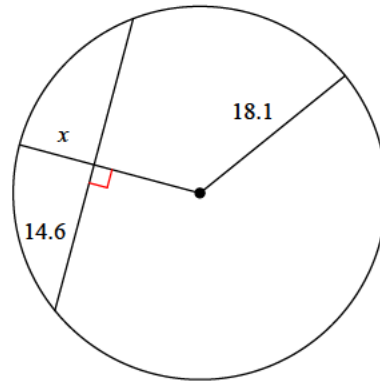
- A) 7 B) 6.2
C) 6.8 D) 8.5

15)



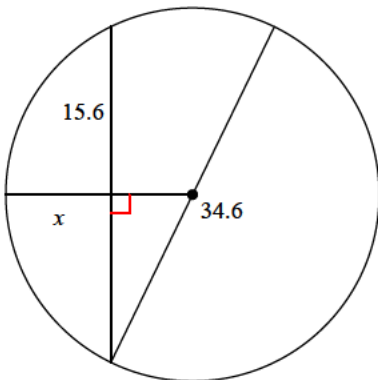
- A) 7.6 B) 5.8
C) 9.5 D) 10.5

16)



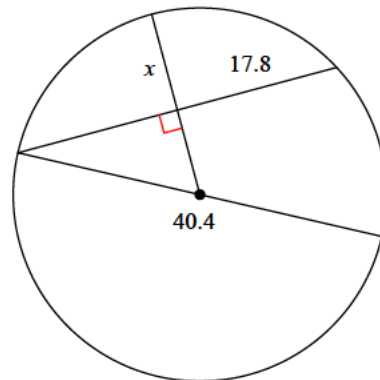
- A) 7.4 B) 11.1
C) 5.8 D) 9.6

17)



- A) 10.8 B) 13.6
C) 14 D) 9.8

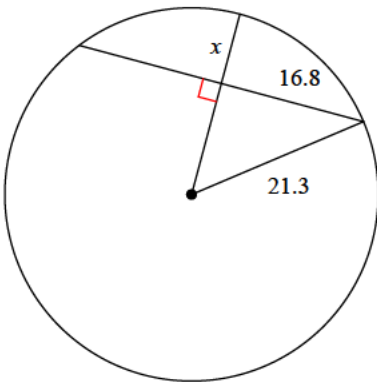
18)



- A) 7.8 B) 10.7
C) 7.2 D) 15.9

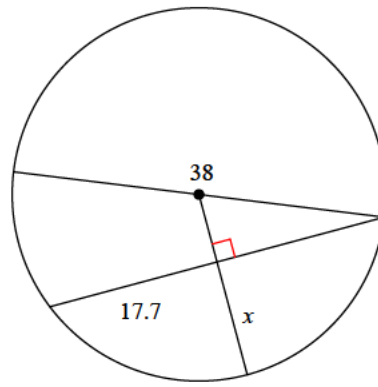


19)



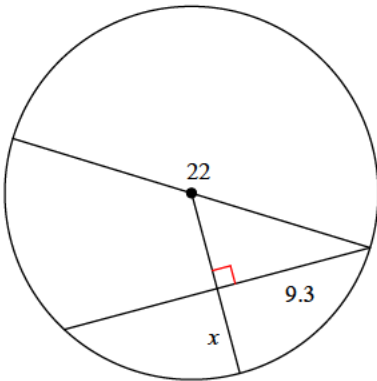
- A) 10.4 B) 9.9
C) 8.2 D) 9.1

20)



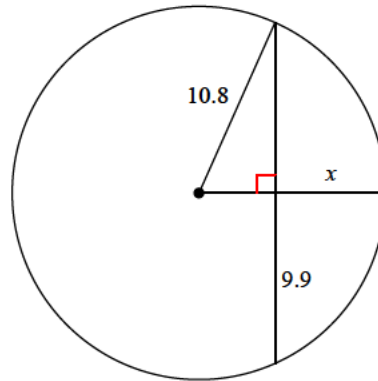
- A) 10.9 B) 7.7
C) 12.1 D) 12.3

21)



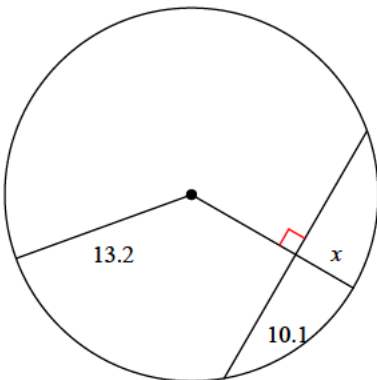
- A) 5.1 B) 4.8
C) 5.3 D) 2.6

22)



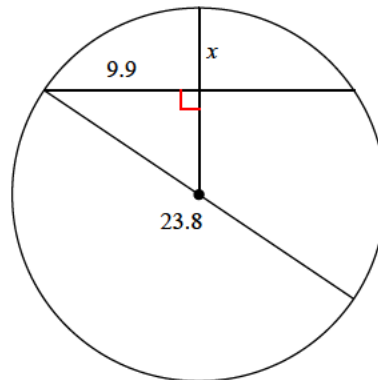
- A) 6.5 B) 3.8
C) 4.4 D) 7.8

23)



- A) 5.2 B) 4.2
C) 3.6 D) 4.7

24)



- A) 3.4 B) 3
C) 2.9 D) 5.3



Answers to Assignment (ID: 2)

1) B
5) B
9) B
13) D
17) D
21) A

2) C
6) B
10) D
14) A
18) B
22) A

3) C
7) B
11) D
15) D
19) C
23) D

4) C
8) D
12) C
16) A
20) C
24) D

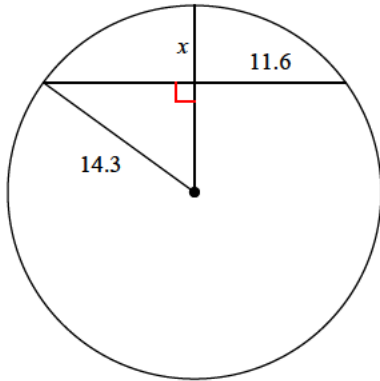


Assignment

Date _____ Period _____

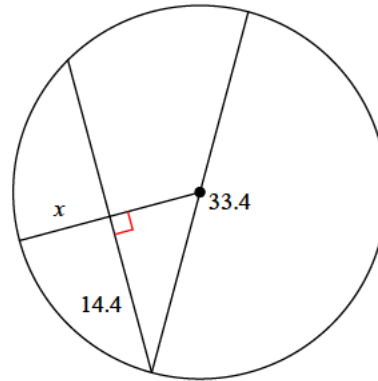
Find the length of the segment indicated. Round your answer to the nearest tenth if necessary.

1)



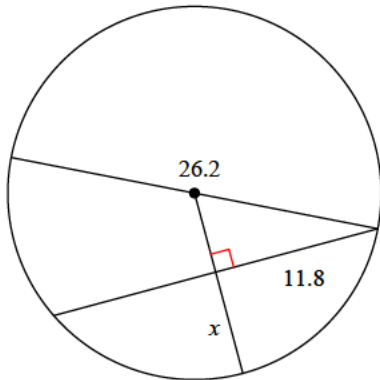
- A) 5.9
- B) 8
- C) 6.5
- D) 8.7

2)



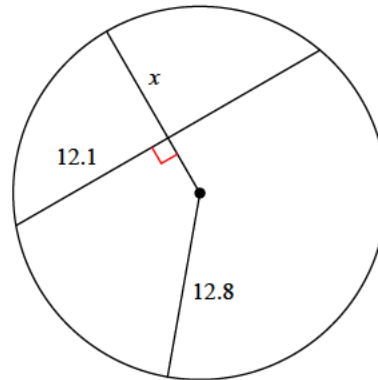
- A) 8.2
- B) 7
- C) 11.7
- D) 7.8

3)



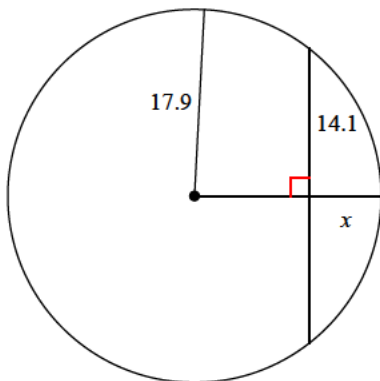
- A) 7.4
- B) 5.3
- C) 7.7
- D) 10.5

4)



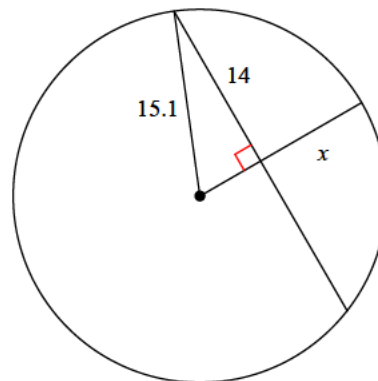
- A) 4.9
- B) 11.9
- C) 6.7
- D) 8.6

5)



- A) 5.3
- B) 7
- C) 5.4
- D) 6.9

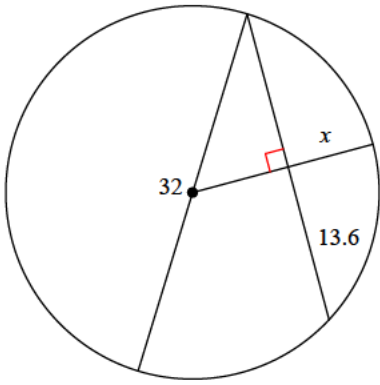
6)



- A) 9.4
- B) 11.2
- C) 9.6
- D) 11.5

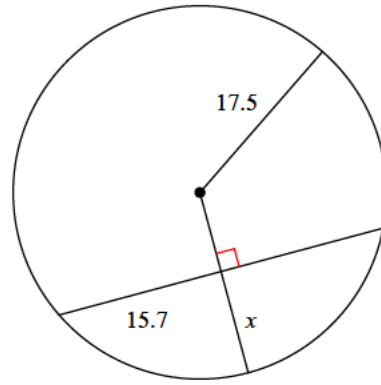


7)



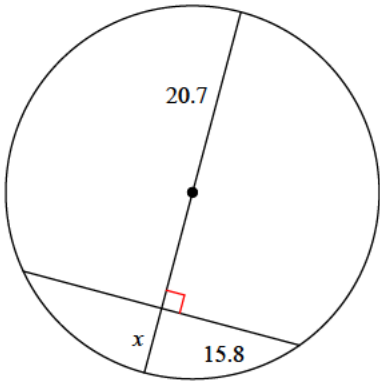
- A) 9.9 B) 7.6
C) 9.4 D) 8.7

8)



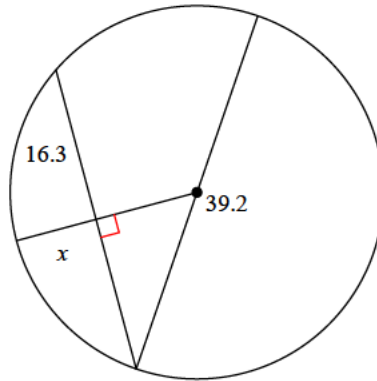
- A) 6.5 B) 10
C) 12.2 D) 9.8

9)



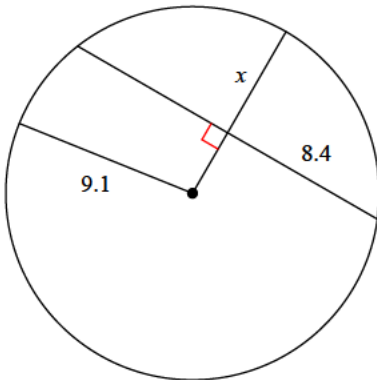
- A) 6.2 B) 10.6
C) 7.3 D) 5.9

10)



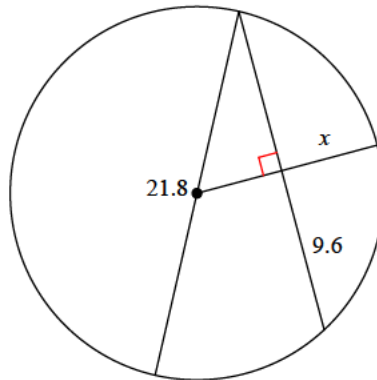
- A) 7.5 B) 13
C) 11.9 D) 8.7

11)



- A) 8.1 B) 5.6
C) 4 D) 4.9

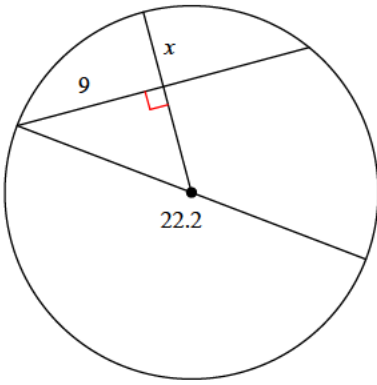
12)



- A) 5.7 B) 5.6
C) 7.6 D) 6.1

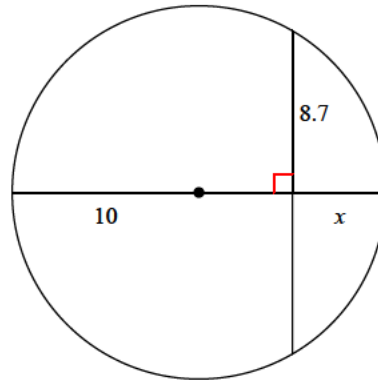


13)



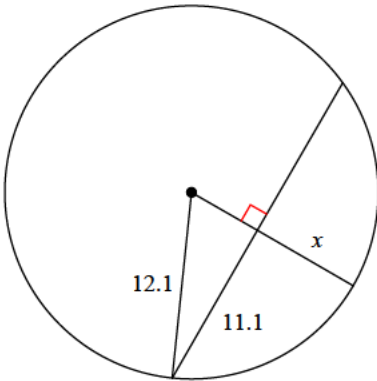
- A) 3.6 B) 6.8
C) 6.4 D) 4.6

14)



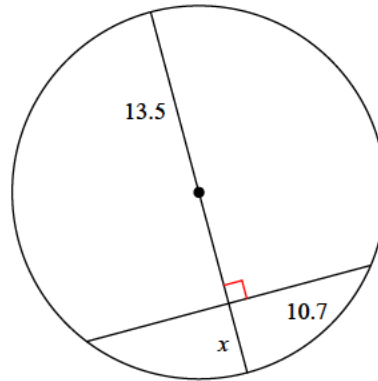
- A) 7.5 B) 5.1
C) 5 D) 6

15)



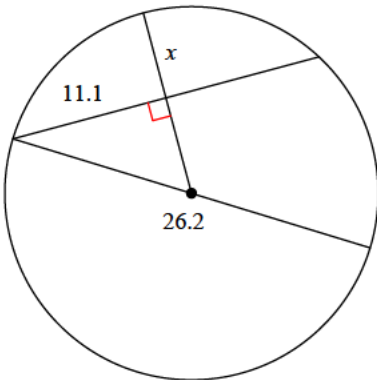
- A) 7.3 B) 8.7
C) 8.2 D) 5.4

16)



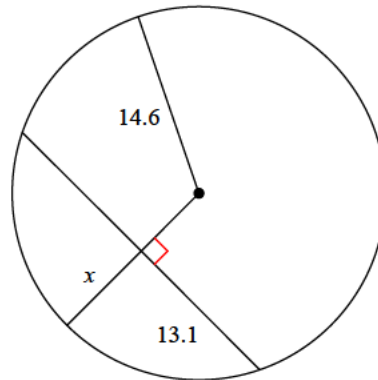
- A) 3.8 B) 6.2
C) 7.3 D) 5.3

17)



- A) 3.6 B) 6.1
C) 8.6 D) 4.5

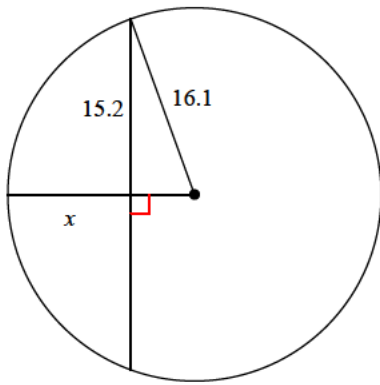
18)



- A) 7.7 B) 8.2
C) 6.4 D) 7.4

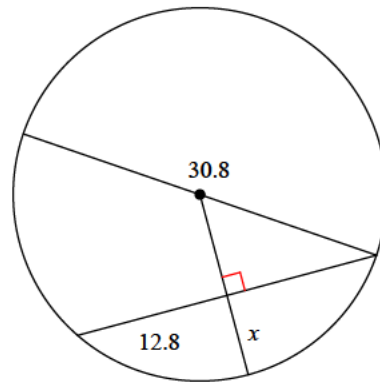


19)



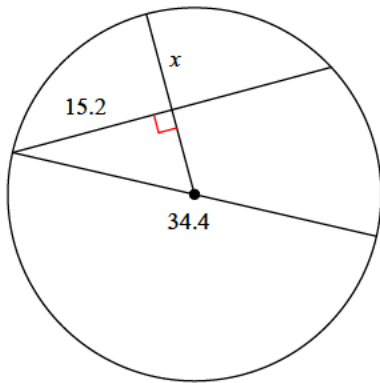
- A) 8.4 B) 8.3
C) 14.5 D) 10.8

20)



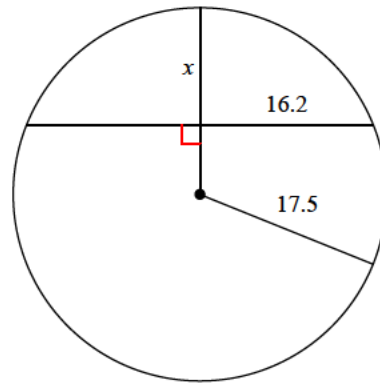
- A) 3.8 B) 6.8
C) 5.2 D) 4.1

21)



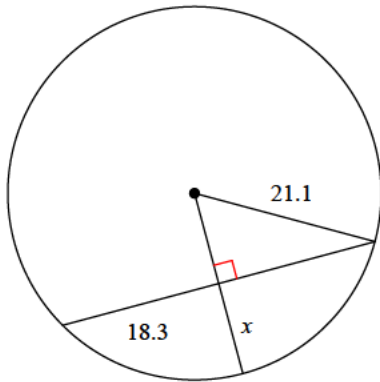
- A) 5.5 B) 9.2
C) 13.6 D) 5.9

22)



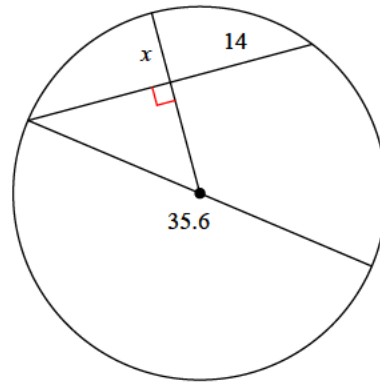
- A) 10.9 B) 11.5
C) 14.9 D) 15

23)



- A) 13.9 B) 14.3
C) 10.6 D) 9.3

24)



- A) 8.1 B) 5.2
C) 6.8 D) 7.9



Answers to Assignment (ID: 3)

- 1) A
- 5) D
- 9) C
- 13) D
- 17) B
- 21) B

- 2) A
- 6) A
- 10) D
- 14) B
- 18) B
- 22) A

- 3) A
- 7) B
- 11) B
- 15) A
- 19) D
- 23) C

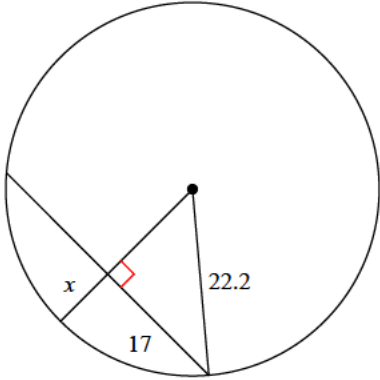
- 4) D
- 8) D
- 12) A
- 16) D
- 20) B
- 24) C



Assignment

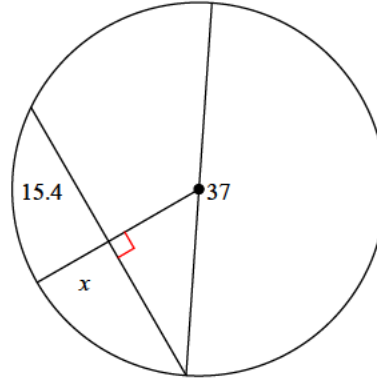
Find the length of the segment indicated. Round your answer to the nearest tenth if necessary.

1)



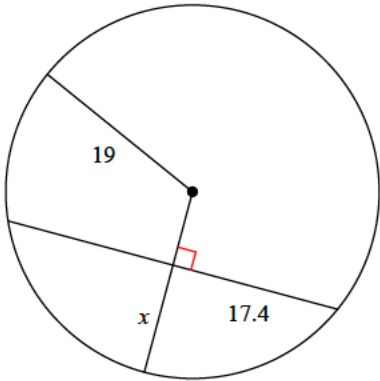
- A) 6
- B) 8.9
- C) 10.7
- D) 7.9

2)



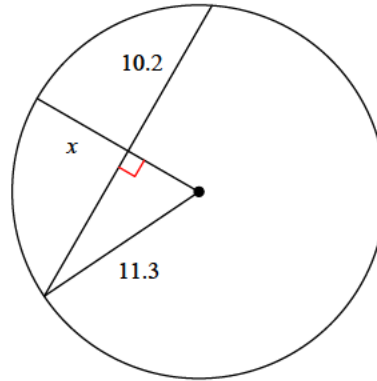
- A) 7.5
- B) 8.2
- C) 7.1
- D) 5.7

3)



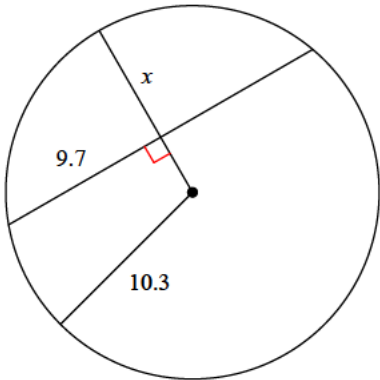
- A) 12.8
- B) 11.1
- C) 15.3
- D) 11.4

4)



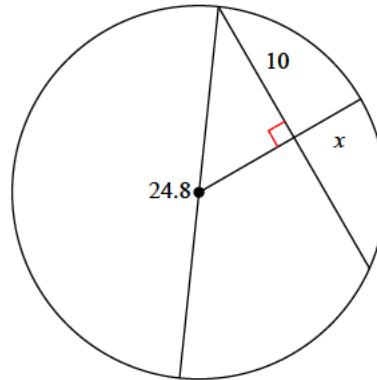
- A) 8.9
- B) 5
- C) 6.4
- D) 8

5)



- A) 6.8
- B) 5.1
- C) 9
- D) 9.9

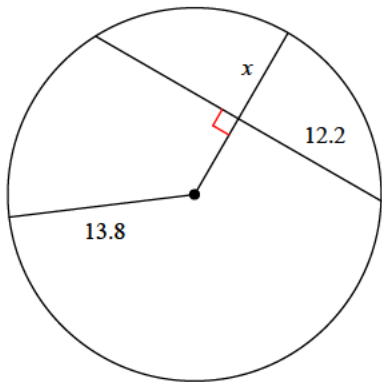
6)



- A) 3.4
- B) 6.3
- C) 4.9
- D) 5.1

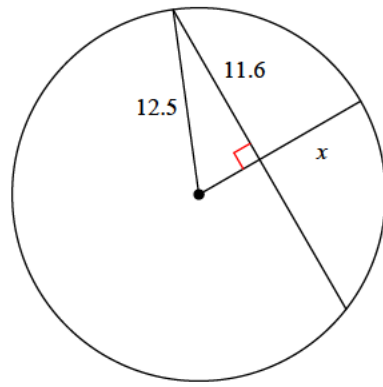


7)



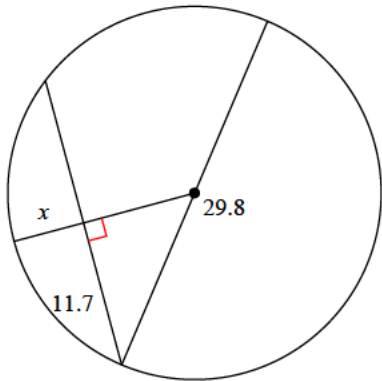
- A) 4.6 B) 8.2
C) 4 D) 7.4

8)



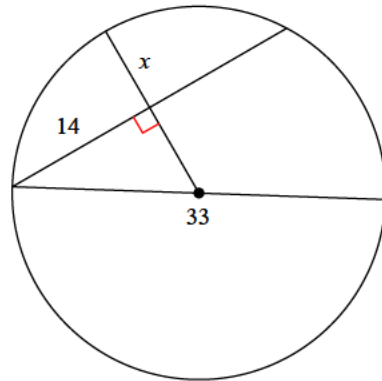
- A) 5.1 B) 9.2
C) 10.1 D) 7.8

9)



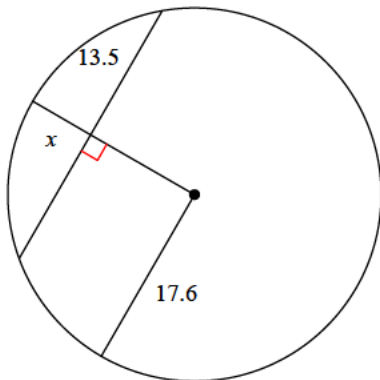
- A) 5.7 B) 4.1
C) 5.2 D) 5

10)



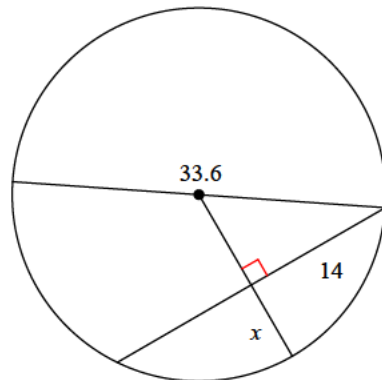
- A) 11.1 B) 11.3
C) 7.8 D) 11.2

11)



- A) 6.3 B) 4.2
C) 7.6 D) 9.3

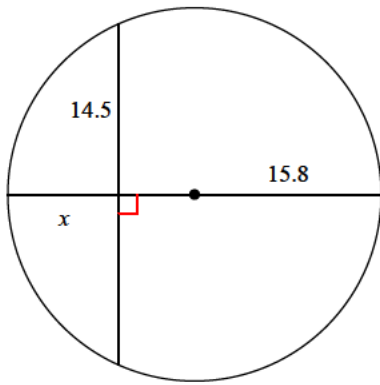
12)



- A) 4.7 B) 7.5
C) 7 D) 9

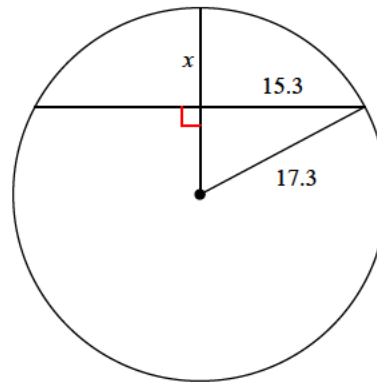


13)



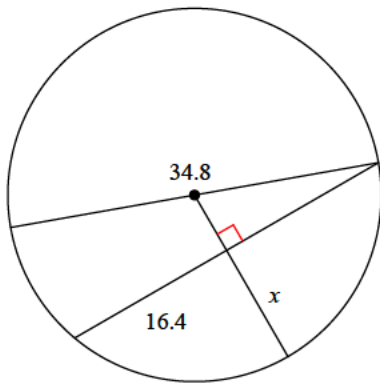
- A) 12.9 B) 9.5
C) 11 D) 9.6

14)



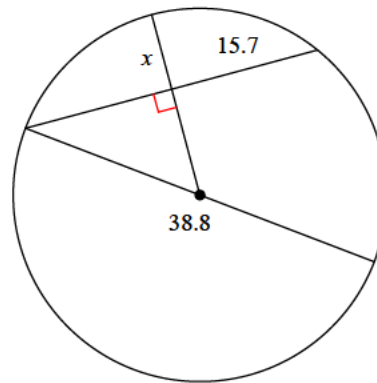
- A) 6.1 B) 9.2
C) 5.4 D) 5.5

15)



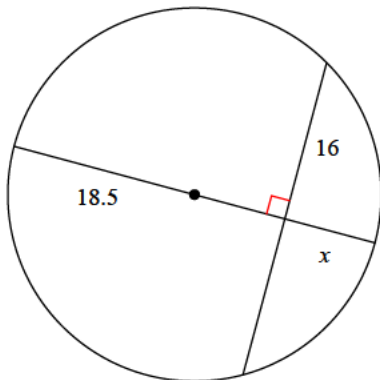
- A) 16.7 B) 8.7
C) 11.6 D) 11.9

16)



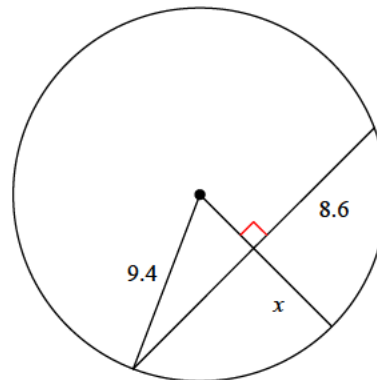
- A) 8 B) 6.5
C) 4.8 D) 9.1

17)



- A) 9.2 B) 6.3
C) 9.4 D) 7.6

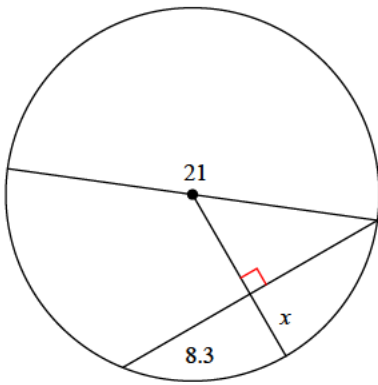
18)



- A) 5.6 B) 5.1
C) 5.8 D) 8.3

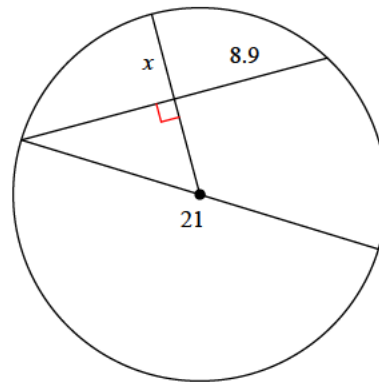


19)



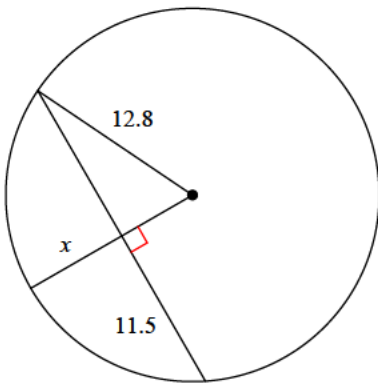
- A) 4.1 B) 4.3
C) 5.3 D) 4.7

20)



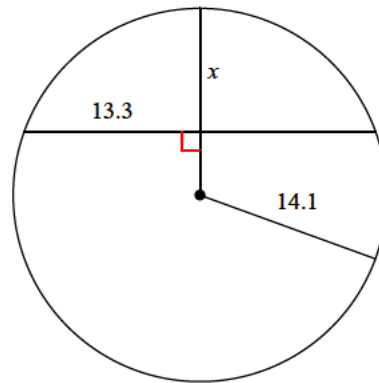
- A) 3.1 B) 4.2
C) 6.3 D) 4.9

21)



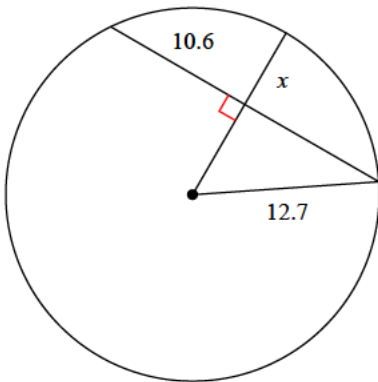
- A) 5.6 B) 7.2
C) 6.9 D) 9.4

22)



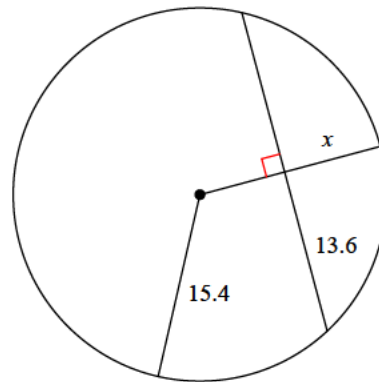
- A) 9.4 B) 11.3
C) 11.2 D) 11.9

23)



- A) 6.6 B) 8.5
C) 5.7 D) 4.4

24)



- A) 8.2 B) 4.6
C) 11.9 D) 7



Answers to Assignment (ID: 4)

1) D
5) A
9) A
13) B
17) A
21) B

2) B
6) D
10) C
14) B
18) A
22) A

3) D
7) D
11) A
15) C
19) A
23) C

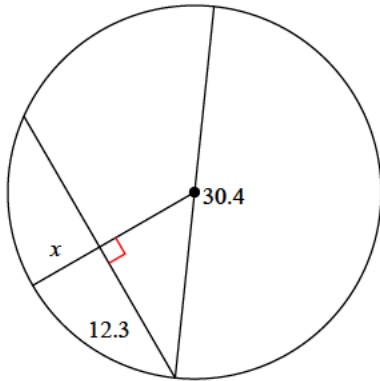
4) C
8) D
12) B
16) A
20) D
24) A



Assignment

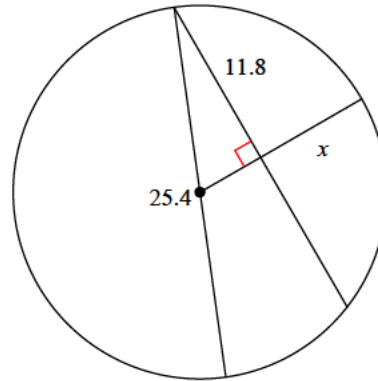
Find the length of the segment indicated. Round your answer to the nearest tenth if necessary.

1)



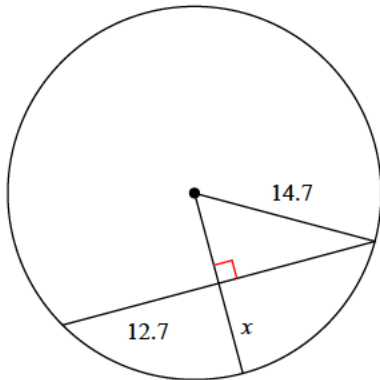
- A) 7
- B) 8.2
- C) 6.3
- D) 6.9

2)



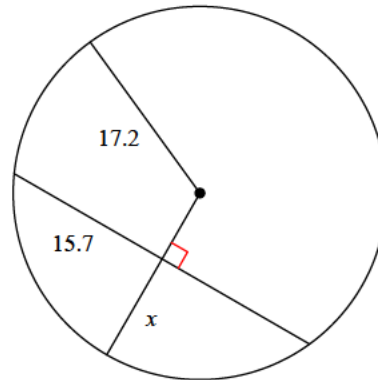
- A) 11.1
- B) 8
- C) 4.4
- D) 8.4

3)



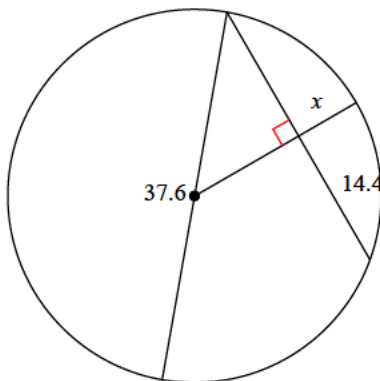
- A) 5.9
- B) 10.9
- C) 6.6
- D) 7.3

4)



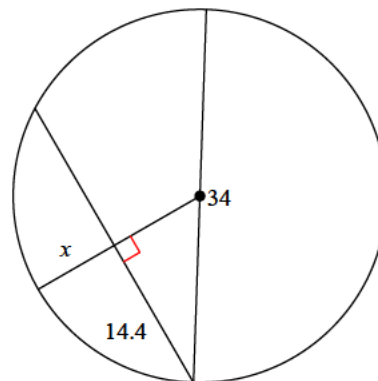
- A) 12.6
- B) 10.2
- C) 9.9
- D) 14.5

5)



- A) 8
- B) 9.3
- C) 6.7
- D) 7.7

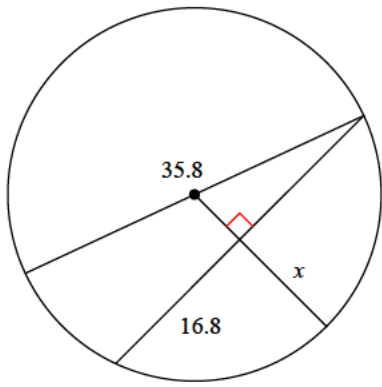
6)



- A) 8
- B) 5.2
- C) 4.7
- D) 10.1

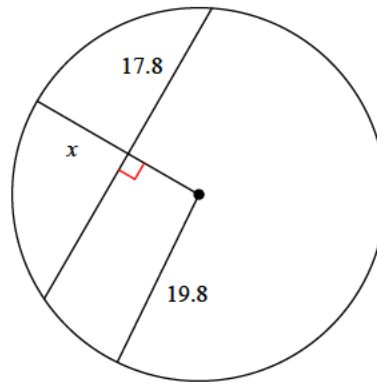


7)



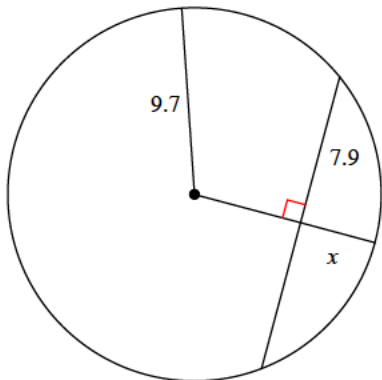
- A) 14.9 B) 11.7
C) 8.6 D) 13.9

8)



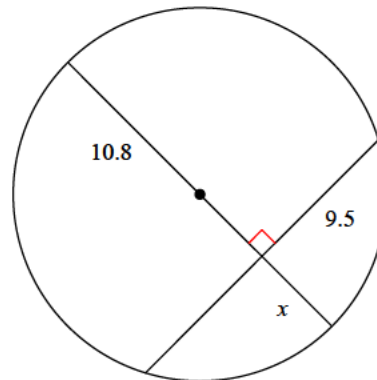
- A) 16.7 B) 13.9
C) 11.1 D) 11.9

9)



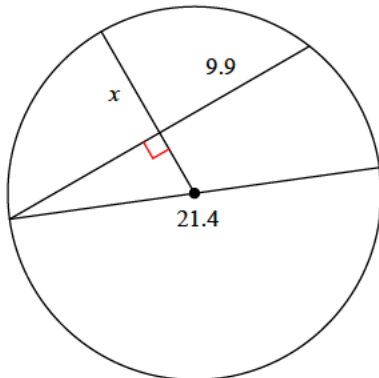
- A) 5.6 B) 3.8
C) 4.1 D) 2.6

10)



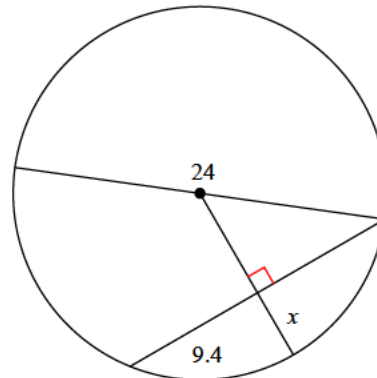
- A) 6.4 B) 5.7
C) 4 D) 4.8

11)



- A) 4.8 B) 4.4
C) 8.2 D) 6.6

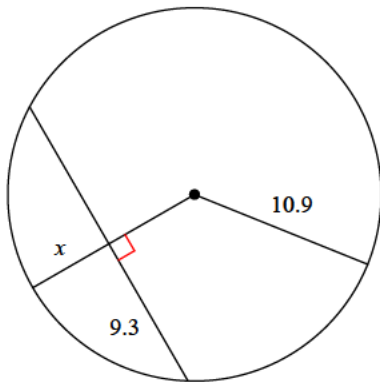
12)



- A) 6.2 B) 4.8
C) 4.5 D) 3.4

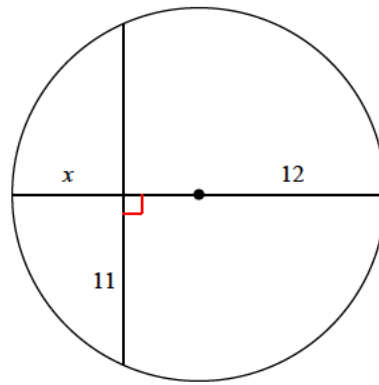


13)



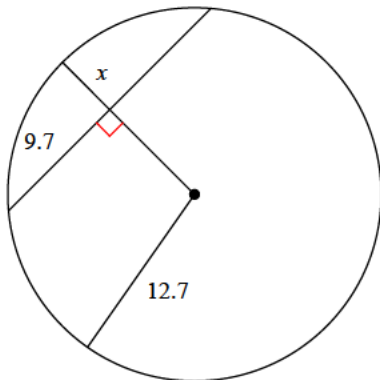
- A) 3.4 B) 5
C) 5.2 D) 7.2

14)



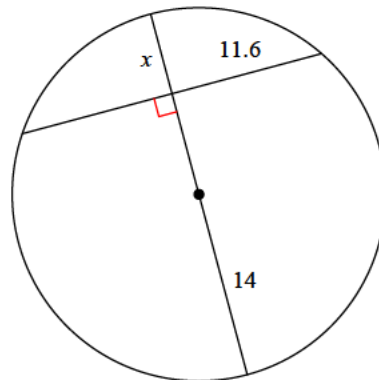
- A) 4.8 B) 4
C) 7.2 D) 3.6

15)



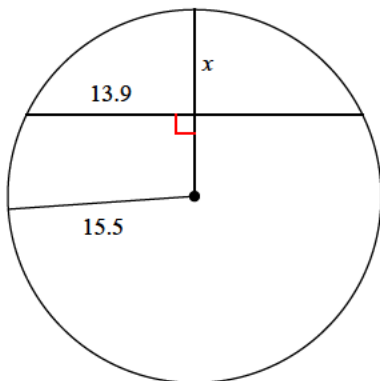
- A) 4.3 B) 6.4
C) 4.5 D) 3.6

16)



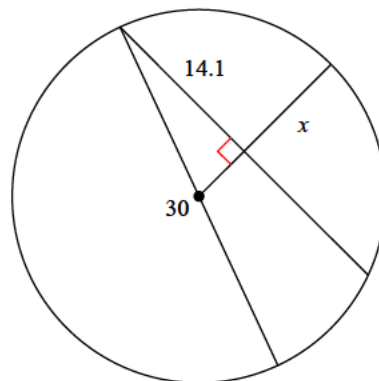
- A) 7.1 B) 5.7
C) 6.1 D) 6.2

17)



- A) 8.6 B) 11
C) 5.1 D) 5.8

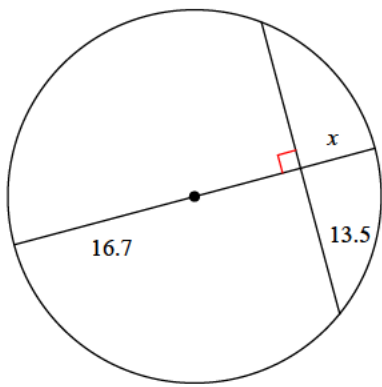
18)



- A) 5.2 B) 9.9
C) 7.4 D) 10.2

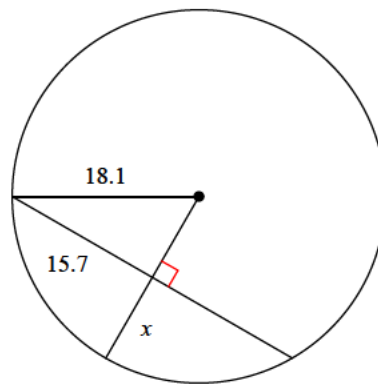


19)



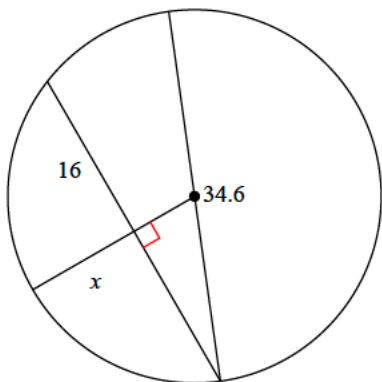
- A) 3.8 B) 8
C) 7.8 D) 6.9

20)



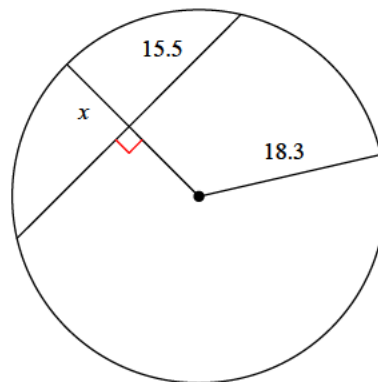
- A) 10.2 B) 13
C) 10.8 D) 9.1

21)



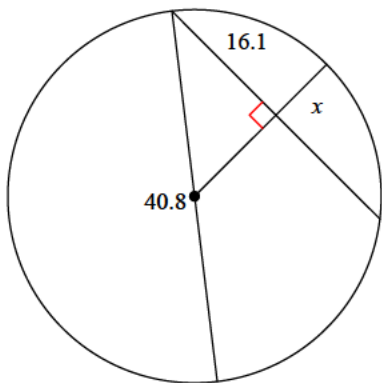
- A) 11 B) 14.9
C) 9.6 D) 10.7

22)



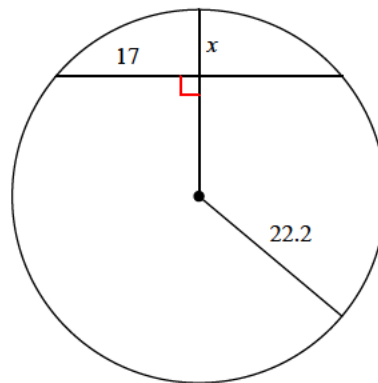
- A) 12.7 B) 7.6
C) 8.6 D) 11.3

23)



- A) 7.9 B) 8.9
C) 5.4 D) 10.7

24)



- A) 9.3 B) 11.5
C) 7.9 D) 6.2



Answers to Assignment (ID: 5)

1) C
5) C
9) C
13) C
17) A
21) D

2) B
6) A
10) B
14) C
18) B
22) C

3) D
7) B
11) D
15) C
19) D
23) A

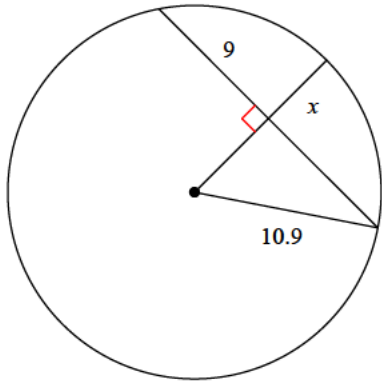
4) B
8) C
12) C
16) D
20) D
24) C



Assignment

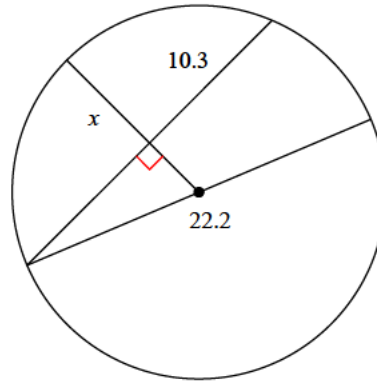
Find the length of the segment indicated. Round your answer to the nearest tenth if necessary.

1)



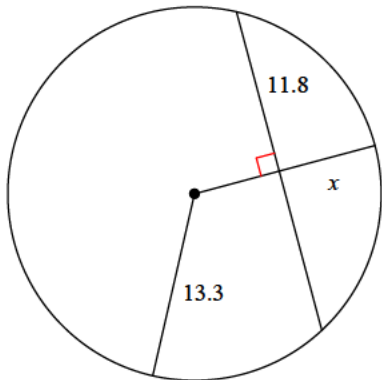
- A) 7.1
- B) 4.8
- C) 4.1
- D) 7

2)



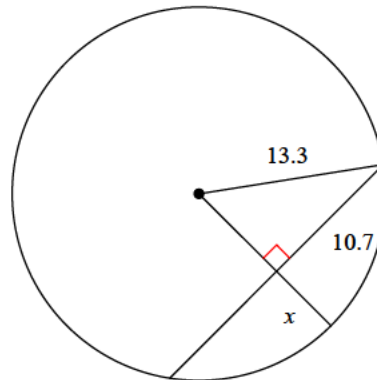
- A) 5.1
- B) 7.9
- C) 7
- D) 3.6

3)



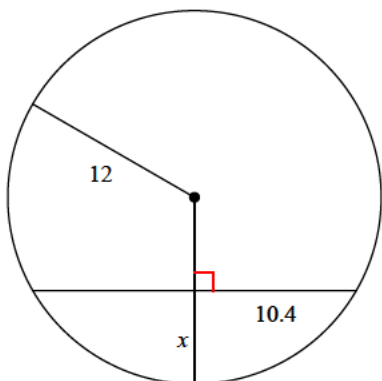
- A) 10.1
- B) 7.2
- C) 8.5
- D) 4

4)



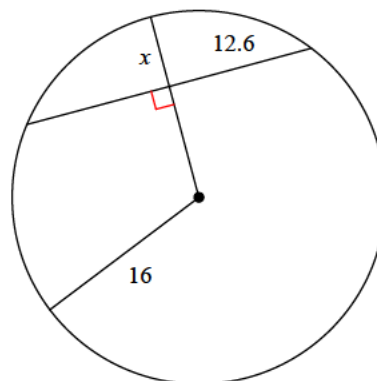
- A) 5.4
- B) 6.8
- C) 3.7
- D) 4.2

5)



- A) 7.8
- B) 3.9
- C) 4.7
- D) 6

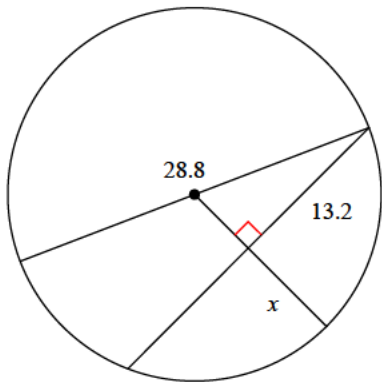
6)



- A) 9
- B) 6.1
- C) 3.3
- D) 8.9

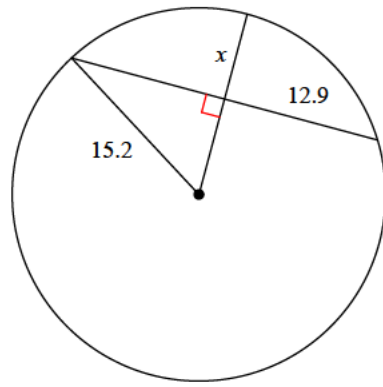


7)



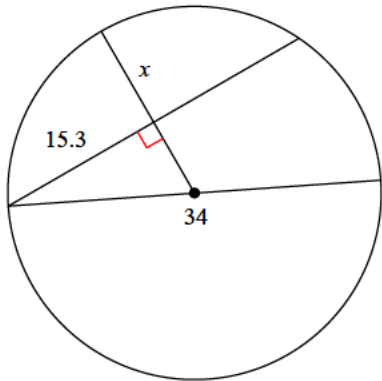
- A) 8.6 B) 9.7
C) 10.2 D) 7.5

8)



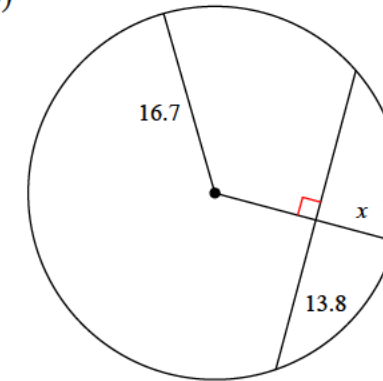
- A) 7.3 B) 7
C) 8 D) 7.2

9)



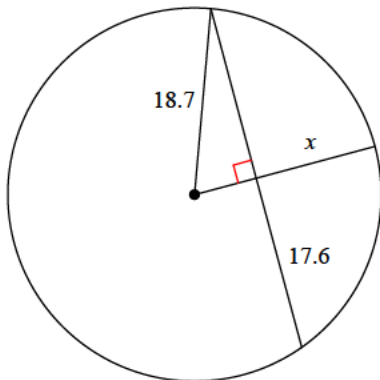
- A) 9.6 B) 12.6
C) 11 D) 7.2

10)



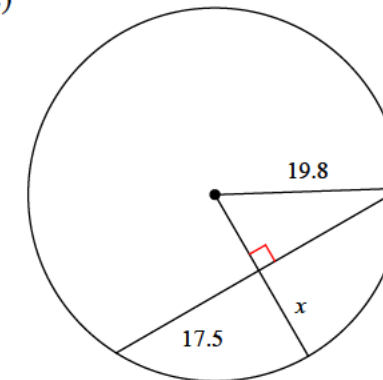
- A) 7.3 B) 6.9
C) 10.7 D) 4.7

11)



- A) 14.9 B) 12.4
C) 14.8 D) 15.1

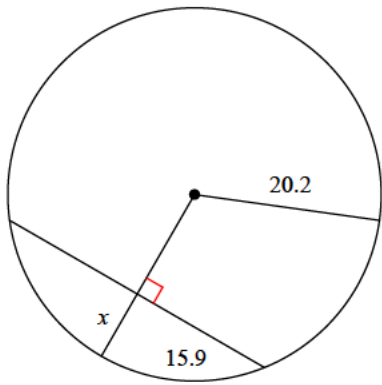
12)



- A) 10.1 B) 7.8
C) 5.8 D) 10.5

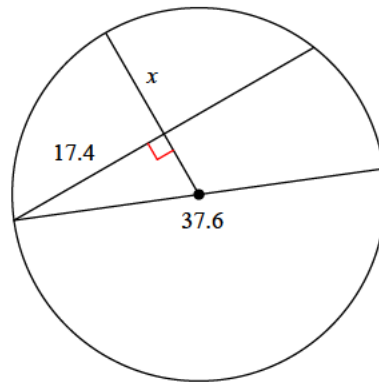


13)



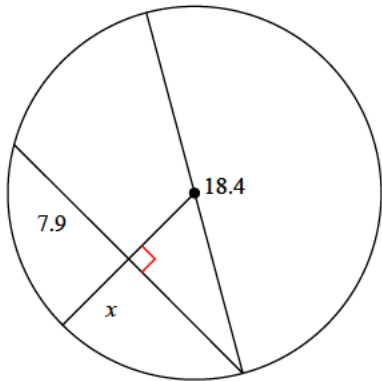
- A) 8.1 B) 9.9
C) 7.7 D) 6.6

14)



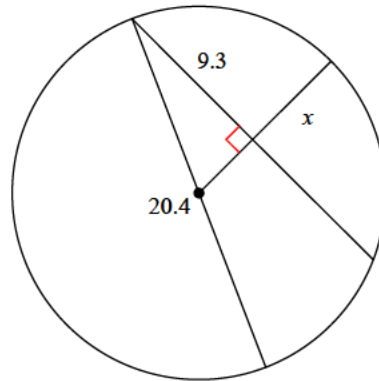
- A) 11.7 B) 6.9
C) 13.9 D) 8

15)



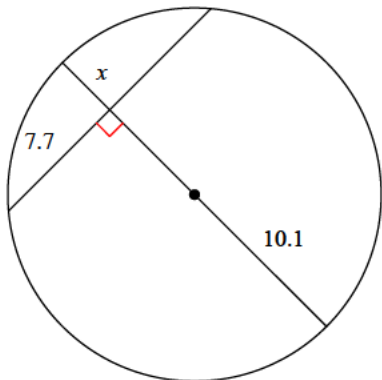
- A) 5.3 B) 3.9
C) 4.5 D) 4.6

16)



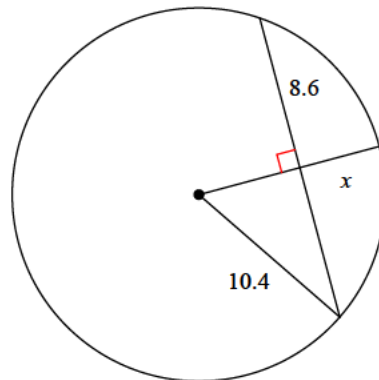
- A) 7.4 B) 9
C) 3.7 D) 6

17)



- A) 3.1 B) 4
C) 3.6 D) 5

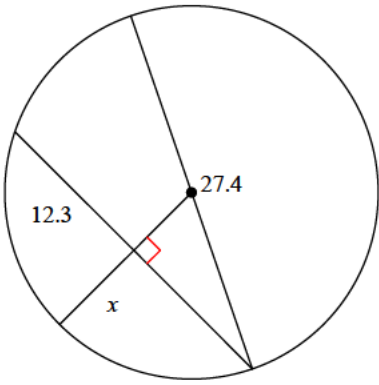
18)



- A) 4.6 B) 5.5
C) 4.2 D) 6

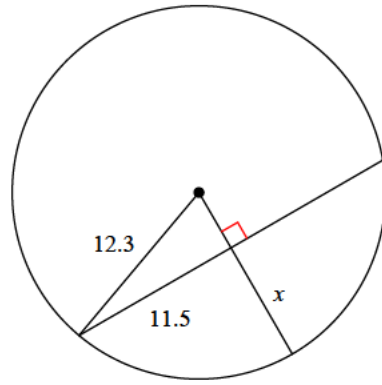


19)



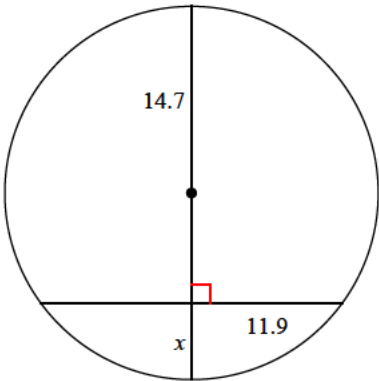
- A) 4.2 B) 9.9
C) 7.7 D) 10.6

20)



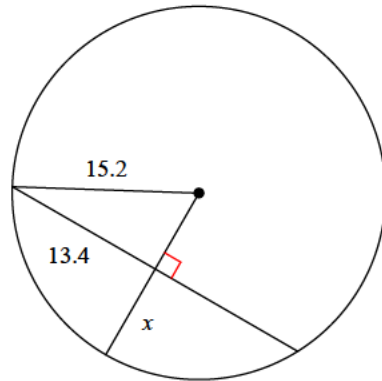
- A) 4.4 B) 8.1
C) 11.8 D) 7.9

21)



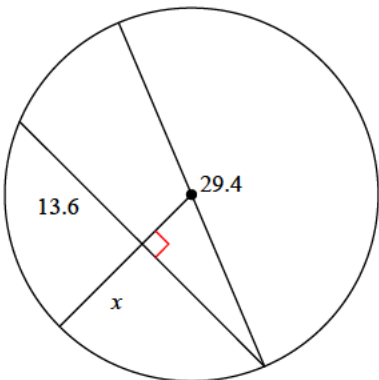
- A) 8.7 B) 6.4
C) 5 D) 6.1

22)



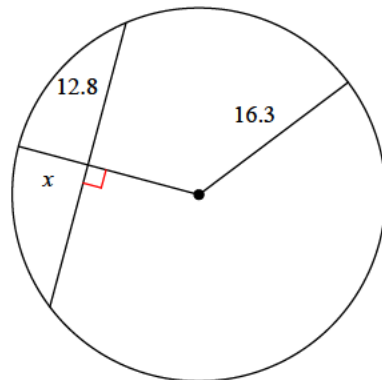
- A) 11.2 B) 4.5
C) 8 D) 7.6

23)



- A) 7.7 B) 12.8
C) 9.1 D) 8.1

24)



- A) 4.1 B) 6.2
C) 6.1 D) 8.3



Answers to Assignment (ID: 6)

1) B
5) D
9) A
13) C
17) C
21) D

2) C
6) B
10) A
14) A
18) A
22) C

3) B
7) A
11) B
15) C
19) C
23) C

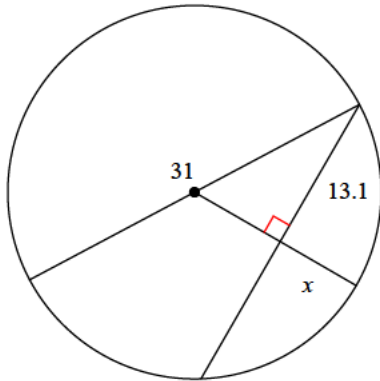
4) A
8) D
12) D
16) D
20) D
24) B



Assignment

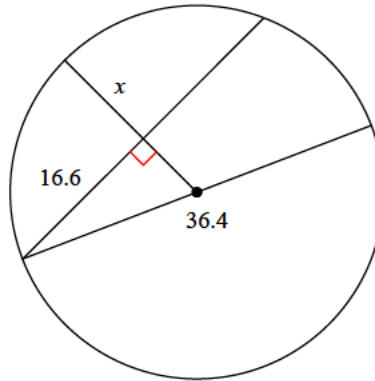
Find the length of the segment indicated. Round your answer to the nearest tenth if necessary.

1)



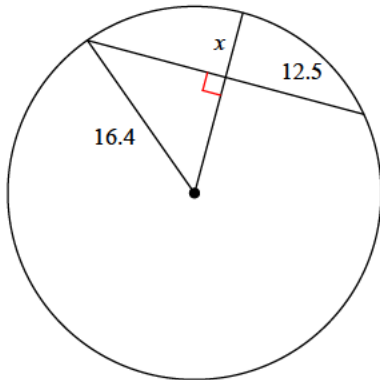
- A) 4.1
- B) 4.3
- C) 7.2
- D) 6.3

2)



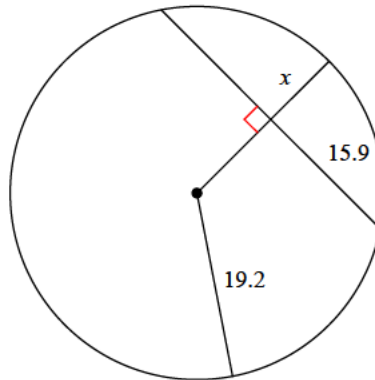
- A) 8.8
- B) 10
- C) 10.7
- D) 5.7

3)



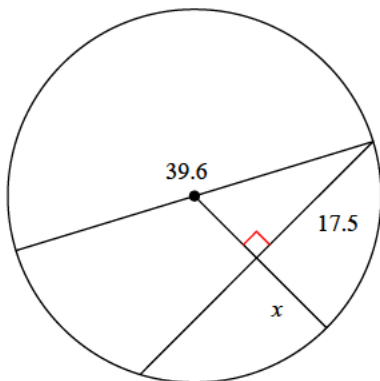
- A) 6.8
- B) 5.8
- C) 6.1
- D) 3.3

4)



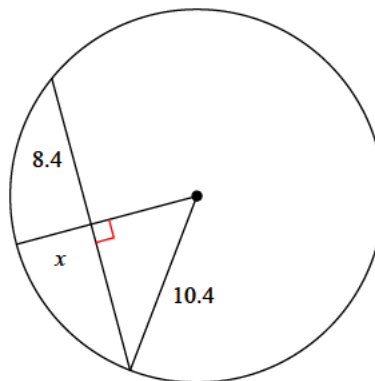
- A) 8.4
- B) 5.7
- C) 4.5
- D) 11

5)



- A) 11.9
- B) 10.5
- C) 10.4
- D) 13

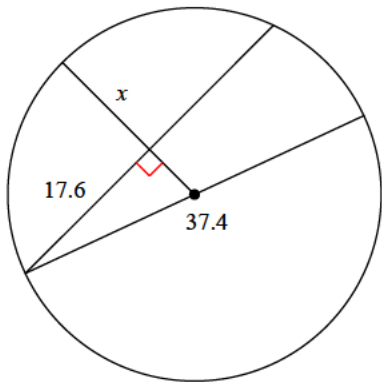
6)



- A) 3.2
- B) 5.3
- C) 4.3
- D) 4.6

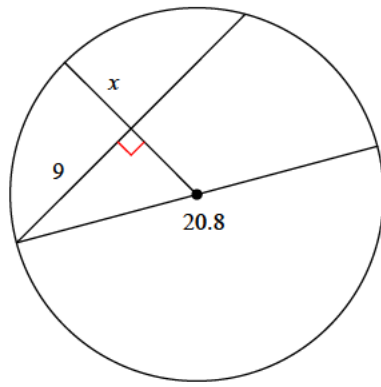


7)



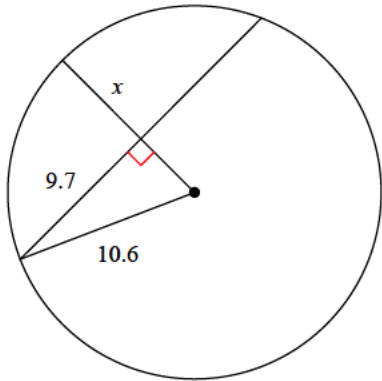
- A) 9.8 B) 12.4
C) 13.7 D) 6.6

8)



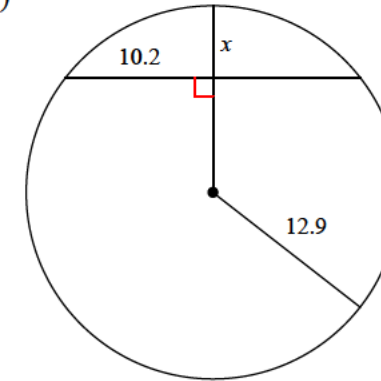
- A) 3 B) 5.3
C) 2.9 D) 5.2

9)



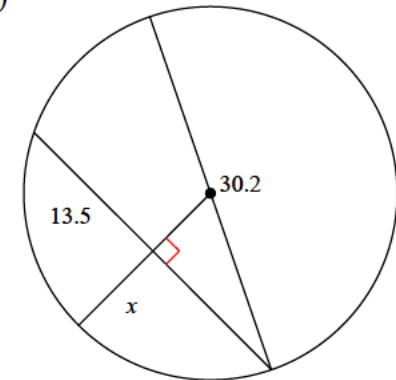
- A) 5.3 B) 6.3
C) 4.7 D) 4.3

10)



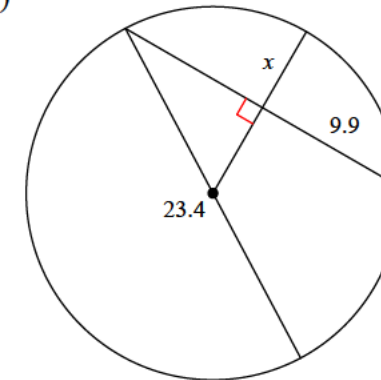
- A) 7.1 B) 5.3
C) 5.5 D) 5

11)



- A) 9.3 B) 6.2
C) 8.1 D) 8.3

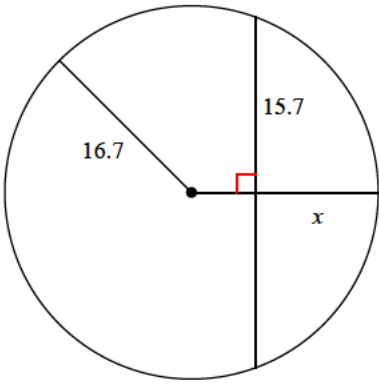
12)



- A) 5.5 B) 7.3
C) 8.2 D) 6.6

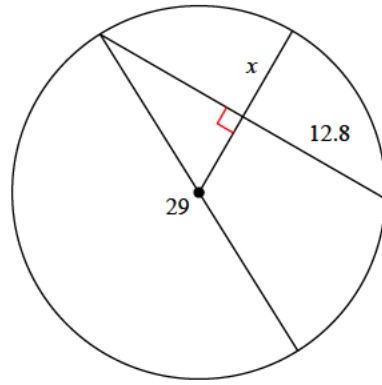


13)



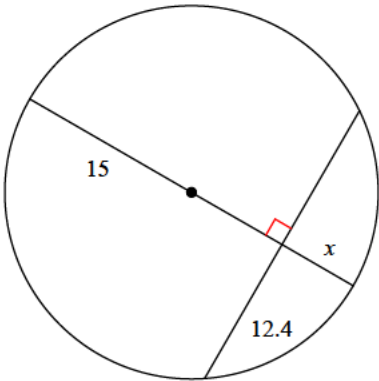
- A) 6 B) 11
C) 12.4 D) 12.8

14)



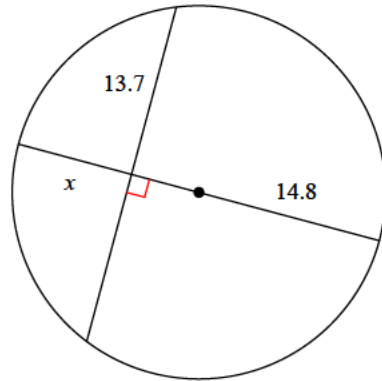
- A) 11.3 B) 9
C) 7.7 D) 9.8

15)



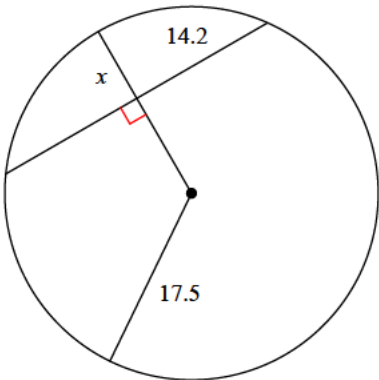
- A) 7.7 B) 6.6
C) 9.6 D) 5.5

16)



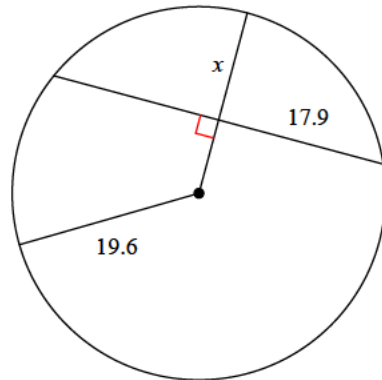
- A) 9.2 B) 6.5
C) 12.2 D) 10.3

17)



- A) 9.4 B) 7.3
C) 7.8 D) 9.7

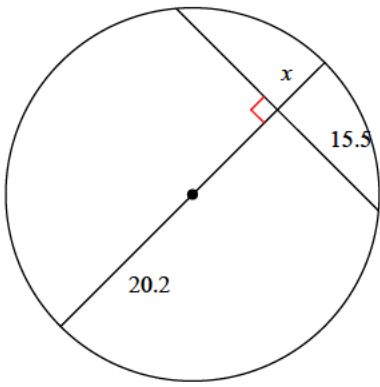
18)



- A) 16.4 B) 16.9
C) 11.6 D) 9.5

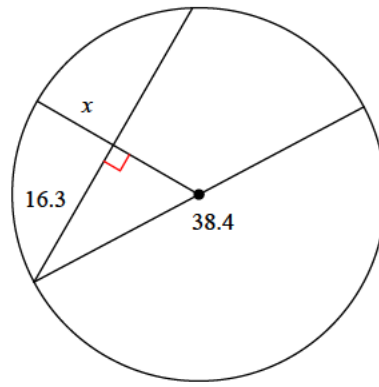


19)



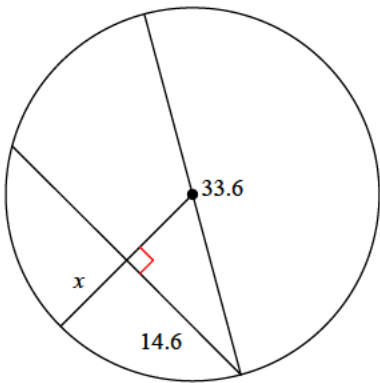
- A) 9.6 B) 7.8
C) 7.2 D) 5.3

20)



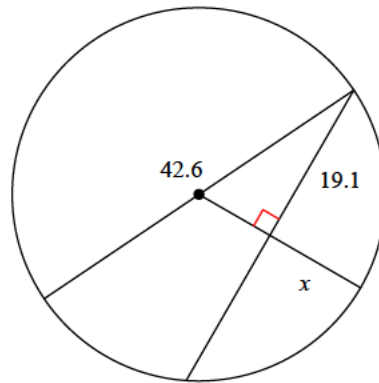
- A) 9.1 B) 12.4
C) 12.8 D) 9.4

21)



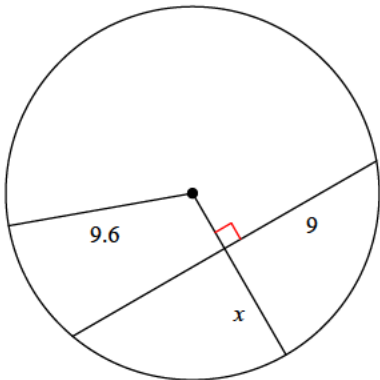
- A) 12.7 B) 12
C) 8.1 D) 8.5

22)



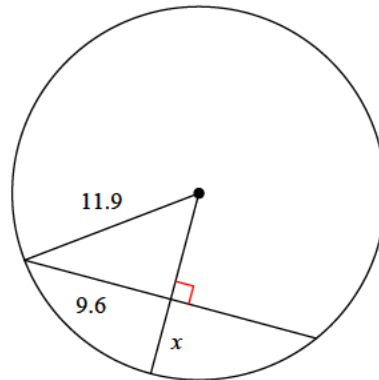
- A) 17.3 B) 11.9
C) 13.5 D) 10.2

23)



- A) 6.3 B) 5.4
C) 8.4 D) 9.3

24)



- A) 4.2 B) 6.4
C) 4.9 D) 5.9



Answers to Assignment (ID: 7)

- 1) C
- 5) B
- 9) B
- 13) B
- 17) B
- 21) D

- 2) C
- 6) C
- 10) D
- 14) C
- 18) C
- 22) B

- 3) B
- 7) B
- 11) D
- 15) B
- 19) C
- 23) A

- 4) A
- 8) D
- 12) A
- 16) A
- 20) A
- 24) C

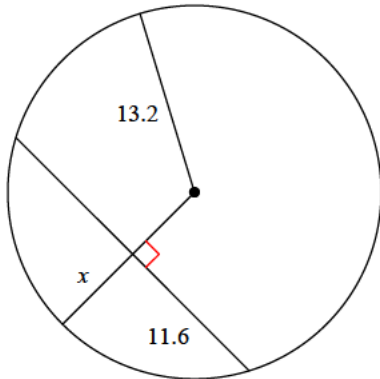


Assignment

Date _____ Period _____

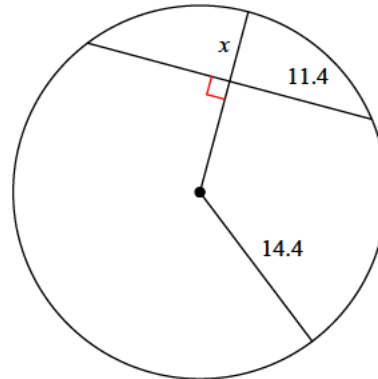
Find the length of the segment indicated. Round your answer to the nearest tenth if necessary.

1)



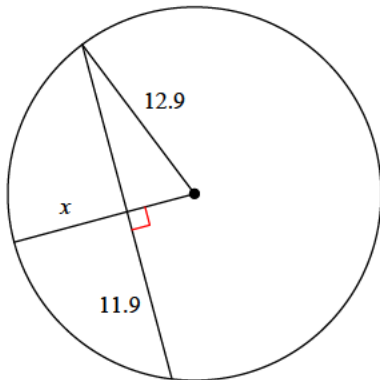
- A) 6.9
- B) 5.2
- C) 7.5
- D) 6.3

2)



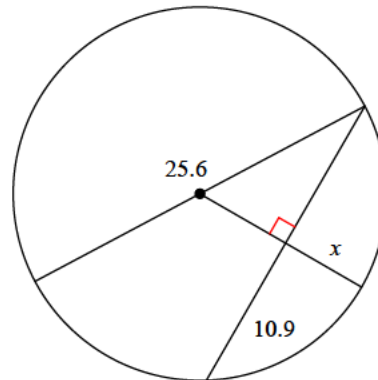
- A) 8.1
- B) 5.6
- C) 7.1
- D) 7

3)



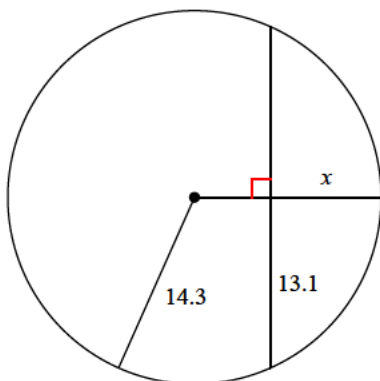
- A) 4.2
- B) 8.2
- C) 7.9
- D) 8.1

4)



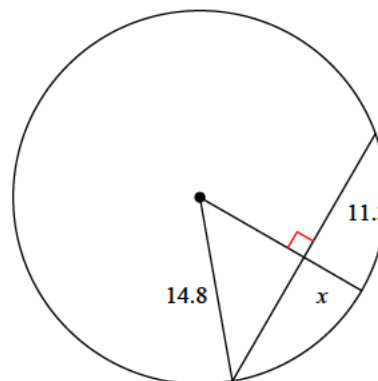
- A) 6.1
- B) 5.5
- C) 6.8
- D) 7.1

5)



- A) 8.3
- B) 10
- C) 5.2
- D) 8.6

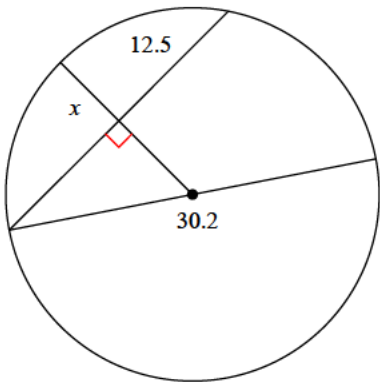
6)



- A) 5.2
- B) 2.6
- C) 5.4
- D) 6.3

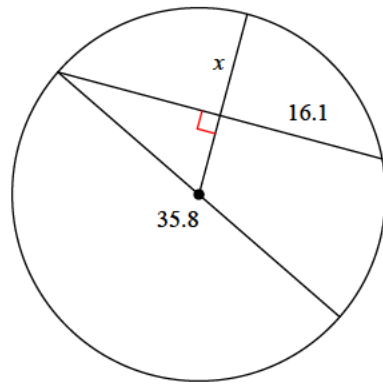


7)



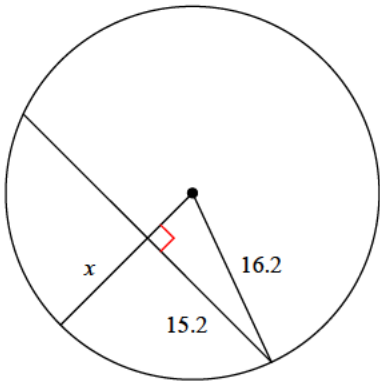
- A) 4 B) 6.6
C) 7.3 D) 6.1

8)



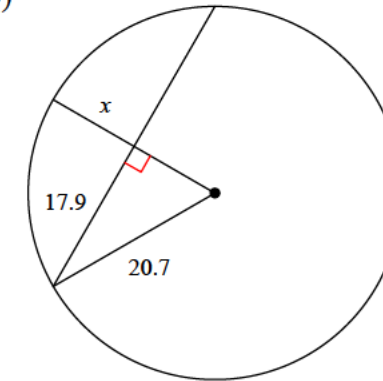
- A) 10.1 B) 14.4
C) 10 D) 10.6

9)



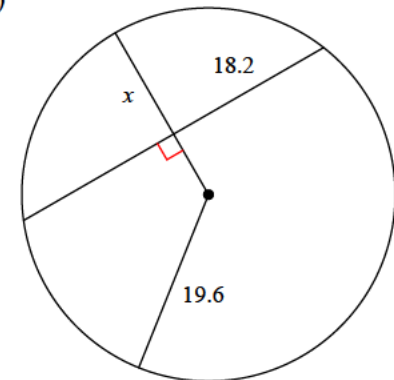
- A) 5.4 B) 8.7
C) 10.6 D) 5.9

10)



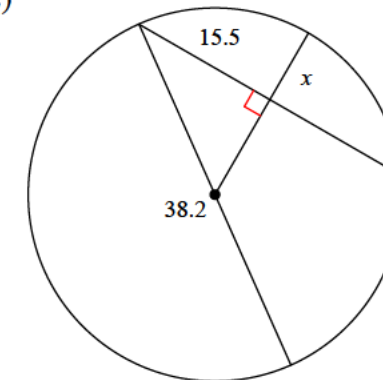
- A) 10.3 B) 10.5
C) 7.4 D) 15.3

11)



- A) 15.6 B) 12.3
C) 10 D) 10.1

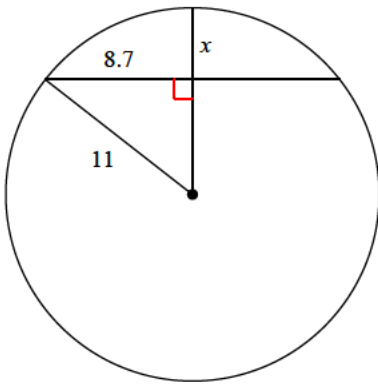
12)



- A) 9.4 B) 7.9
C) 11.4 D) 9.8

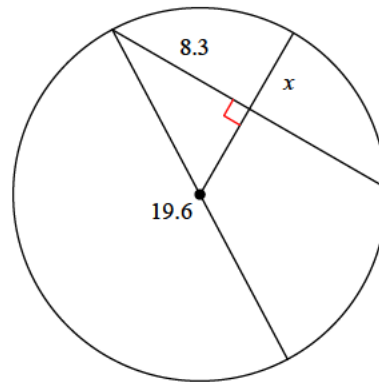


13)



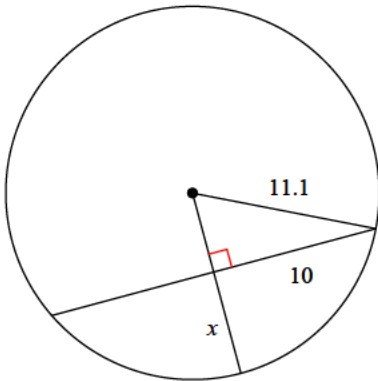
- A) 4.3 B) 3.5
C) 5.9 D) 3.2

14)



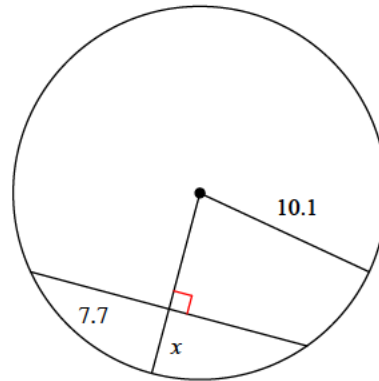
- A) 6.8 B) 6.7
C) 4.6 D) 6.4

15)



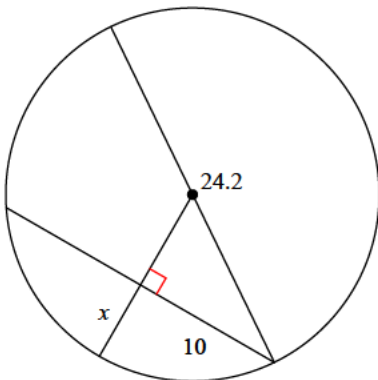
- A) 5.3 B) 6.3
C) 8.5 D) 9.4

16)



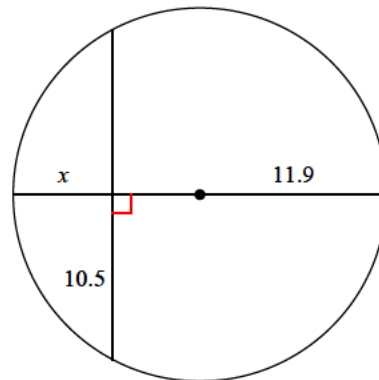
- A) 4.6 B) 3.6
C) 4.9 D) 4.3

17)



- A) 2.9 B) 3.7
C) 5.3 D) 3.5

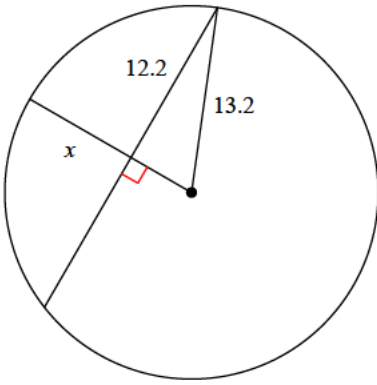
18)



- A) 6.3 B) 4.1
C) 9.1 D) 3.5

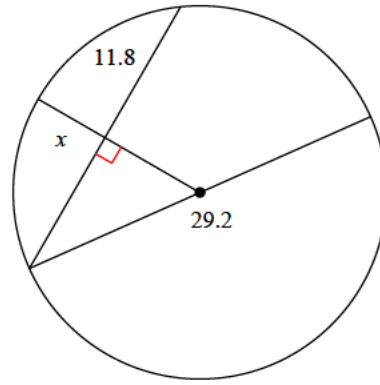


19)



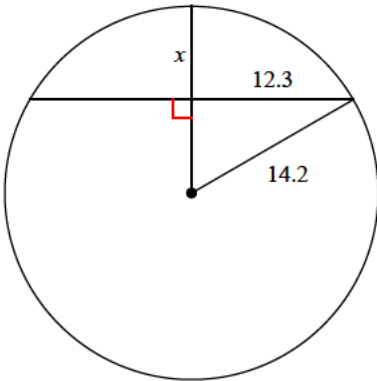
- A) 4.1 B) 5.5
C) 8.2 D) 9.4

20)



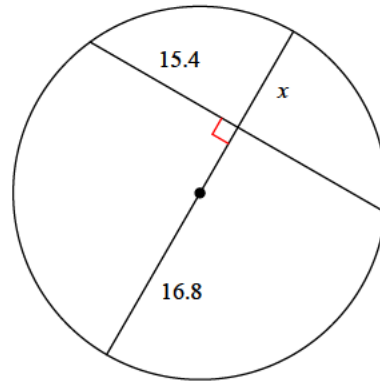
- A) 7.9 B) 6
C) 5.9 D) 3.2

21)



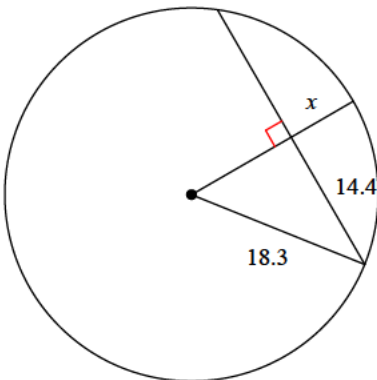
- A) 7.1 B) 5.8
C) 4 D) 4.8

22)



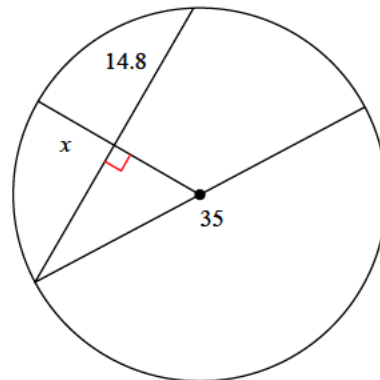
- A) 6.6 B) 7.6
C) 10.1 D) 13.6

23)



- A) 7 B) 7.6
C) 8.7 D) 7.5

24)



- A) 4.7 B) 4.8
C) 8.2 D) 10.7



Answers to Assignment (ID: 8)

1) A
5) D
9) C
13) A
17) C
21) A

2) B
6) A
10) A
14) C
18) A
22) C

3) C
7) B
11) B
15) B
19) C
23) A

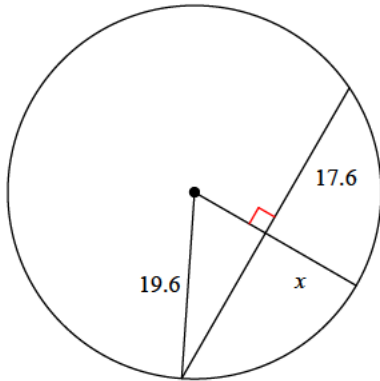
4) A
8) A
12) B
16) B
20) B
24) C



Assignment

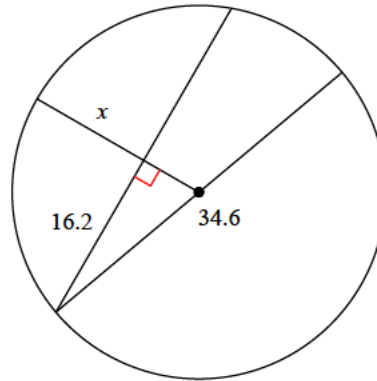
Find the length of the segment indicated. Round your answer to the nearest tenth if necessary.

1)



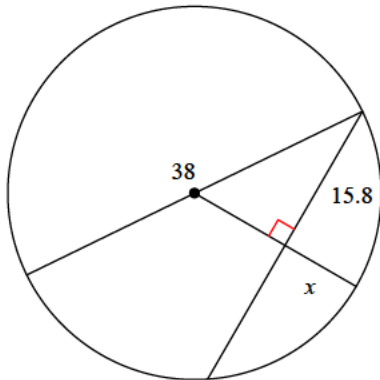
- A) 11
- B) 13.1
- C) 15.6
- D) 11.4

2)



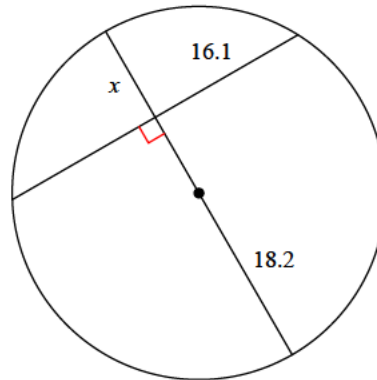
- A) 7.1
- B) 7.9
- C) 11.2
- D) 15.8

3)



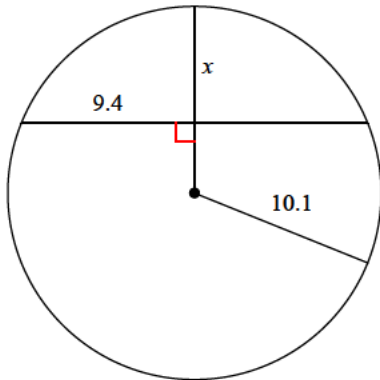
- A) 11.3
- B) 8.4
- C) 7.5
- D) 10.9

4)



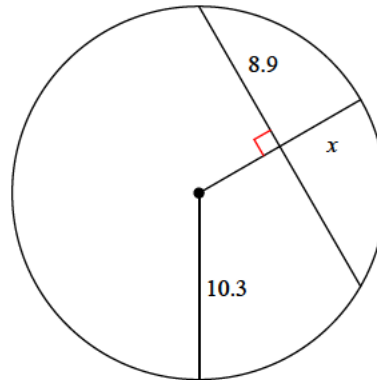
- A) 6.6
- B) 14.3
- C) 9.7
- D) 14.4

5)



- A) 5
- B) 9.4
- C) 3.2
- D) 6.4

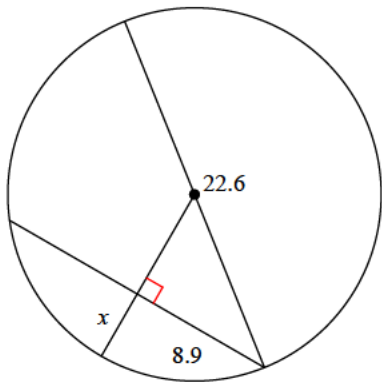
6)



- A) 3.4
- B) 7.4
- C) 4.6
- D) 5.1

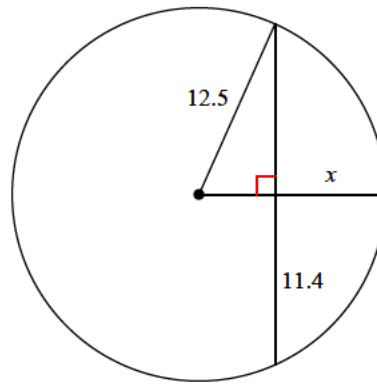


7)



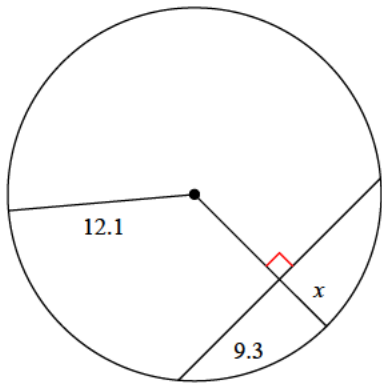
- A) 5.4 B) 5.9
C) 4.3 D) 3.1

8)



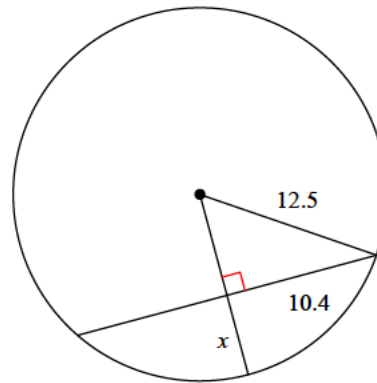
- A) 4.5 B) 5.6
C) 7.4 D) 7.1

9)



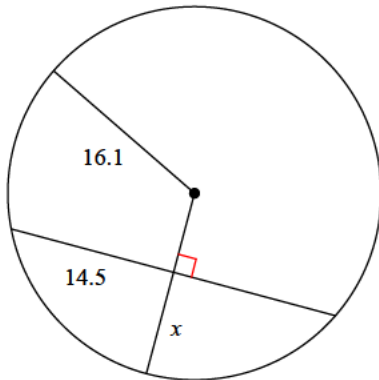
- A) 2.5 B) 4.7
C) 4.4 D) 4.3

10)



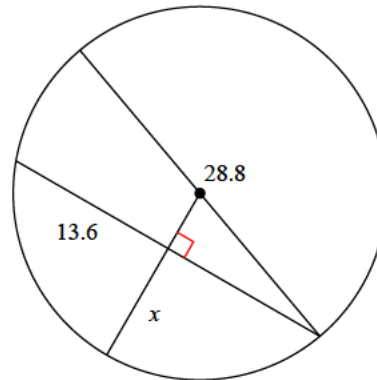
- A) 6.4 B) 6.9
C) 4.5 D) 5.6

11)



- A) 9.1 B) 8.6
C) 12.6 D) 11.4

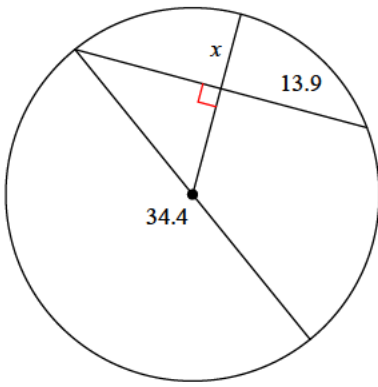
12)



- A) 9.7 B) 6.5
C) 12.8 D) 7.4

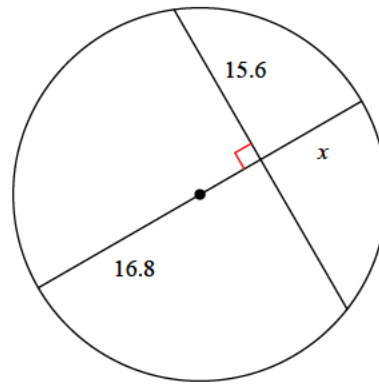


13)



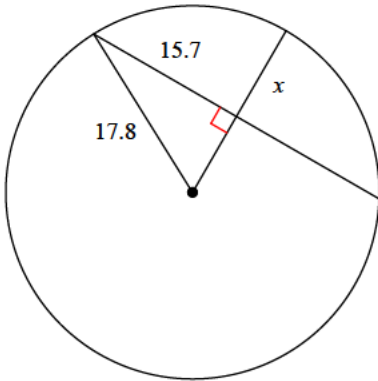
- A) 7.5 B) 5.5
C) 7.1 D) 7.7

14)



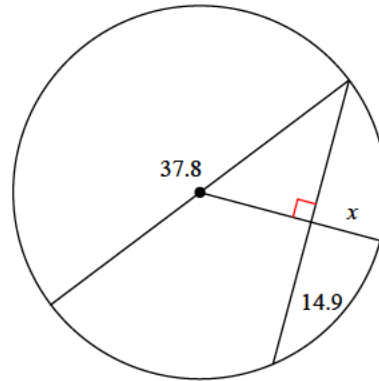
- A) 10.8 B) 9.1
C) 6.3 D) 10.6

15)



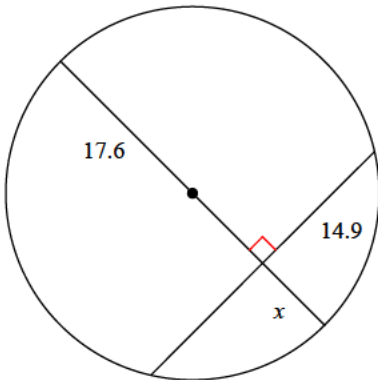
- A) 5.5 B) 11.2
C) 7 D) 9.4

16)



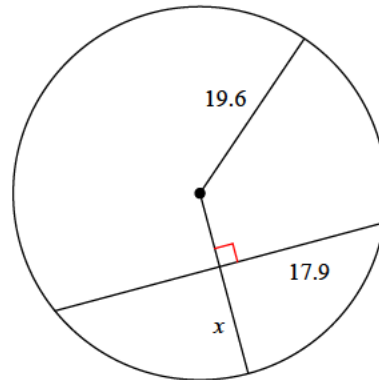
- A) 7.3 B) 3.6
C) 6.3 D) 5.5

17)



- A) 9 B) 5.9
C) 8.2 D) 11.1

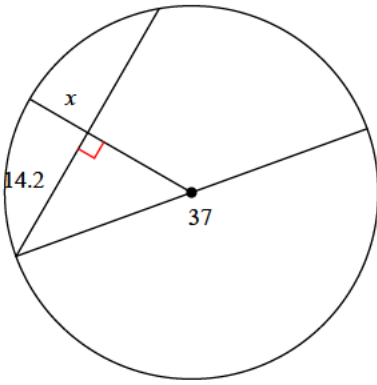
18)



- A) 11.6 B) 12.4
C) 8.1 D) 13.3

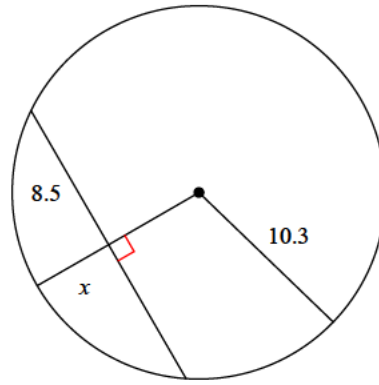


19)



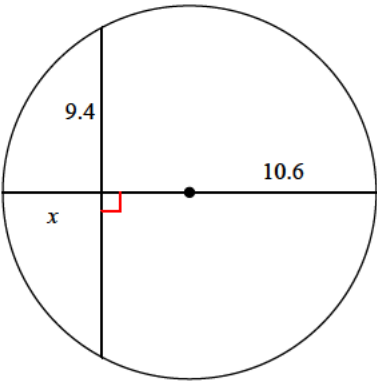
- A) 7.9 B) 6.6
C) 7.7 D) 3.4

20)



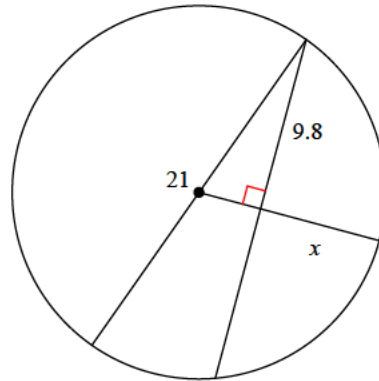
- A) 4.5 B) 3.3
C) 3.6 D) 2.7

21)



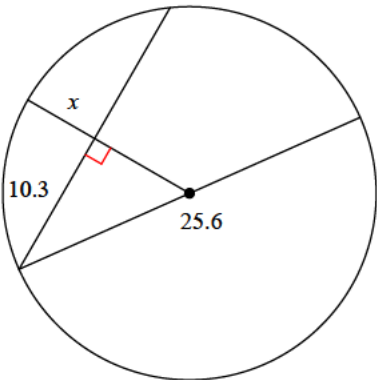
- A) 4.8 B) 3.7
C) 5.7 D) 5

22)



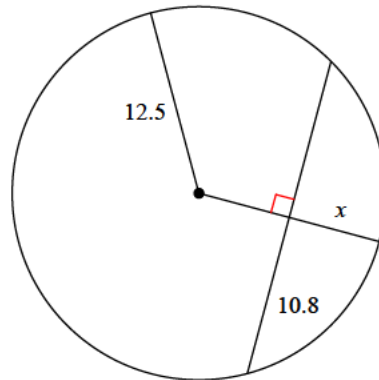
- A) 8.1 B) 6.7
C) 4.9 D) 7.1

23)



- A) 5.2 B) 5.7
C) 7.1 D) 5.4

24)



- A) 6.2 B) 8.3
C) 4.2 D) 4.6



Answers to Assignment (ID: 9)

1) A
5) D
9) C
13) C
17) C
21) C

2) C
6) D
10) D
14) D
18) A
22) B

3) B
7) C
11) A
15) D
19) B
23) A

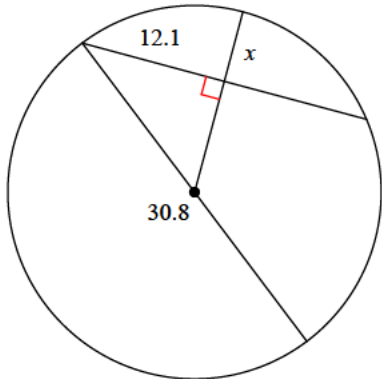
4) C
8) C
12) A
16) A
20) A
24) A



Assignment

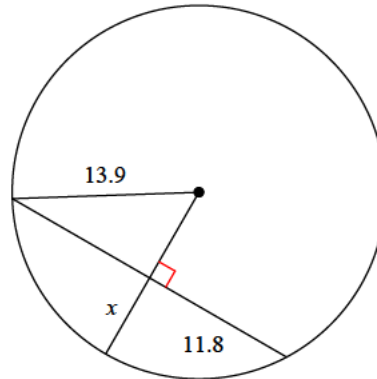
Find the length of the segment indicated. Round your answer to the nearest tenth if necessary.

1)



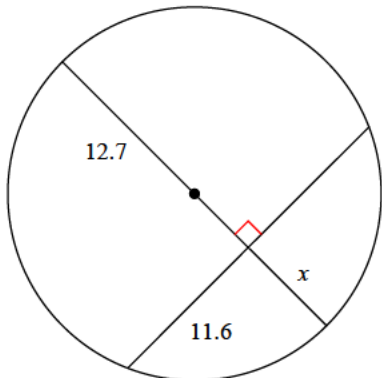
- A) 5.9
- B) 3.7
- C) 8
- D) 4.7

2)



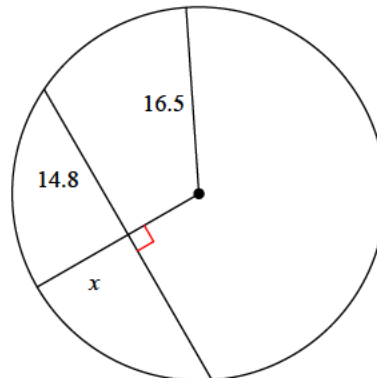
- A) 8.2
- B) 6.6
- C) 7.9
- D) 5.7

3)



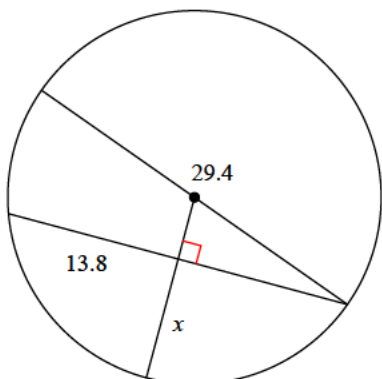
- A) 7.5
- B) 7.6
- C) 6.2
- D) 7.1

4)



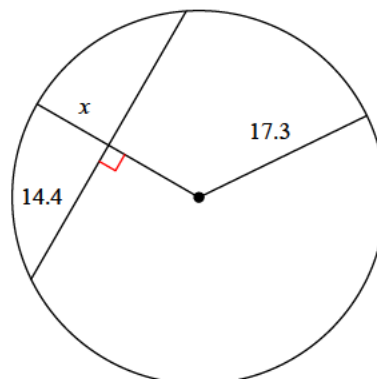
- A) 11.5
- B) 11
- C) 8.2
- D) 9.2

5)



- A) 12.7
- B) 9.6
- C) 12.4
- D) 8

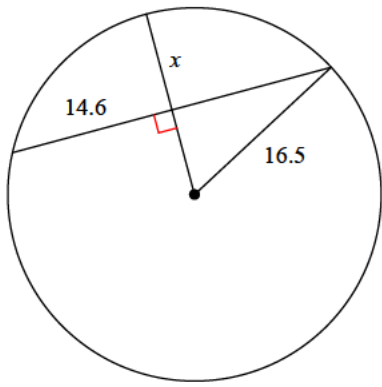
6)



- A) 5
- B) 8.5
- C) 6.5
- D) 7.7

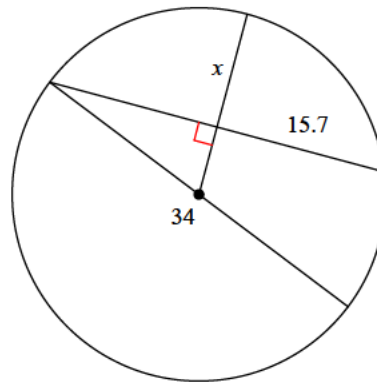


7)



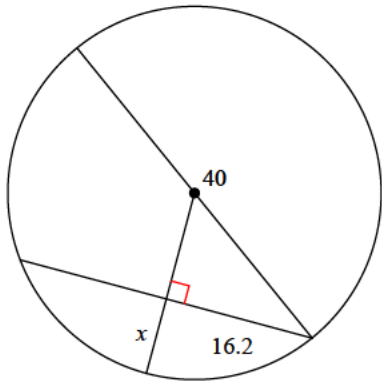
- A) 7.9 B) 6.6
C) 4.5 D) 8.8

8)



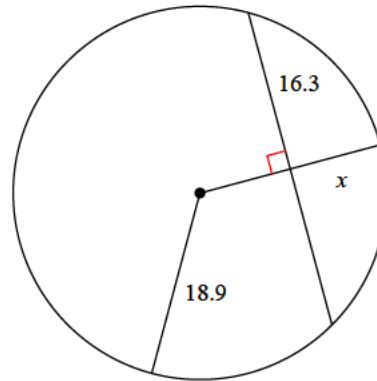
- A) 11.2 B) 7.4
C) 10.5 D) 7.5

9)



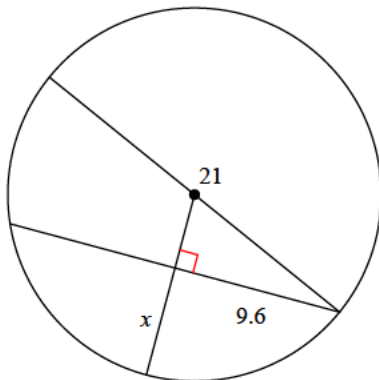
- A) 11.2 B) 6.8
C) 9.7 D) 8.3

10)



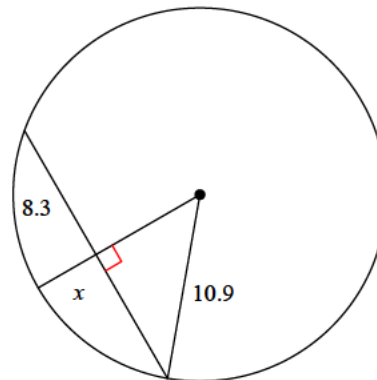
- A) 12.9 B) 12.4
C) 9.3 D) 9.1

11)



- A) 3.3 B) 5.7
C) 6.2 D) 8.1

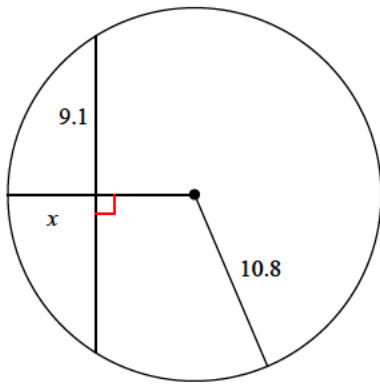
12)



- A) 5 B) 4.9
C) 3.8 D) 4.3

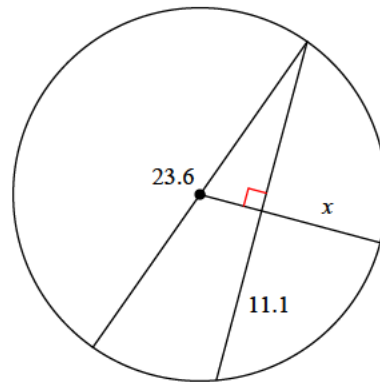


13)



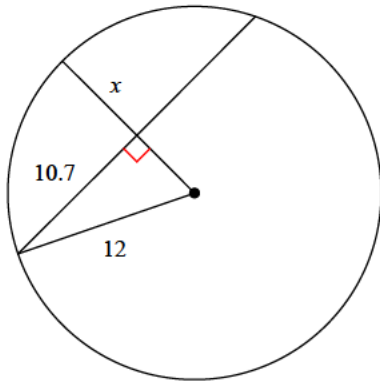
- A) 5 B) 7.1
C) 4.5 D) 6.8

14)



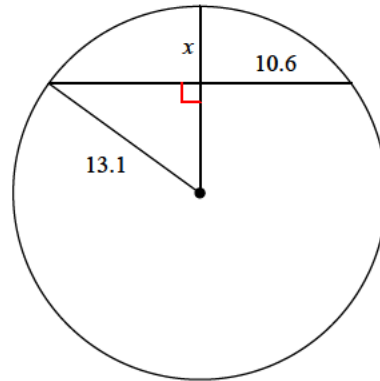
- A) 6.6 B) 7.8
C) 10.8 D) 7.2

15)



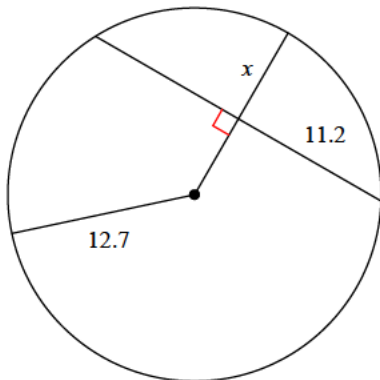
- A) 5 B) 6.6
C) 3.8 D) 9.4

16)



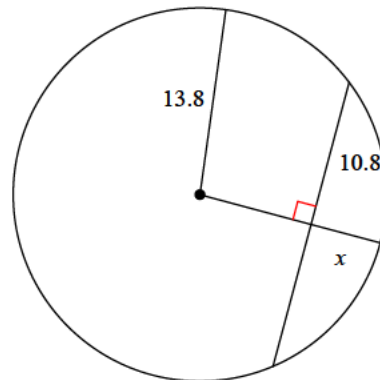
- A) 5.2 B) 4.5
C) 5.6 D) 5.4

17)



- A) 3.5 B) 8.2
C) 4.8 D) 6.7

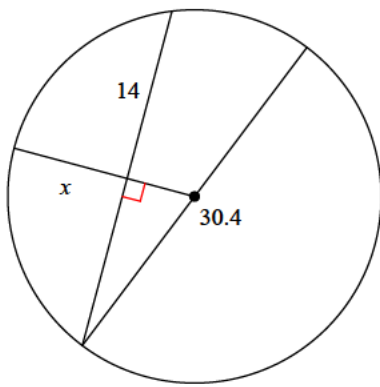
18)



- A) 6.4 B) 4.8
C) 5.9 D) 5.2

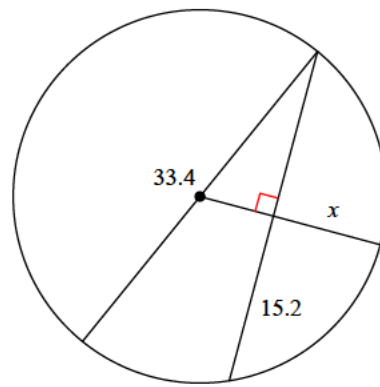


19)



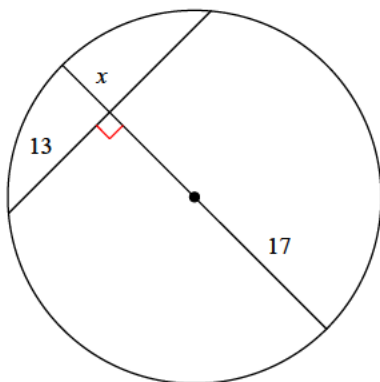
- A) 6.8 B) 9.3
C) 6.9 D) 9.9

20)



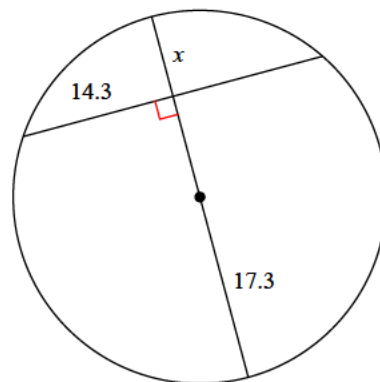
- A) 10.8 B) 13.4
C) 13.7 D) 9.8

21)



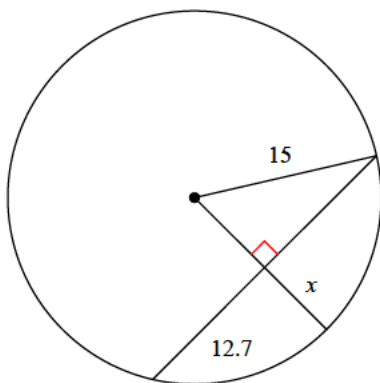
- A) 3.2 B) 6.5
C) 6 D) 9

22)



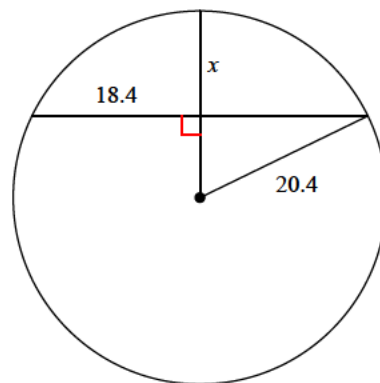
- A) 10.8 B) 11
C) 7.6 D) 7.3

23)



- A) 7 B) 4.5
C) 7.8 D) 5.9

24)



- A) 13.3 B) 7.9
C) 16 D) 11.6



Answers to Assignment (ID: 10)

1) A
5) B
9) D
13) A
17) D
21) C

2) B
6) D
10) C
14) B
18) D
22) C

3) A
7) D
11) C
15) B
19) B
23) A

4) D
8) C
12) C
16) D
20) D
24) D

