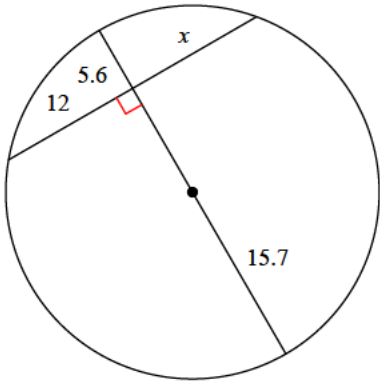


Assignment

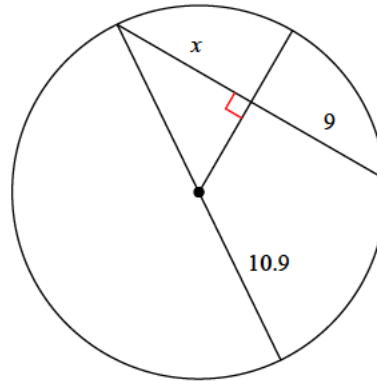
Find the length of the segment indicated. Round your answer to the nearest tenth if necessary.

1)



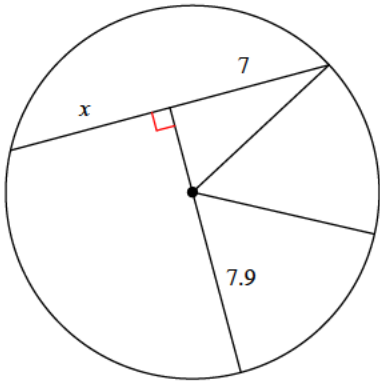
- A) 12
- B) 13.3
- C) 11.8
- D) 7.4

2)



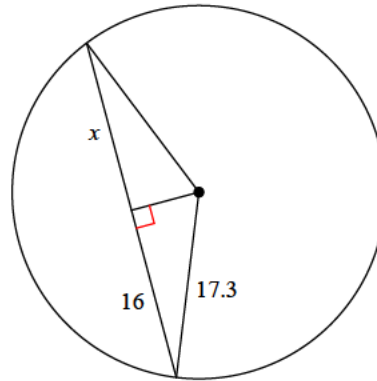
- A) 5.5
- B) 12
- C) 7.8
- D) 9

3)



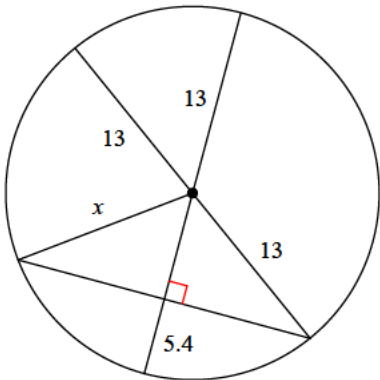
- A) 4.4
- B) 7
- C) 8.2
- D) 8

4)



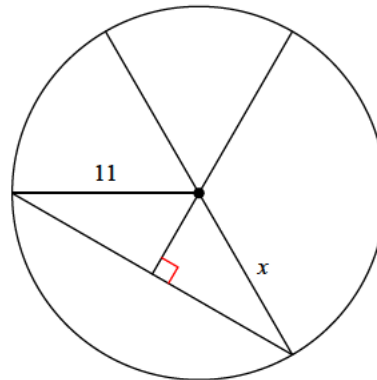
- A) 16
- B) 21.9
- C) 18.1
- D) 20.8

5)



- A) 13
- B) 14.2
- C) 12.2
- D) 11.1

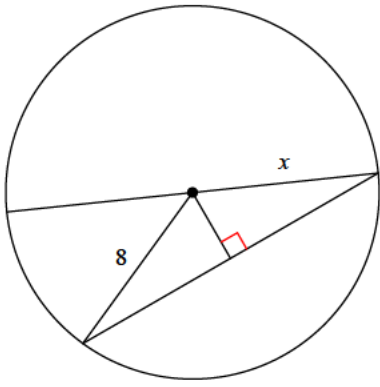
6)



- A) 11
- B) 15.5
- C) 12.3
- D) 6.8

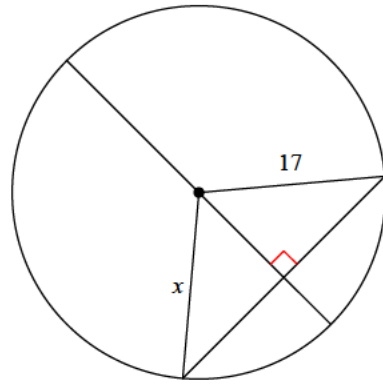


7)



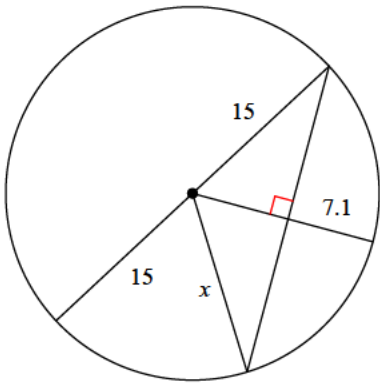
- A) 8 B) 11
C) 7.7 D) 11.9

8)



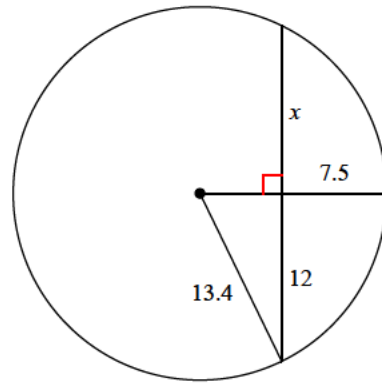
- A) 17 B) 13
C) 11 D) 15.9

9)



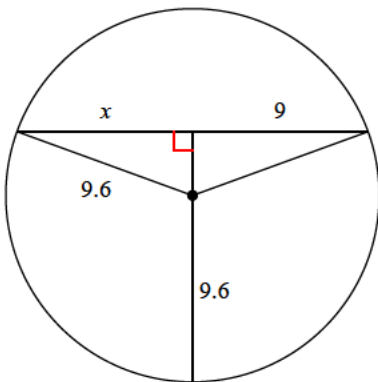
- A) 10 B) 11.8
C) 12.2 D) 15

10)



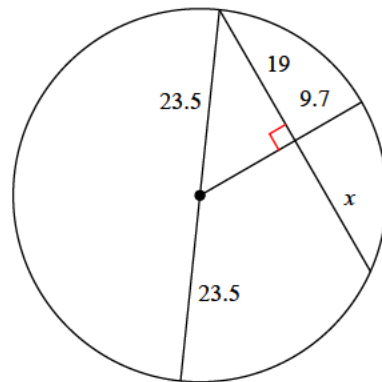
- A) 12 B) 8
C) 8.1 D) 9.3

11)



- A) 10.7 B) 9
C) 13.1 D) 9.4

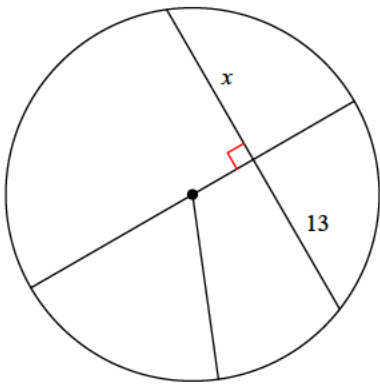
12)



- A) 19 B) 25.6
C) 22.3 D) 19.6

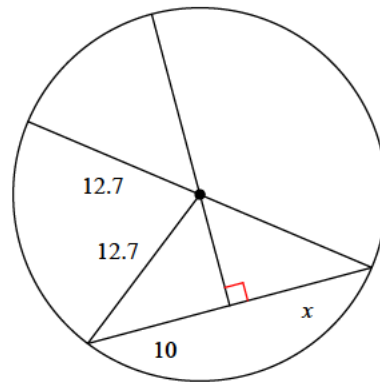


13)



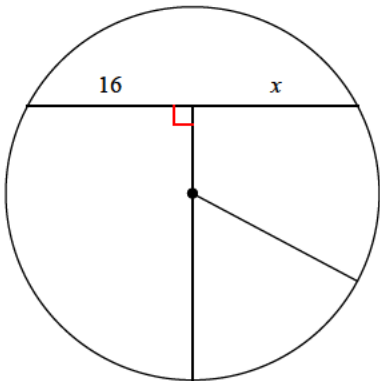
- A) 18 B) 13
C) 18.5 D) 9.9

14)



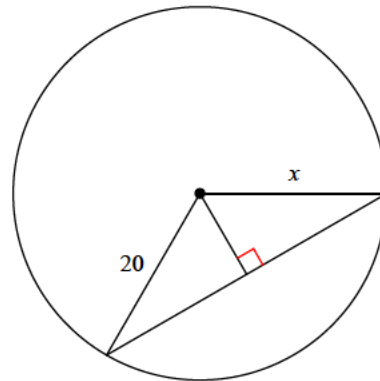
- A) 8.9 B) 10
C) 12.5 D) 10.3

15)



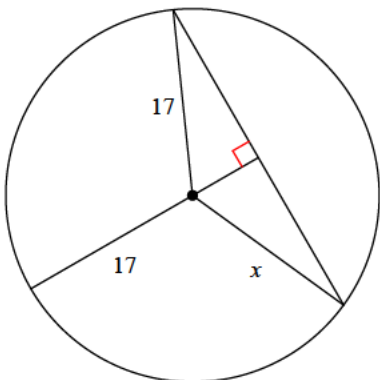
- A) 16 B) 11
C) 11.1 D) 20.6

16)



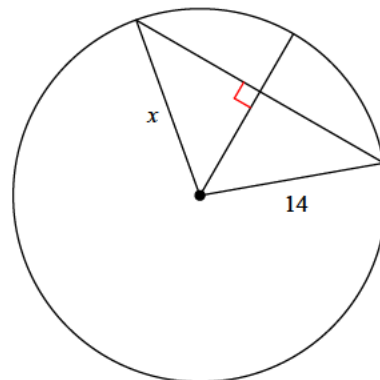
- A) 27.7 B) 20
C) 10.8 D) 21.1

17)



- A) 18.5 B) 11.3
C) 17 D) 18.7

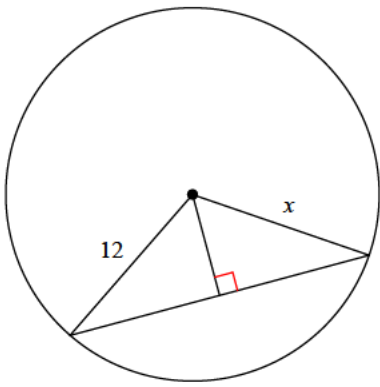
18)



- A) 12.1 B) 17.9
C) 10 D) 14

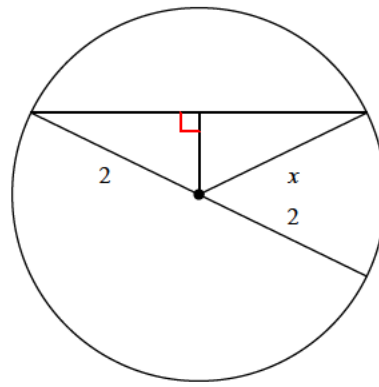


19)



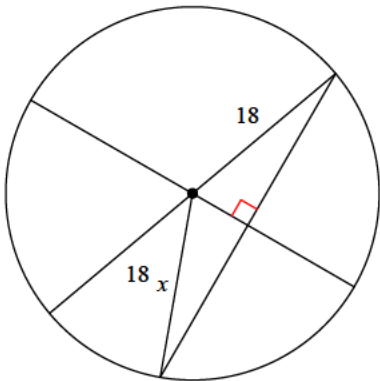
- A) 15.1 B) 12
C) 11.4 D) 15.8

20)



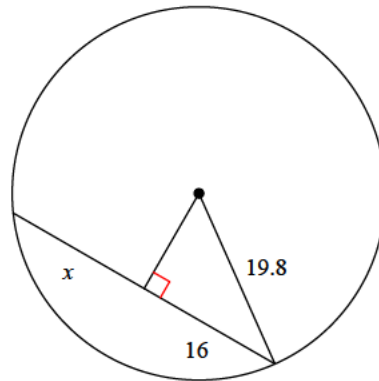
- A) 2.7 B) 2.2
C) 2 D) 2.8

21)



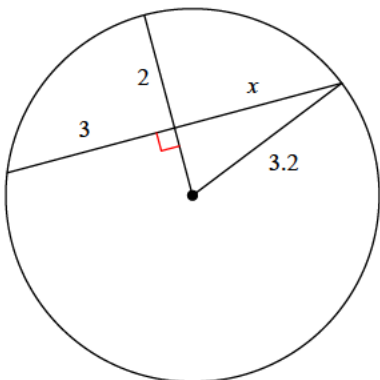
- A) 18 B) 25
C) 20.7 D) 17.9

22)



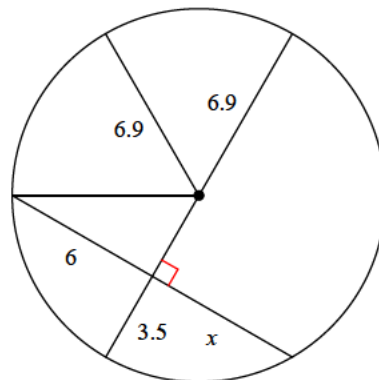
- A) 13.7 B) 20.3
C) 17.2 D) 16

23)



- A) 3.1 B) 2.8
C) 3 D) 2.6

24)



- A) 3 B) 6
C) 7.9 D) 8.2



Answers to Assignment (ID: 1)

1) A
5) A
9) D
13) B
17) C
21) A

2) D
6) A
10) A
14) B
18) D
22) D

3) B
7) A
11) B
15) A
19) B
23) C

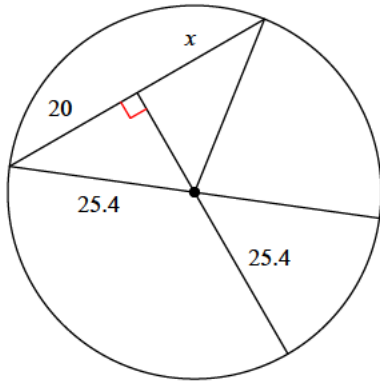
4) A
8) A
12) A
16) B
20) C
24) B



Assignment

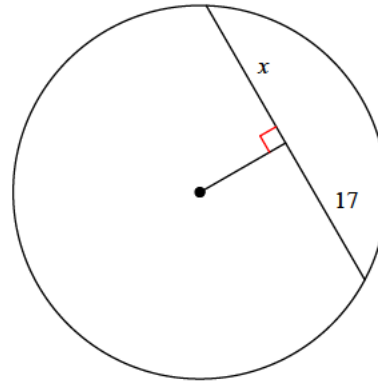
Find the length of the segment indicated. Round your answer to the nearest tenth if necessary.

1)



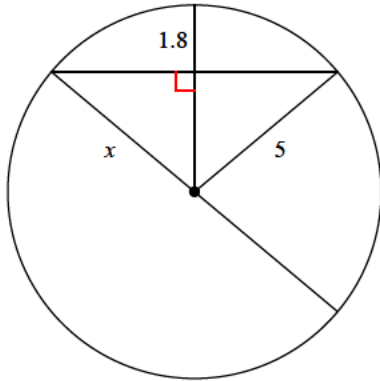
- A) 20.4
- B) 12.9
- C) 19.9
- D) 20

2)



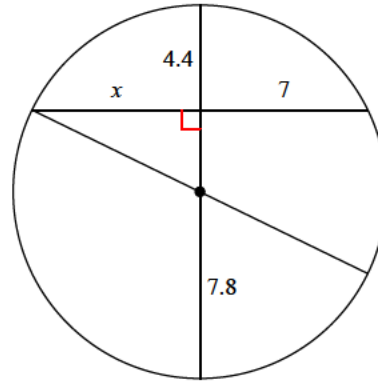
- A) 21.7
- B) 17
- C) 23.8
- D) 9.2

3)



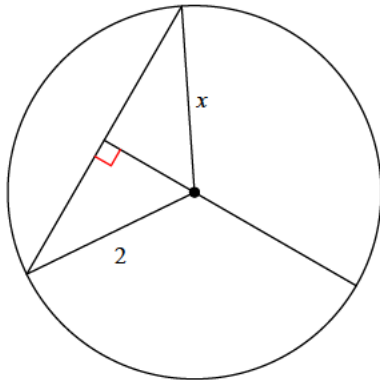
- A) 5
- B) 6.8
- C) 3.4
- D) 6.4

4)



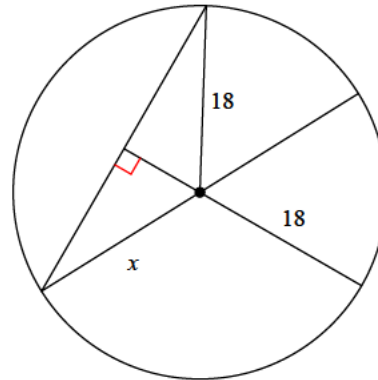
- A) 6.6
- B) 7.9
- C) 7
- D) 7.7

5)



- A) 2.2
- B) 2.3
- C) 2.4
- D) 2

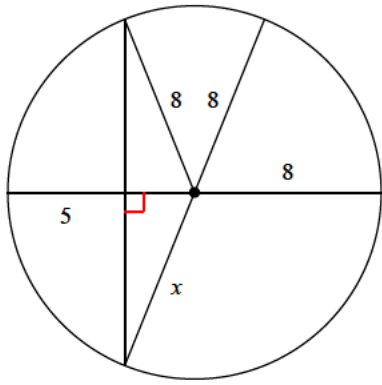
6)



- A) 11.4
- B) 9.8
- C) 18
- D) 14.2

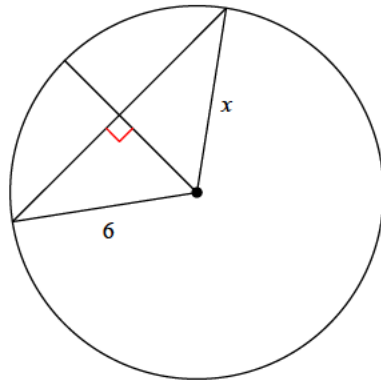


7)



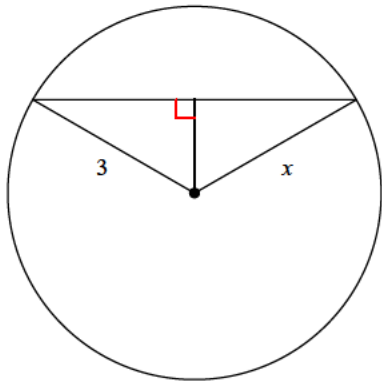
- A) 8 B) 11.8
C) 10.3 D) 5.8

8)



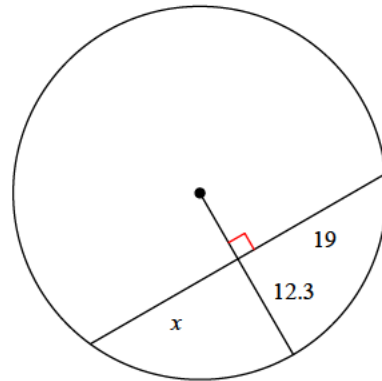
- A) 6 B) 3.7
C) 3.6 D) 6.1

9)



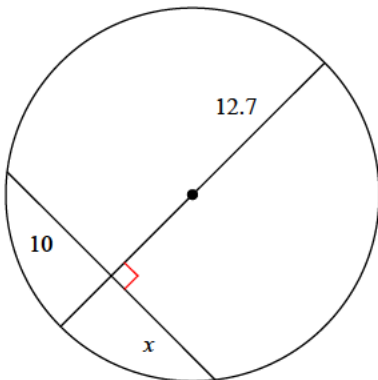
- A) 3 B) 3.1
C) 3.9 D) 4

10)



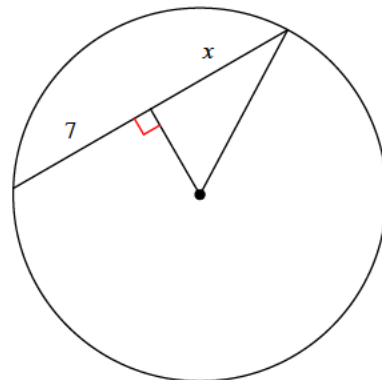
- A) 19 B) 17
C) 11.1 D) 26.1

11)



- A) 10 B) 12.1
C) 13.3 D) 14

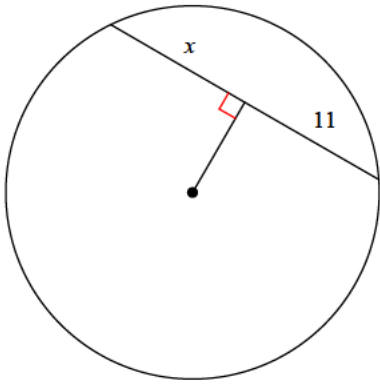
12)



- A) 5.1 B) 7
C) 5.9 D) 9.7

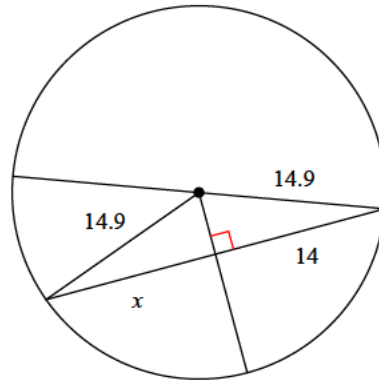


13)



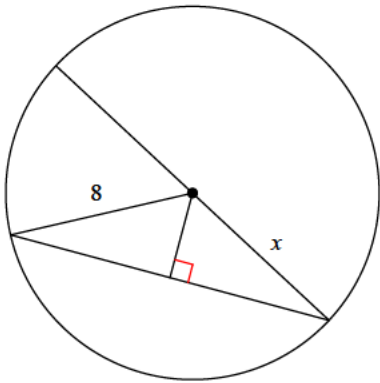
- A) 7.4 B) 11.2
C) 11 D) 14.1

14)



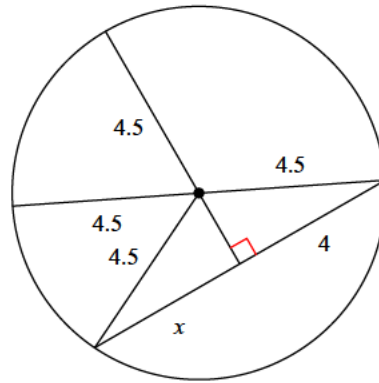
- A) 12.6 B) 14
C) 19.8 D) 17.5

15)



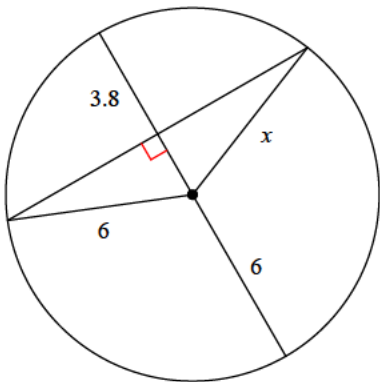
- A) 7.3 B) 8.6
C) 9.9 D) 8

16)



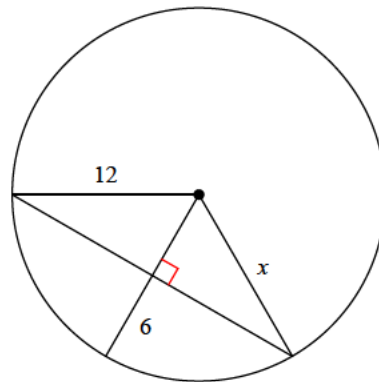
- A) 4 B) 5.6
C) 2.7 D) 4.6

17)



- A) 5.6 B) 6.9
C) 8.7 D) 6

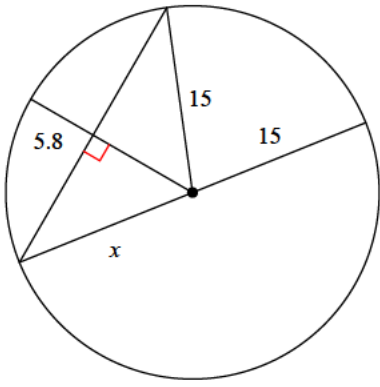
18)



- A) 10.5 B) 11.9
C) 12 D) 6.4

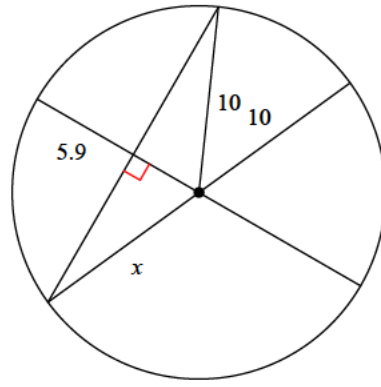


19)



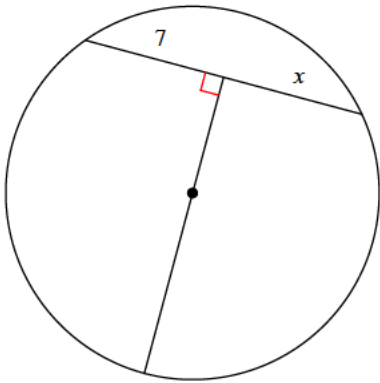
- A) 8.7 B) 15
C) 14.4 D) 9.6

20)



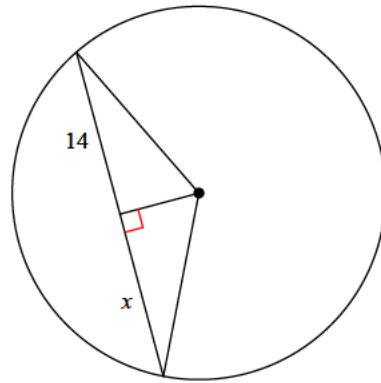
- A) 8 B) 10.1
C) 13.1 D) 10

21)



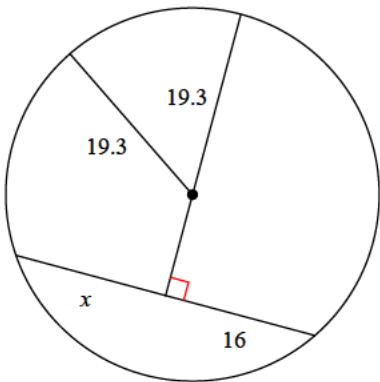
- A) 5 B) 7.2
C) 7 D) 4.8

22)



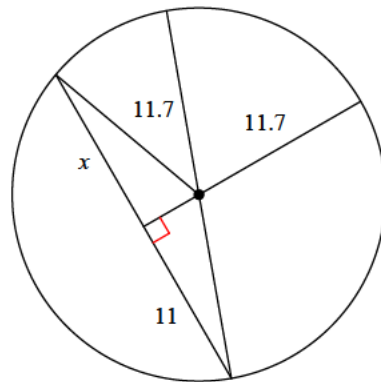
- A) 14.4 B) 17.6
C) 14 D) 7

23)



- A) 15.4 B) 20
C) 14.1 D) 16

24)



- A) 5.5 B) 11
C) 10.6 D) 15.3



Answers to Assignment (ID: 2)

1) D
5) D
9) A
13) C
17) D
21) C

2) B
6) C
10) A
14) B
18) C
22) C

3) A
7) A
11) A
15) D
19) B
23) D

4) C
8) A
12) B
16) A
20) D
24) B

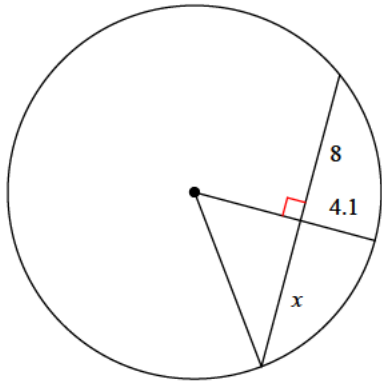


Assignment

Date _____ Period _____

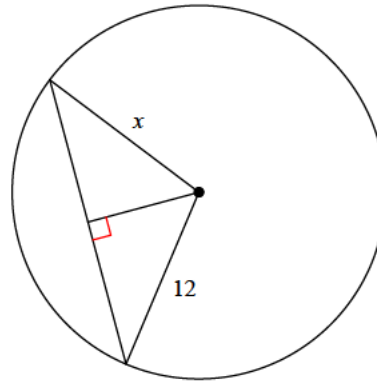
Find the length of the segment indicated. Round your answer to the nearest tenth if necessary.

1)



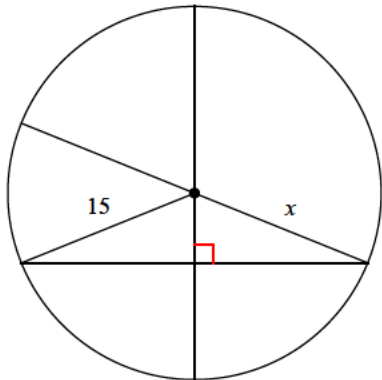
- A) 6
- B) 8
- C) 6.5
- D) 9.3

2)



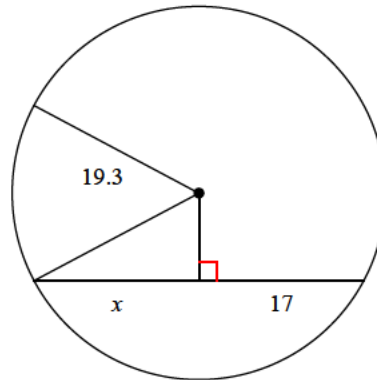
- A) 16.5
- B) 15.2
- C) 12
- D) 17.1

3)



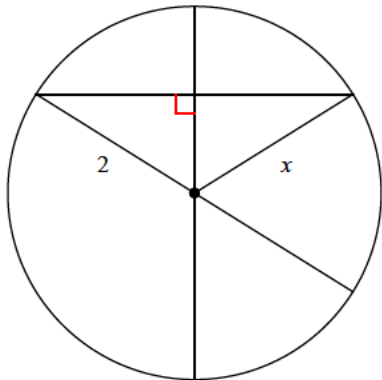
- A) 12.3
- B) 18.8
- C) 15
- D) 9.2

4)



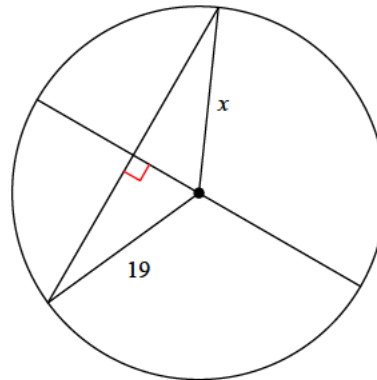
- A) 16.2
- B) 15.5
- C) 17.3
- D) 17

5)



- A) 2.1
- B) 2
- C) 2.8
- D) 2.6

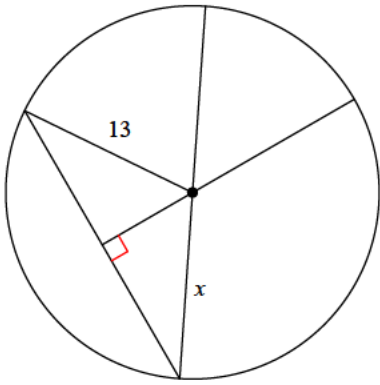
6)



- A) 10
- B) 26
- C) 13.7
- D) 19

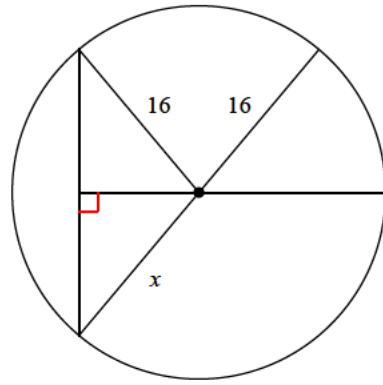


7)



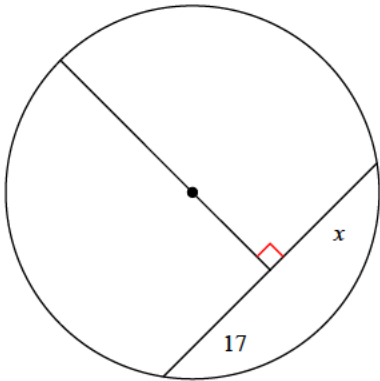
- A) 14.5 B) 12.8
C) 13 D) 19.2

8)



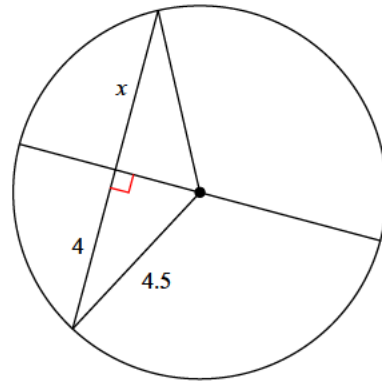
- A) 23.1 B) 10.2
C) 16 D) 14.2

9)



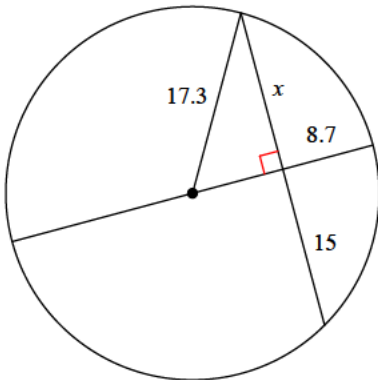
- A) 20.5 B) 9.1
C) 16 D) 17

10)



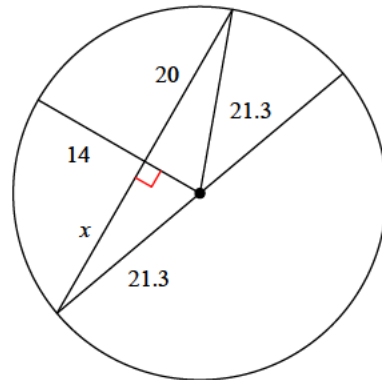
- A) 4 B) 2.5
C) 3 D) 3.3

11)



- A) 10.9 B) 14.3
C) 15 D) 14.7

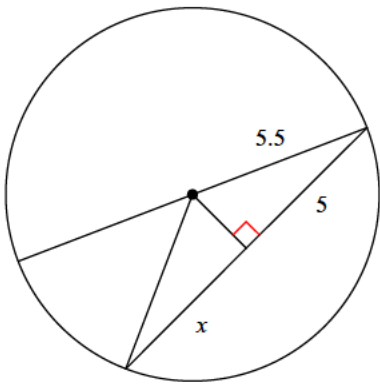
12)



- A) 25.6 B) 11.6
C) 20 D) 23.8

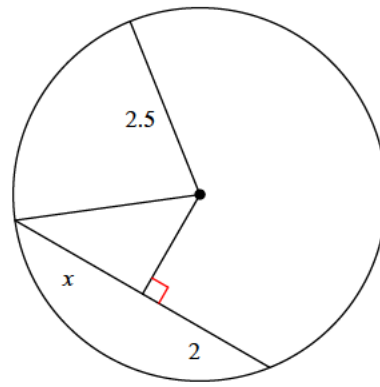


13)



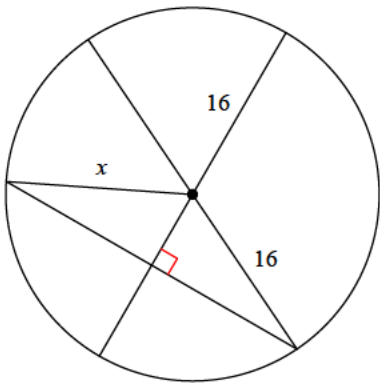
- A) 3.4 B) 4.7
C) 7 D) 5

14)



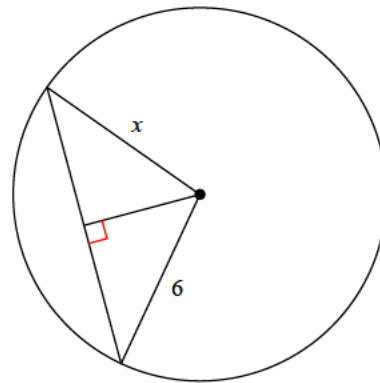
- A) 2.5 B) 2
C) 2.4 D) 2.8

15)



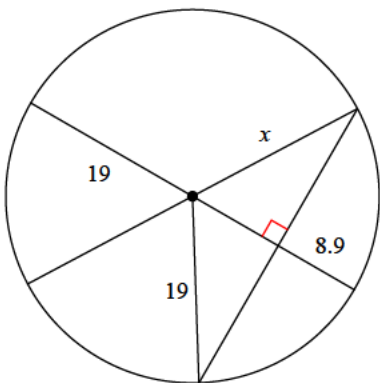
- A) 19.2 B) 10.1
C) 16.4 D) 16

16)



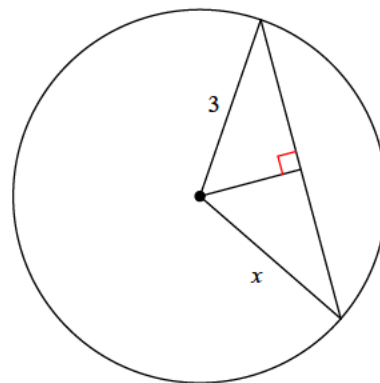
- A) 5.8 B) 5.1
C) 8.6 D) 6

17)



- A) 27 B) 16.6
C) 15.1 D) 19

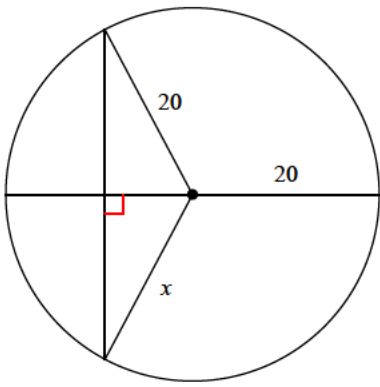
18)



- A) 2.5 B) 3.2
C) 3 D) 4.4

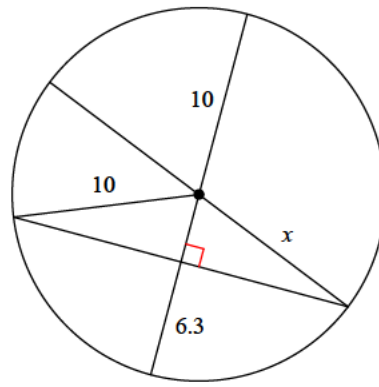


19)



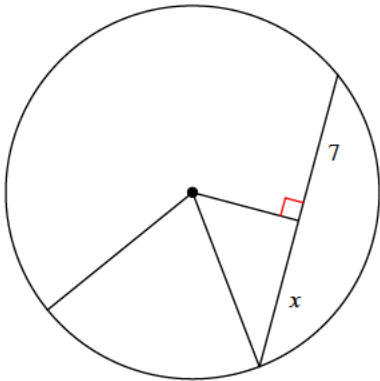
- A) 10.6 B) 18.8
C) 20 D) 16.8

20)



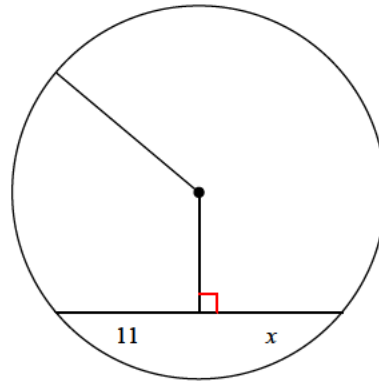
- A) 7.2 B) 8.8
C) 13.8 D) 10

21)



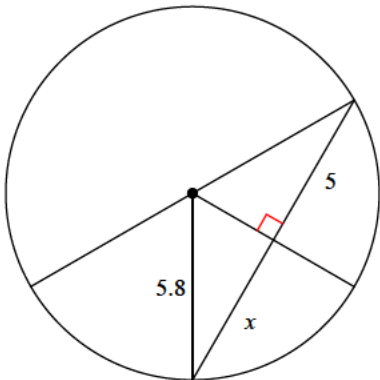
- A) 6.5 B) 9.8
C) 7.1 D) 7

22)



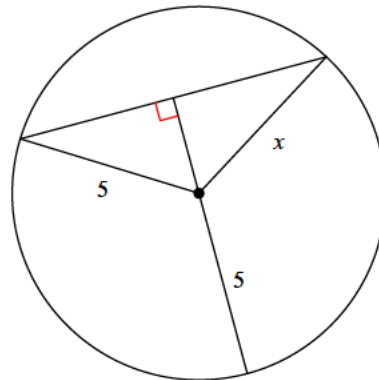
- A) 12.4 B) 11.2
C) 11 D) 10.3

23)



- A) 5 B) 4.6
C) 6.8 D) 3.5

24)



- A) 5 B) 5.6
C) 7 D) 7.1



Answers to Assignment (ID: 3)

1) B
5) B
9) D
13) D
17) D
21) D

2) C
6) D
10) A
14) B
18) C
22) C

3) C
7) C
11) C
15) D
19) C
23) A

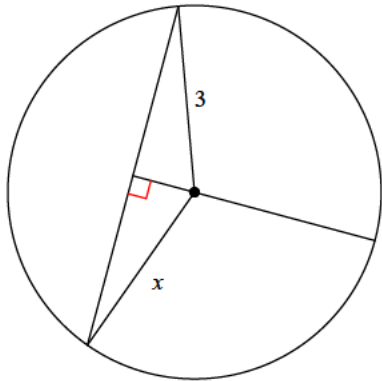
4) D
8) C
12) C
16) D
20) D
24) A



Assignment

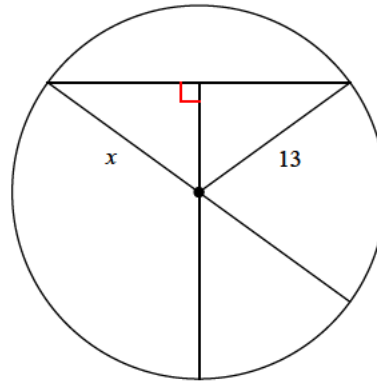
Find the length of the segment indicated. Round your answer to the nearest tenth if necessary.

1)



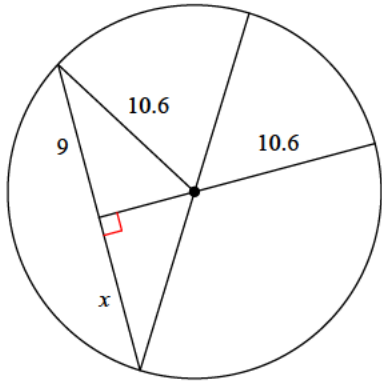
- A) 2.4
- B) 3
- C) 4
- D) 3.4

2)



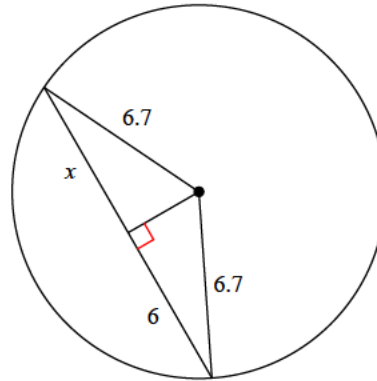
- A) 17
- B) 8.6
- C) 9.9
- D) 13

3)



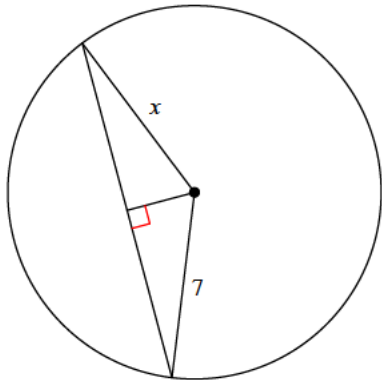
- A) 7.4
- B) 9
- C) 8.8
- D) 10.4

4)



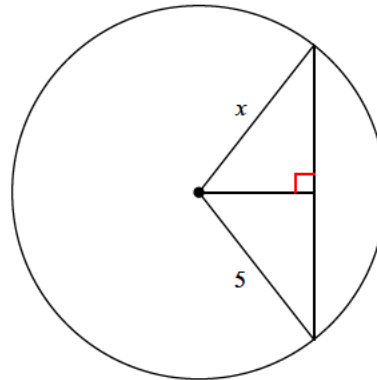
- A) 8.3
- B) 6
- C) 6.5
- D) 8

5)



- A) 7.4
- B) 6.2
- C) 7
- D) 4.8

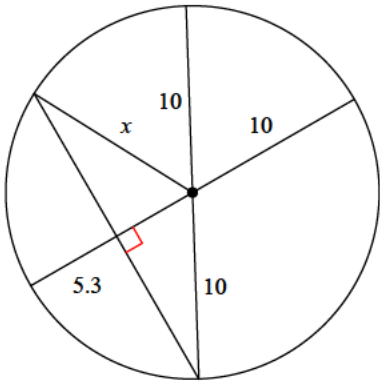
6)



- A) 5
- B) 6.2
- C) 2.7
- D) 6.6

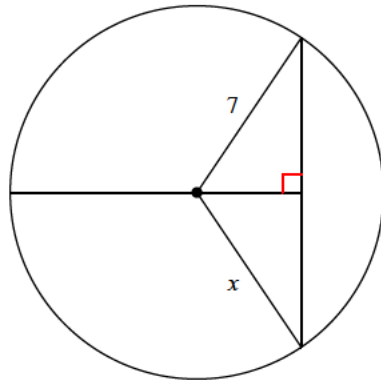


7)



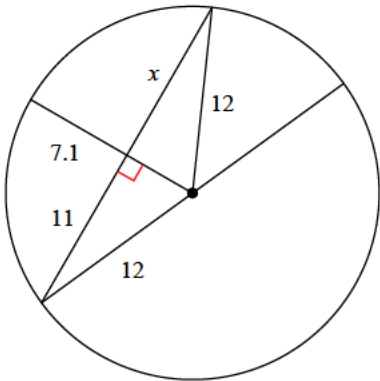
- A) 10 B) 5.2
C) 10.6 D) 11.9

8)



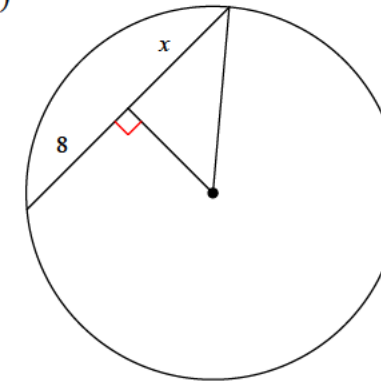
- A) 7 B) 4.7
C) 10.2 D) 4

9)



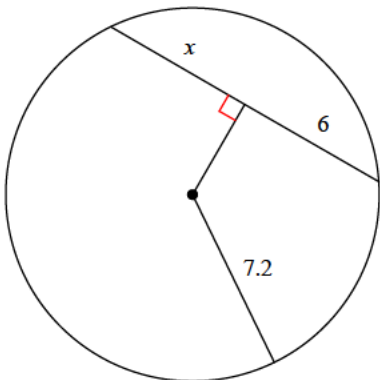
- A) 14.7 B) 13.6
C) 14.2 D) 11

10)



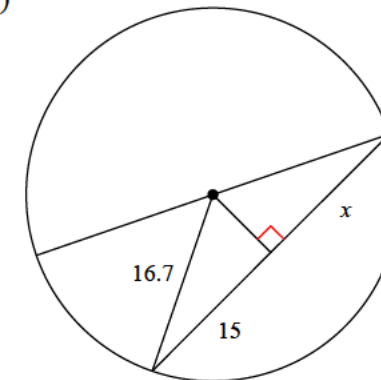
- A) 5.1 B) 8.9
C) 11.2 D) 8

11)



- A) 6 B) 3.3
C) 5.5 D) 6.4

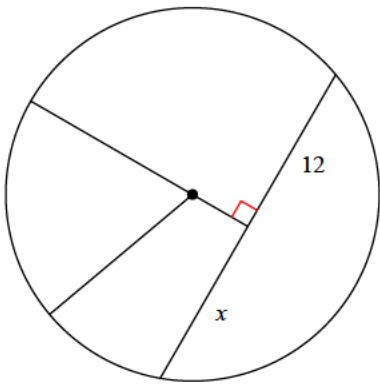
12)



- A) 15.9 B) 20.7
C) 9.2 D) 15

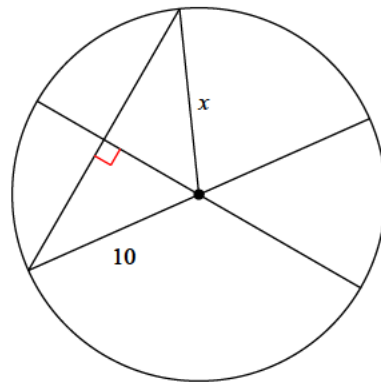


13)



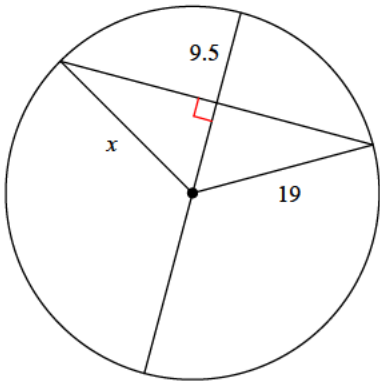
- A) 12 B) 11.3
C) 10 D) 14.2

14)



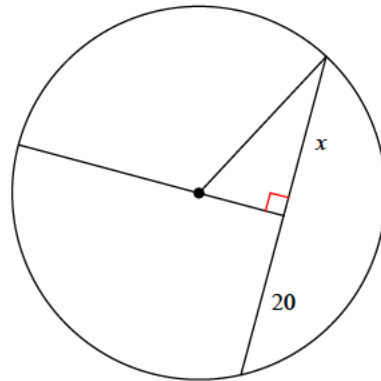
- A) 13.3 B) 11
C) 10 D) 13.1

15)



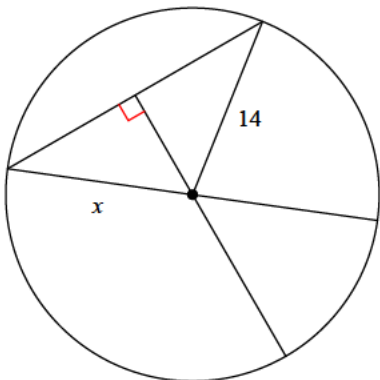
- A) 27.4 B) 22.7
C) 19 D) 27.7

16)



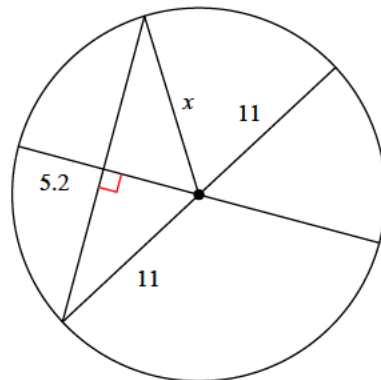
- A) 10.5 B) 15.9
C) 17.2 D) 20

17)



- A) 16.3 B) 14
C) 13.2 D) 11.3

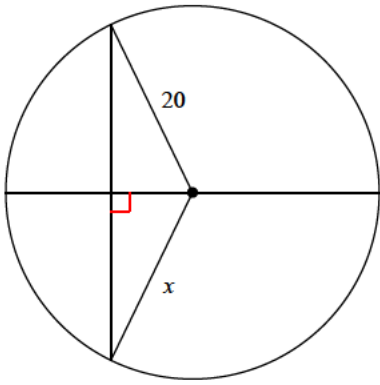
18)



- A) 11 B) 15.1
C) 13.9 D) 5.7

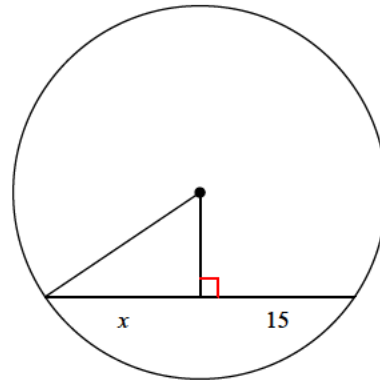


19)



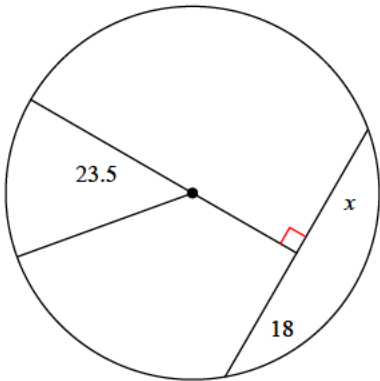
- A) 11.1 B) 20
C) 24.5 D) 27

20)



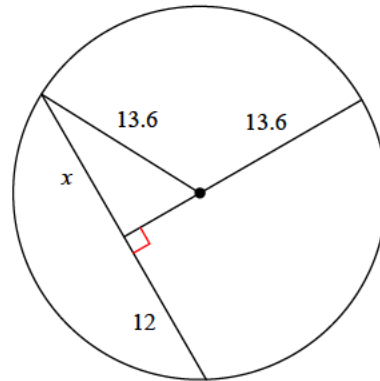
- A) 15 B) 14.6
C) 10.8 D) 14.8

21)



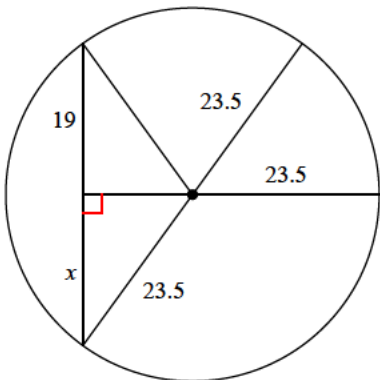
- A) 10.8 B) 18
C) 13.4 D) 14.6

22)



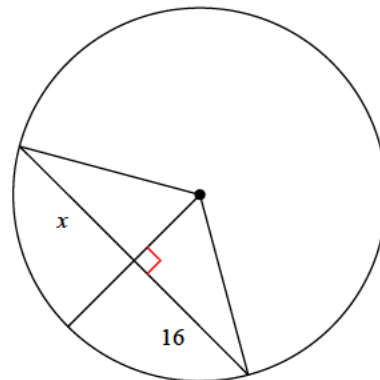
- A) 8.9 B) 16.8
C) 12 D) 14.9

23)



- A) 25.9 B) 15.5
C) 23.9 D) 19

24)



- A) 22.1 B) 16
C) 23.6 D) 14.4



Answers to Assignment (ID: 4)

1) B
5) C
9) D
13) A
17) B
21) B

2) D
6) A
10) D
14) C
18) A
22) C

3) B
7) A
11) A
15) C
19) B
23) D

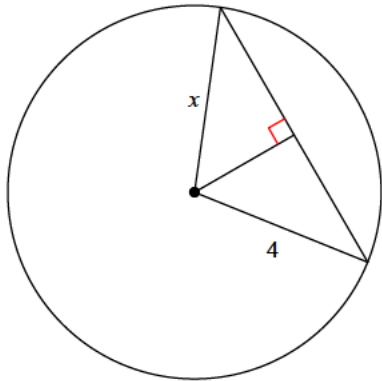
4) B
8) A
12) D
16) D
20) A
24) B



Assignment

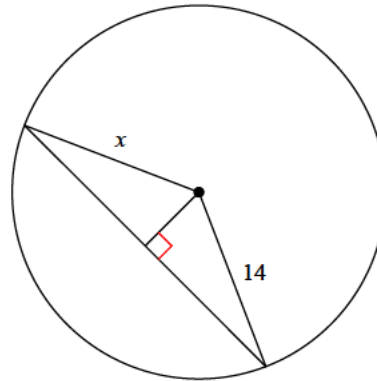
Find the length of the segment indicated. Round your answer to the nearest tenth if necessary.

1)



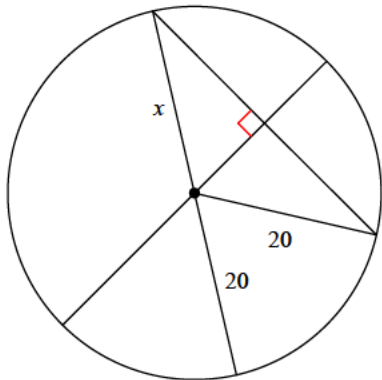
- A) 3.9
- B) 4
- C) 5.4
- D) 5.8

2)



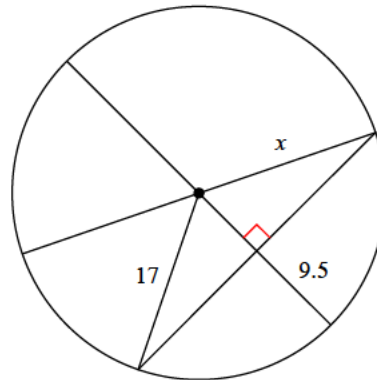
- A) 12.6
- B) 11.8
- C) 14
- D) 9.9

3)



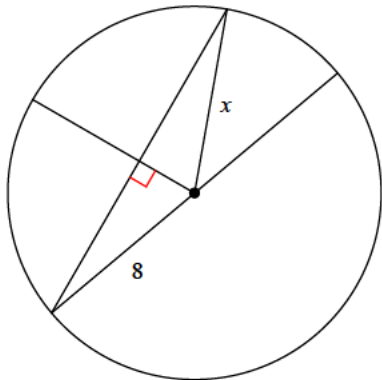
- A) 19.6
- B) 20
- C) 17.6
- D) 11.8

4)



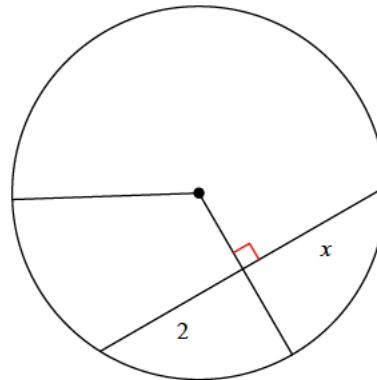
- A) 13
- B) 17
- C) 17.4
- D) 23.9

5)



- A) 4.7
- B) 8.5
- C) 11.9
- D) 8

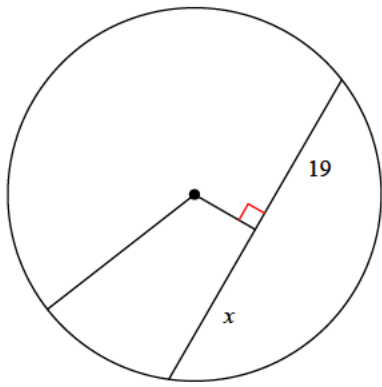
6)



- A) 2
- B) 2.8
- C) 2.2
- D) 2.7

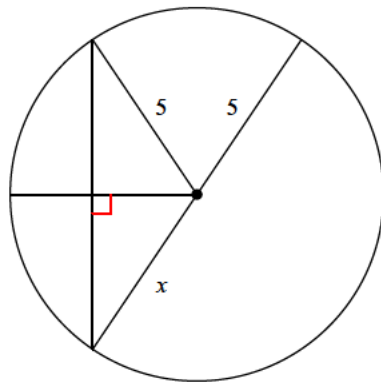


7)



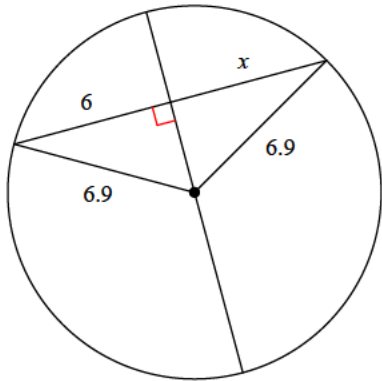
- A) 12.5 B) 21.7
C) 28.4 D) 19

8)



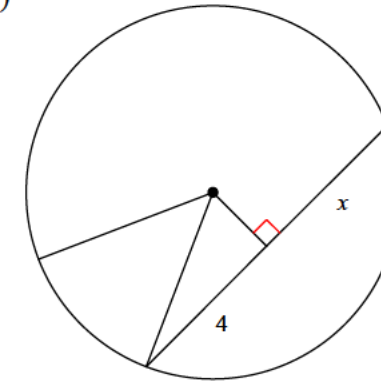
- A) 4.3 B) 5
C) 4 D) 6.6

9)



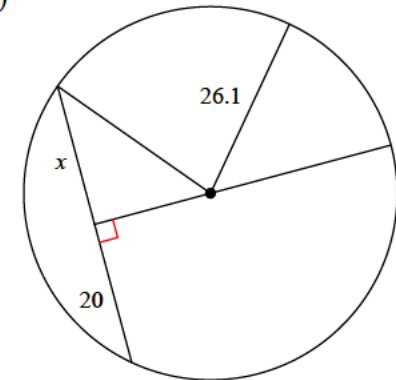
- A) 3.3 B) 8
C) 3.5 D) 6

10)



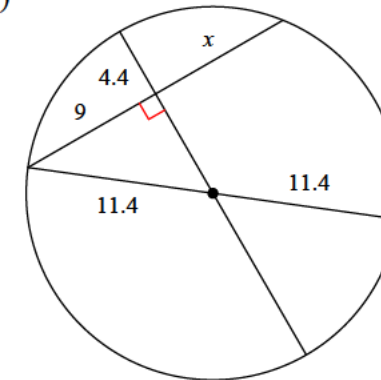
- A) 6 B) 4
C) 4.1 D) 2.4

11)



- A) 20 B) 16
C) 12.4 D) 18.9

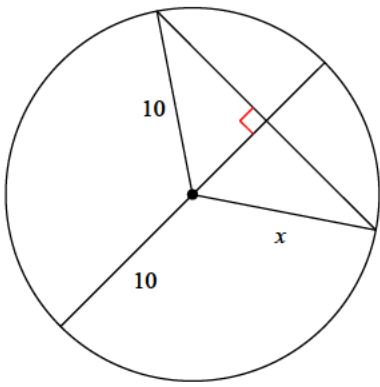
12)



- A) 7.4 B) 6.1
C) 9 D) 8.9

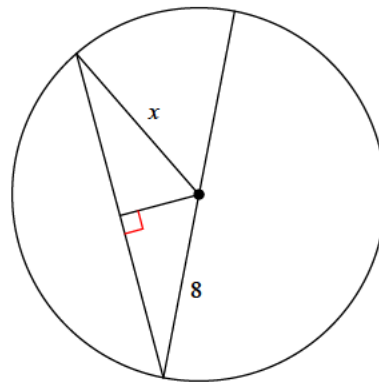


13)



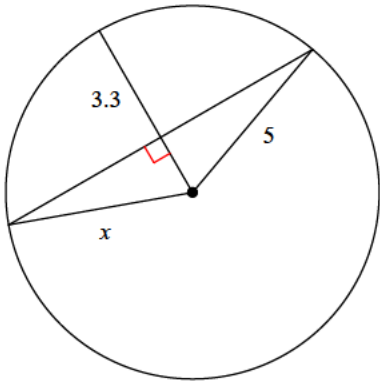
- A) 5.1 B) 10
C) 8.7 D) 9.7

14)



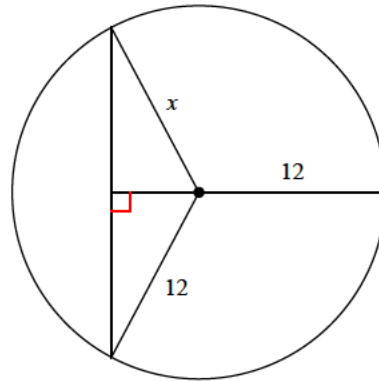
- A) 4.1 B) 5.4
C) 8 D) 6.3

15)



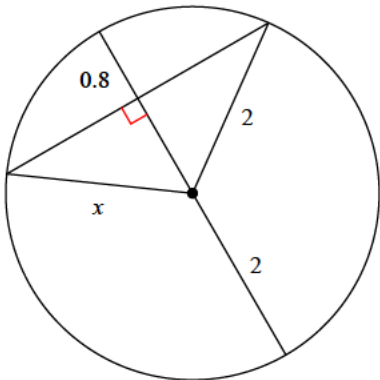
- A) 3.5 B) 4
C) 5 D) 3.3

16)



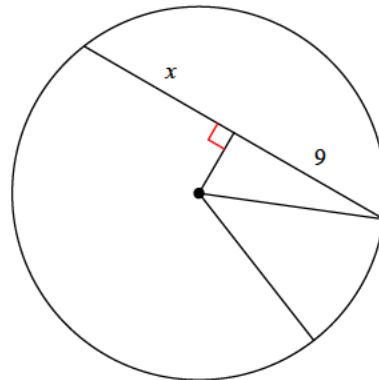
- A) 12 B) 10
C) 15 D) 8.6

17)



- A) 2.2 B) 2.7
C) 2 D) 2.8

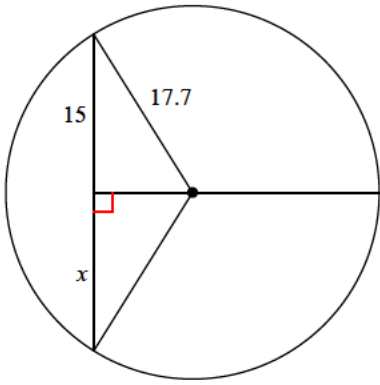
18)



- A) 11.9 B) 12.1
C) 6.3 D) 9

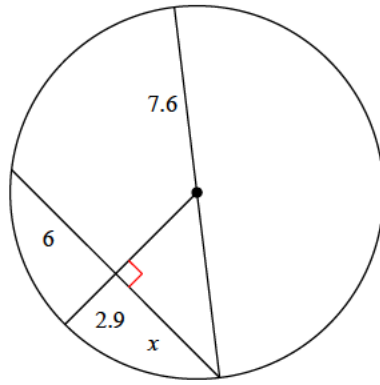


19)



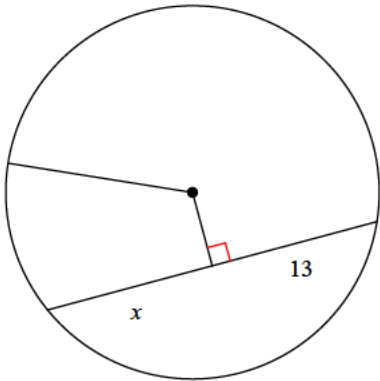
- A) 15 B) 9.3
C) 11.5 D) 14.3

20)



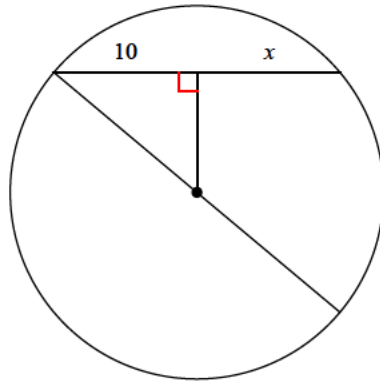
- A) 5.4 B) 5.6
C) 6 D) 6.3

21)



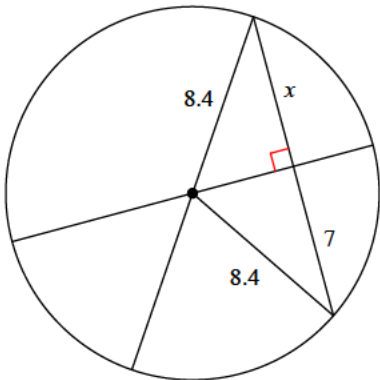
- A) 18.9 B) 13
C) 6.5 D) 10.5

22)



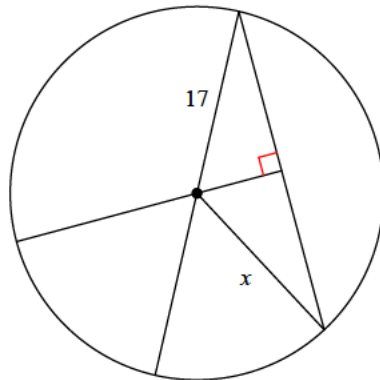
- A) 14.2 B) 8.4
C) 7.8 D) 10

23)



- A) 8.9 B) 7
C) 10.2 D) 3.5

24)



- A) 14.9 B) 20.5
C) 13 D) 17



Answers to Assignment (ID: 5)

- 1) B
- 5) D
- 9) D
- 13) B
- 17) C
- 21) B

- 2) C
- 6) A
- 10) B
- 14) C
- 18) D
- 22) D

- 3) B
- 7) D
- 11) A
- 15) C
- 19) A
- 23) B

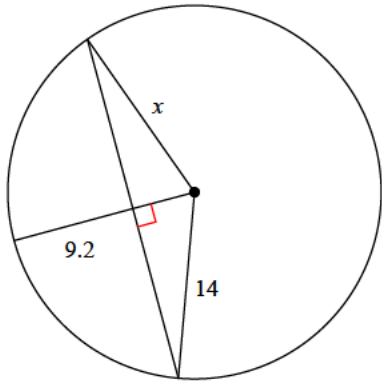
- 4) B
- 8) B
- 12) C
- 16) A
- 20) C
- 24) D



Assignment

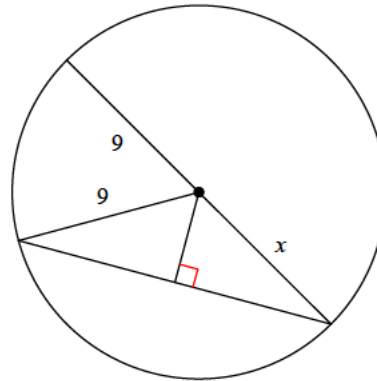
Find the length of the segment indicated. Round your answer to the nearest tenth if necessary.

1)



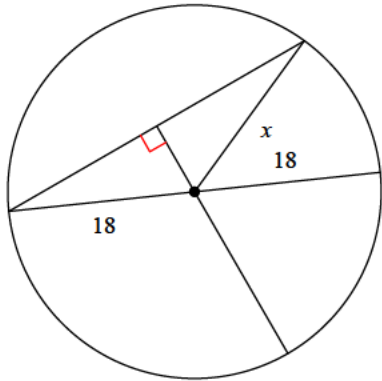
- A) 14
- B) 16.9
- C) 20.6
- D) 8.3

2)



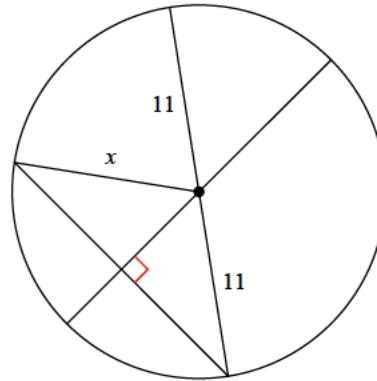
- A) 9
- B) 5.2
- C) 12.8
- D) 10.4

3)



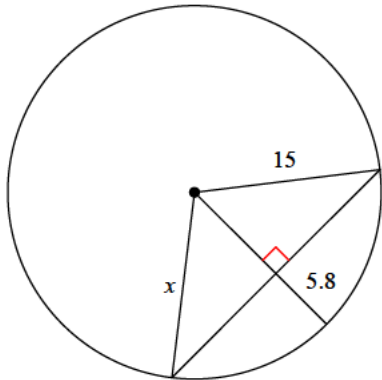
- A) 20.3
- B) 22.1
- C) 17.6
- D) 18

4)



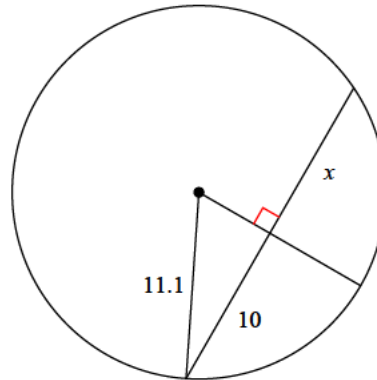
- A) 10.1
- B) 6.2
- C) 14.1
- D) 11

5)



- A) 7.6
- B) 18.8
- C) 14.2
- D) 15

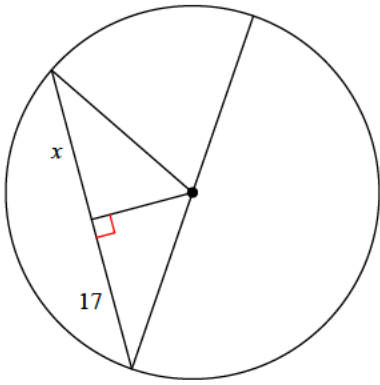
6)



- A) 13.2
- B) 6.4
- C) 10.2
- D) 10

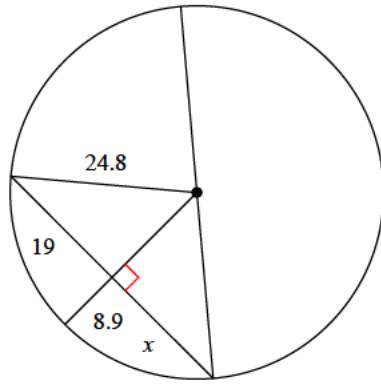


7)



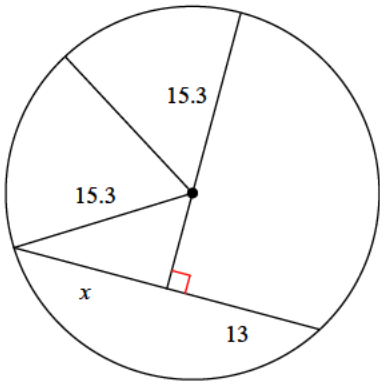
- A) 17 B) 17.3
C) 13.2 D) 14.2

8)



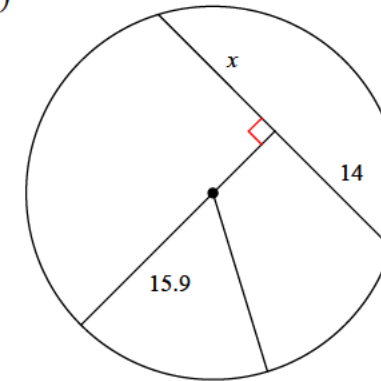
- A) 19.5 B) 19
C) 21 D) 22.2

9)



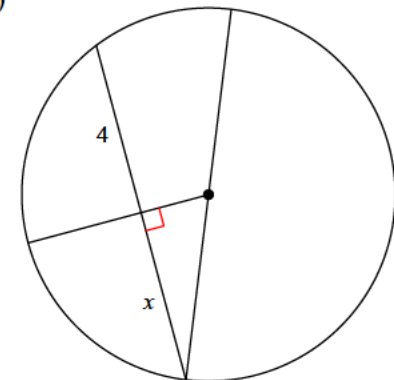
- A) 13.8 B) 16.2
C) 13.9 D) 13

10)



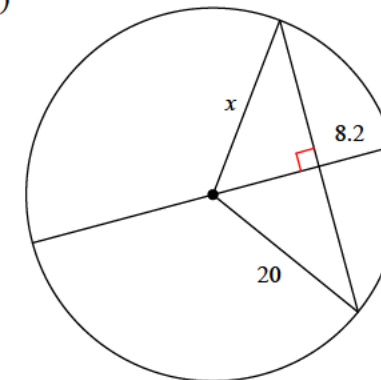
- A) 17.6 B) 7.4
C) 14 D) 20.5

11)



- A) 5.2 B) 4
C) 3.4 D) 2.9

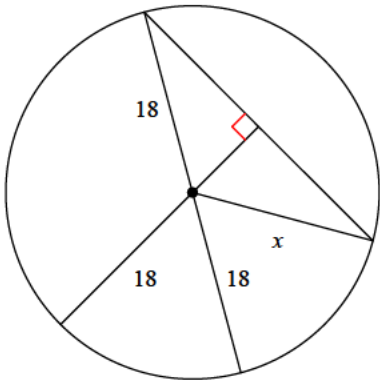
12)



- A) 17.9 B) 20
C) 16.4 D) 22.4

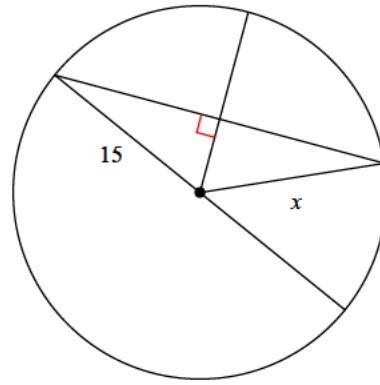


13)



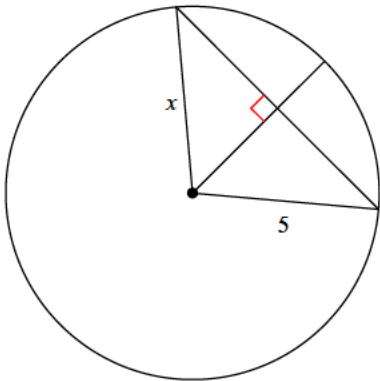
- A) 22 B) 18
C) 13 D) 14.7

14)



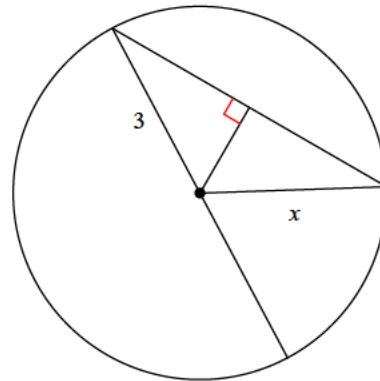
- A) 11.2 B) 17.8
C) 16.8 D) 15

15)



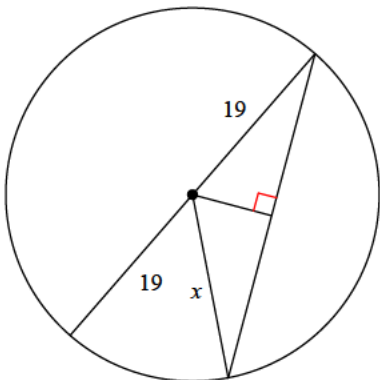
- A) 4 B) 5
C) 5.5 D) 2.6

16)



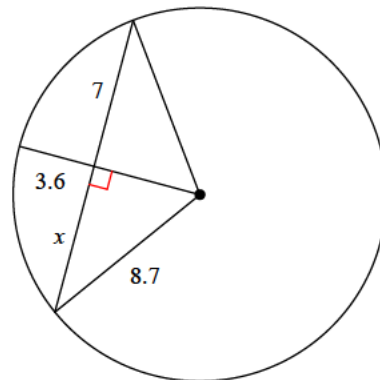
- A) 2.1 B) 2.7
C) 2.9 D) 3

17)



- A) 15.6 B) 14.4
C) 25.8 D) 19

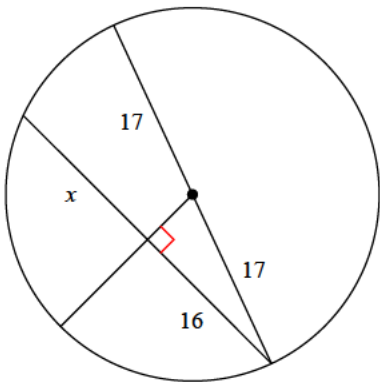
18)



- A) 9.9 B) 7
C) 5.8 D) 4.5

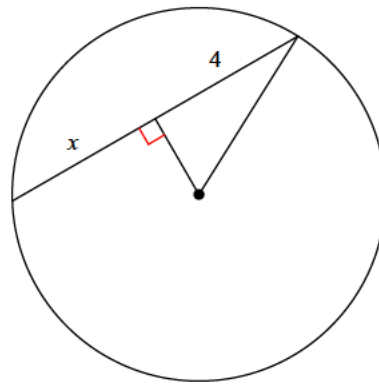


19)



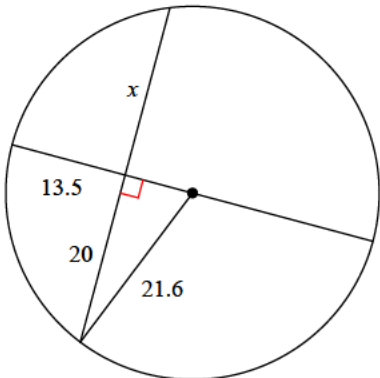
- A) 14.4 B) 16
C) 14.5 D) 20.3

20)



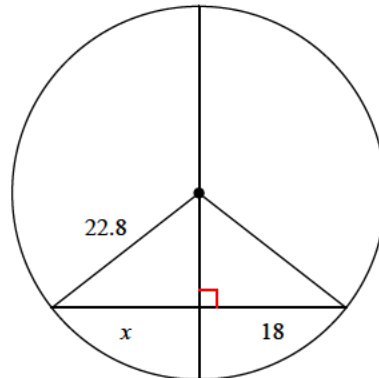
- A) 3.7 B) 4.7
C) 5.5 D) 4

21)



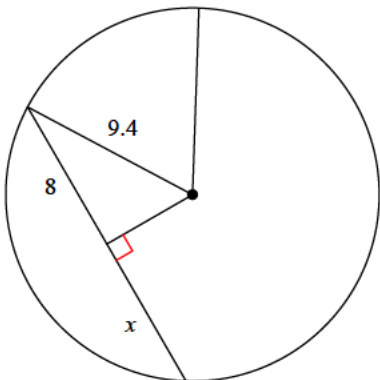
- A) 20 B) 21.7
C) 10.1 D) 18.6

22)



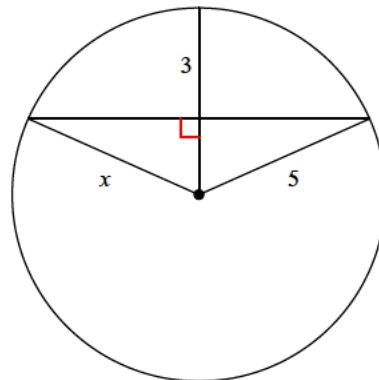
- A) 14.8 B) 25.8
C) 18 D) 16.9

23)



- A) 11.1 B) 11.8
C) 7.1 D) 8

24)



- A) 5 B) 6.6
C) 3 D) 7.5



Answers to Assignment (ID: 6)

1) A
5) D
9) D
13) B
17) D
21) A

2) A
6) D
10) C
14) D
18) B
22) C

3) D
7) A
11) B
15) B
19) B
23) D

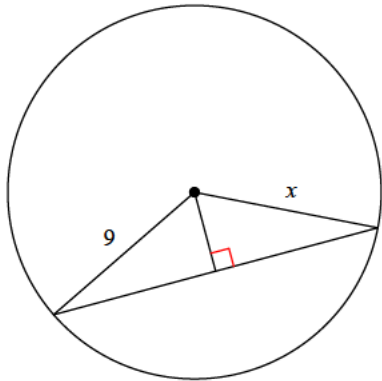
4) D
8) B
12) B
16) D
20) D
24) A



Assignment

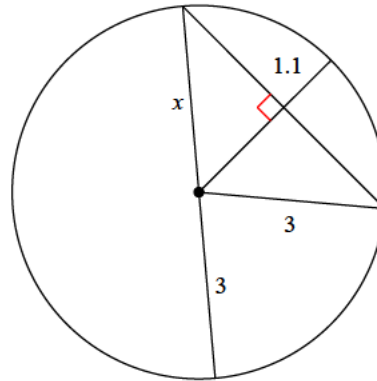
Find the length of the segment indicated. Round your answer to the nearest tenth if necessary.

1)



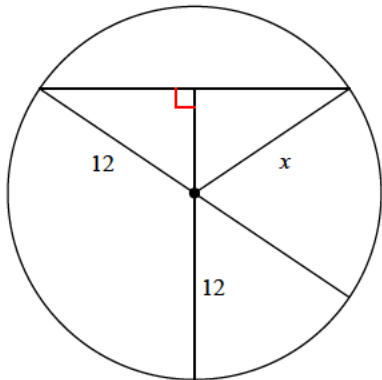
- A) 8.7
- B) 9
- C) 7.5
- D) 10.8

2)



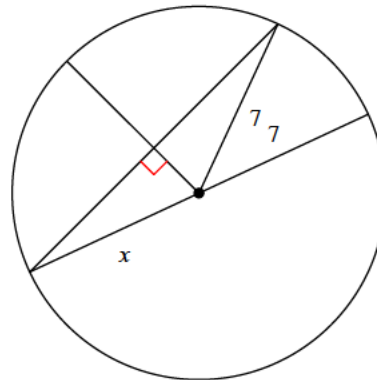
- A) 2.3
- B) 2.1
- C) 2.5
- D) 3

3)



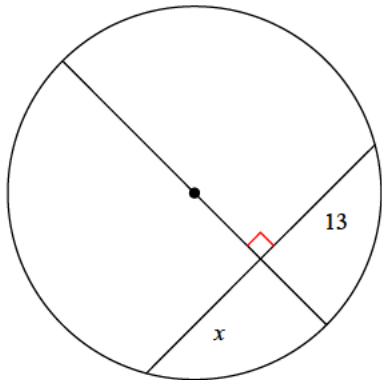
- A) 15.6
- B) 12
- C) 13.5
- D) 6.9

4)



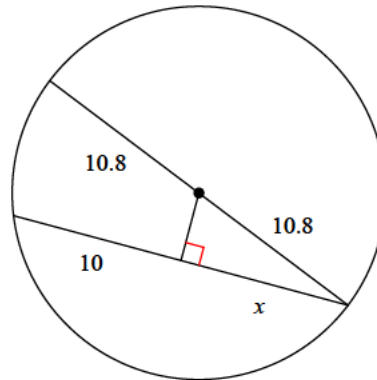
- A) 6.4
- B) 7
- C) 6.8
- D) 7.3

5)



- A) 13
- B) 9.5
- C) 6.9
- D) 9.4

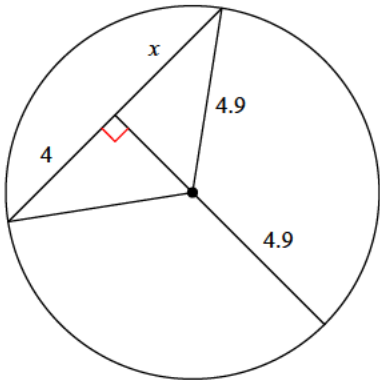
6)



- A) 9.2
- B) 10
- C) 13.4
- D) 7.3

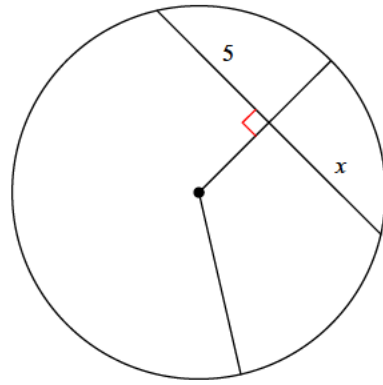


7)



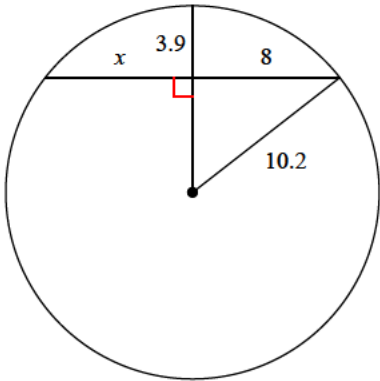
- A) 4.2 B) 4.3
C) 4 D) 5.6

8)



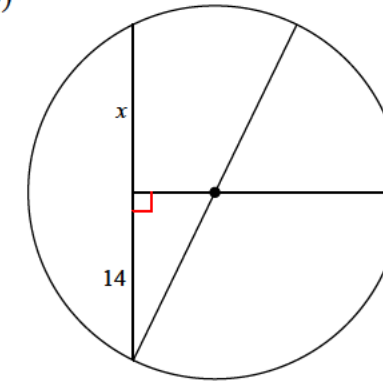
- A) 5 B) 7.4
C) 5.7 D) 6.8

9)



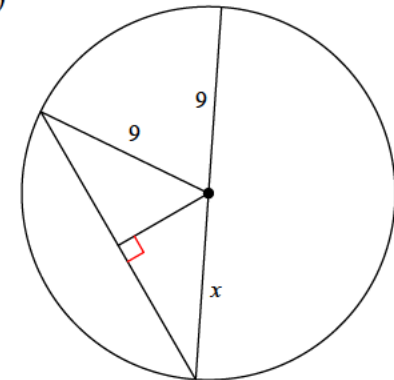
- A) 8 B) 9
C) 11.5 D) 7.8

10)



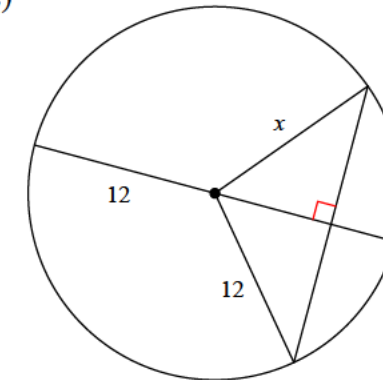
- A) 12 B) 17
C) 19 D) 14

11)



- A) 4.9 B) 9
C) 7.8 D) 8.8

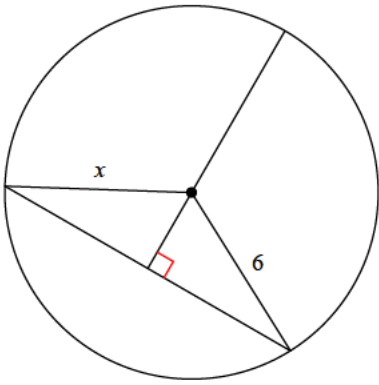
12)



- A) 11 B) 12.7
C) 12 D) 15.9

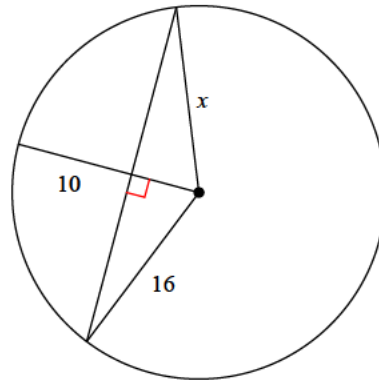


13)



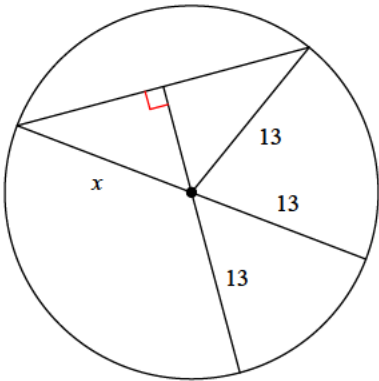
- A) 9 B) 5.4
C) 6 D) 4.6

14)



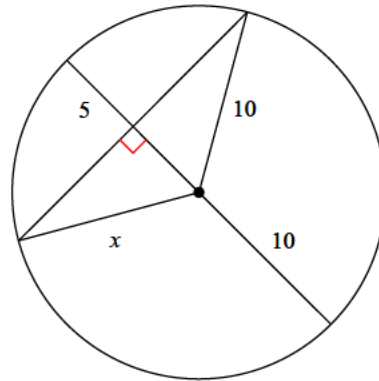
- A) 13.5 B) 16
C) 19.5 D) 14.4

15)



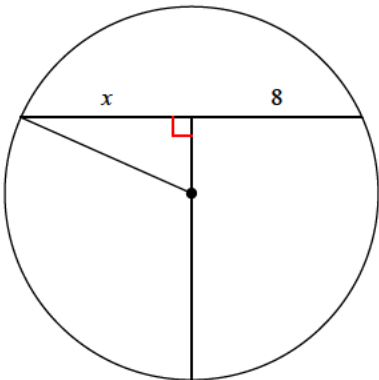
- A) 7.3 B) 9.8
C) 11.1 D) 13

16)



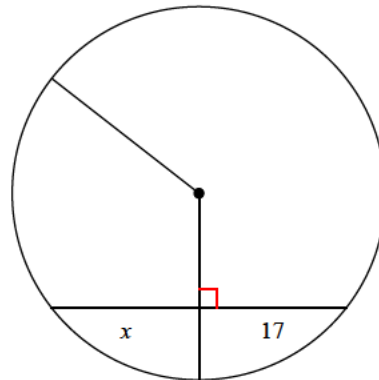
- A) 7.6 B) 6.4
C) 10 D) 6.2

17)



- A) 6.9 B) 11.3
C) 8 D) 7.7

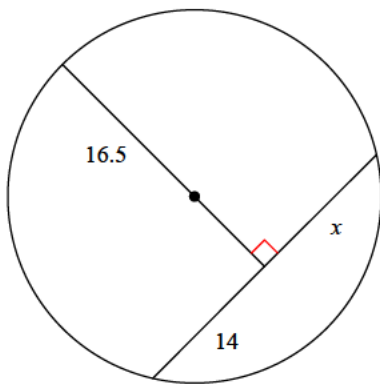
18)



- A) 17 B) 11.9
C) 13 D) 21.9

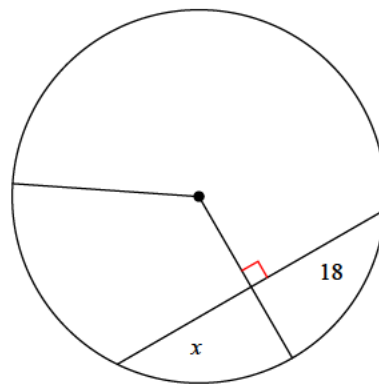


19)



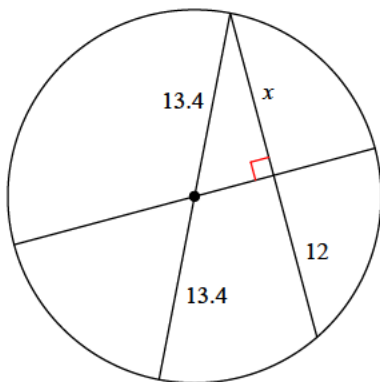
- A) 7.8 B) 20
C) 14 D) 13.3

20)



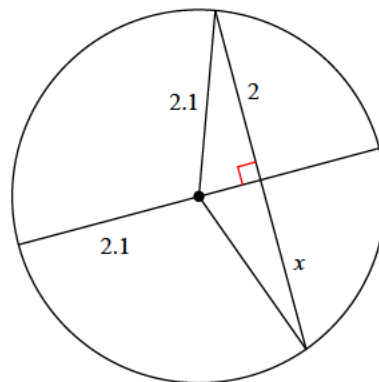
- A) 11.4 B) 9.9
C) 26.3 D) 18

21)



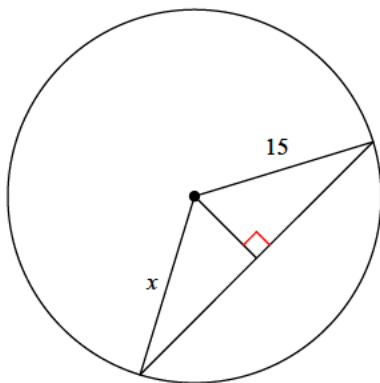
- A) 17.4 B) 12.2
C) 6.6 D) 12

22)



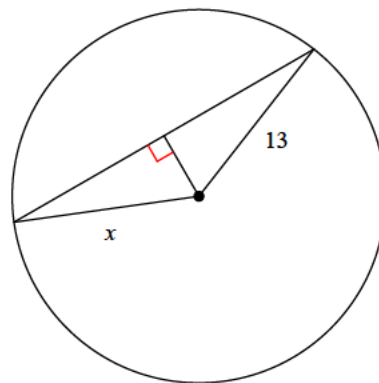
- A) 2.4 B) 3
C) 2 D) 2.3

23)



- A) 18 B) 13.4
C) 16.9 D) 15

24)



- A) 12.4 B) 12
C) 18.1 D) 13



Answers to Assignment (ID: 7)

1) B
5) A
9) A
13) C
17) C
21) D

2) D
6) B
10) D
14) B
18) A
22) C

3) B
7) C
11) B
15) D
19) C
23) D

4) B
8) A
12) C
16) C
20) D
24) D

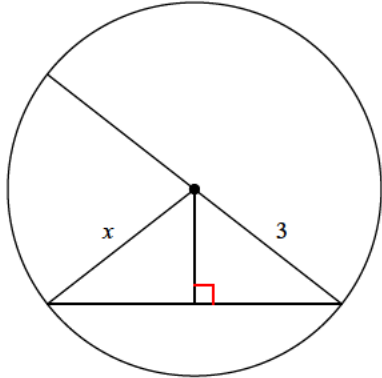


Assignment

Date _____ Period _____

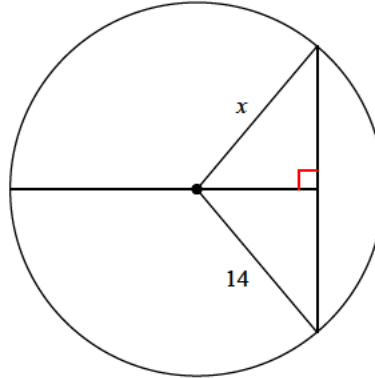
Find the length of the segment indicated. Round your answer to the nearest tenth if necessary.

1)



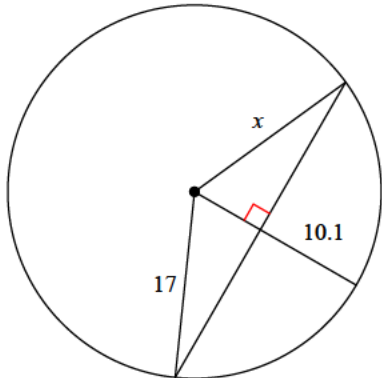
- A) 2.5
- B) 2.1
- C) 4.1
- D) 3

2)



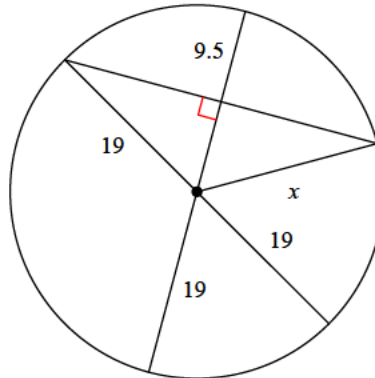
- A) 15.6
- B) 14
- C) 8.9
- D) 15.9

3)



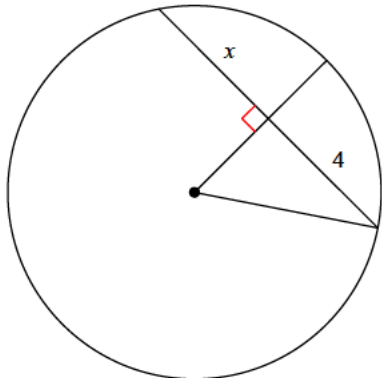
- A) 17.2
- B) 17
- C) 16.9
- D) 24.2

4)



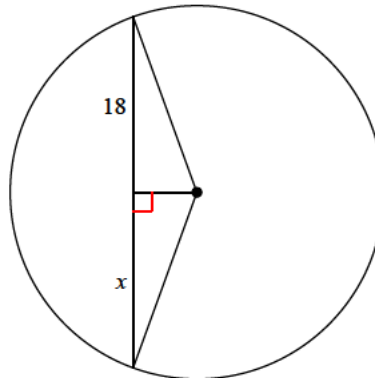
- A) 23.3
- B) 27.1
- C) 19.4
- D) 19

5)



- A) 5.8
- B) 5.2
- C) 4
- D) 5.5

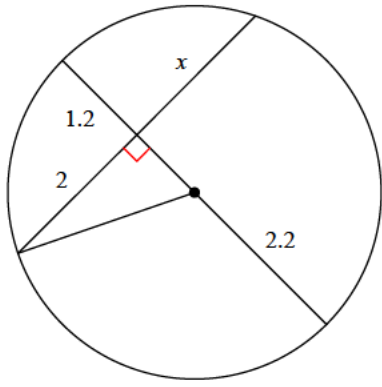
6)



- A) 18
- B) 15.3
- C) 11.9
- D) 9.2

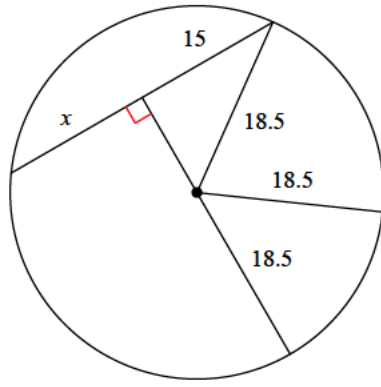


7)



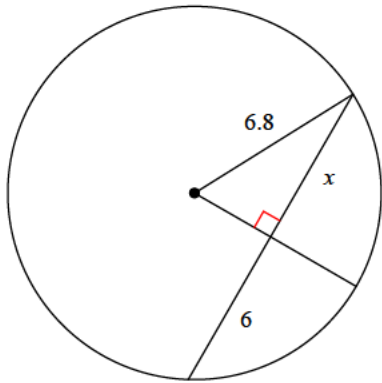
- A) 2.1 B) 2
C) 2.5 D) 2.8

8)



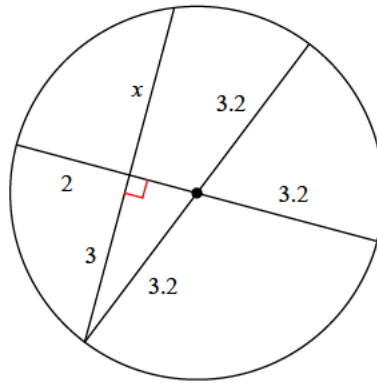
- A) 15 B) 8.9
C) 10.7 D) 15.3

9)



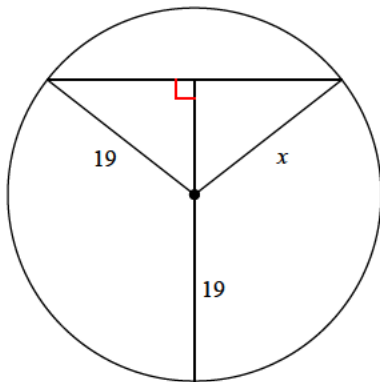
- A) 6.6 B) 8.9
C) 5.2 D) 6

10)



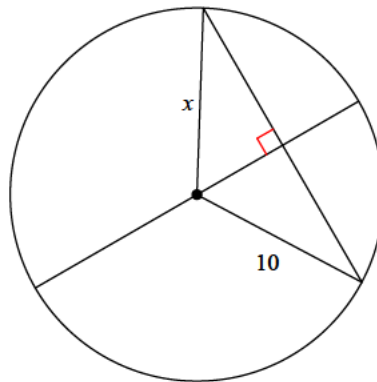
- A) 3 B) 2.3
C) 2.8 D) 4.5

11)



- A) 15.3 B) 27.6
C) 19 D) 19.8

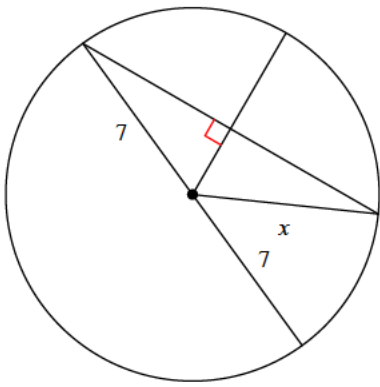
12)



- A) 10 B) 6.5
C) 10.3 D) 7.7

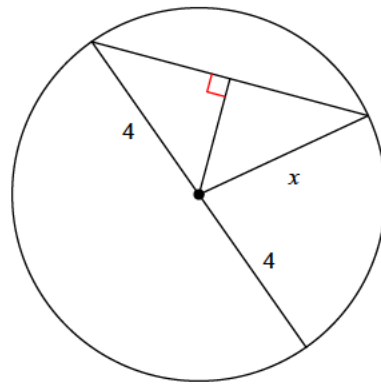


13)



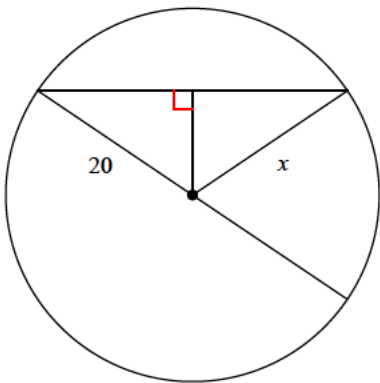
- A) 9.5 B) 7
C) 5 D) 8.3

14)



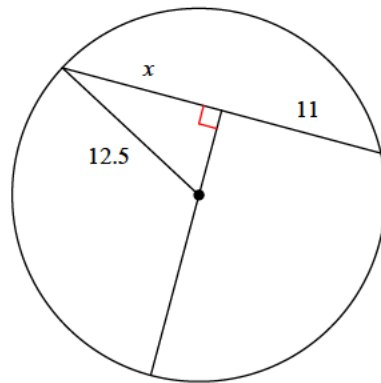
- A) 4 B) 3.2
C) 4.9 D) 3.7

15)



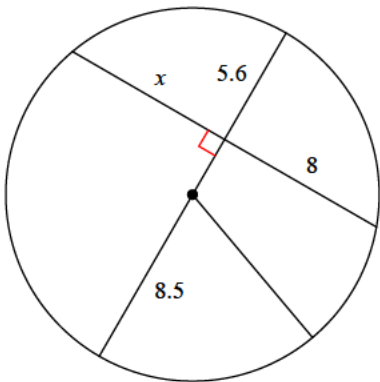
- A) 27.6 B) 20
C) 16.4 D) 27.2

16)



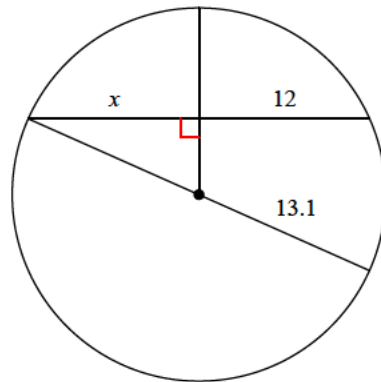
- A) 11 B) 15.9
C) 13.2 D) 11.8

17)



- A) 9.2 B) 10.1
C) 8.1 D) 8

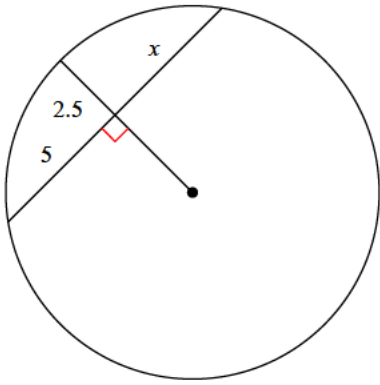
18)



- A) 12 B) 12.9
C) 17.4 D) 6.1

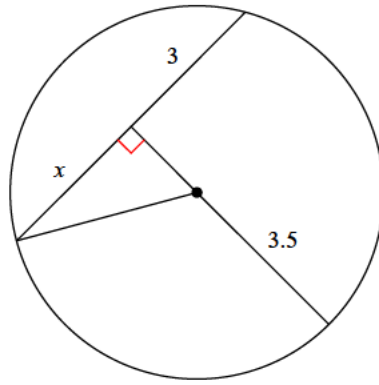


19)



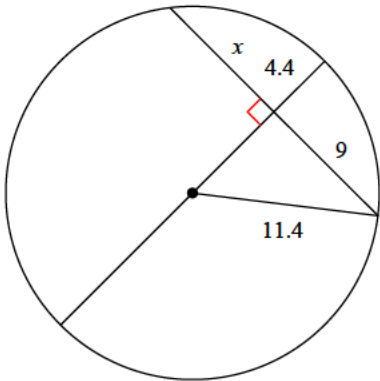
- A) 2.8 B) 5
C) 5.9 D) 2.7

20)



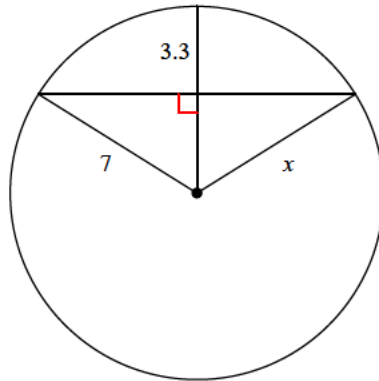
- A) 3 B) 2.2
C) 4.1 D) 3.2

21)



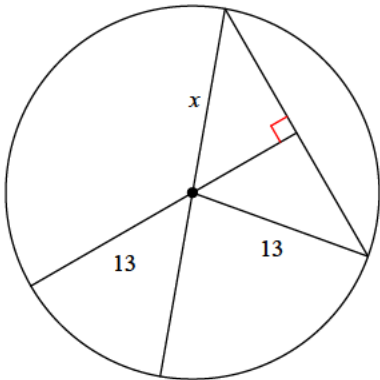
- A) 12.9 B) 5.3
C) 9.7 D) 9

22)



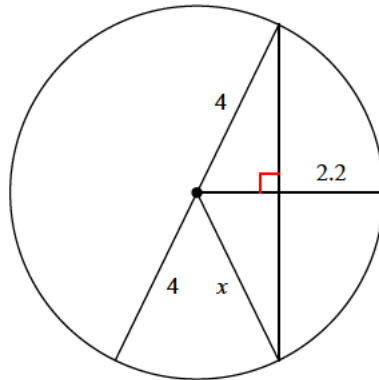
- A) 7 B) 4.8
C) 3.9 D) 6.9

23)



- A) 13 B) 8.7
C) 7.3 D) 12.1

24)



- A) 3.7 B) 5.5
C) 5.1 D) 4



Answers to Assignment (ID: 8)

1) D
5) C
9) D
13) B
17) D
21) D

2) B
6) A
10) A
14) A
18) A
22) A

3) B
7) B
11) C
15) B
19) B
23) A

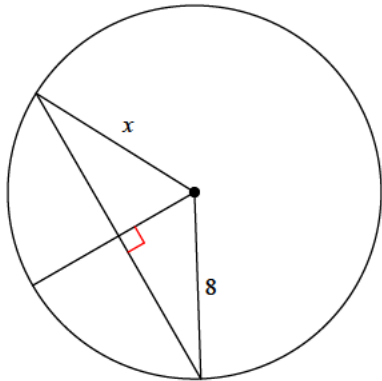
4) D
8) A
12) A
16) A
20) A
24) D



Assignment

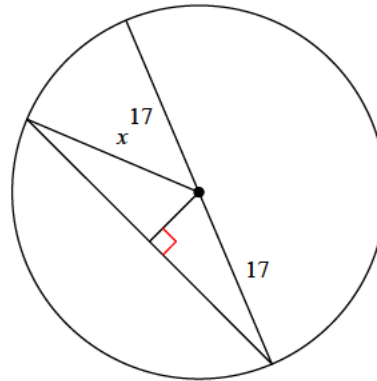
Find the length of the segment indicated. Round your answer to the nearest tenth if necessary.

1)



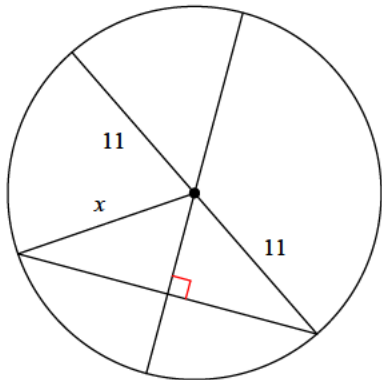
- A) 9.6
- B) 8
- C) 4.6
- D) 4.3

2)



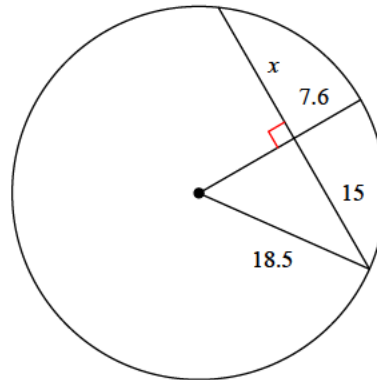
- A) 13.1
- B) 16.9
- C) 20.3
- D) 17

3)



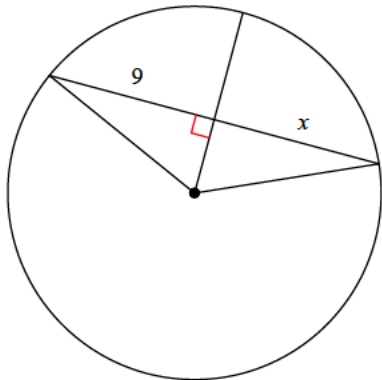
- A) 11
- B) 14.5
- C) 9.1
- D) 14.9

4)



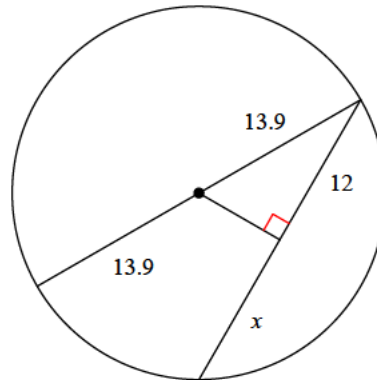
- A) 13.8
- B) 16.2
- C) 8.1
- D) 15

5)



- A) 12.9
- B) 9
- C) 6.7
- D) 6.3

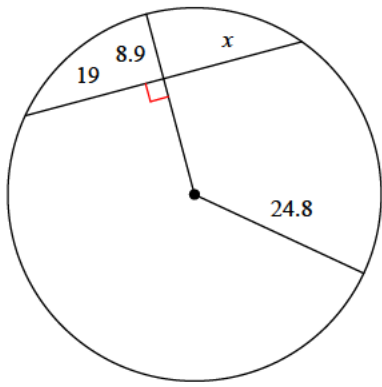
6)



- A) 6.8
- B) 15.7
- C) 12.1
- D) 12

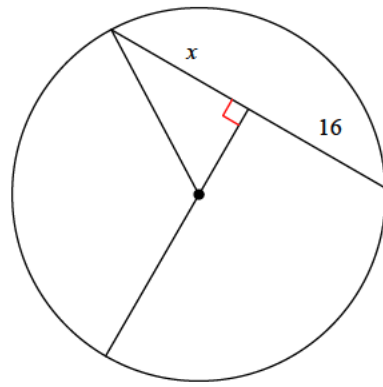


7)



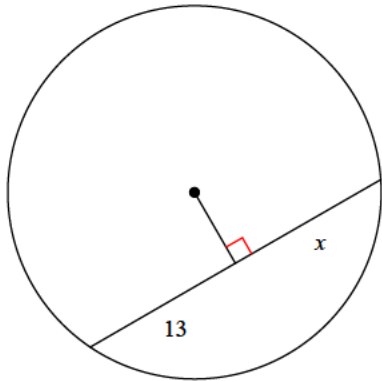
- A) 13.5 B) 12.6
C) 19 D) 24.8

8)



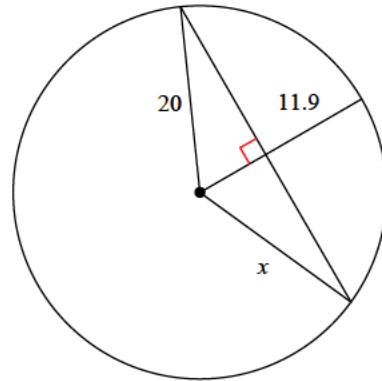
- A) 16 B) 14.8
C) 23.5 D) 9.9

9)



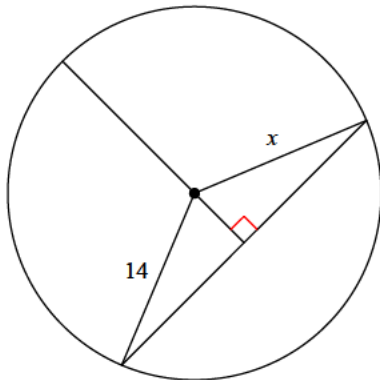
- A) 11.6 B) 9.5
C) 13 D) 9.9

10)



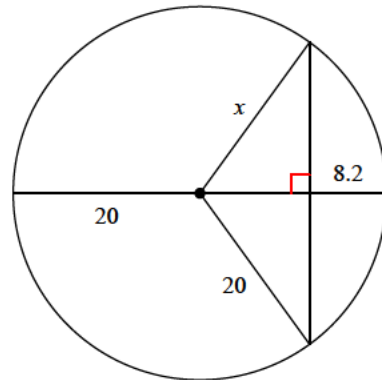
- A) 20 B) 25.8
C) 19.1 D) 11.3

11)



- A) 18.8 B) 18.3
C) 20.3 D) 14

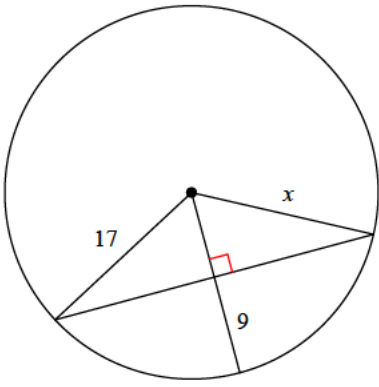
12)



- A) 19.4 B) 18
C) 20 D) 12.5

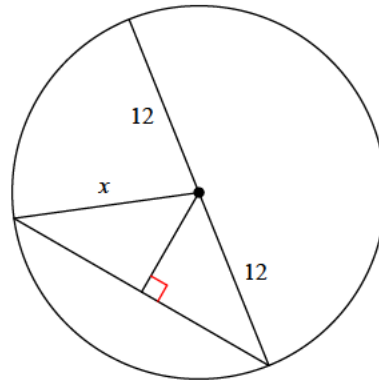


13)



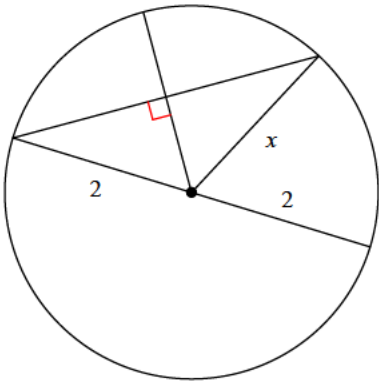
- A) 24.6 B) 8.7
C) 8.5 D) 17

14)



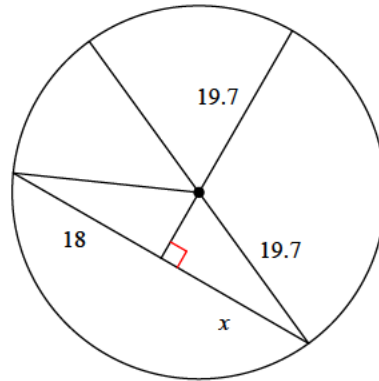
- A) 12.6 B) 8.3
C) 12 D) 12.9

15)



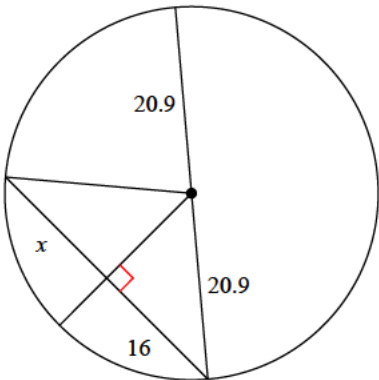
- A) 2.4 B) 2.1
C) 2.5 D) 2

16)



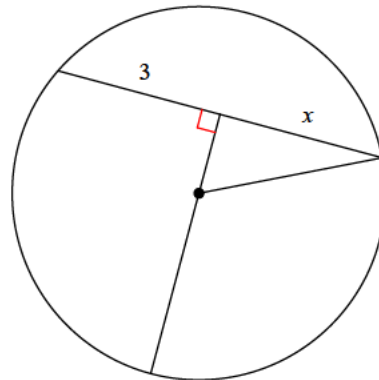
- A) 22 B) 23
C) 18 D) 19.8

17)



- A) 19.2 B) 16
C) 13.5 D) 16.2

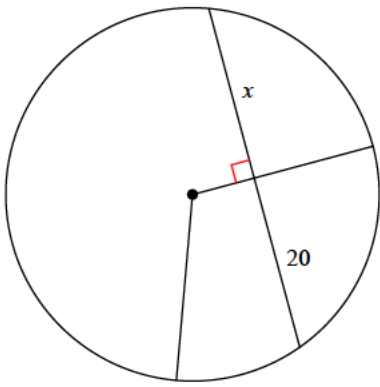
18)



- A) 3.7 B) 2.1
C) 3 D) 3.1

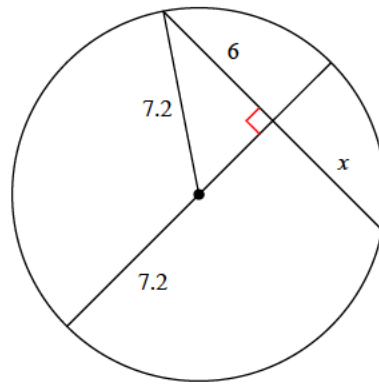


19)



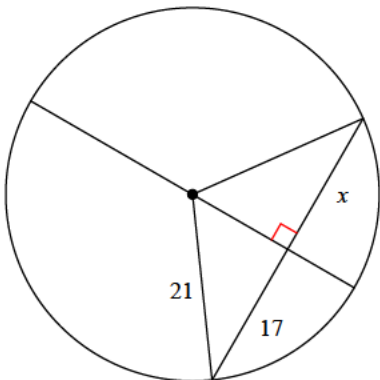
- A) 20 B) 23.1
C) 13.2 D) 27.8

20)



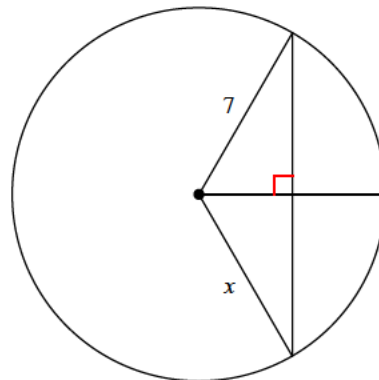
- A) 7.1 B) 5.1
C) 4.2 D) 6

21)



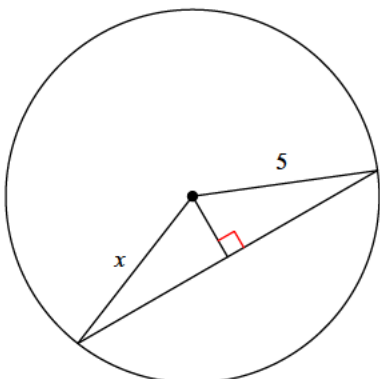
- A) 17 B) 24.1
C) 21.2 D) 23

22)



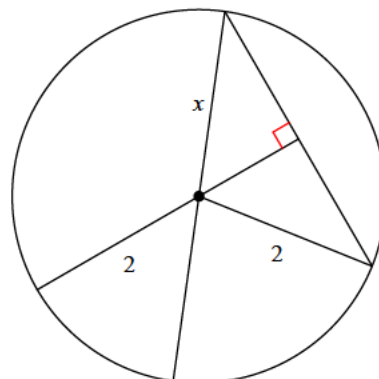
- A) 6.1 B) 6.5
C) 7 D) 5.5

23)



- A) 3.1 B) 6.2
C) 5 D) 4.6

24)



- A) 2 B) 2.7
C) 2.3 D) 2.1



Answers to Assignment (ID: 9)

1) B
5) B
9) C
13) D
17) B
21) A

2) D
6) D
10) A
14) C
18) C
22) C

3) A
7) C
11) D
15) D
19) A
23) C

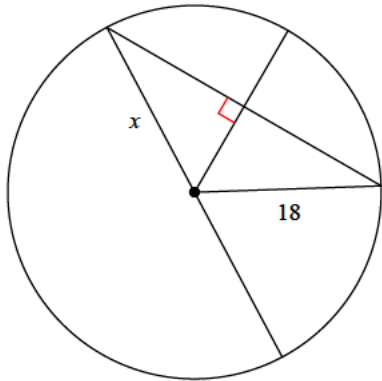
4) D
8) A
12) C
16) C
20) D
24) A



Assignment

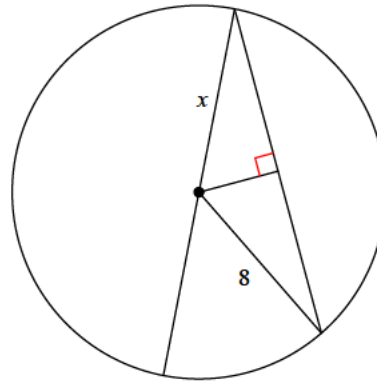
Find the length of the segment indicated. Round your answer to the nearest tenth if necessary.

1)



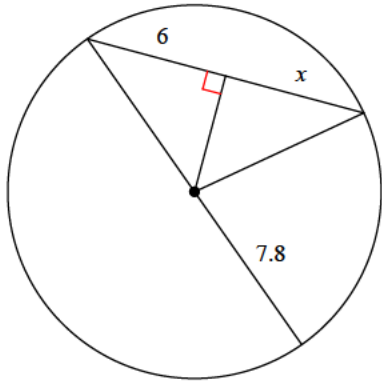
- A) 20.8
- B) 17.2
- C) 18
- D) 20.6

2)



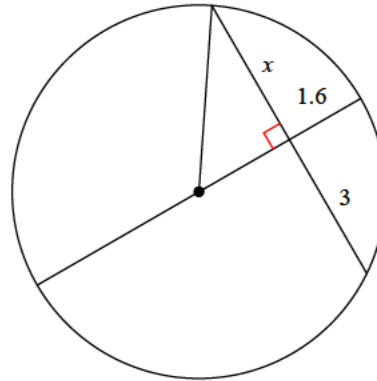
- A) 5.4
- B) 4.1
- C) 10
- D) 8

3)



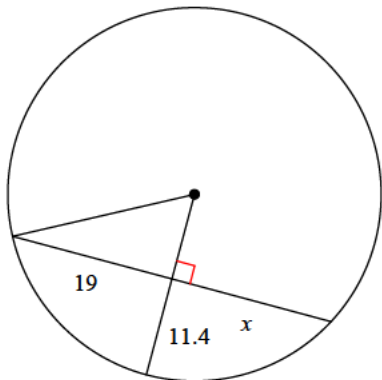
- A) 6.2
- B) 7.2
- C) 4.5
- D) 6

4)



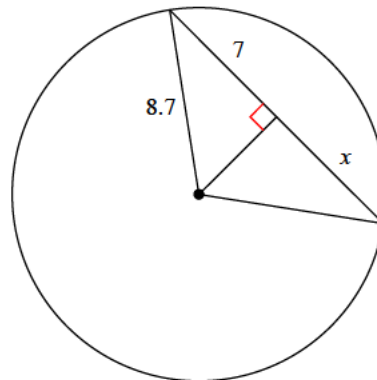
- A) 3.3
- B) 3.1
- C) 3
- D) 2.4

5)



- A) 28.1
- B) 12.1
- C) 19
- D) 10.7

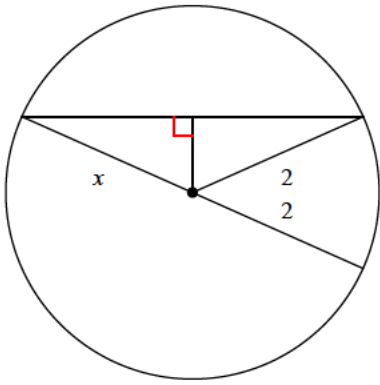
6)



- A) 7.4
- B) 3.7
- C) 6.2
- D) 7

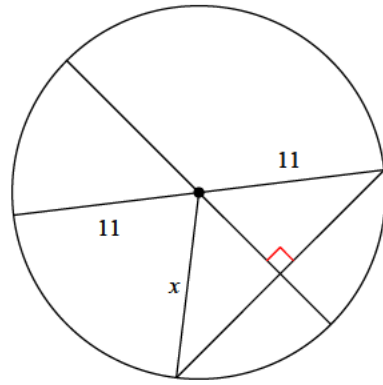


7)



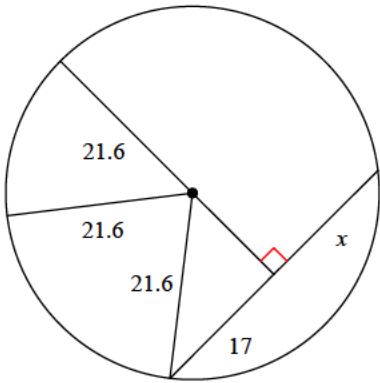
- A) 2.9 B) 2.8
C) 2.1 D) 2

8)



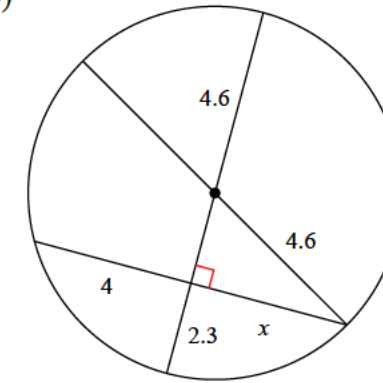
- A) 11 B) 9.6
C) 11.1 D) 15.8

9)



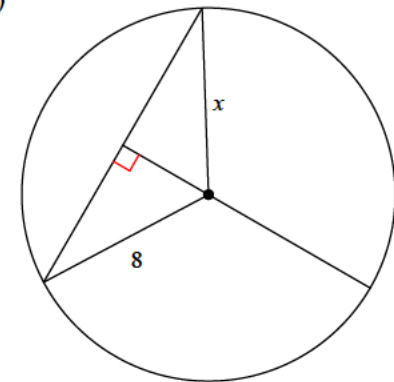
- A) 17 B) 21.1
C) 15.2 D) 12.5

10)



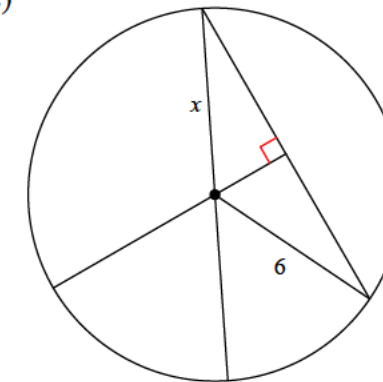
- A) 3.4 B) 3.9
C) 3.7 D) 4

11)



- A) 9.1 B) 9.2
C) 11.6 D) 8

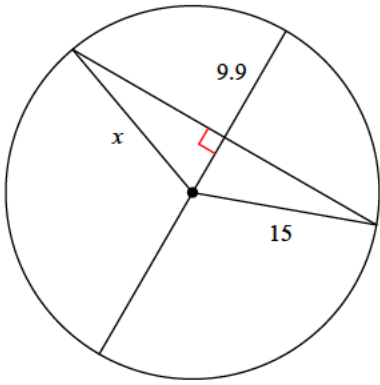
12)



- A) 6 B) 7.9
C) 7.5 D) 6.4

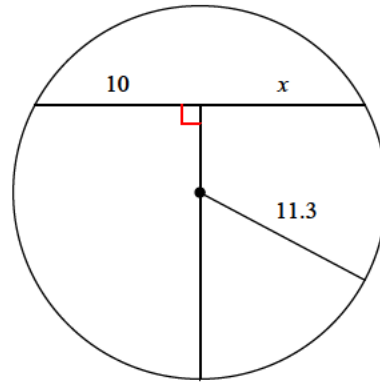


13)



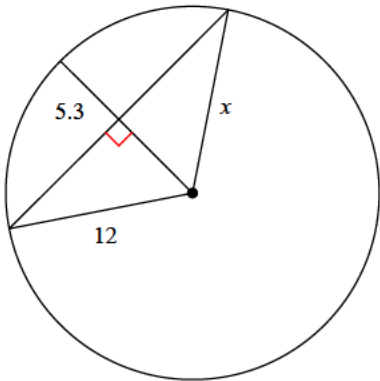
- A) 11.1 B) 11.2
C) 15 D) 10.7

14)



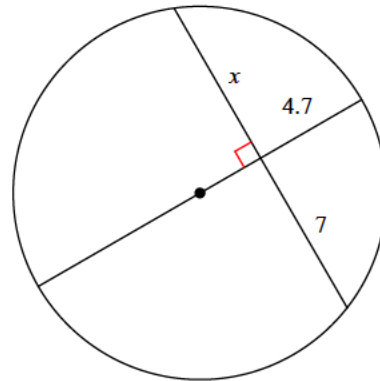
- A) 10 B) 7.6
C) 5.5 D) 11.6

15)



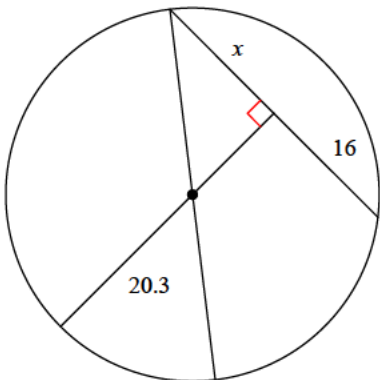
- A) 17.2 B) 13
C) 15.3 D) 12

16)



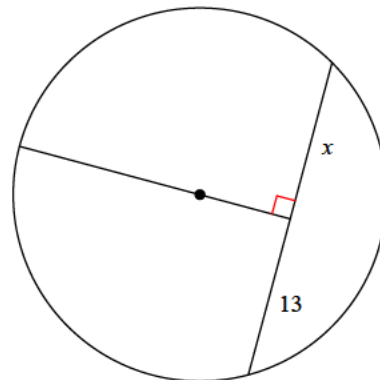
- A) 5.8 B) 6
C) 7 D) 8.6

17)



- A) 8.4 B) 16
C) 22.7 D) 22.9

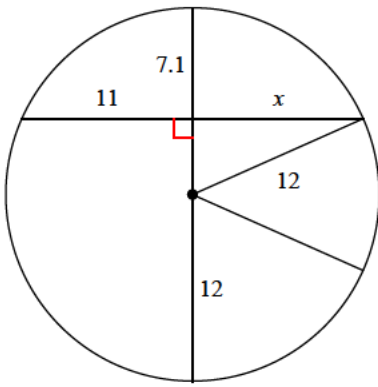
18)



- A) 12.9 B) 14.3
C) 9.3 D) 13

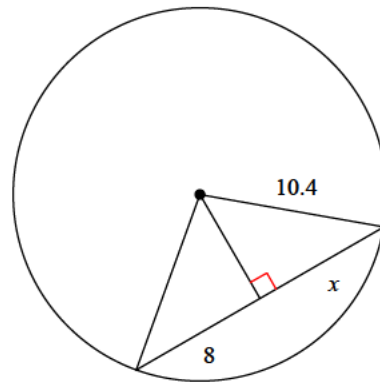


19)



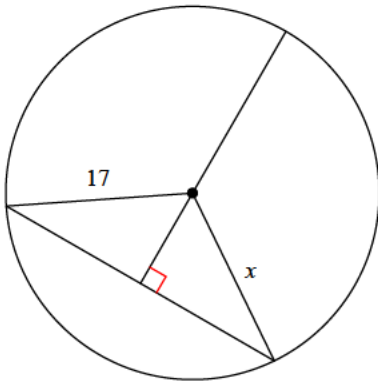
- A) 5.7 B) 11
C) 13.5 D) 10.9

20)



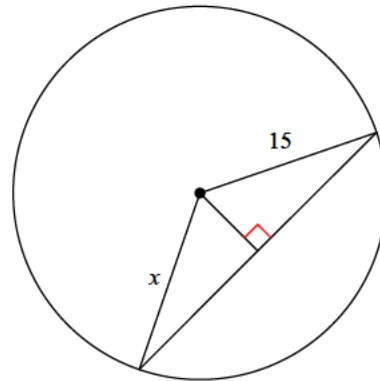
- A) 4.4 B) 8
C) 5.9 D) 7.4

21)



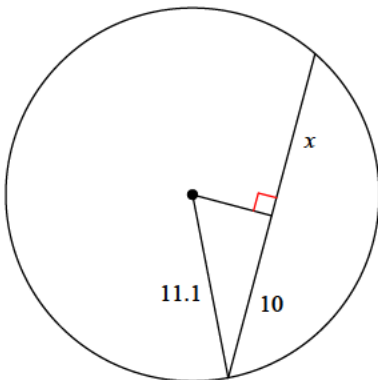
- A) 17.3 B) 17.2
C) 17 D) 18.6

22)



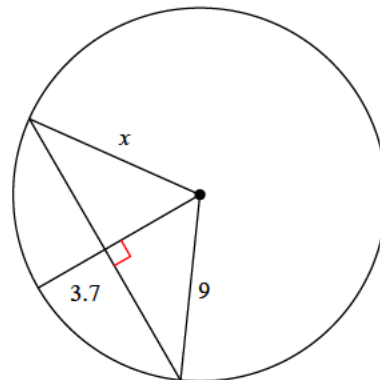
- A) 13.6 B) 15
C) 8.6 D) 18.7

23)



- A) 6.9 B) 8.3
C) 10 D) 12.4

24)



- A) 10.9 B) 7.3
C) 9 D) 6.7



Answers to Assignment (ID: 10)

1) C
5) C
9) A
13) C
17) B
21) C

2) D
6) D
10) D
14) A
18) D
22) B

3) D
7) D
11) D
15) D
19) B
23) C

4) C
8) A
12) A
16) C
20) B
24) C

